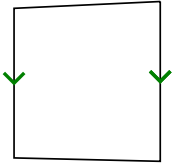




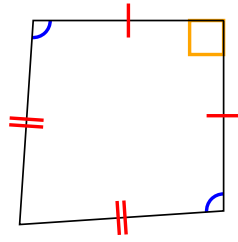
Déterminer si la forme représentée est un Q uadrilatéral, K ite, T rapezoid, P arallelogram, R h ombus, R ectangle ou S Quare (peut être plus d'un).

Réponses

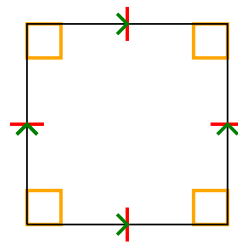
1)



2)



3)



1. _____

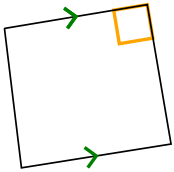
2. _____

3. _____

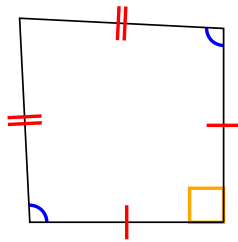
4. _____

5. _____

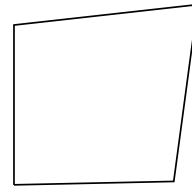
4)



5)



6)



6. _____

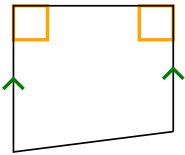
7. _____

8. _____

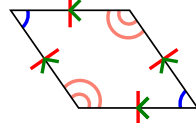
9. _____

10. _____

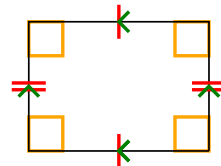
7)



8)



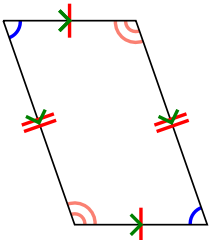
9)



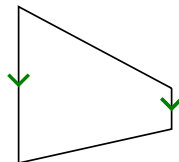
11. _____

12. _____

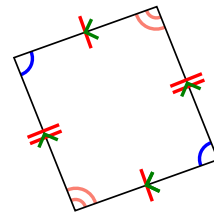
10)



11)



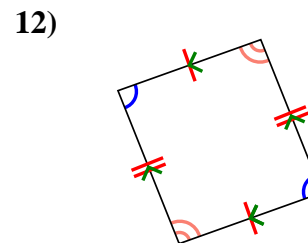
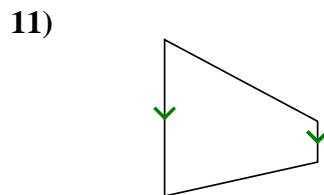
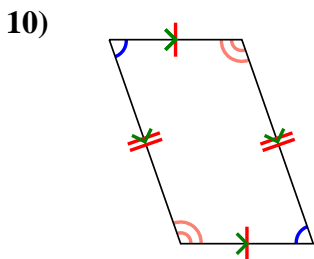
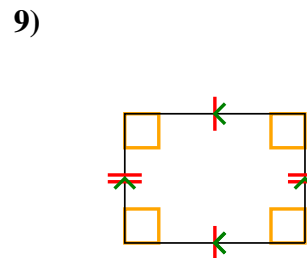
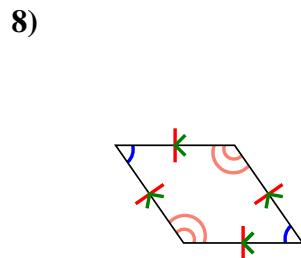
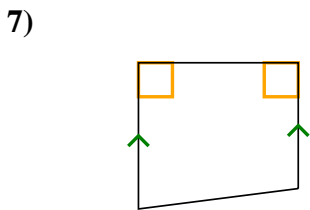
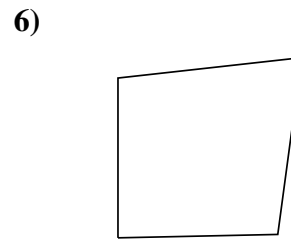
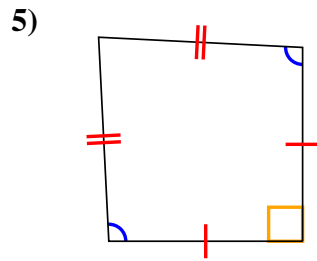
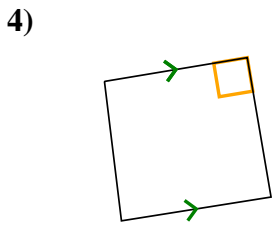
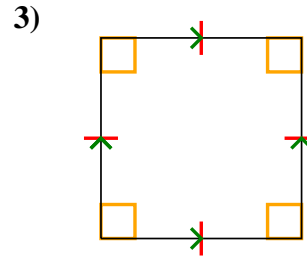
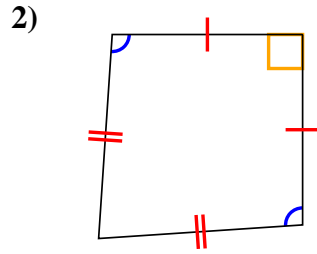
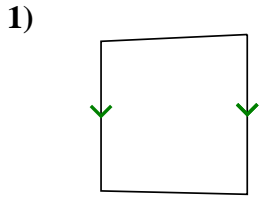
12)





Déterminer si la forme représentée est un **Q**uadrilatère, **K**ite, **T**rapezoid, **P**arallélogramme, **R**hombus, **R**ectangle ou **S**quare (peut être plus d'un).

Réponses



- 1. Q,T
- 2. Q,K
- 3. Q,P,H,R,S
- 4. Q,T
- 5. Q,K
- 6. Q
- 7. Q,T
- 8. Q,P,H
- 9. Q,P,R
- 10. Q,P
- 11. Q,T
- 12. Q,P