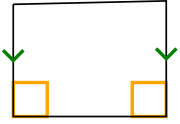





Déterminer si la forme représentée est un Q uadrilateral, K ite, T rapezoid, P arallelogram, R h ombus, R ectangle ou S Quare (peut être plus d'un).

**Réponses**

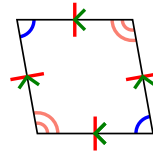
1)



2)



3)



1. \_\_\_\_\_

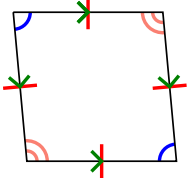
2. \_\_\_\_\_

3. \_\_\_\_\_

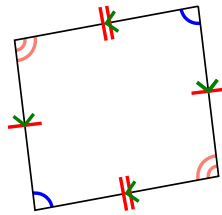
4. \_\_\_\_\_

5. \_\_\_\_\_

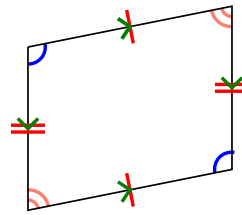
4)



5)



6)



6. \_\_\_\_\_

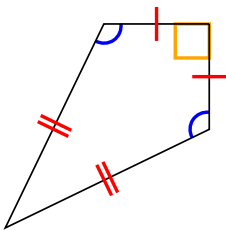
7. \_\_\_\_\_

8. \_\_\_\_\_

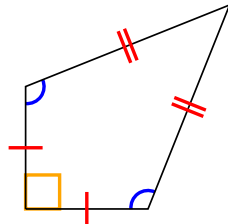
9. \_\_\_\_\_

10. \_\_\_\_\_

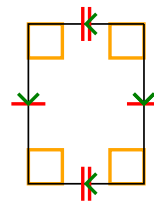
7)



8)



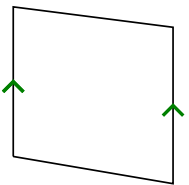
9)



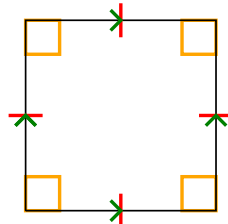
11. \_\_\_\_\_

12. \_\_\_\_\_

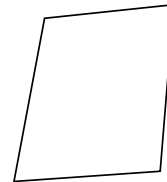
10)



11)



12)

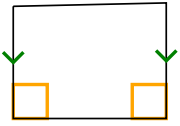





Déterminer si la forme représentée est un Q uadrilatéral, K ite, T rapezoid, P arallelogram, R h ombus, R ectangle ou S Quare (peut être plus d'un).

**Réponses**

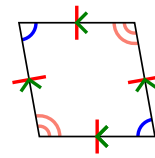
1)



2)

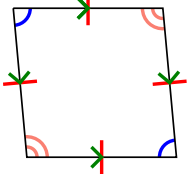


3)

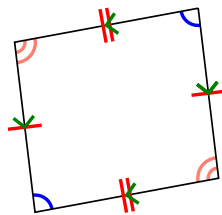


1. **Q,T**

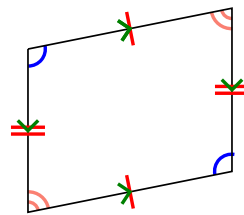
4)



5)



6)



2. **Q**

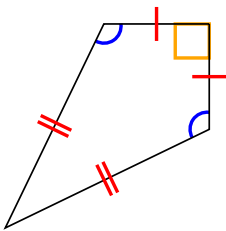
3. **Q,P,H**

4. **Q,P,H**

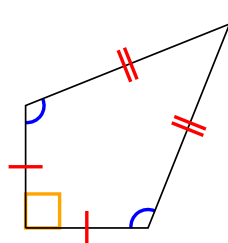
5. **Q,P**

6. **Q,P**

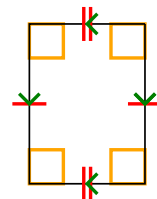
7)



8)



9)



7. **Q,K**

8. **Q,K**

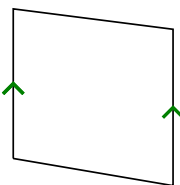
9. **Q,P,R**

10. **Q,T**

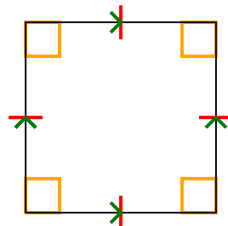
11. **Q,P,H,R,S**

12. **Q**

10)



11)



12)

