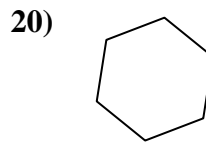
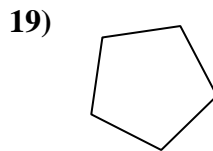
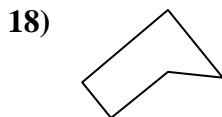
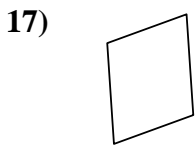
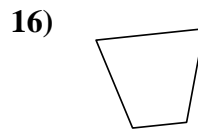
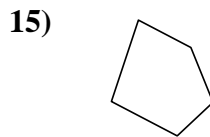
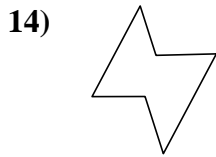
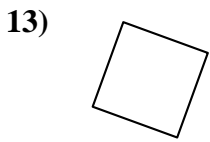
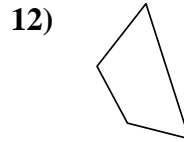
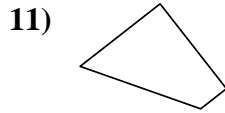
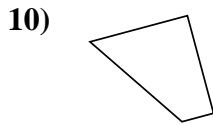

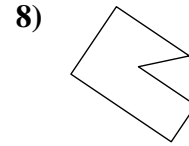
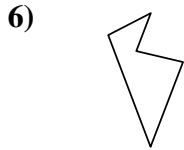
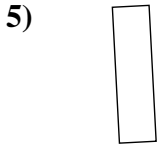
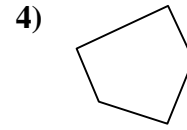
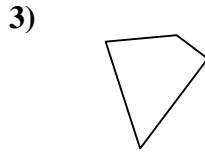
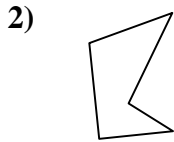
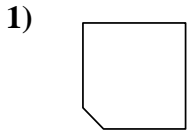




Déterminez si la figure est un quadrilatère (oui ou non).

Réponses



1. _____

2. _____

3. _____

4. _____

5. _____

6. _____

7. _____

8. _____

9. _____

10. _____

11. _____

12. _____

13. _____

14. _____

15. _____

16. _____

17. _____

18. _____

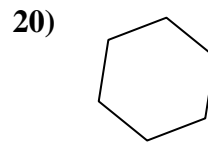
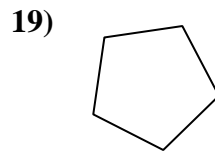
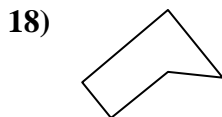
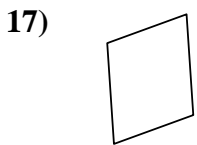
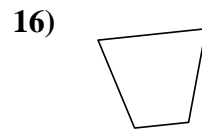
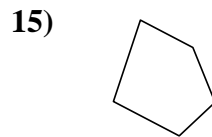
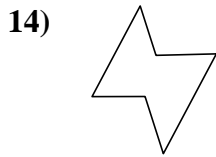
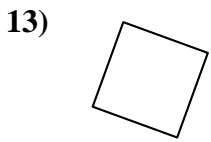
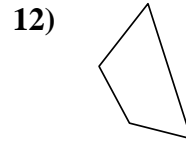
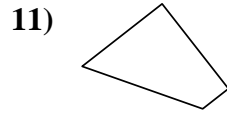
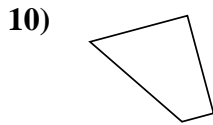

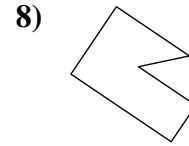
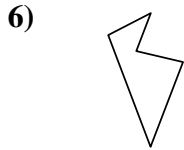
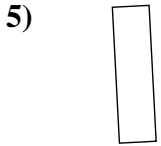
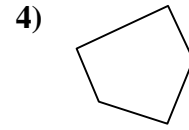
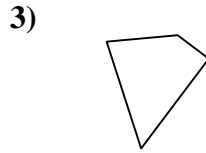
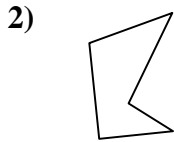
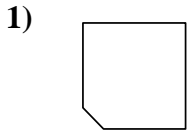
19. _____

20. _____



Déterminez si la figure est un quadrilatère (oui ou non).

Réponses



1. non

2. non

3. oui

4. non

5. oui

6. non

7. oui

8. non

9. oui

10. oui

11. oui

12. oui

13. oui

14. non

15. non

16. oui

17. oui

18. non

19. non

20. non