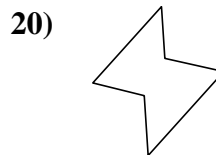
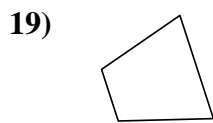
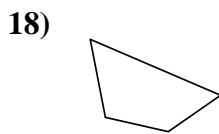
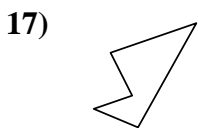
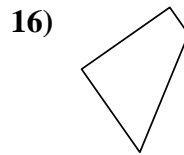
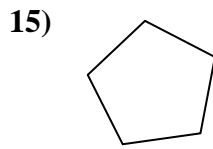
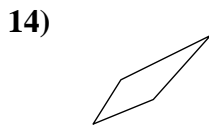
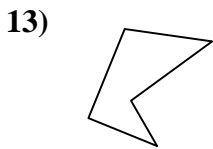
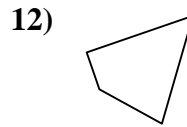
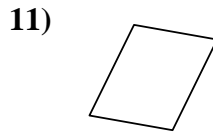
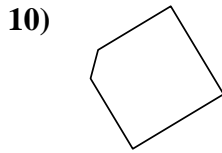
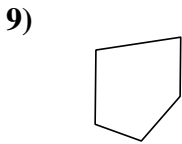
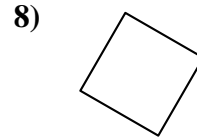
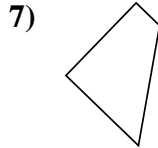
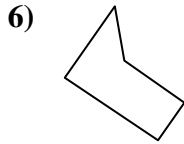
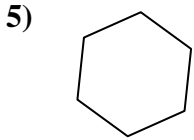

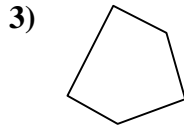
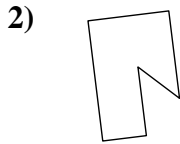
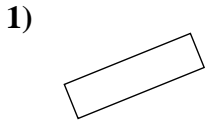




Déterminez si la figure est un quadrilatère (oui ou non).

Réponses

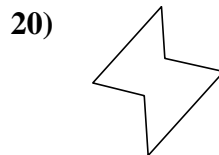
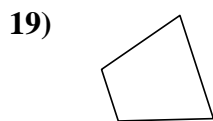
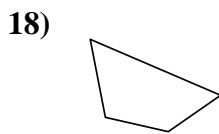
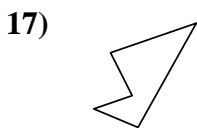
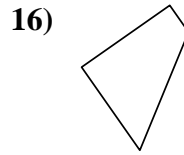
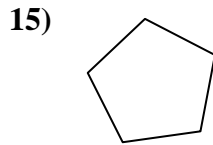
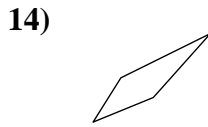
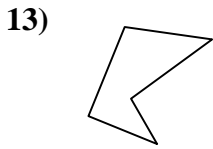
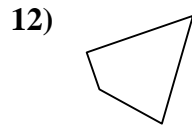
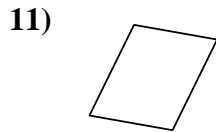
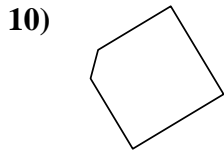
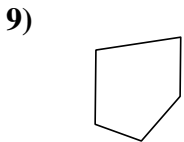
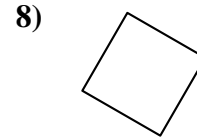
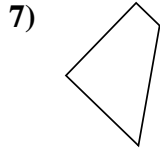
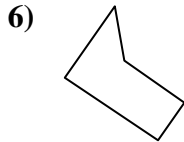
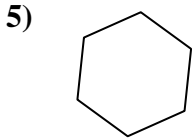

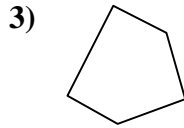
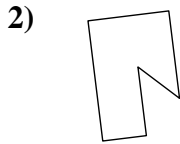
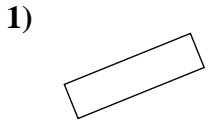


- 1. _____
- 2. _____
- 3. _____
- 4. _____
- 5. _____
- 6. _____
- 7. _____
- 8. _____
- 9. _____
- 10. _____
- 11. _____
- 12. _____
- 13. _____
- 14. _____
- 15. _____
- 16. _____
- 17. _____
- 18. _____
- 19. _____
- 20. _____



Déterminez si la figure est un quadrilatère (oui ou non).

Réponses



1. oui

2. non

3. non

4. oui

5. non

6. non

7. oui

8. oui

9. non

10. non

11. oui

12. oui

13. non

14. oui

15. non

16. oui

17. non

18. oui

19. oui

20. non