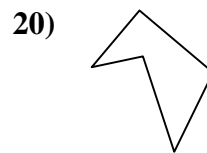
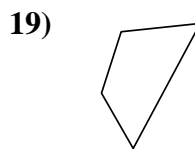
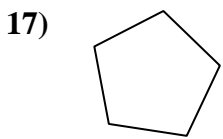
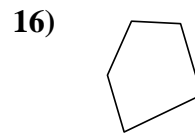
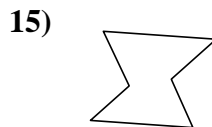
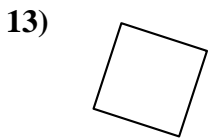
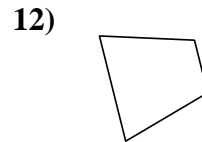
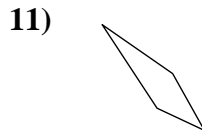
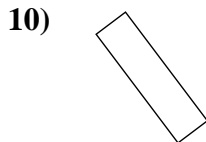
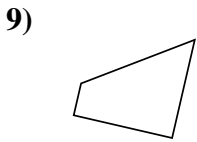
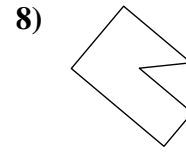
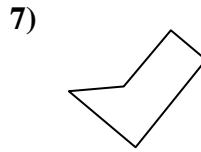
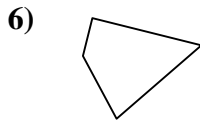
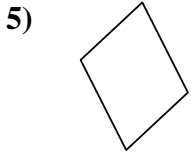
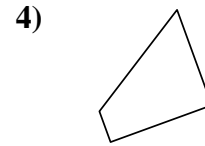
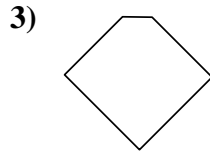
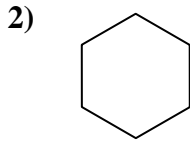
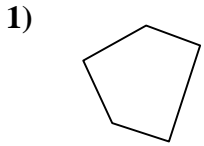




Déterminez si la figure est un quadrilatère (oui ou non).

Réponses



1. _____

2. _____

3. _____

4. _____

5. _____

6. _____

7. _____

8. _____

9. _____

10. _____

11. _____

12. _____

13. _____

14. _____

15. _____

16. _____

17. _____

18. _____

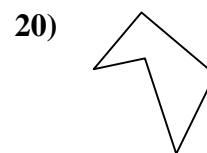
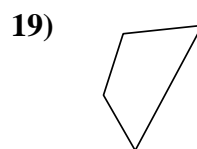
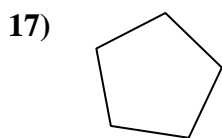
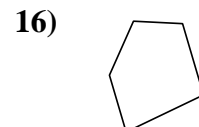
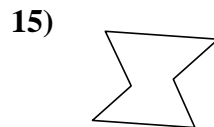
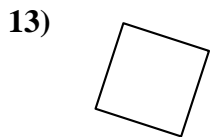
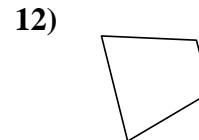
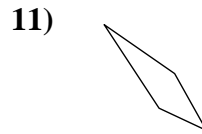
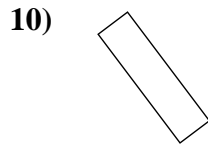
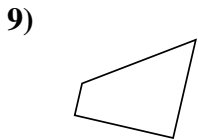
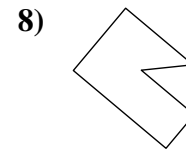
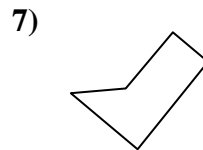
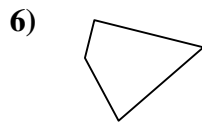
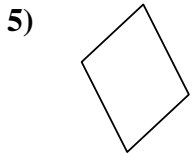
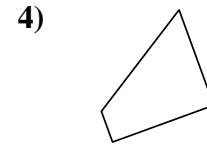
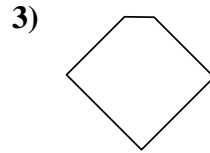
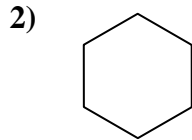
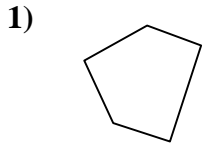
19. _____

20. _____



Déterminez si la figure est un quadrilatère (oui ou non).

Réponses



- 1. non
- 2. non
- 3. non
- 4. oui
- 5. oui
- 6. oui
- 7. non
- 8. non
- 9. oui
- 10. oui
- 11. oui
- 12. oui
- 13. oui
- 14. non
- 15. non
- 16. non
- 17. non
- 18. oui
- 19. oui
- 20. non