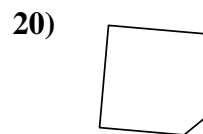
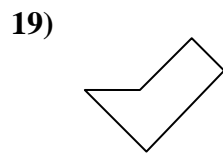
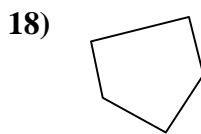
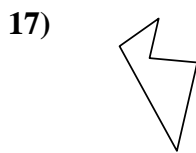
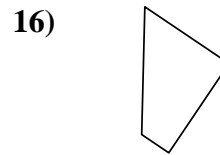
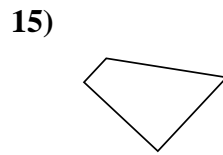
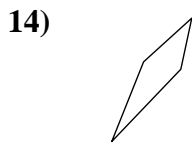
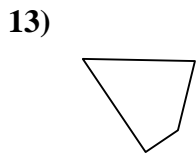
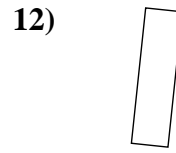
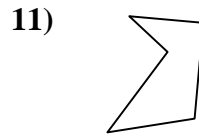
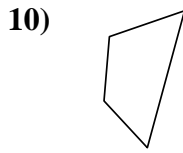
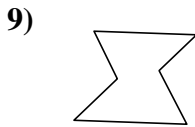
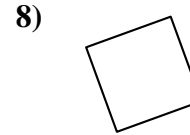
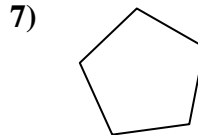
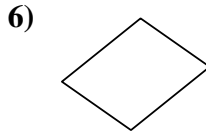
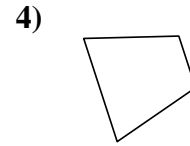
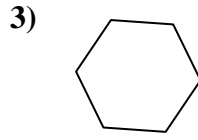
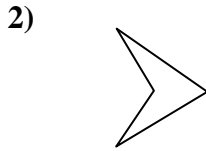
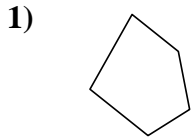




Déterminez si la figure est un quadrilatère (oui ou non).

**Réponses**



1. \_\_\_\_\_

2. \_\_\_\_\_

3. \_\_\_\_\_

4. \_\_\_\_\_

5. \_\_\_\_\_

6. \_\_\_\_\_

7. \_\_\_\_\_

8. \_\_\_\_\_

9. \_\_\_\_\_

10. \_\_\_\_\_

11. \_\_\_\_\_

12. \_\_\_\_\_

13. \_\_\_\_\_

14. \_\_\_\_\_

15. \_\_\_\_\_

16. \_\_\_\_\_

17. \_\_\_\_\_

18. \_\_\_\_\_

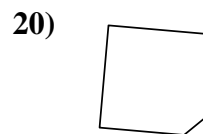
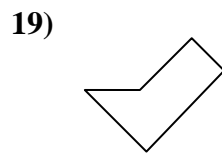
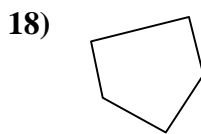
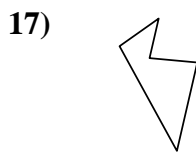
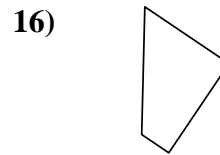
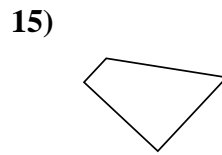
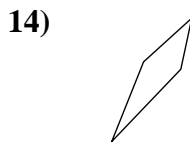
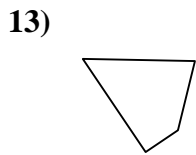
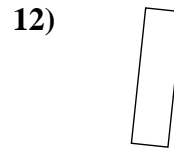
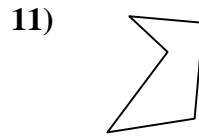
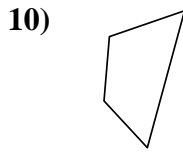
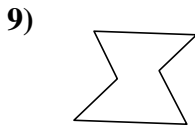
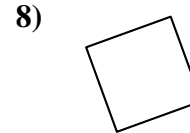
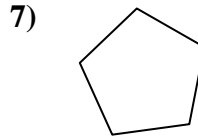
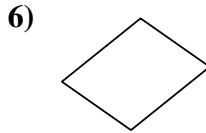
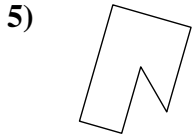
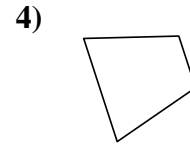
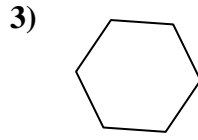
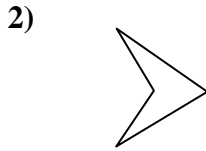
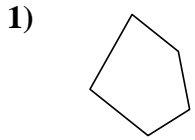
19. \_\_\_\_\_

20. \_\_\_\_\_



Déterminez si la figure est un quadrilatère (oui ou non).

**Réponses**



1. non

2. oui

3. non

4. oui

5. non

6. oui

7. non

8. oui

9. non

10. oui

11. non

12. oui

13. oui

14. oui

15. oui

16. oui

17. non

18. non

19. non

20. non