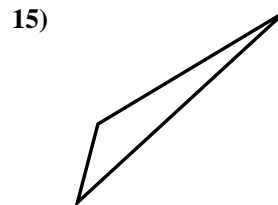
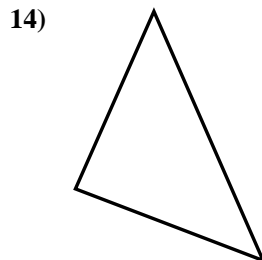
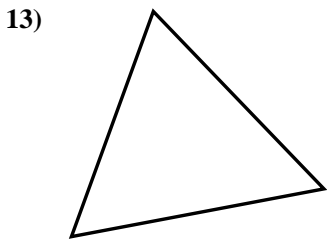

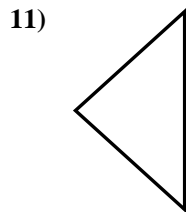
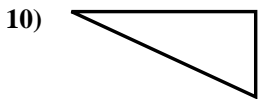
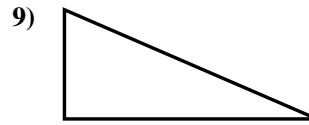
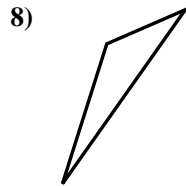

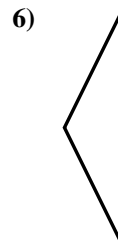

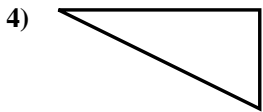
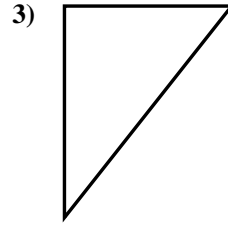





Déterminez si la figure est un triangle rectangle (oui ou non).

**Réponses**

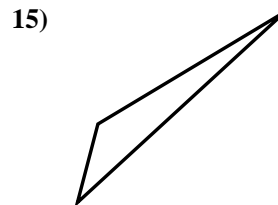
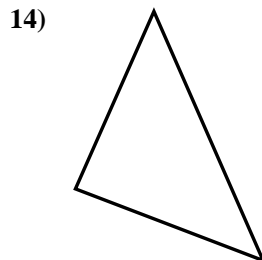
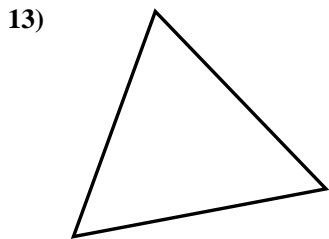

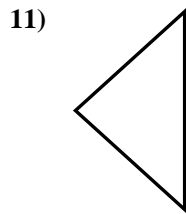
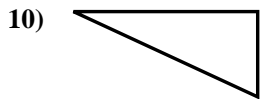
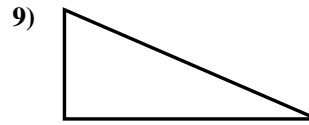
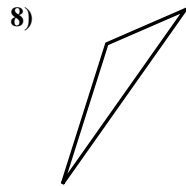

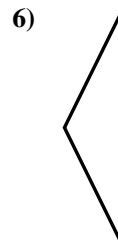

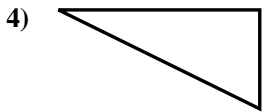
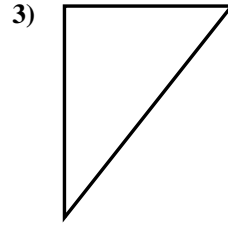



- 1. \_\_\_\_\_
- 2. \_\_\_\_\_
- 3. \_\_\_\_\_
- 4. \_\_\_\_\_
- 5. \_\_\_\_\_
- 6. \_\_\_\_\_
- 7. \_\_\_\_\_
- 8. \_\_\_\_\_
- 9. \_\_\_\_\_
- 10. \_\_\_\_\_
- 11. \_\_\_\_\_
- 12. \_\_\_\_\_
- 13. \_\_\_\_\_
- 14. \_\_\_\_\_
- 15. \_\_\_\_\_



Déterminez si la figure est un triangle rectangle (oui ou non).

**Réponses**



1. oui

2. oui

3. oui

4. oui

5. non

6. non

7. non

8. non

9. oui

10. oui

11. non

12. oui

13. non

14. oui

15. non