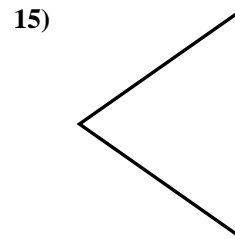
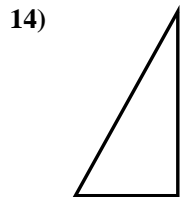
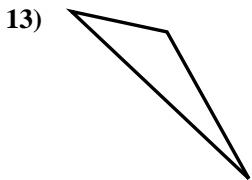
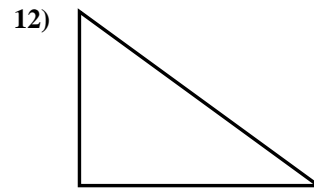
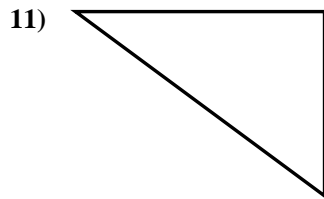
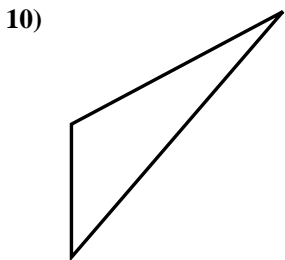
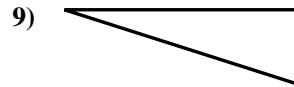
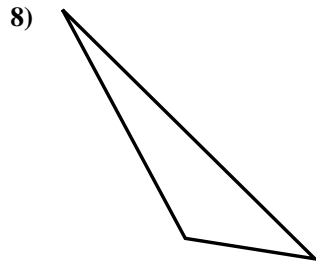
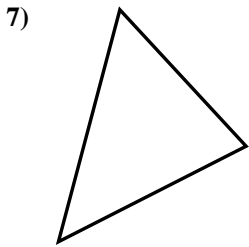
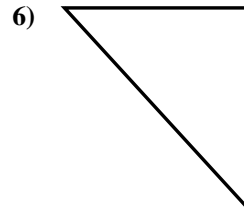
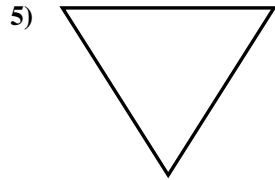
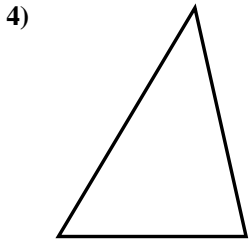
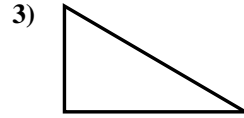
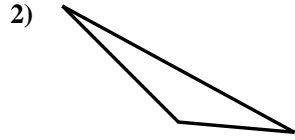
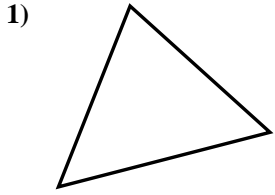




Déterminez si la figure est un triangle rectangle (oui ou non).

**Réponses**

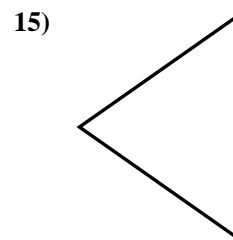
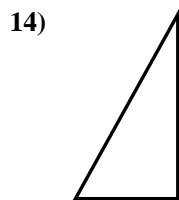
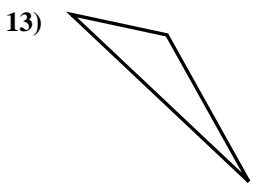
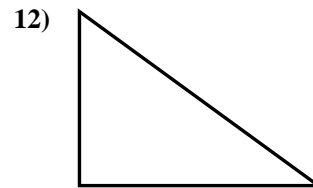
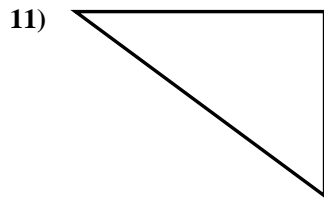
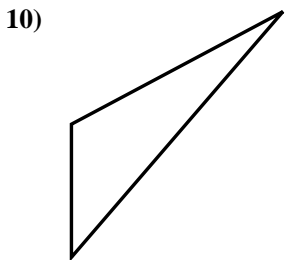
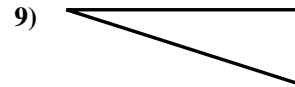
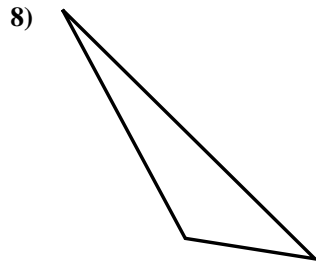
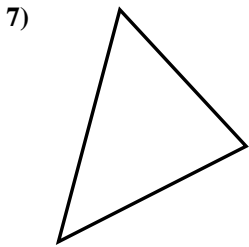
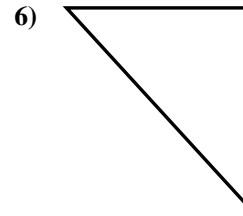
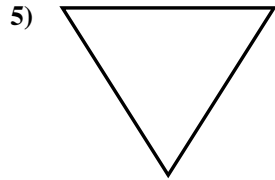
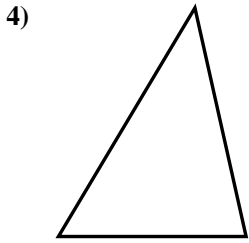
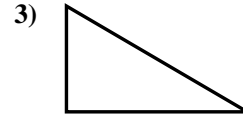
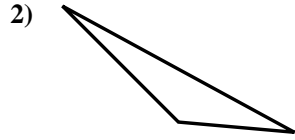
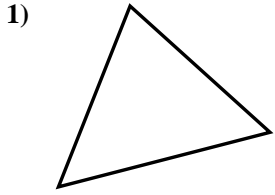


- 1. \_\_\_\_\_
- 2. \_\_\_\_\_
- 3. \_\_\_\_\_
- 4. \_\_\_\_\_
- 5. \_\_\_\_\_
- 6. \_\_\_\_\_
- 7. \_\_\_\_\_
- 8. \_\_\_\_\_
- 9. \_\_\_\_\_
- 10. \_\_\_\_\_
- 11. \_\_\_\_\_
- 12. \_\_\_\_\_
- 13. \_\_\_\_\_
- 14. \_\_\_\_\_
- 15. \_\_\_\_\_



Déterminez si la figure est un triangle rectangle (oui ou non).

**Réponses**

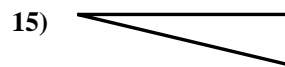
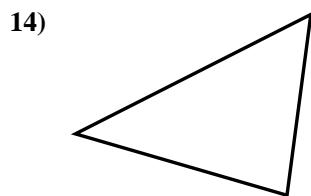
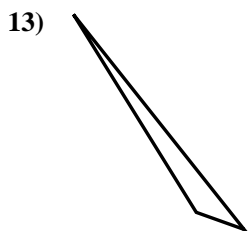
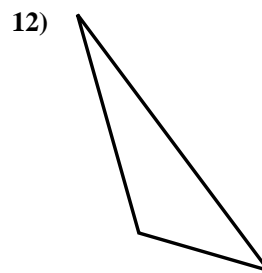
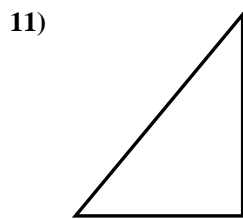
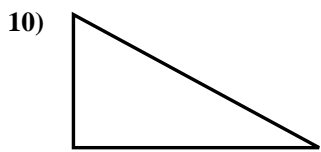
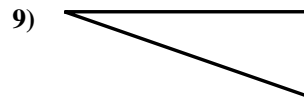
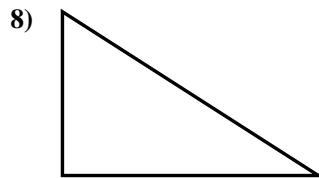
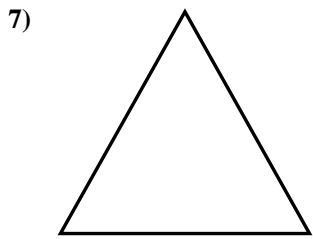
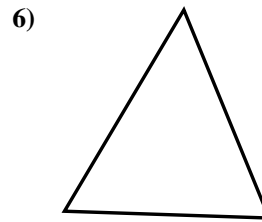
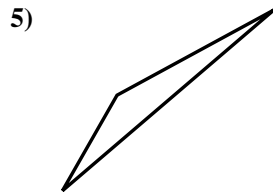

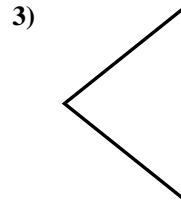
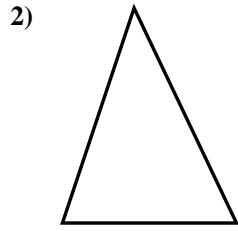
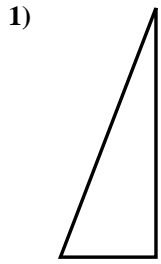


- 1. non
- 2. non
- 3. oui
- 4. non
- 5. non
- 6. oui
- 7. non
- 8. non
- 9. oui
- 10. non
- 11. oui
- 12. oui
- 13. non
- 14. oui
- 15. non



Déterminez si la figure est un triangle rectangle (oui ou non).

**Réponses**

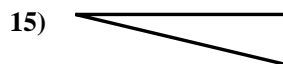
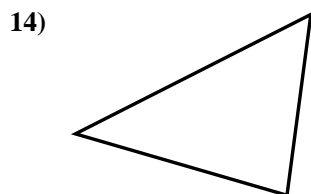
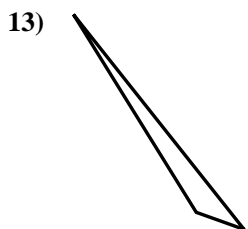
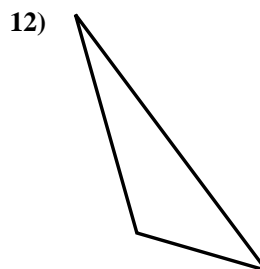
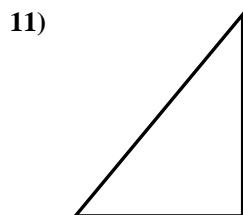
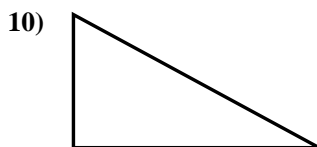
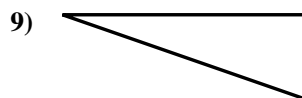
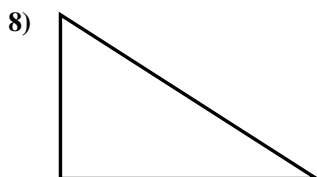
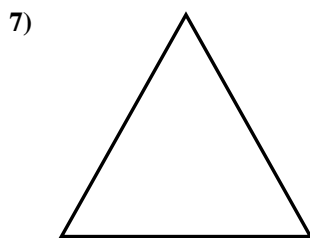
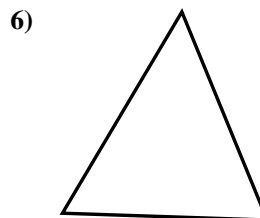

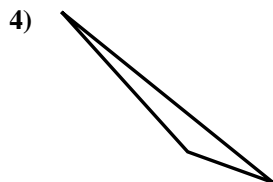
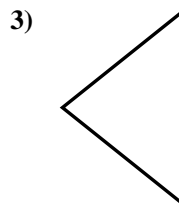
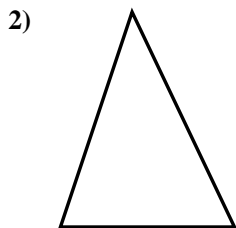
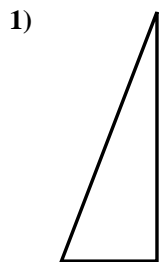


- 1. \_\_\_\_\_
- 2. \_\_\_\_\_
- 3. \_\_\_\_\_
- 4. \_\_\_\_\_
- 5. \_\_\_\_\_
- 6. \_\_\_\_\_
- 7. \_\_\_\_\_
- 8. \_\_\_\_\_
- 9. \_\_\_\_\_
- 10. \_\_\_\_\_
- 11. \_\_\_\_\_
- 12. \_\_\_\_\_
- 13. \_\_\_\_\_
- 14. \_\_\_\_\_
- 15. \_\_\_\_\_



Déterminez si la figure est un triangle rectangle (oui ou non).

**Réponses**



1. oui

2. non

3. non

4. non

5. non

6. non

7. non

8. oui

9. oui

10. oui

11. oui

12. non

13. non

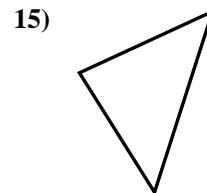

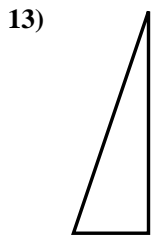
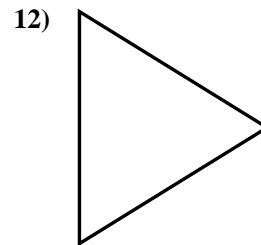
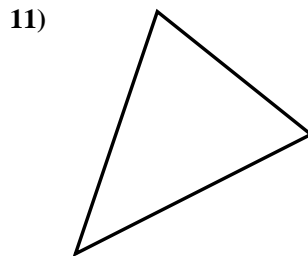
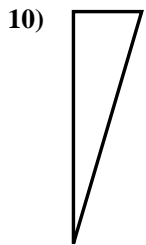
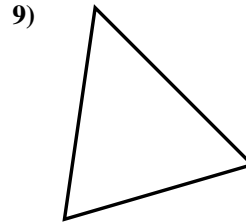
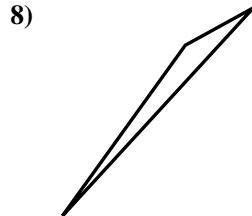
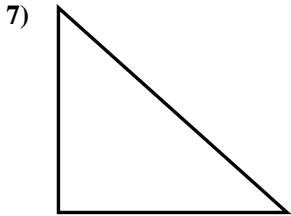
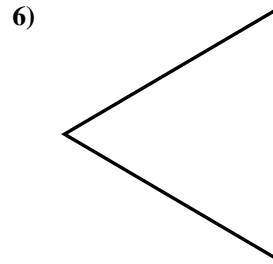
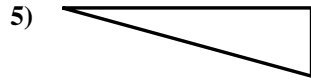
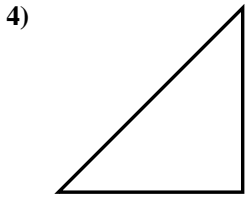
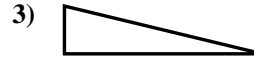
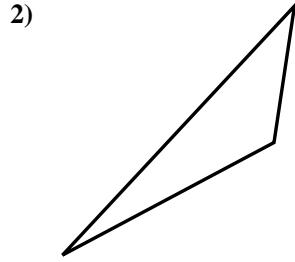
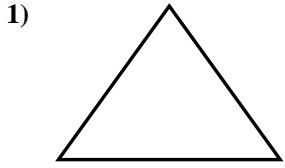
14. non

15. oui



Déterminez si la figure est un triangle rectangle (oui ou non).

**Réponses**

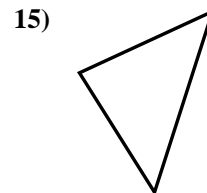

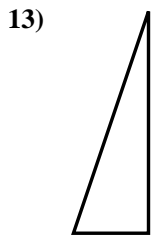
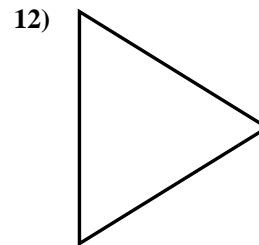
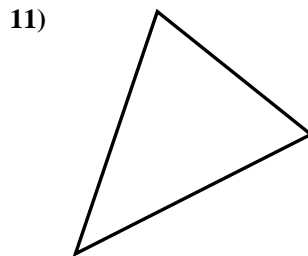
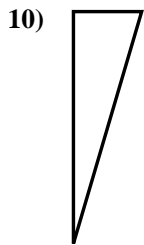
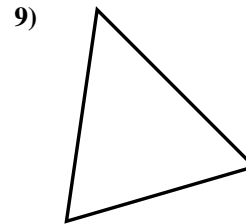
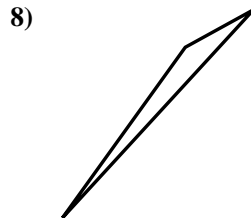
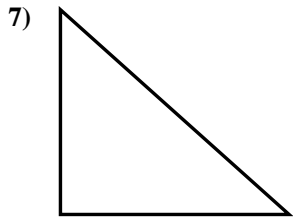
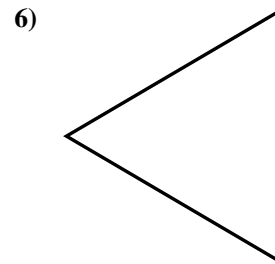
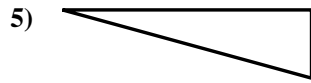
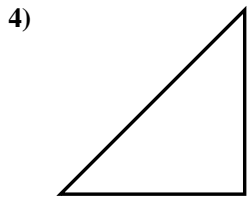
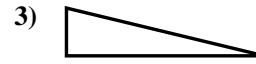
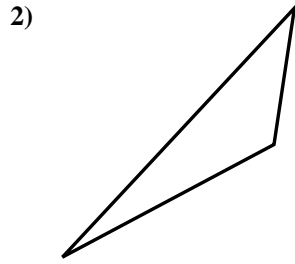
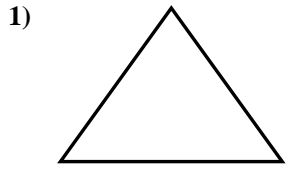


- 1. \_\_\_\_\_
- 2. \_\_\_\_\_
- 3. \_\_\_\_\_
- 4. \_\_\_\_\_
- 5. \_\_\_\_\_
- 6. \_\_\_\_\_
- 7. \_\_\_\_\_
- 8. \_\_\_\_\_
- 9. \_\_\_\_\_
- 10. \_\_\_\_\_
- 11. \_\_\_\_\_
- 12. \_\_\_\_\_
- 13. \_\_\_\_\_
- 14. \_\_\_\_\_
- 15. \_\_\_\_\_



Déterminez si la figure est un triangle rectangle (oui ou non).

**Réponses**



1. non

2. non

3. oui

4. oui

5. oui

6. non

7. oui

8. non

9. non

10. oui

11. non

12. non

13. oui

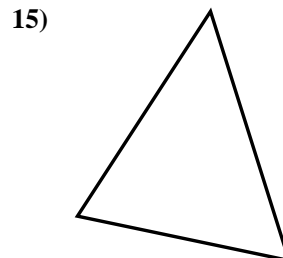
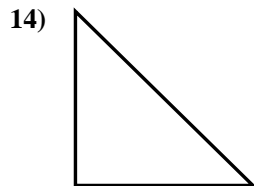
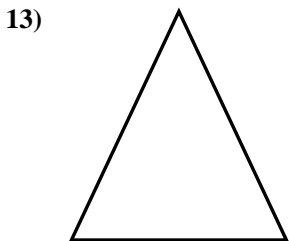
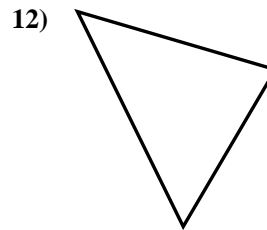
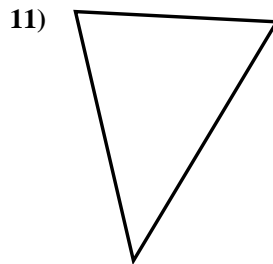
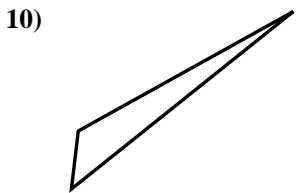
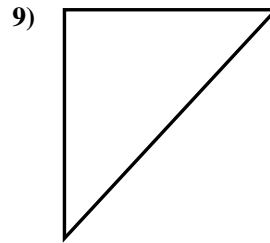
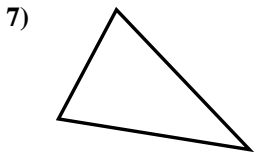
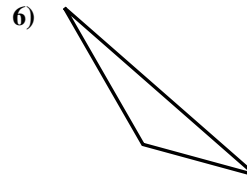
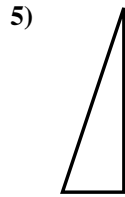
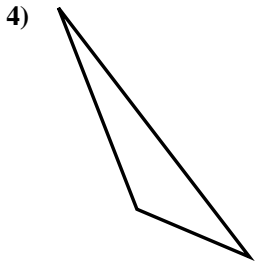
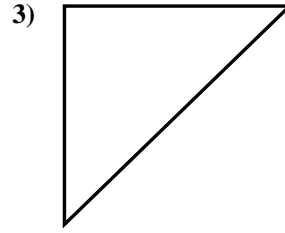
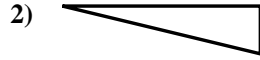
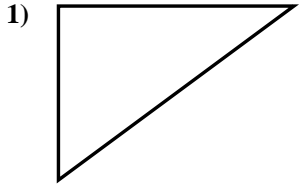
14. non

15. non



Déterminez si la figure est un triangle rectangle (oui ou non).

**Réponses**

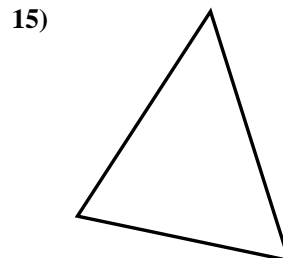
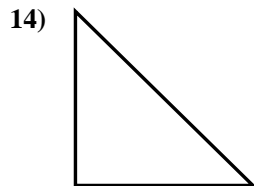
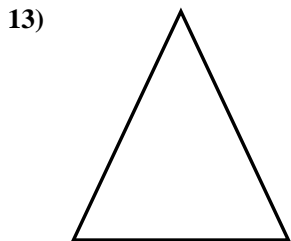
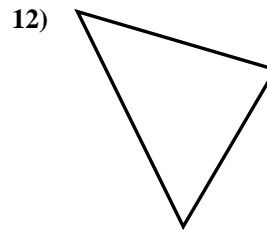
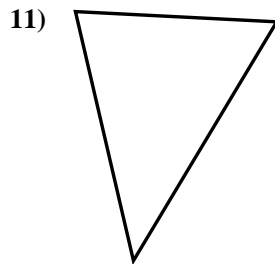
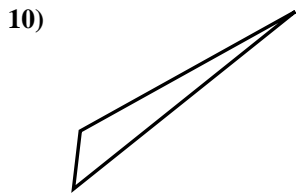
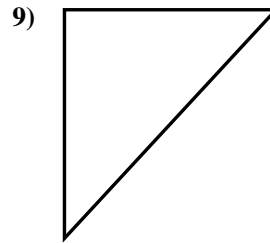
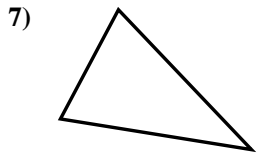
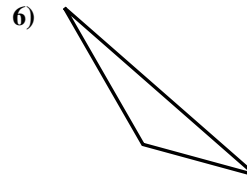
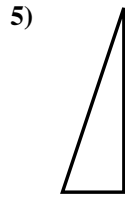
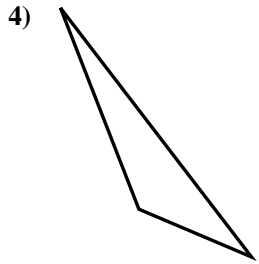
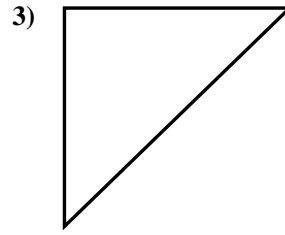
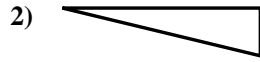
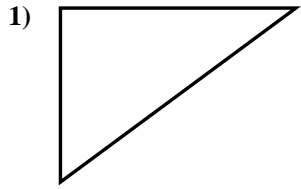


- 1. \_\_\_\_\_
- 2. \_\_\_\_\_
- 3. \_\_\_\_\_
- 4. \_\_\_\_\_
- 5. \_\_\_\_\_
- 6. \_\_\_\_\_
- 7. \_\_\_\_\_
- 8. \_\_\_\_\_
- 9. \_\_\_\_\_
- 10. \_\_\_\_\_
- 11. \_\_\_\_\_
- 12. \_\_\_\_\_
- 13. \_\_\_\_\_
- 14. \_\_\_\_\_
- 15. \_\_\_\_\_



Déterminez si la figure est un triangle rectangle (oui ou non).

**Réponses**



1. oui

2. oui

3. oui

4. non

5. oui

6. non

7. non

8. oui

9. oui

10. non

11. non

12. non

13. non

14. oui

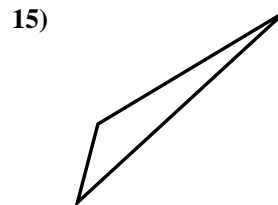
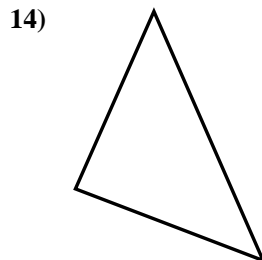
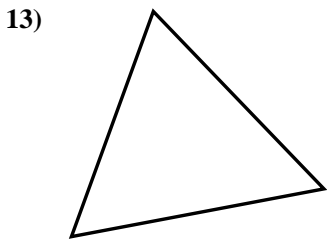

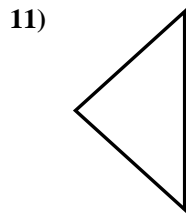
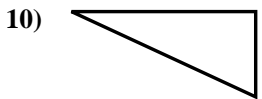
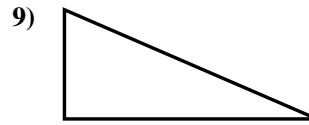
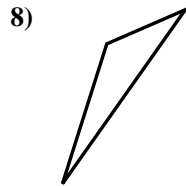

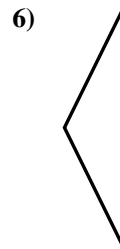

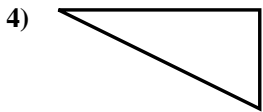
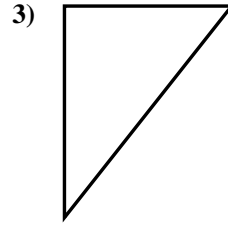

15. non





Déterminez si la figure est un triangle rectangle (oui ou non).

**Réponses**

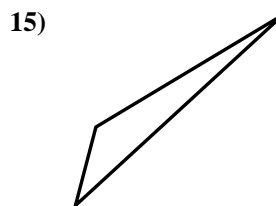
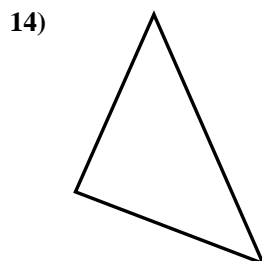
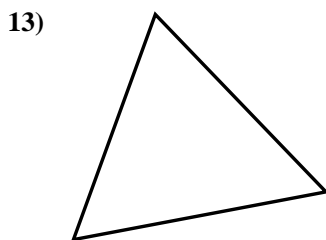
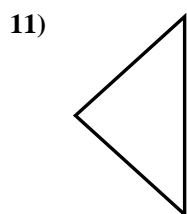
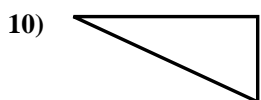
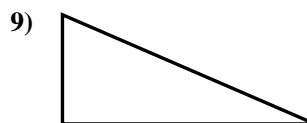
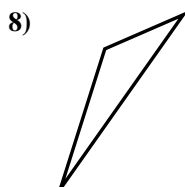

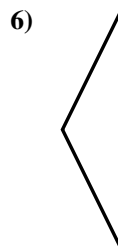

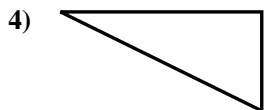
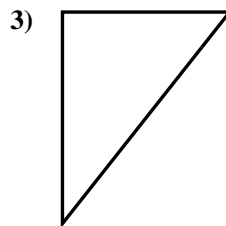



- 1. \_\_\_\_\_
- 2. \_\_\_\_\_
- 3. \_\_\_\_\_
- 4. \_\_\_\_\_
- 5. \_\_\_\_\_
- 6. \_\_\_\_\_
- 7. \_\_\_\_\_
- 8. \_\_\_\_\_
- 9. \_\_\_\_\_
- 10. \_\_\_\_\_
- 11. \_\_\_\_\_
- 12. \_\_\_\_\_
- 13. \_\_\_\_\_
- 14. \_\_\_\_\_
- 15. \_\_\_\_\_



Déterminez si la figure est un triangle rectangle (oui ou non).

**Réponses**



1. oui

2. oui

3. oui

4. oui

5. non

6. non

7. non

8. non

9. oui

10. oui

11. non

12. oui

13. non

14. oui

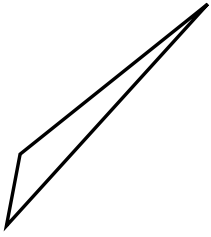
15. non



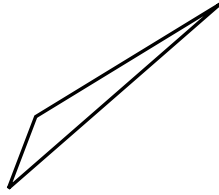
Déterminez si la figure est un triangle rectangle (oui ou non).

**Réponses**

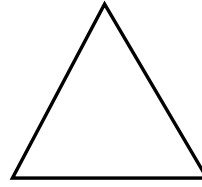
1)



2)



3)



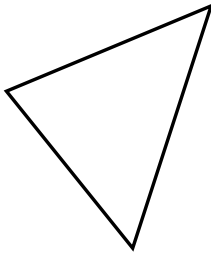
1. \_\_\_\_\_

2. \_\_\_\_\_

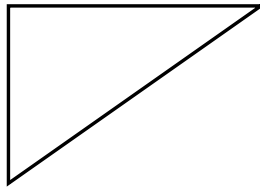
3. \_\_\_\_\_

4. \_\_\_\_\_


4)



5)



6)




5. \_\_\_\_\_

6. \_\_\_\_\_

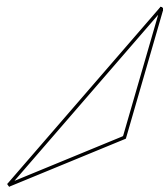
7. \_\_\_\_\_

8. \_\_\_\_\_


7)



8)



9)



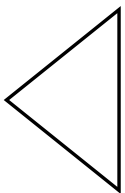
9. \_\_\_\_\_

10. \_\_\_\_\_

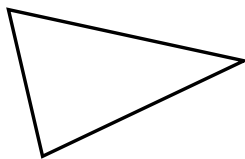
11. \_\_\_\_\_

12. \_\_\_\_\_

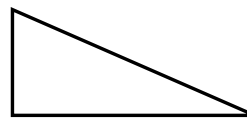
10)



11)



12)

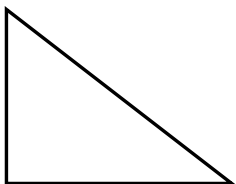


13. \_\_\_\_\_

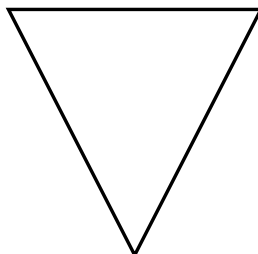
14. \_\_\_\_\_

15. \_\_\_\_\_

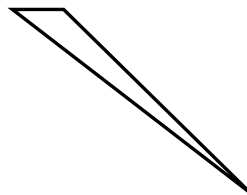
13)



14)



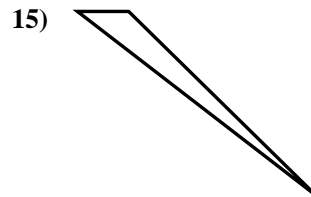
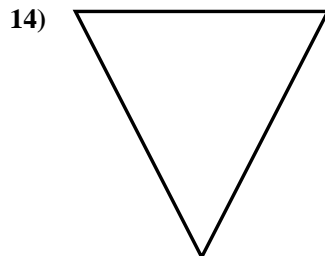
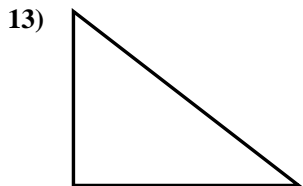
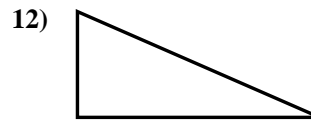
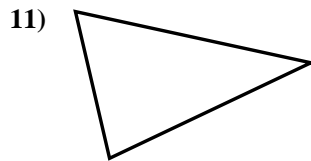
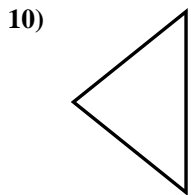
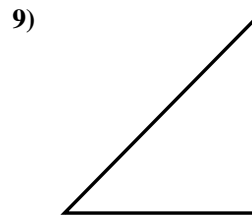
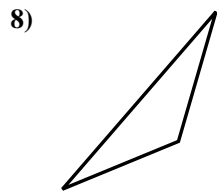
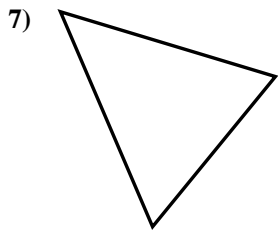
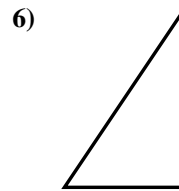
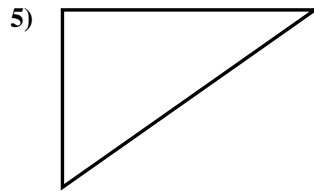
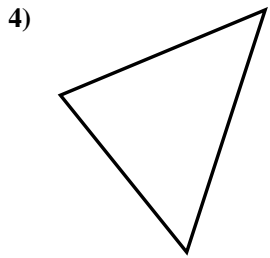
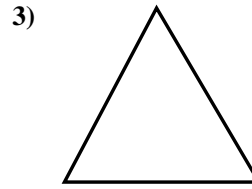
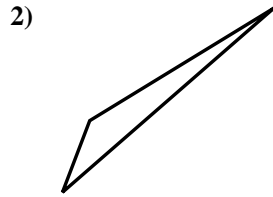
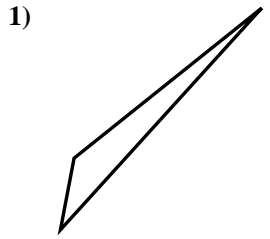
15)





Déterminez si la figure est un triangle rectangle (oui ou non).

**Réponses**



1. non

2. non

3. non

4. non

5. oui

6. oui

7. non

8. non

9. oui

10. non

11. non

12. oui

13. oui

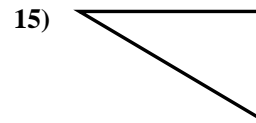
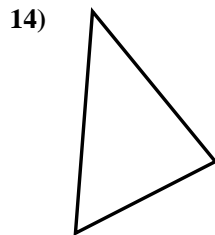
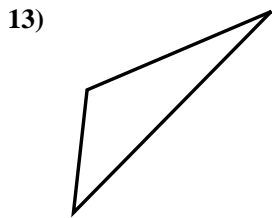
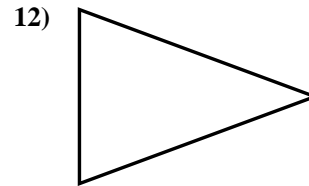
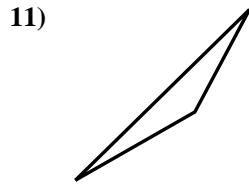
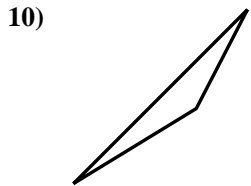
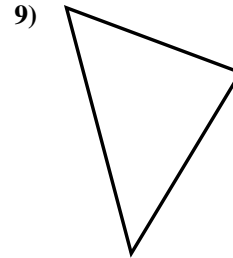
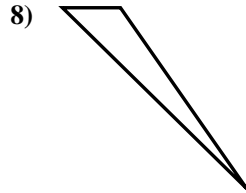
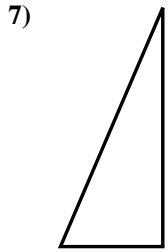
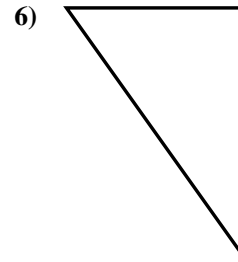
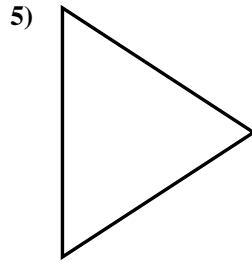
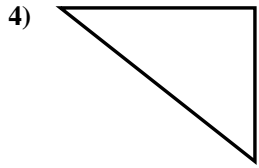
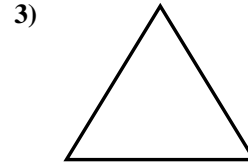
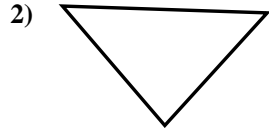
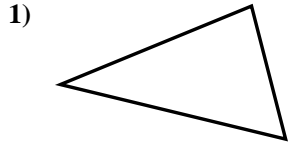
14. non

15. non



Déterminez si la figure est un triangle rectangle (oui ou non).

**Réponses**

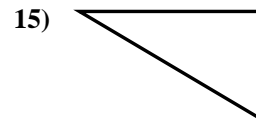
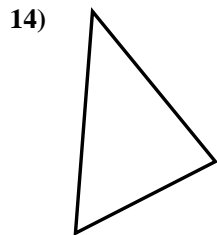
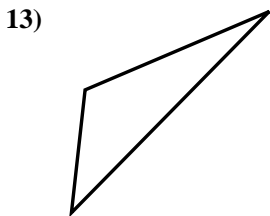
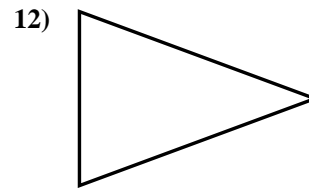
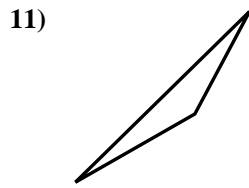
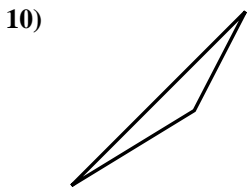
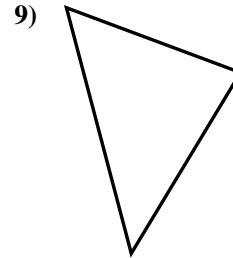
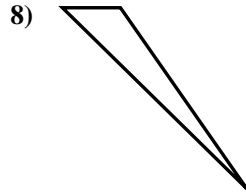
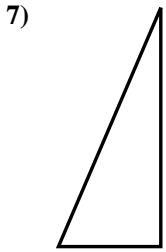
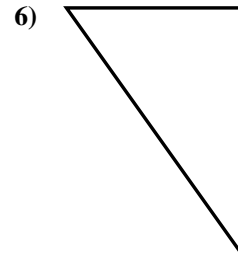
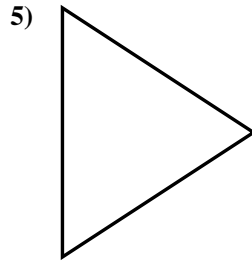
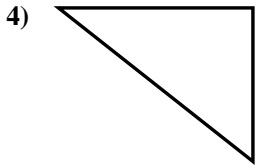
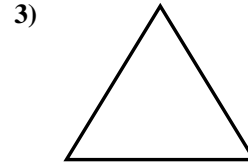
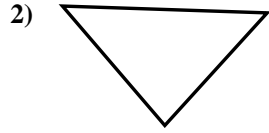
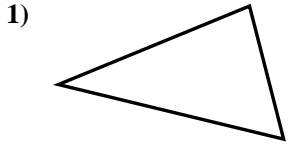


- 1. \_\_\_\_\_
- 2. \_\_\_\_\_
- 3. \_\_\_\_\_
- 4. \_\_\_\_\_
- 5. \_\_\_\_\_
- 6. \_\_\_\_\_
- 7. \_\_\_\_\_
- 8. \_\_\_\_\_
- 9. \_\_\_\_\_
- 10. \_\_\_\_\_
- 11. \_\_\_\_\_
- 12. \_\_\_\_\_
- 13. \_\_\_\_\_
- 14. \_\_\_\_\_
- 15. \_\_\_\_\_



Déterminez si la figure est un triangle rectangle (oui ou non).

**Réponses**



1. non

2. non

3. non

4. oui

5. non

6. oui

7. oui

8. non

9. non

10. non

11. non

12. non

13. non

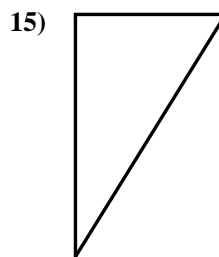
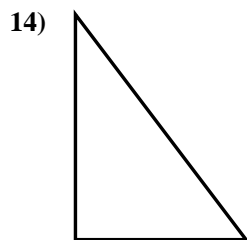
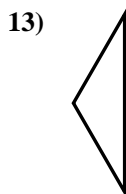
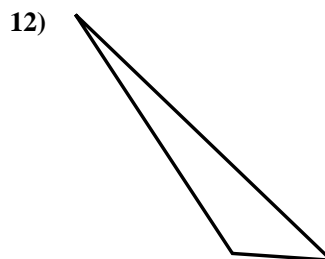
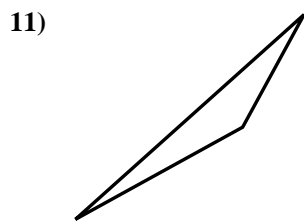
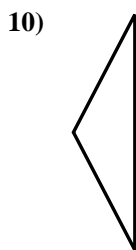
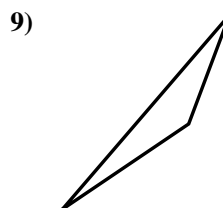
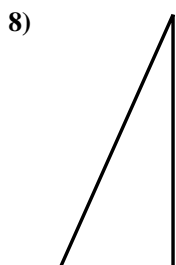

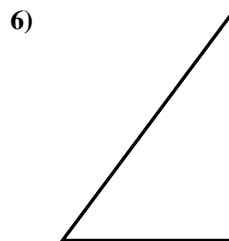
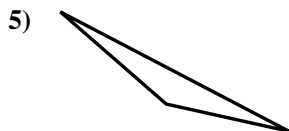
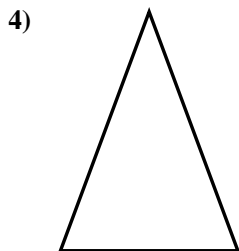
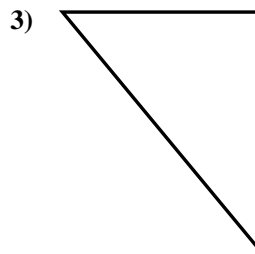
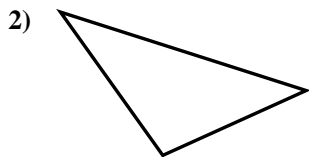
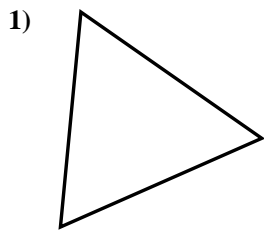
14. non

15. oui



Déterminez si la figure est un triangle rectangle (oui ou non).

**Réponses**



1. \_\_\_\_\_

2. \_\_\_\_\_

3. \_\_\_\_\_

4. \_\_\_\_\_

5. \_\_\_\_\_

6. \_\_\_\_\_

7. \_\_\_\_\_

8. \_\_\_\_\_

9. \_\_\_\_\_

10. \_\_\_\_\_

11. \_\_\_\_\_

12. \_\_\_\_\_

13. \_\_\_\_\_

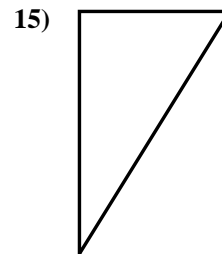
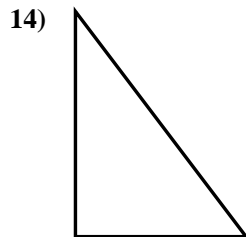
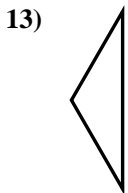
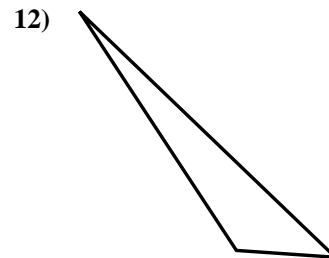
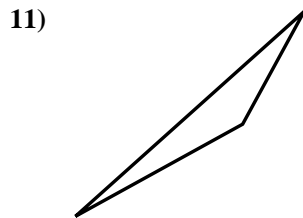
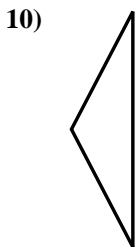
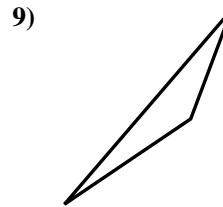
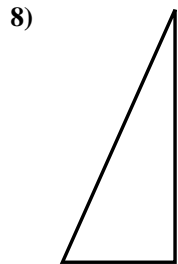

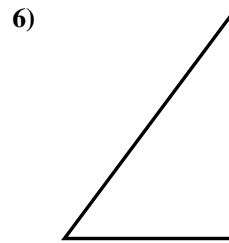
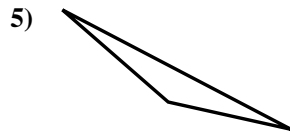
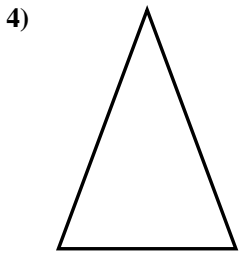
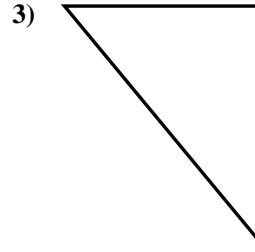
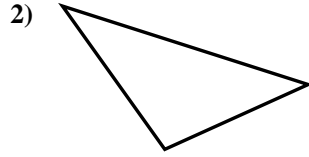
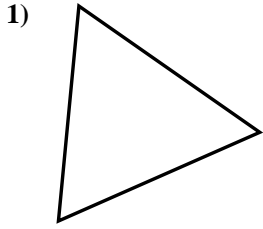
14. \_\_\_\_\_

15. \_\_\_\_\_



Déterminez si la figure est un triangle rectangle (oui ou non).

**Réponses**



1. non

2. non

3. oui

4. non

5. non

6. oui

7. non

8. oui

9. non

10. non

11. non

12. non

13. non

14. oui

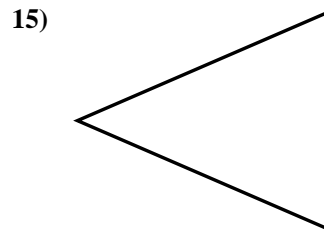
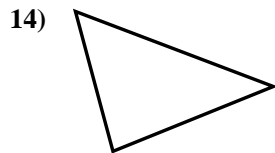
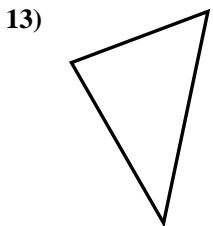
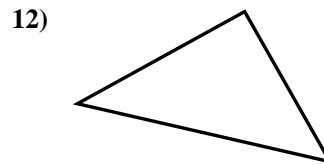
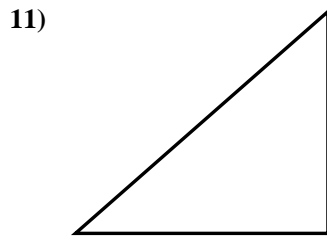
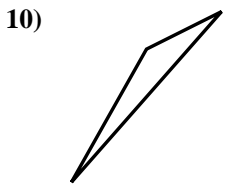
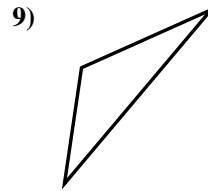
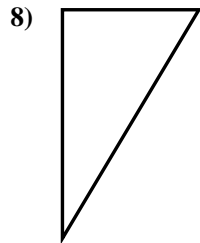
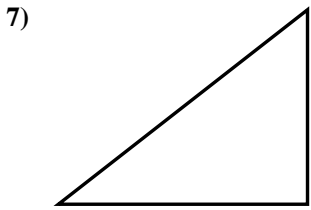
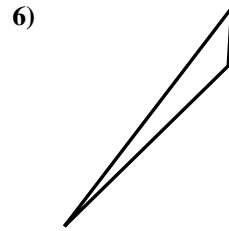
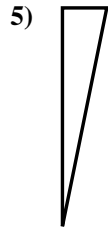
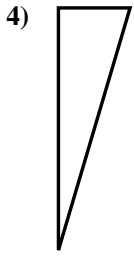
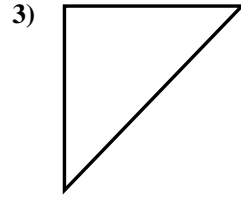
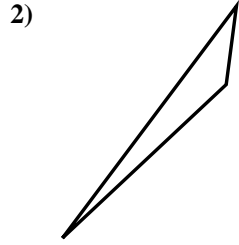
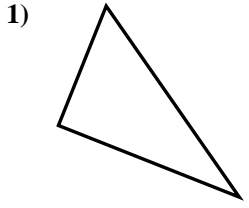
15. oui





Déterminez si la figure est un triangle rectangle (oui ou non).

**Réponses**

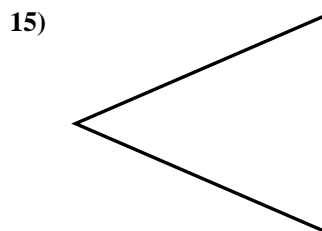
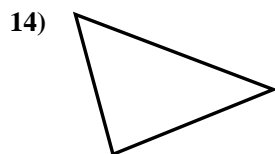
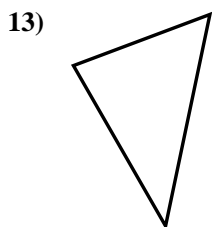
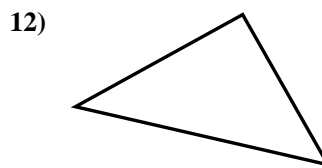
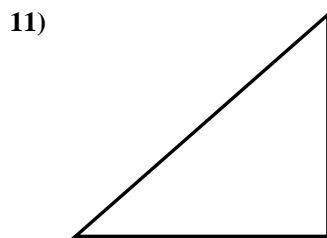
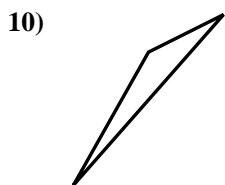
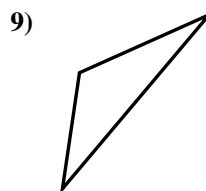
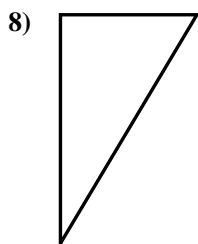
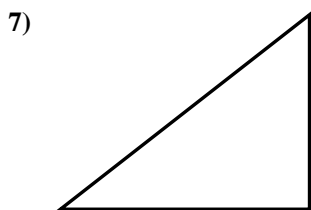
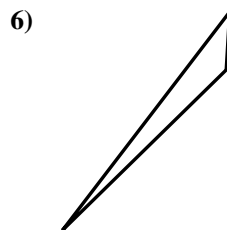
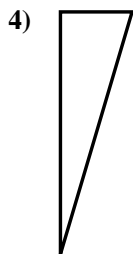
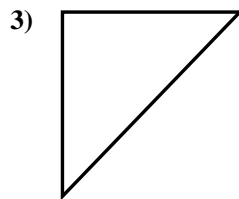
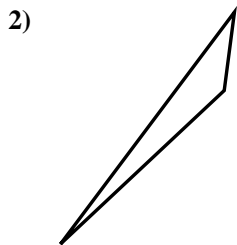
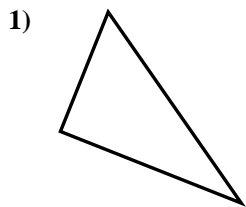


- 1. \_\_\_\_\_
- 2. \_\_\_\_\_
- 3. \_\_\_\_\_
- 4. \_\_\_\_\_
- 5. \_\_\_\_\_
- 6. \_\_\_\_\_
- 7. \_\_\_\_\_
- 8. \_\_\_\_\_
- 9. \_\_\_\_\_
- 10. \_\_\_\_\_
- 11. \_\_\_\_\_
- 12. \_\_\_\_\_
- 13. \_\_\_\_\_
- 14. \_\_\_\_\_
- 15. \_\_\_\_\_



Déterminez si la figure est un triangle rectangle (oui ou non).

**Réponses**



1. oui

2. non

3. oui

4. oui

5. oui

6. non

7. oui

8. oui

9. non

10. non

11. oui

12. oui

13. non

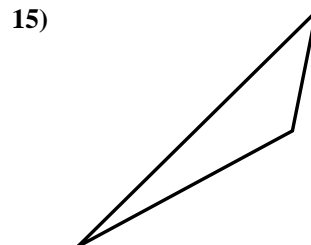
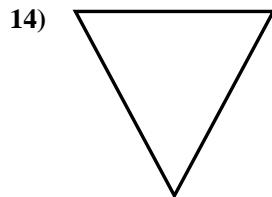
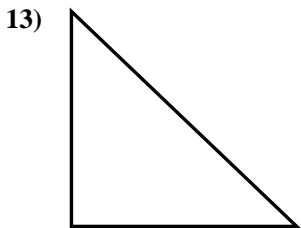
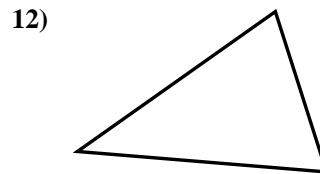
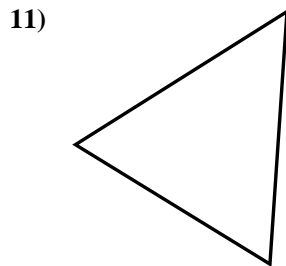
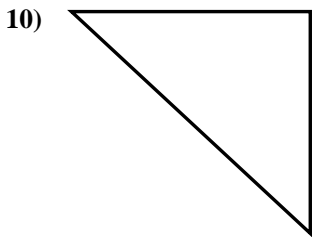
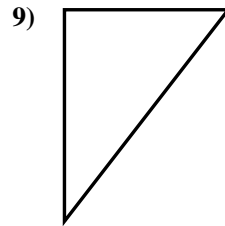
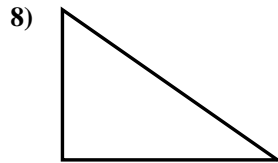
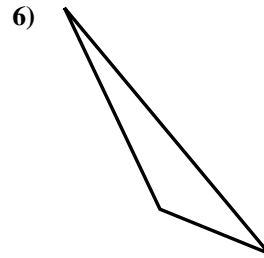
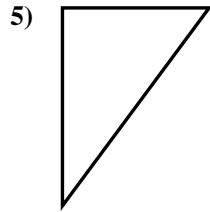
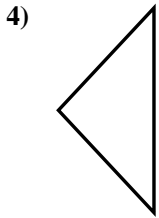
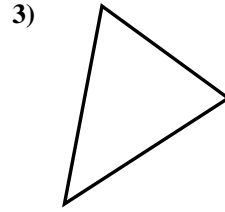
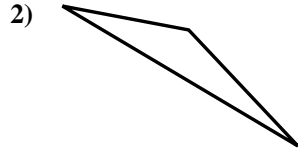
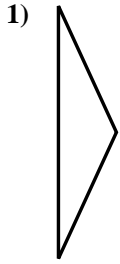
14. non

15. non



Déterminez si la figure est un triangle rectangle (oui ou non).

**Réponses**

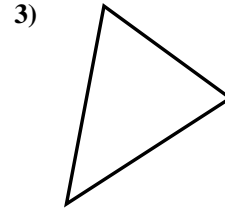
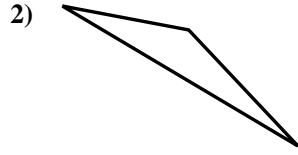
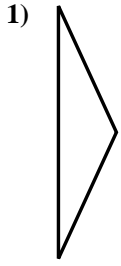


- 1. \_\_\_\_\_
- 2. \_\_\_\_\_
- 3. \_\_\_\_\_
- 4. \_\_\_\_\_
- 5. \_\_\_\_\_
- 6. \_\_\_\_\_
- 7. \_\_\_\_\_
- 8. \_\_\_\_\_
- 9. \_\_\_\_\_
- 10. \_\_\_\_\_
- 11. \_\_\_\_\_
- 12. \_\_\_\_\_
- 13. \_\_\_\_\_
- 14. \_\_\_\_\_
- 15. \_\_\_\_\_

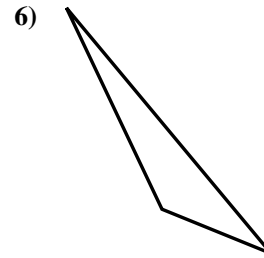
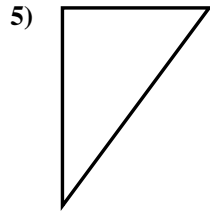
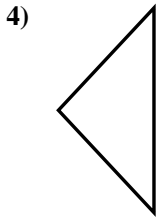


Déterminez si la figure est un triangle rectangle (oui ou non).

**Réponses**



1. non



2. non

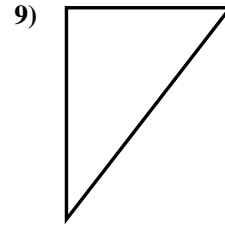
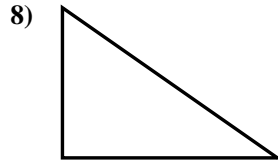
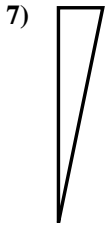
3. non

4. non

5. oui

6. non

7. oui



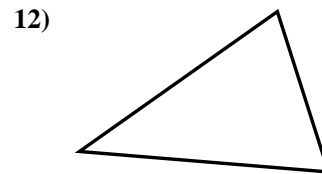
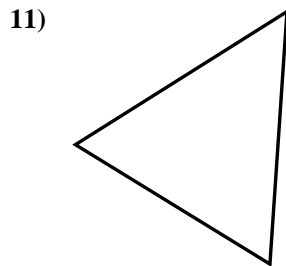
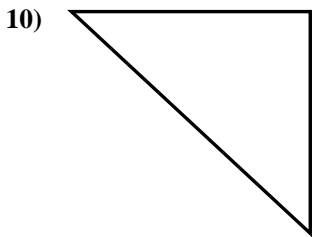
8. oui

9. oui

10. oui

11. non

12. non



13. oui

14. non

15. non

