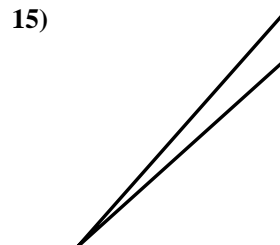
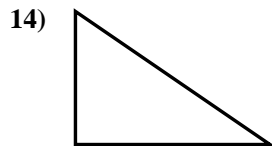
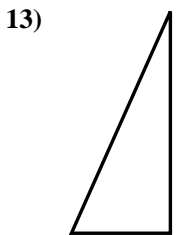
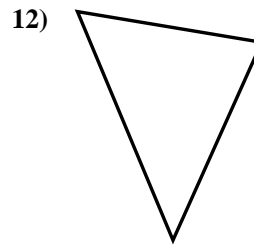

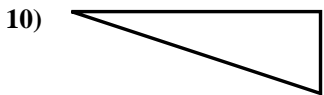
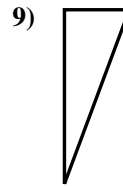
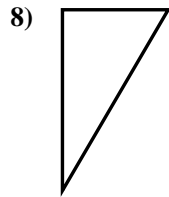

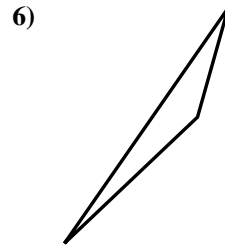
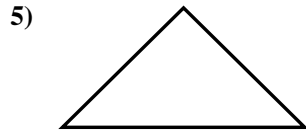
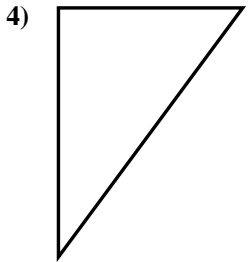
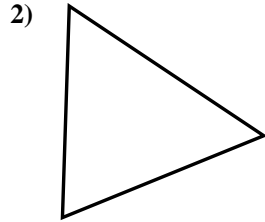
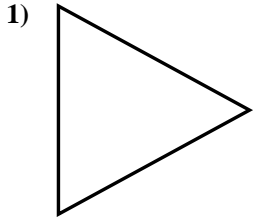




Déterminez si la figure est un triangle rectangle (oui ou non).

**Réponses**

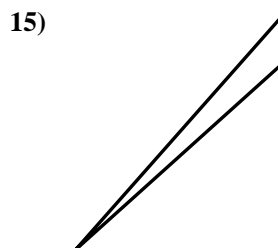
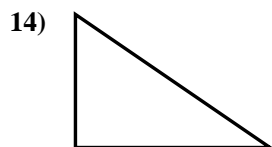
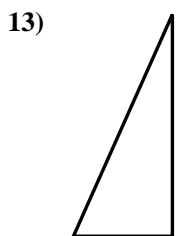
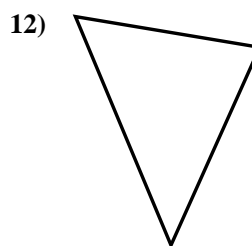
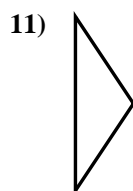
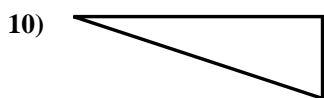
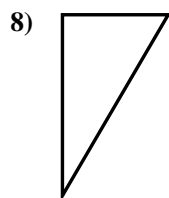

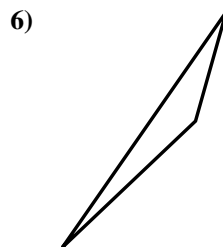
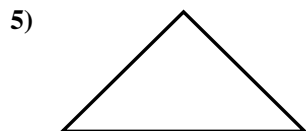
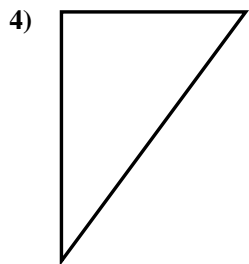
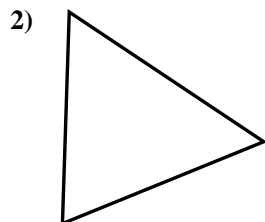
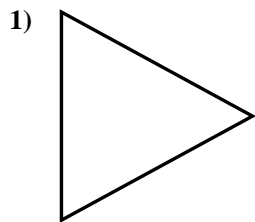


1. \_\_\_\_\_
2. \_\_\_\_\_
3. \_\_\_\_\_
4. \_\_\_\_\_
5. \_\_\_\_\_
6. \_\_\_\_\_
7. \_\_\_\_\_
8. \_\_\_\_\_
9. \_\_\_\_\_
10. \_\_\_\_\_
11. \_\_\_\_\_
12. \_\_\_\_\_
13. \_\_\_\_\_
14. \_\_\_\_\_
15. \_\_\_\_\_



Déterminez si la figure est un triangle rectangle (oui ou non).

**Réponses**



1. non

2. non

3. oui

4. oui

5. oui

6. non

7. non

8. oui

9. oui

10. oui

11. non

12. non

13. oui

14. oui

15. non