



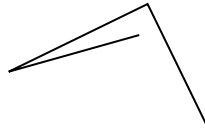
Determinez si la figure montrée est un 'Triangle', 'Carrée', 'Rectangle', 'Hexagone' or 'Autre'.

Réponses

1)



2)



3)



1. _____

2. _____

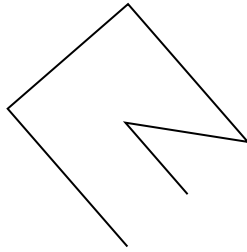
3. _____

4. _____

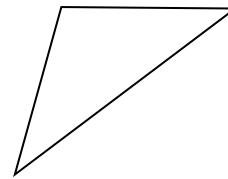
4)



5)



6)



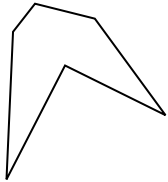
5. _____

6. _____

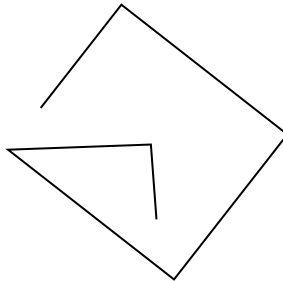
7. _____

8. _____


7)



8)



9)




9. _____

10. _____

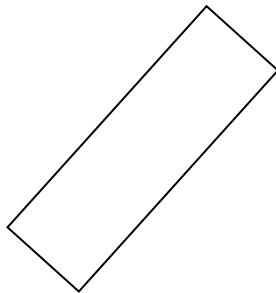
11. _____

12. _____

10)



11)



12)

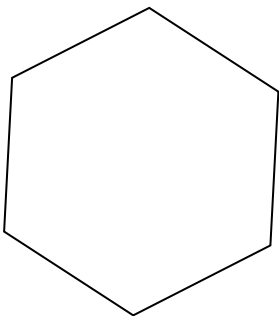


13. _____

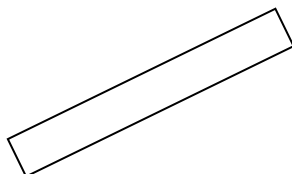
14. _____

15. _____

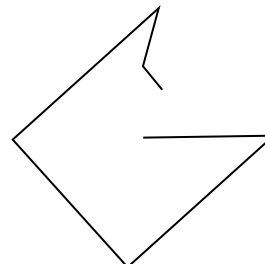
13)



14)



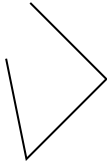
15)



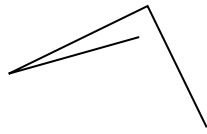


Determinez si la figure montrée est un 'Triangle', 'Carrée', 'Rectangle', 'Hexagone' or 'Autre'.

1)



2)



3)



1.

Autre

2.

Autre

3.

triangle

4.

Autre

5.

Autre

6.

triangle

7.

Hexagone

8.

Autre

9.

triangle

10.

square

11.

rectangle

12.

rectangle

13.

Hexagone

14.

rectangle

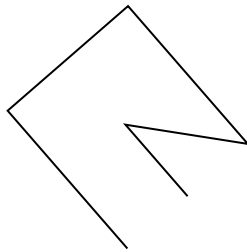
15.

Autre

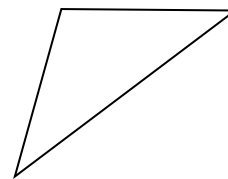
4)



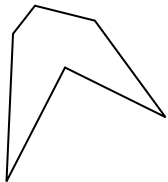
5)



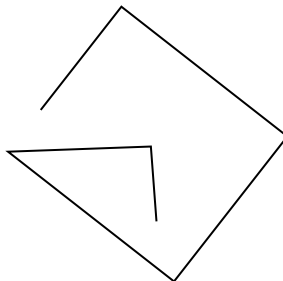
6)




7)




8)



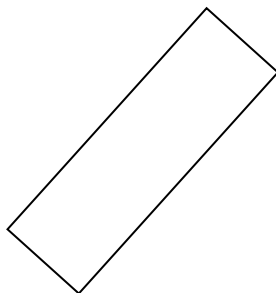
9)



10)



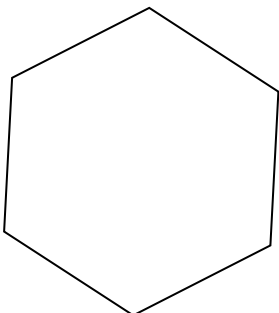
11)



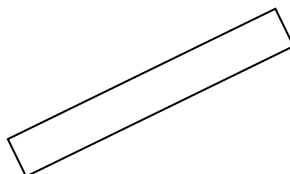
12)



13)



14)



15)

