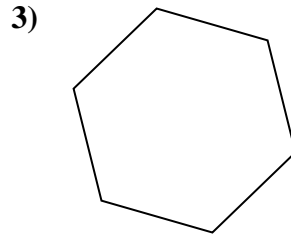
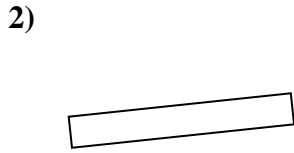
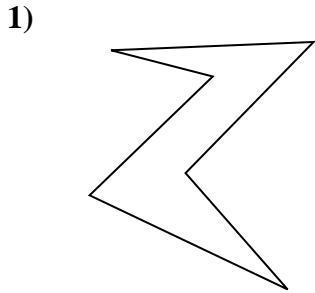


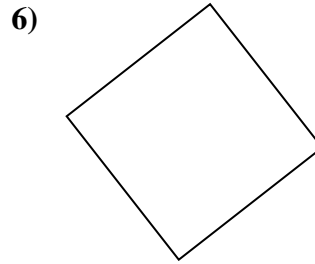
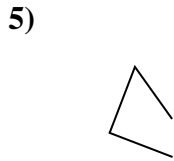
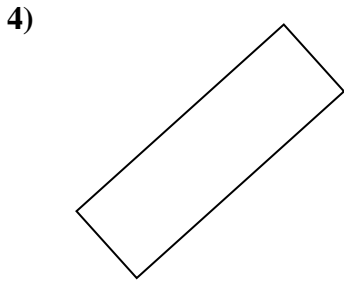


Determinez si la figure montrée est un 'Triangle', 'Carrée', 'Rectangle', 'Hexagone' or 'Autre'.

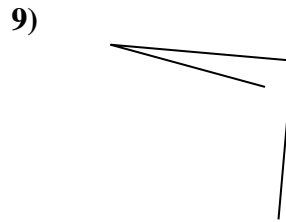
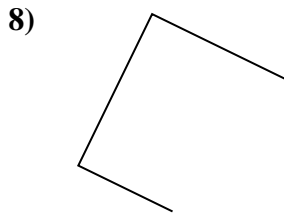
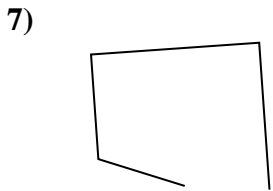
**Réponses**



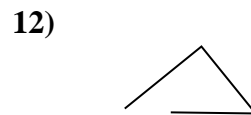
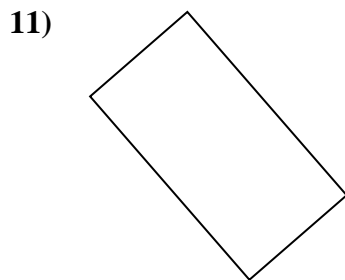
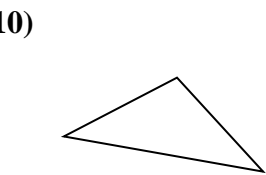
1. \_\_\_\_\_



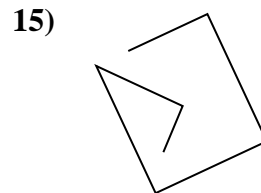
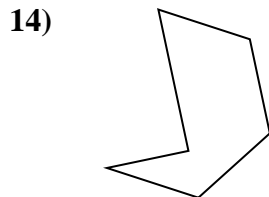
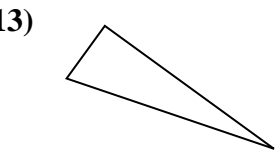
2. \_\_\_\_\_



3. \_\_\_\_\_



4. \_\_\_\_\_



5. \_\_\_\_\_

6. \_\_\_\_\_

7. \_\_\_\_\_

8. \_\_\_\_\_

9. \_\_\_\_\_

10. \_\_\_\_\_

11. \_\_\_\_\_

12. \_\_\_\_\_

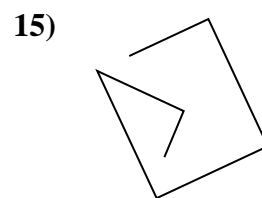
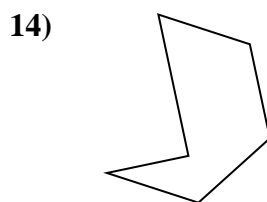
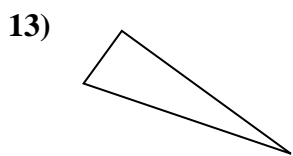
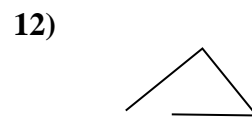
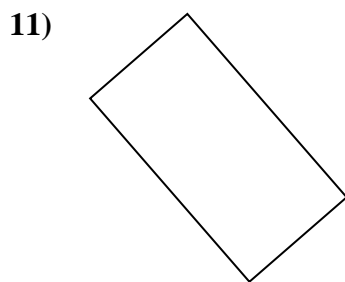
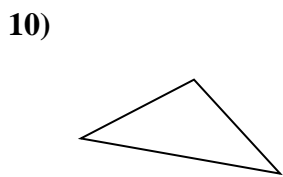
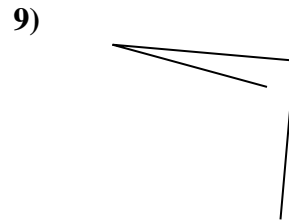
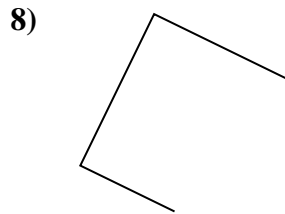
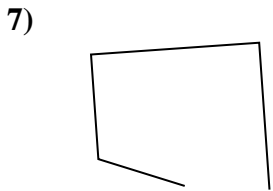
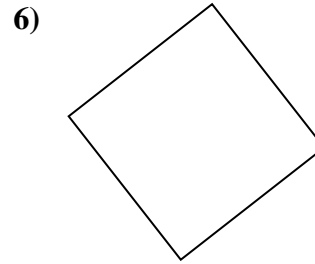
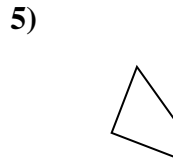
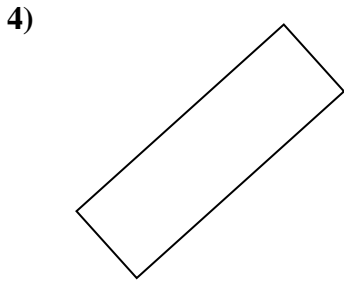
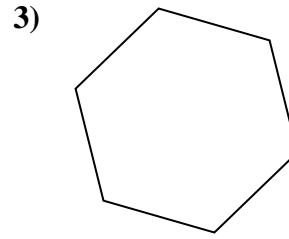
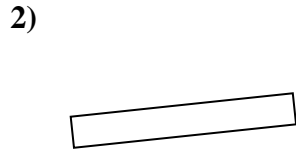
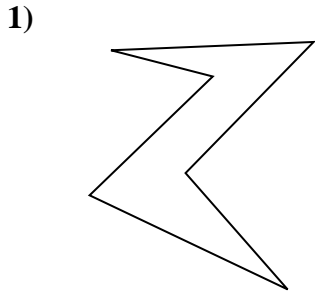
13. \_\_\_\_\_

14. \_\_\_\_\_

15. \_\_\_\_\_



Determinez si la figure montrée est un 'Triangle', 'Carrée', 'Rectangle', 'Hexagone' or 'Autre'.



Réponses

1. Hexagone

2. rectangle

3. Hexagone

4. rectangle

5. Autre

6. square

7. Autre

8. Autre

9. Autre

10. triangle

11. rectangle

12. Autre

13. triangle

14. Hexagone

15. Autre