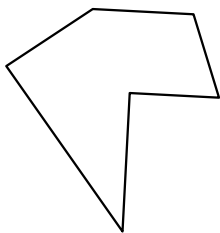





Identifiez les types de figures montrées.

**Réponses**

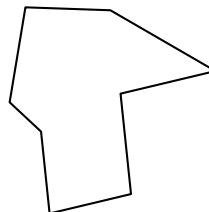
1)



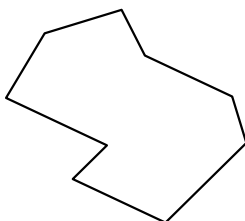
2)



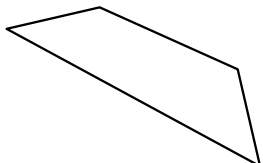
3)



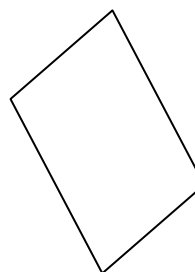
4)



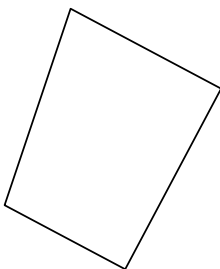
5)



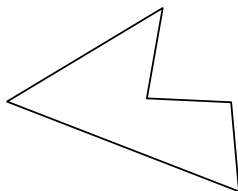
6)




7)



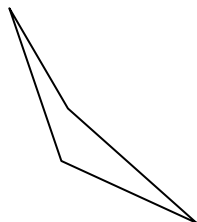
8)



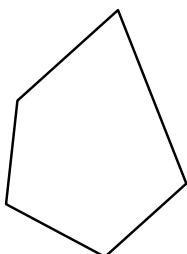
9)



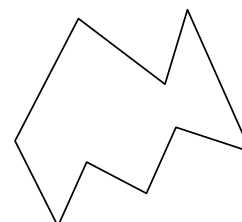
10)



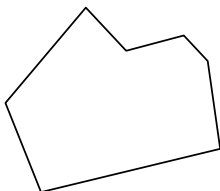
11)



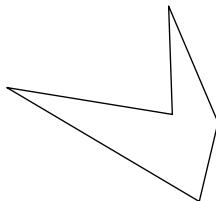
12)



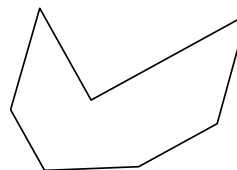
13)




14)



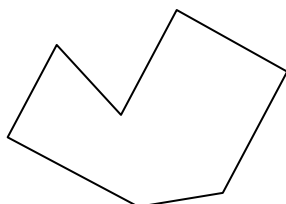
15)



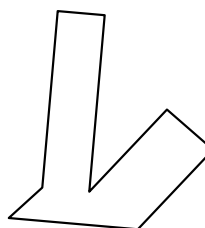
16)



17)



18)




- 1. \_\_\_\_\_
- 2. \_\_\_\_\_
- 3. \_\_\_\_\_
- 4. \_\_\_\_\_
- 5. \_\_\_\_\_
- 6. \_\_\_\_\_
- 7. \_\_\_\_\_
- 8. \_\_\_\_\_
- 9. \_\_\_\_\_
- 10. \_\_\_\_\_
- 11. \_\_\_\_\_
- 12. \_\_\_\_\_
- 13. \_\_\_\_\_
- 14. \_\_\_\_\_
- 15. \_\_\_\_\_
- 16. \_\_\_\_\_
- 17. \_\_\_\_\_
- 18. \_\_\_\_\_
- 19. \_\_\_\_\_
- 20. \_\_\_\_\_




Identifiez les types de figures montrées.

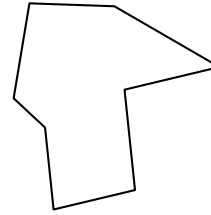
1)



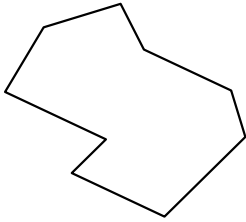
2)



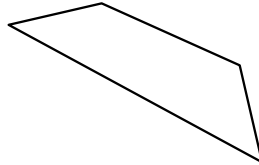
3)



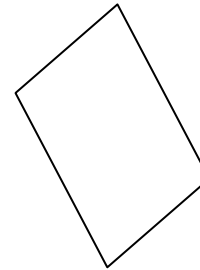
4)



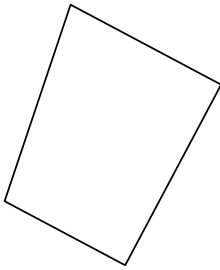
5)



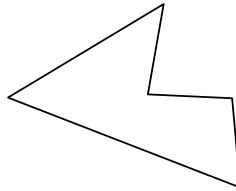
6)




7)



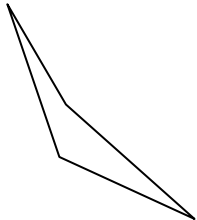
8)



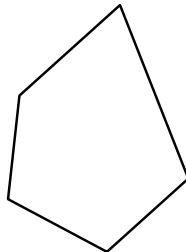
9)



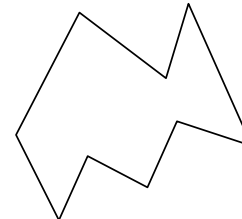
10)



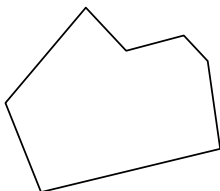
11)



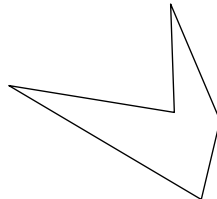
12)



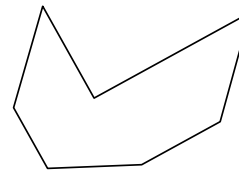
13)




14)



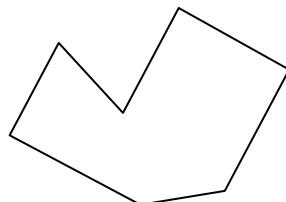
15)



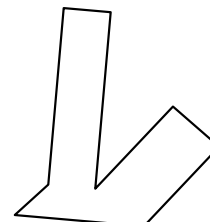
16)



17)



18)



**Réponses**

1. Hexagone

2. Nonagone

3. Octogone

4. Nonagone

5. Quadrilatère

6. Quadrilatère

7. Quadrilatère

8. Pentagone

9. Heptagone

10. Quadrilatère

11. Pentagone

12. Nonagone

13. Heptagone

14. Pentagone

15. Heptagone

16. Hexagone

17. Heptagone

18. Octogone

19. Octogone

20. Heptagone

21. Octogone