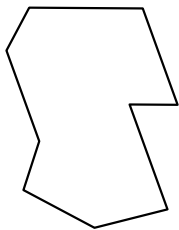




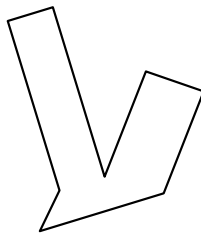
Identifiez les types de figures montrées.

**Réponses**

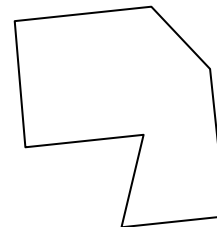
1)



2)



3)

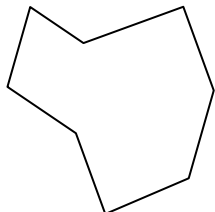


1. \_\_\_\_\_

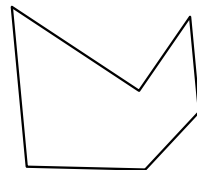
2. \_\_\_\_\_

3. \_\_\_\_\_

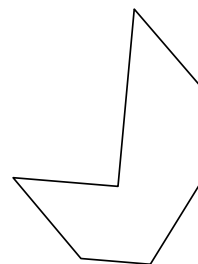
4)



5)



6)

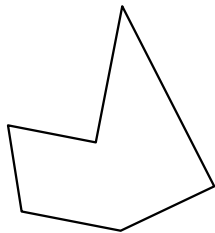


4. \_\_\_\_\_

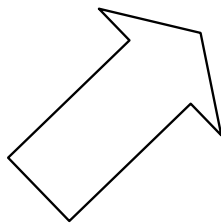
5. \_\_\_\_\_

6. \_\_\_\_\_

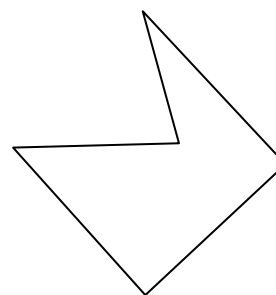
7)



8)



9)

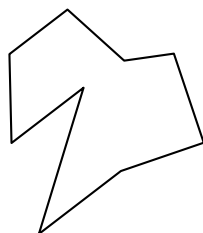


7. \_\_\_\_\_

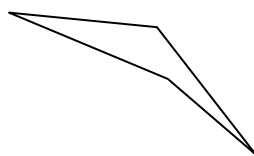
8. \_\_\_\_\_

9. \_\_\_\_\_

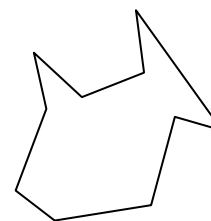
10)



11)



12)



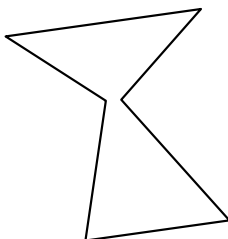
10. \_\_\_\_\_

11. \_\_\_\_\_

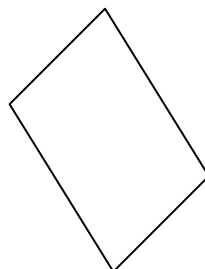
12. \_\_\_\_\_

13. \_\_\_\_\_


13)



14)



15)



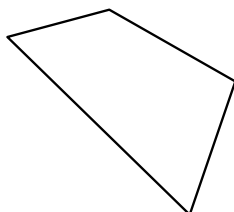
14. \_\_\_\_\_

15. \_\_\_\_\_

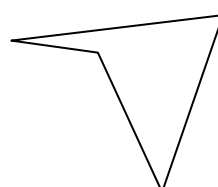
16. \_\_\_\_\_

17. \_\_\_\_\_

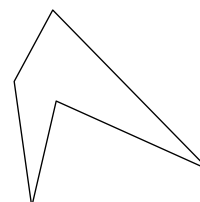
16)



17)



18)



18. \_\_\_\_\_

19. \_\_\_\_\_

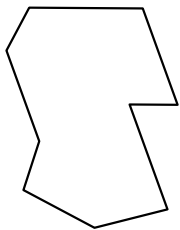
20. \_\_\_\_\_

21. \_\_\_\_\_

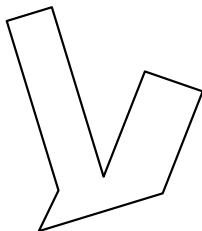


Identifiez les types de figures montrées.

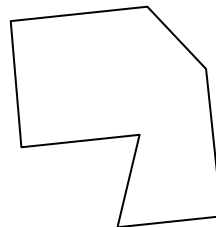
1)



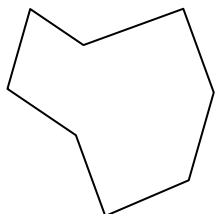
2)




3)



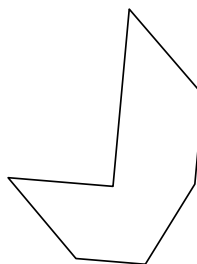
4)



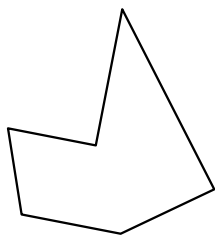
5)



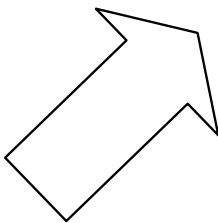
6)



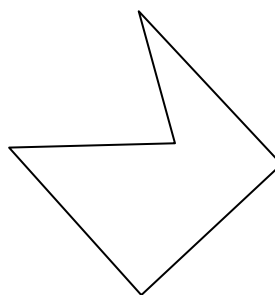
7)




8)



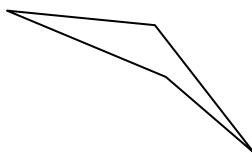
9)



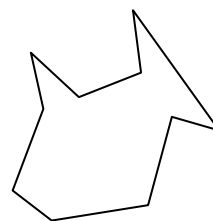
10)



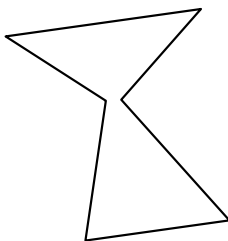
11)



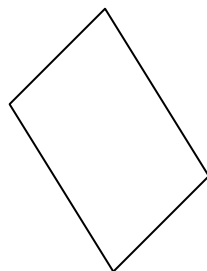
12)




13)



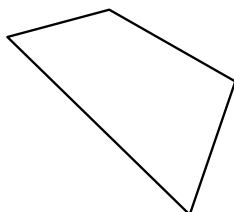
14)



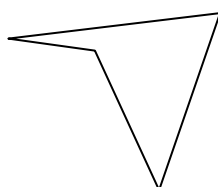
15)



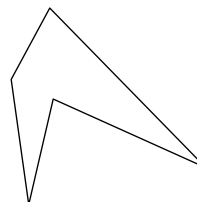
16)



17)



18)



**Réponses**

1. Nonagone

2. Octogone

3. Heptagone

4. Octogone

5. Hexagone

6. Heptagone

7. Hexagone

8. Heptagone

9. Pentagone

10. Nonagone

11. Quadrilatère

12. Décagone

13. Hexagone

14. Quadrilatère

15. Décagone

16. Quadrilatère

17. Quadrilatère

18. Pentagone

19. Octogone

20. Quadrilatère

21. Octogone