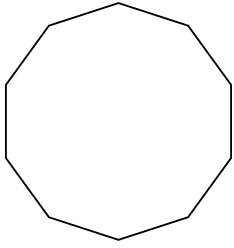


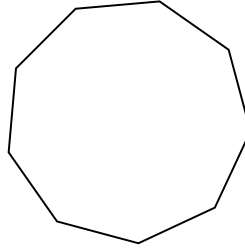


Identifiez le type de figure montrée.

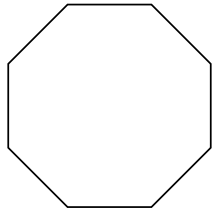
1)



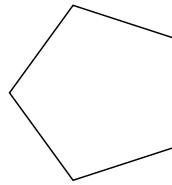
2)



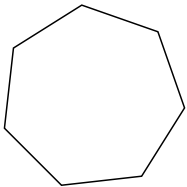
3)



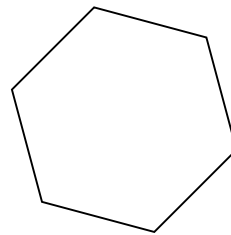
4)




5)




6)



7)



8)



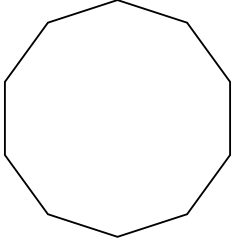
Réponses

- 1. _____
- 2. _____
- 3. _____
- 4. _____
- 5. _____
- 6. _____
- 7. _____
- 8. _____

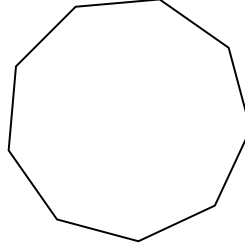


Identifiez le type de figure montrée.

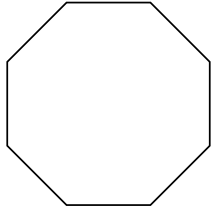
1)



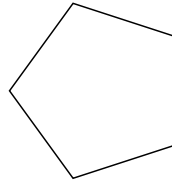
2)



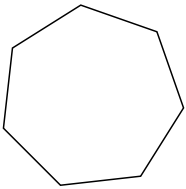
3)



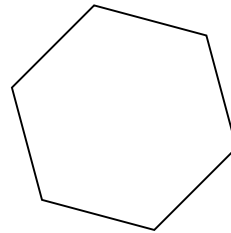
4)




5)




6)



7)



8)



Réponses

1. Décagone

2. Nonagone

3. Octogone

4. Pentagone

5. Heptagone

6. Hexagone

7. triangle

8. Quadrilatère