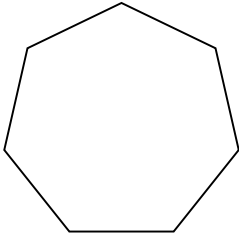


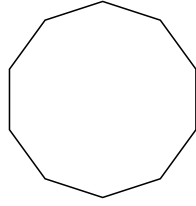


Identifiez le type de figure montrée.

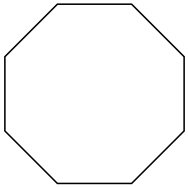
1)



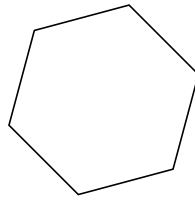
2)



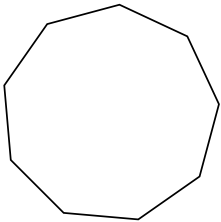
3)



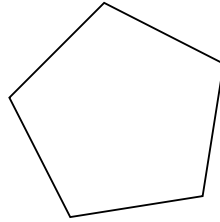
4)



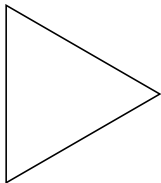
5)




6)



7)



8)



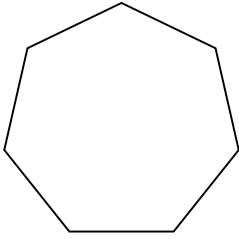
**Réponses**

- 1. \_\_\_\_\_
- 2. \_\_\_\_\_
- 3. \_\_\_\_\_
- 4. \_\_\_\_\_
- 5. \_\_\_\_\_
- 6. \_\_\_\_\_
- 7. \_\_\_\_\_
- 8. \_\_\_\_\_

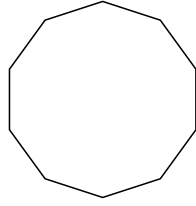


Identifiez le type de figure montrée.

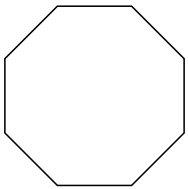
1)



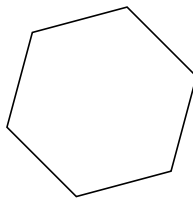
2)



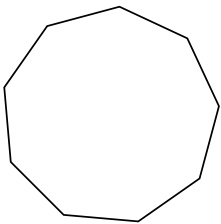
3)



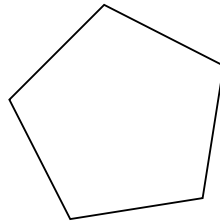
4)



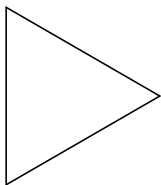
5)




6)



7)



8)



**Réponses**

1. **Heptagone**

2. **Décagone**

3. **Octogone**

4. **Hexagone**

5. **Nonagone**

6. **Pentagone**

7. **triangle**

8. **Quadrilatère**