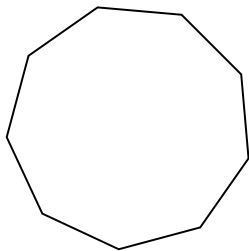


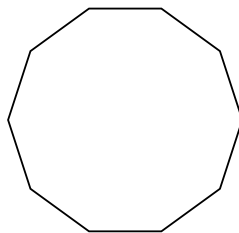


Identifiez le type de figure montrée.

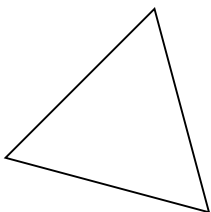
1)



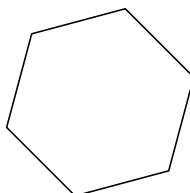
2)



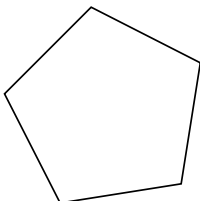
3)



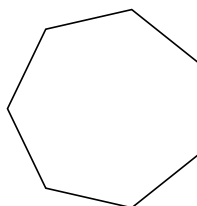
4)



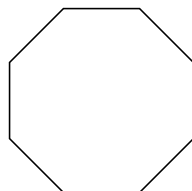
5)




6)



7)



8)



Réponses

1. _____

2. _____

3. _____

4. _____

5. _____

6. _____

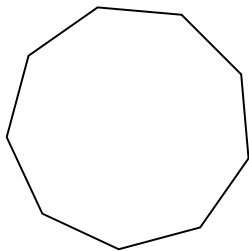
7. _____

8. _____

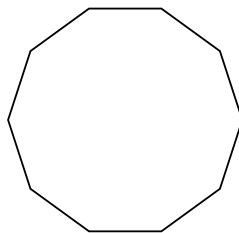


Identifiez le type de figure montrée.

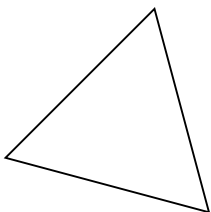
1)



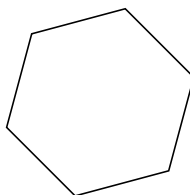
2)



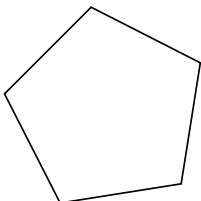
3)



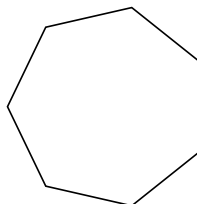
4)



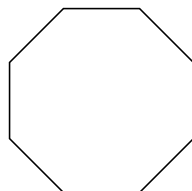
5)



6)



7)



8)



Réponses

- 1. Nonagone
- 2. Décagone
- 3. triangle
- 4. Hexagone
- 5. Pentagone
- 6. Heptagone
- 7. Octogone
- 8. Quadrilatère