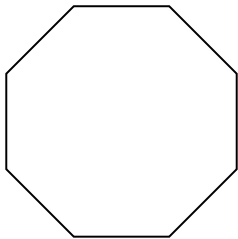


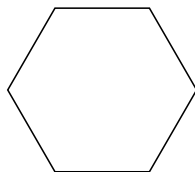


Identifiez le type de figure montrée.


1)



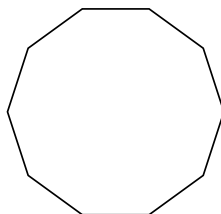
2)



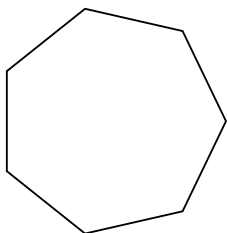
3)



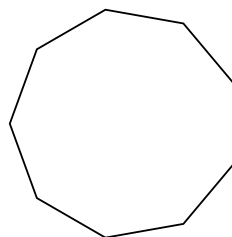
4)



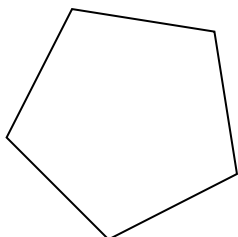
5)



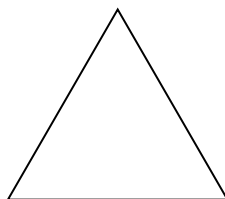
6)



7)



8)



**Réponses**

1. \_\_\_\_\_

2. \_\_\_\_\_

3. \_\_\_\_\_

4. \_\_\_\_\_

5. \_\_\_\_\_

6. \_\_\_\_\_

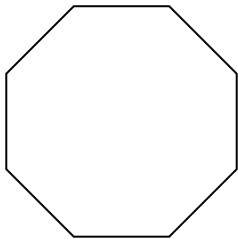
7. \_\_\_\_\_

8. \_\_\_\_\_

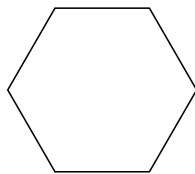


Identifiez le type de figure montrée.


1)



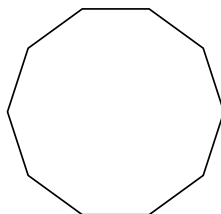
2)



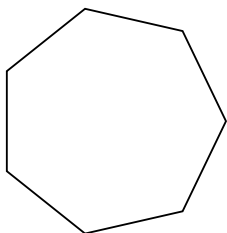
3)



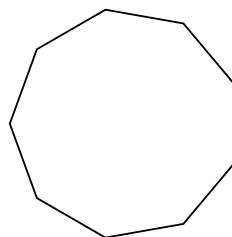
4)



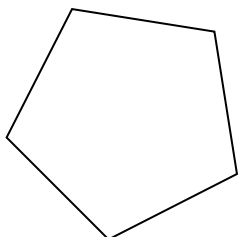
5)



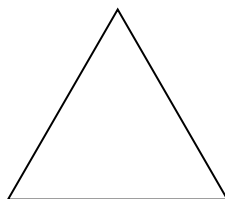
6)



7)



8)



**Réponses**

1. Octogone

2. Hexagone

3. Quadrilatère

4. Décagone

5. Heptagone

6. Nonagone

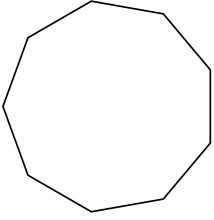
7. Pentagone

8. triangle

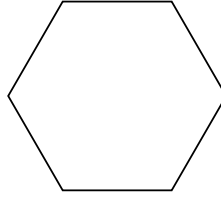


Identifiez le type de figure montrée.

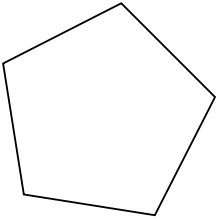
1)



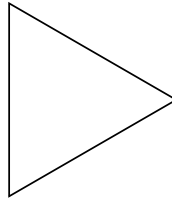
2)




3)



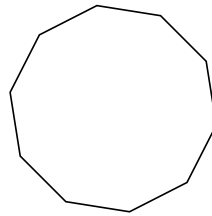
4)



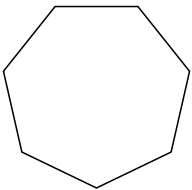
5)



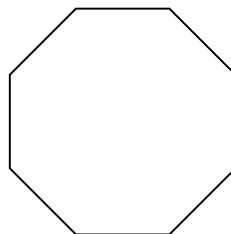
6)



7)



8)



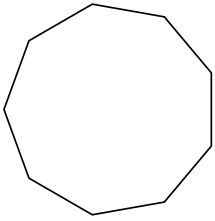
**Réponses**

- 1. \_\_\_\_\_
- 2. \_\_\_\_\_
- 3. \_\_\_\_\_
- 4. \_\_\_\_\_
- 5. \_\_\_\_\_
- 6. \_\_\_\_\_
- 7. \_\_\_\_\_
- 8. \_\_\_\_\_

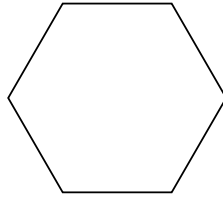


Identifiez le type de figure montrée.

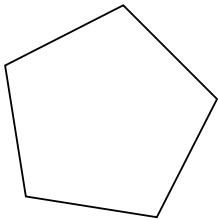
1)



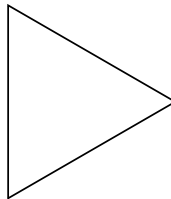
2)




3)



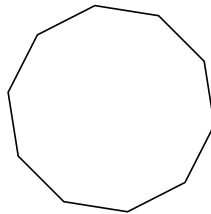
4)



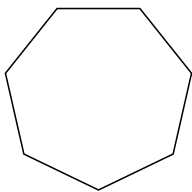
5)



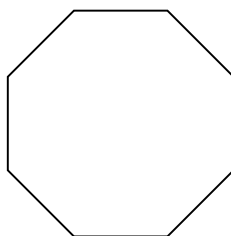
6)



7)



8)



**Réponses**

1. **Nonagone**

2. **Hexagone**

3. **Pentagone**

4. **triangle**

5. **Quadrilatère**

6. **Décagone**

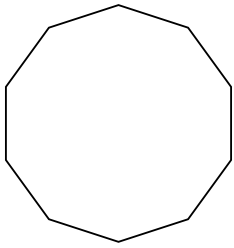
7. **Heptagone**

8. **Octogone**

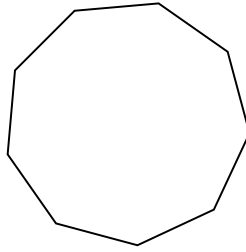


Identifiez le type de figure montrée.

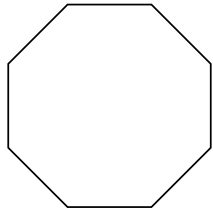
1)



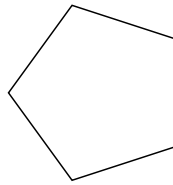
2)



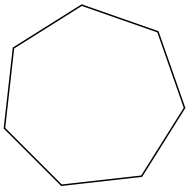
3)



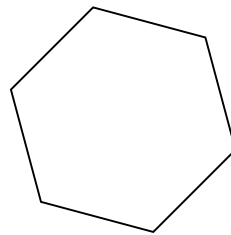
4)




5)




6)



7)



8)



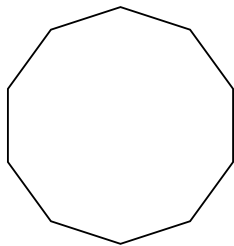
**Réponses**

- 1. \_\_\_\_\_
- 2. \_\_\_\_\_
- 3. \_\_\_\_\_
- 4. \_\_\_\_\_
- 5. \_\_\_\_\_
- 6. \_\_\_\_\_
- 7. \_\_\_\_\_
- 8. \_\_\_\_\_

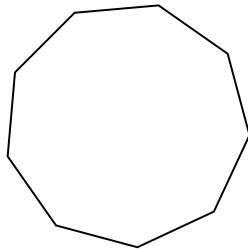


Identifiez le type de figure montrée.

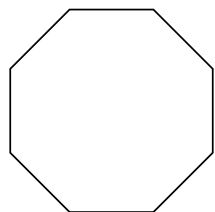
1)



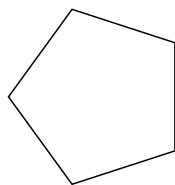
2)



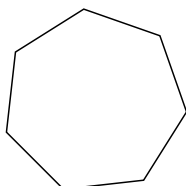
3)



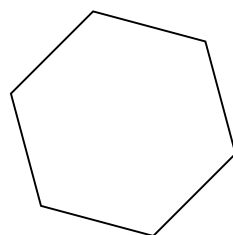
4)




5)




6)



7)



8)



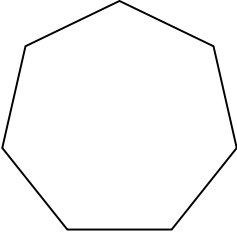
**Réponses**

- 1. Décagone
- 2. Nonagone
- 3. Octogone
- 4. Pentagone
- 5. Heptagone
- 6. Hexagone
- 7. triangle
- 8. Quadrilatère

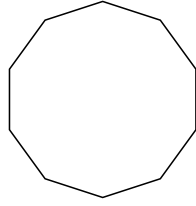


Identifiez le type de figure montrée.

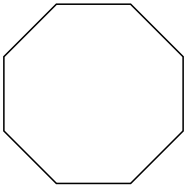
1)



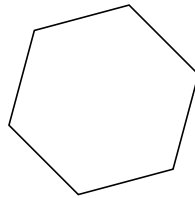
2)



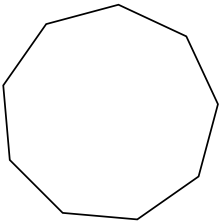
3)



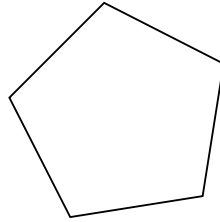
4)



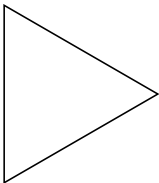
5)




6)



7)



8)



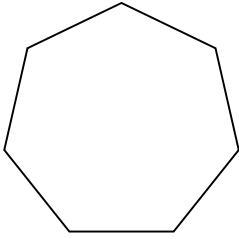
**Réponses**

- 1. \_\_\_\_\_
- 2. \_\_\_\_\_
- 3. \_\_\_\_\_
- 4. \_\_\_\_\_
- 5. \_\_\_\_\_
- 6. \_\_\_\_\_
- 7. \_\_\_\_\_
- 8. \_\_\_\_\_

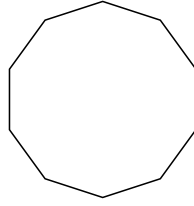


Identifiez le type de figure montrée.

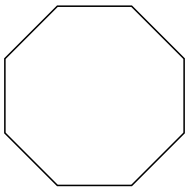
1)



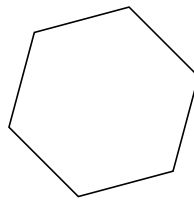
2)



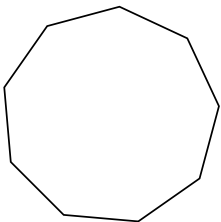
3)



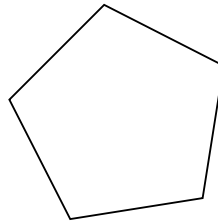
4)



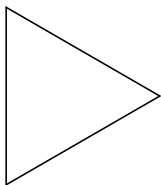
5)




6)



7)



8)



**Réponses**

1. **Heptagone**

2. **Décagone**

3. **Octogone**

4. **Hexagone**

5. **Nonagone**

6. **Pentagone**

7. **triangle**

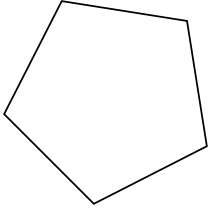
8. **Quadrilatère**






Identifiez le type de figure montrée.

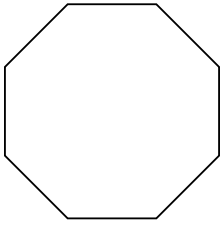
1)



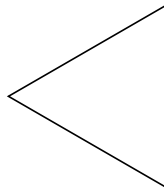
2)



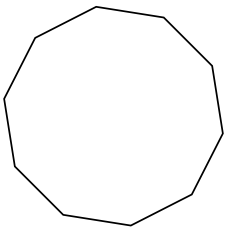
3)



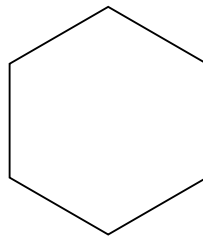
4)



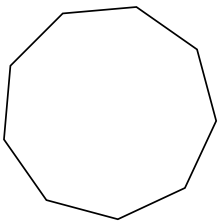
5)



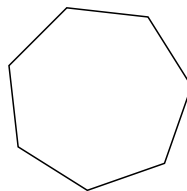
6)



7)



8)



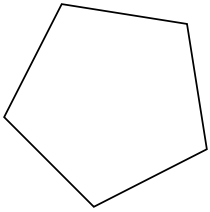
**Réponses**

- 1. \_\_\_\_\_
- 2. \_\_\_\_\_
- 3. \_\_\_\_\_
- 4. \_\_\_\_\_
- 5. \_\_\_\_\_
- 6. \_\_\_\_\_
- 7. \_\_\_\_\_
- 8. \_\_\_\_\_




Identifiez le type de figure montrée.

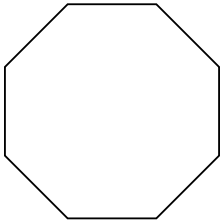
1)



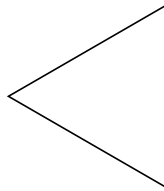
2)



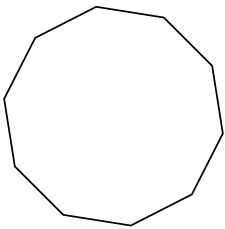
3)



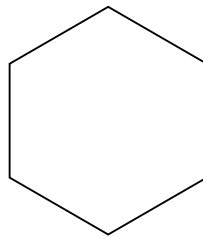
4)



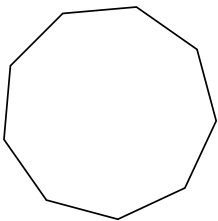
5)



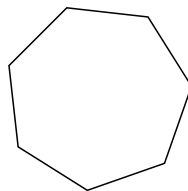
6)



7)



8)



Réponses

1. Pentagone

2. Quadrilatère

3. Octogone

4. triangle

5. Décagone

6. Hexagone

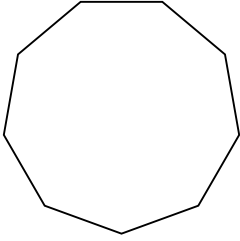
7. Nonagone

8. Heptagone

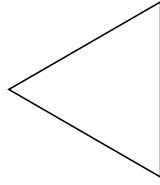


Identifiez le type de figure montrée.

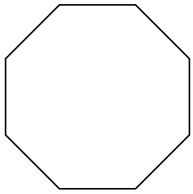
1)



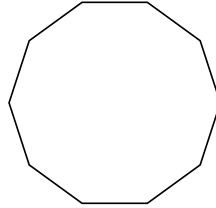
2)




3)



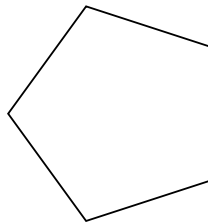
4)



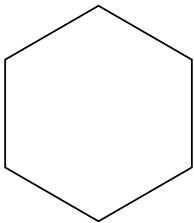
5)



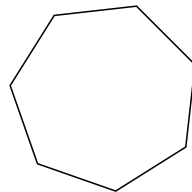
6)



7)



8)



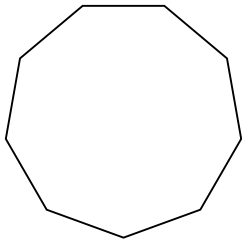
**Réponses**

- 1. \_\_\_\_\_
- 2. \_\_\_\_\_
- 3. \_\_\_\_\_
- 4. \_\_\_\_\_
- 5. \_\_\_\_\_
- 6. \_\_\_\_\_
- 7. \_\_\_\_\_
- 8. \_\_\_\_\_

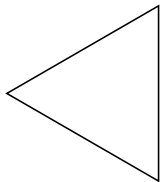


Identifiez le type de figure montrée.

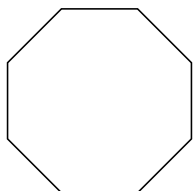
1)



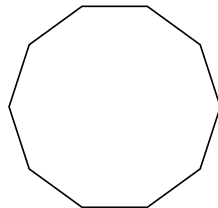
2)




3)



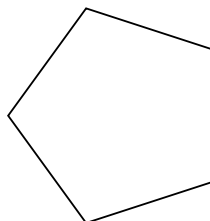
4)



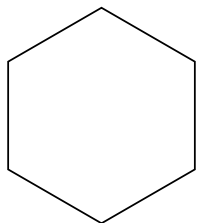
5)



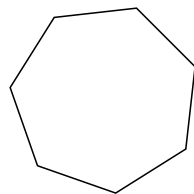
6)



7)



8)



**Réponses**

1. **Nonagone**

2. **triangle**

3. **Octogone**

4. **Décagone**

5. **Quadrilatère**

6. **Pentagone**

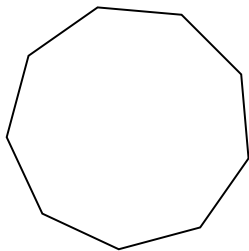
7. **Hexagone**

8. **Heptagone**

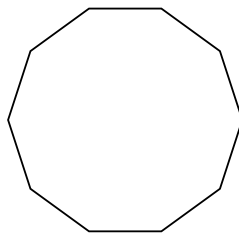


Identifiez le type de figure montrée.

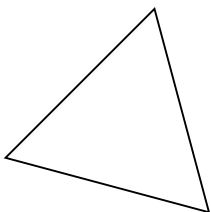
1)



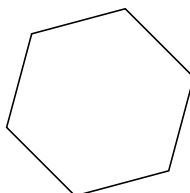
2)



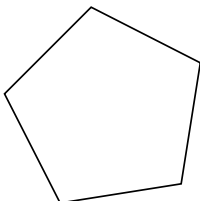
3)



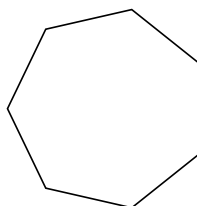
4)



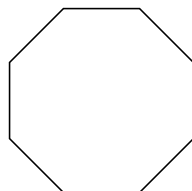
5)



6)



7)



8)



**Réponses**

1. \_\_\_\_\_

2. \_\_\_\_\_

3. \_\_\_\_\_

4. \_\_\_\_\_

5. \_\_\_\_\_

6. \_\_\_\_\_

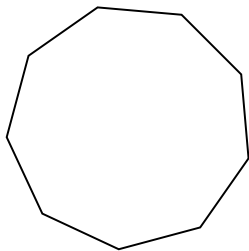
7. \_\_\_\_\_

8. \_\_\_\_\_

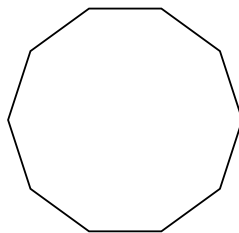


Identifiez le type de figure montrée.

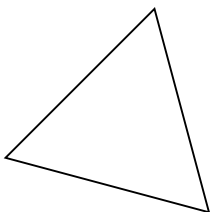
1)



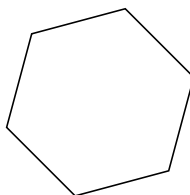
2)



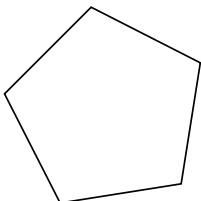
3)



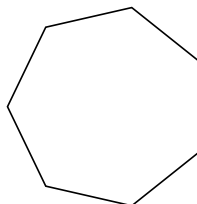
4)



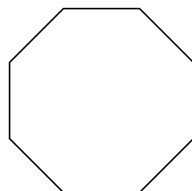
5)



6)



7)



8)



**Réponses**

1. Nonagone

2. Décagone

3. triangle

4. Hexagone

5. Pentagone

6. Heptagone

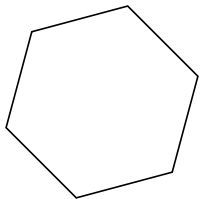
7. Octogone

8. Quadrilatère

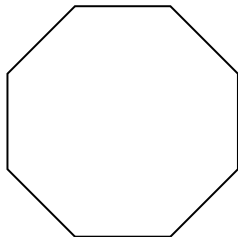


Identifiez le type de figure montrée.

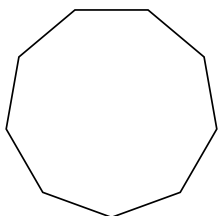
1)



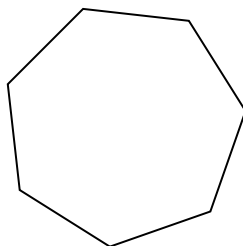
2)




3)



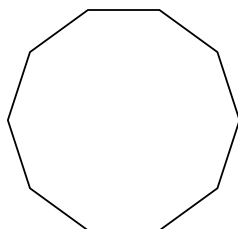
4)



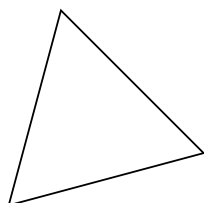
5)



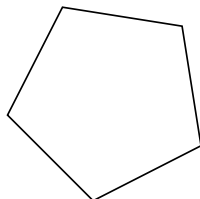
6)



7)



8)



**Réponses**

1. \_\_\_\_\_

2. \_\_\_\_\_

3. \_\_\_\_\_

4. \_\_\_\_\_

5. \_\_\_\_\_

6. \_\_\_\_\_

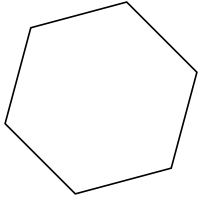
7. \_\_\_\_\_

8. \_\_\_\_\_

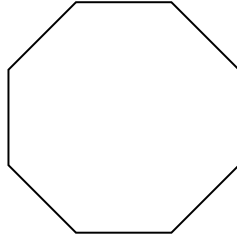


Identifiez le type de figure montrée.

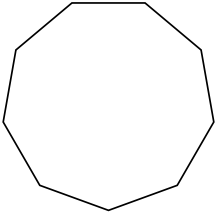
1)



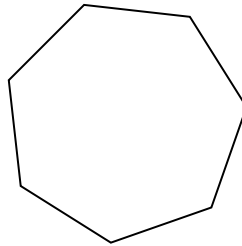
2)




3)



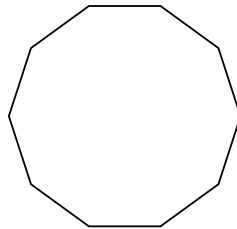
4)



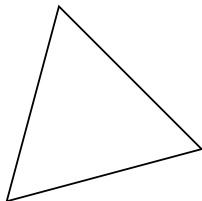
5)



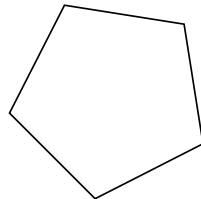
6)



7)



8)



**Réponses**

1. **Hexagone**

2. **Octogone**

3. **Nonagone**

4. **Heptagone**

5. **Quadrilatère**

6. **Décagone**

7. **triangle**

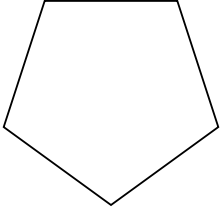
8. **Pentagone**



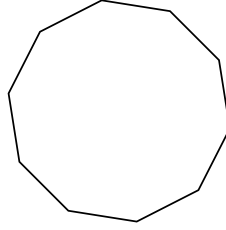


Identifiez le type de figure montrée.

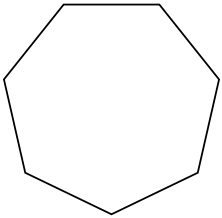
1)



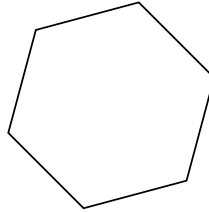
2)




3)



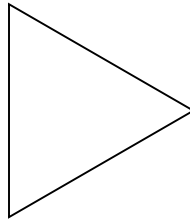
4)



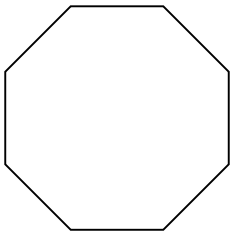
5)



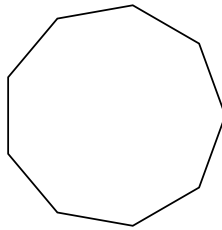
6)



7)



8)



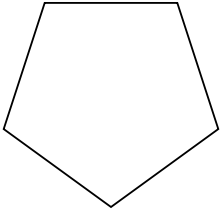
**Réponses**

- 1. \_\_\_\_\_
- 2. \_\_\_\_\_
- 3. \_\_\_\_\_
- 4. \_\_\_\_\_
- 5. \_\_\_\_\_
- 6. \_\_\_\_\_
- 7. \_\_\_\_\_
- 8. \_\_\_\_\_

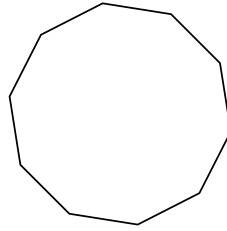


Identifiez le type de figure montrée.

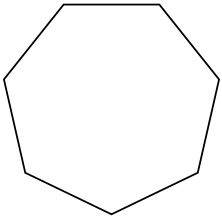
1)



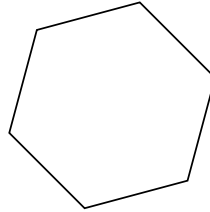
2)




3)



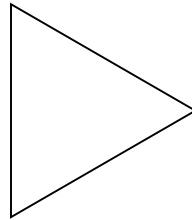
4)



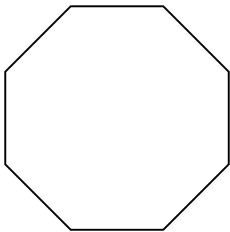
5)



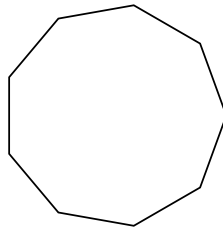
6)



7)



8)



**Réponses**

1. **Pentagone**

2. **Décagone**

3. **Heptagone**

4. **Hexagone**

5. **Quadrilatère**

6. **triangle**

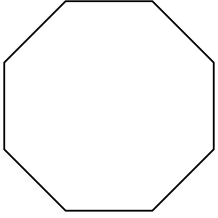
7. **Octogone**

8. **Nonagone**

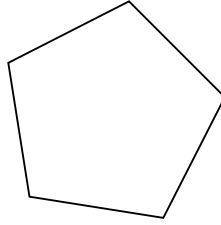


Identifiez le type de figure montrée.

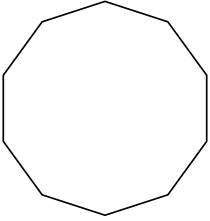
1)




2)



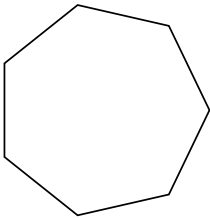
3)



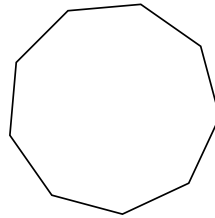
4)



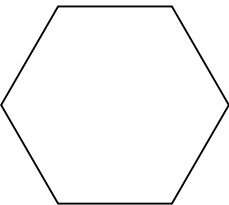
5)



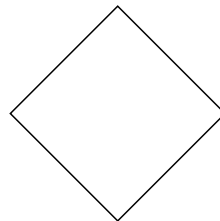
6)



7)



8)



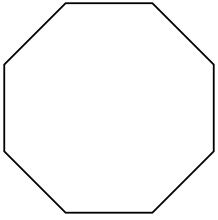
**Réponses**

- 1. \_\_\_\_\_
- 2. \_\_\_\_\_
- 3. \_\_\_\_\_
- 4. \_\_\_\_\_
- 5. \_\_\_\_\_
- 6. \_\_\_\_\_
- 7. \_\_\_\_\_
- 8. \_\_\_\_\_

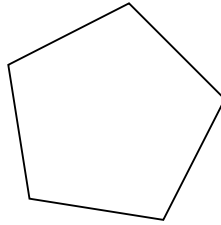


Identifiez le type de figure montrée.

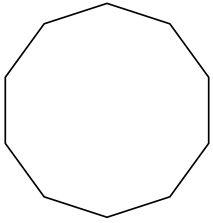
1)




2)



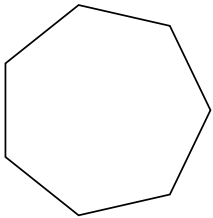
3)



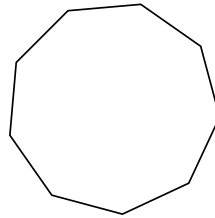
4)



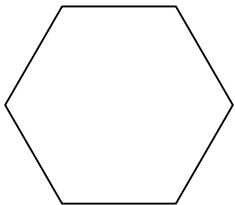
5)



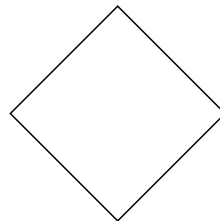
6)



7)



8)



**Réponses**

1. Octogone

2. Pentagone

3. Décagone

4. triangle

5. Heptagone

6. Nonagone

7. Hexagone

8. Quadrilatère