


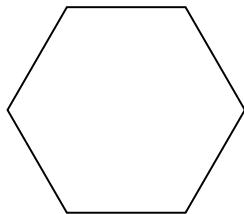


Identifiez le type de figure montrée.

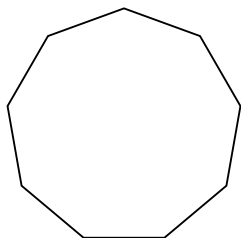
1)



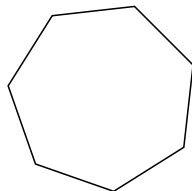
2)



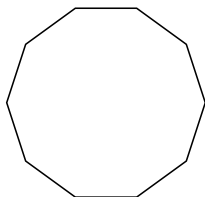
3)



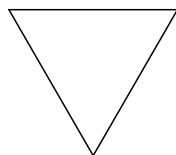
4)



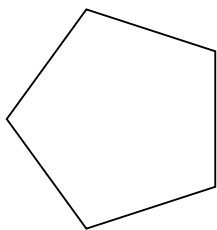
5)



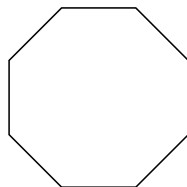
6)



7)



8)



Réponses

1. _____

2. _____

3. _____

4. _____

5. _____

6. _____


7. _____

8. _____

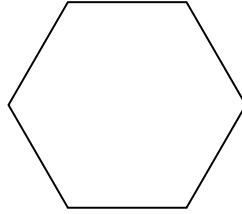


Identifiez le type de figure montrée.

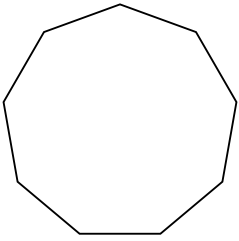
1)



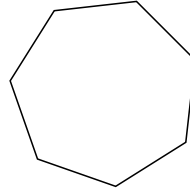
2)



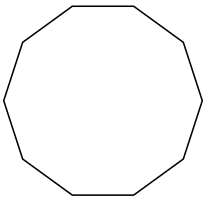
3)



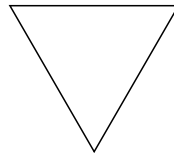
4)



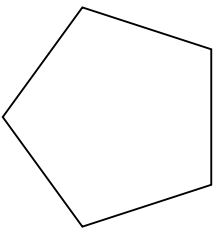
5)



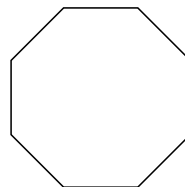
6)



7)



8)



Réponses

1. **Quadrilatère**

2. **Hexagone**

3. **Nonagone**

4. **Heptagone**

5. **Décagone**

6. **triangle**

7. **Pentagone**

8. **Octogone**