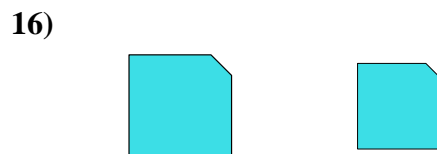
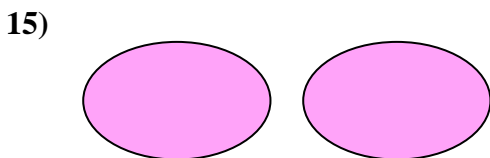
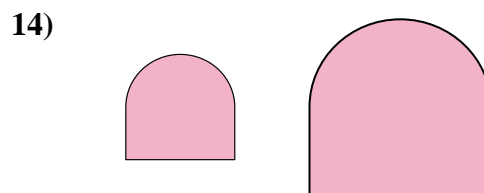
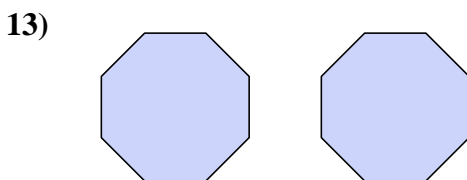

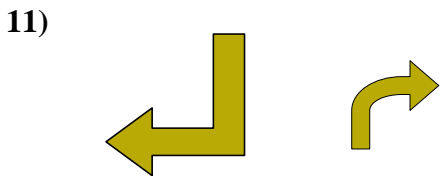


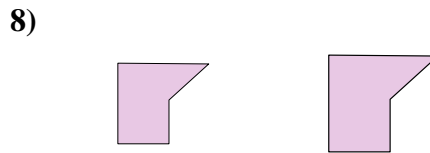
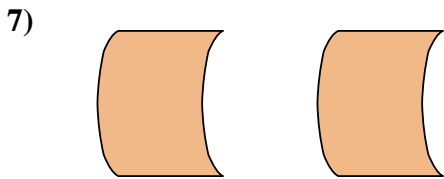
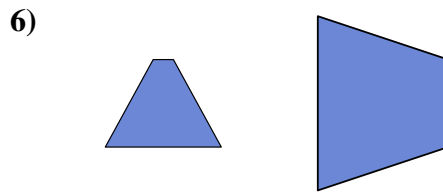
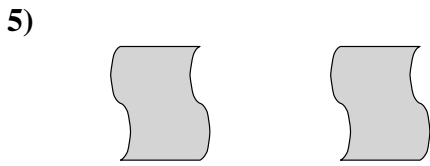
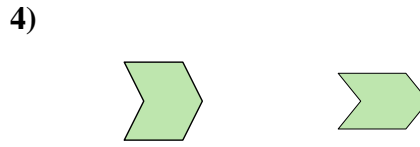
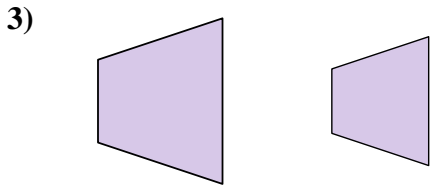

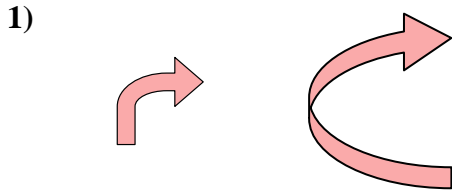




Déterminez si les formes affichées sont « similaires », « congruentes » ou « aucune ».

**Réponses**

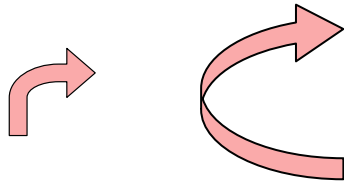


1. \_\_\_\_\_
2. \_\_\_\_\_
3. \_\_\_\_\_
4. \_\_\_\_\_
5. \_\_\_\_\_
6. \_\_\_\_\_
7. \_\_\_\_\_
8. \_\_\_\_\_
9. \_\_\_\_\_
10. \_\_\_\_\_
11. \_\_\_\_\_
12. \_\_\_\_\_
13. \_\_\_\_\_
14. \_\_\_\_\_
15. \_\_\_\_\_
16. \_\_\_\_\_

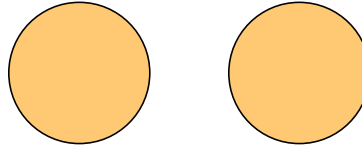


Déterminez si les formes affichées sont « similaires », « congruentes » ou « aucune ».

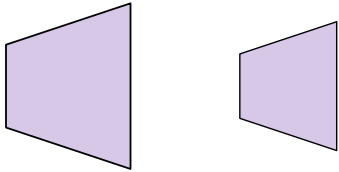
1)



2)



3)



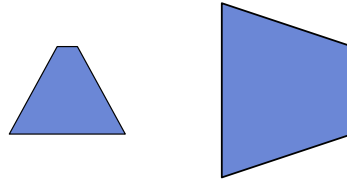
4)



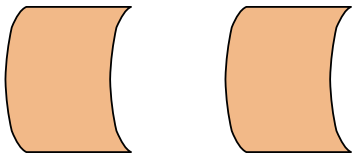
5)



6)



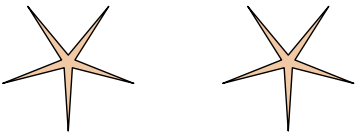
7)



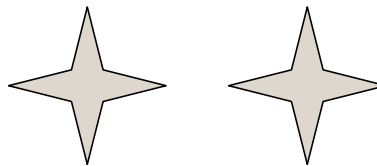
8)



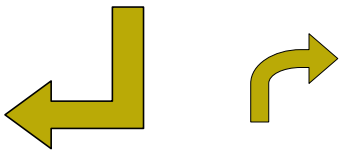
9)



10)



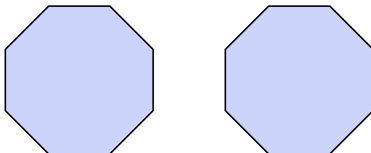
11)



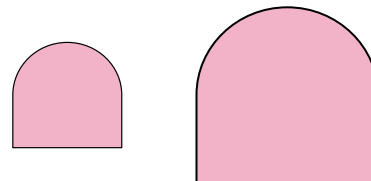
12)



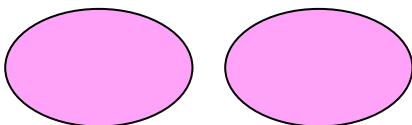
13)




14)



15)



16)



**Réponses**

1. ni

2. conforme

3. similaire

4. ni

5. conforme

6. ni

7. conforme

8. similaire

9. conforme

10. conforme

11. ni

12. ni

13. conforme

14. similaire

15. conforme

16. similaire