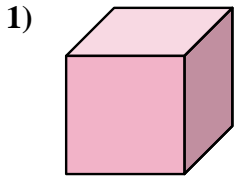


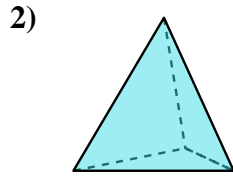


Déterminez quel choix représente le MIEUX la description de la figure.

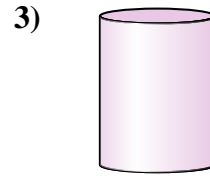
Réponses



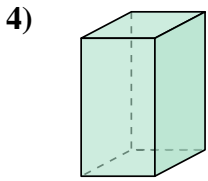
- A. cylinder
- B. triangular pyramid
- C. triangular prism
- D. cube



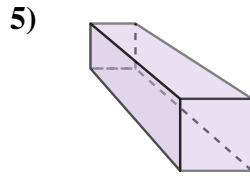
- A. rectangular pyramid
- B. triangular pyramid
- C. triangular prism
- D. rectangular prism



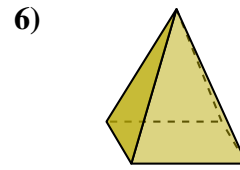
- A. cylinder
- B. sphere
- C. cone
- D. cube



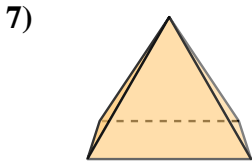
- A. cylinder
- B. rectangular pyramid
- C. sphere
- D. rectangular prism



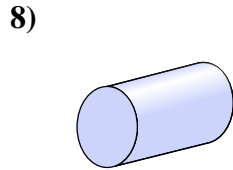
- A. rectangular prism
- B. cylinder
- C. cube
- D. sphere



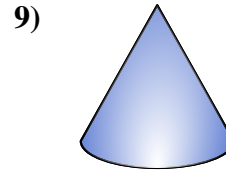
- A. rectangular pyramid
- B. triangular prism
- C. sphere
- D. cone



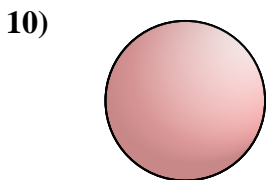
- A. cone
- B. triangular prism
- C. rectangular pyramid
- D. sphere



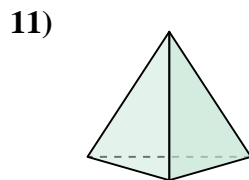
- A. triangular pyramid
- B. cylinder
- C. rectangular pyramid
- D. sphere



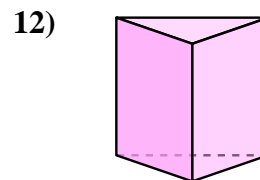
- A. cone
- B. cylinder
- C. triangular pyramid
- D. sphere



- A. cylinder
- B. triangular prism
- C. sphere
- D. cube



- A. sphere
- B. triangular pyramid
- C. rectangular pyramid
- D. rectangular prism



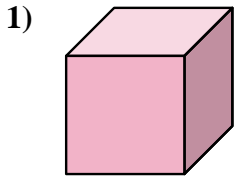
- A. triangular prism
- B. cylinder
- C. rectangular prism
- D. triangular pyramid

- 1. \_\_\_\_\_
- 2. \_\_\_\_\_
- 3. \_\_\_\_\_
- 4. \_\_\_\_\_
- 5. \_\_\_\_\_
- 6. \_\_\_\_\_
- 7. \_\_\_\_\_
- 8. \_\_\_\_\_
- 9. \_\_\_\_\_
- 10. \_\_\_\_\_
- 11. \_\_\_\_\_
- 12. \_\_\_\_\_

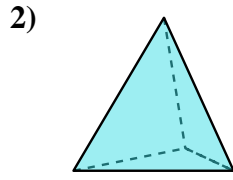


Déterminez quel choix représente le MIEUX la description de la figure.

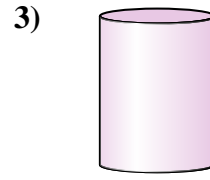
**Réponses**



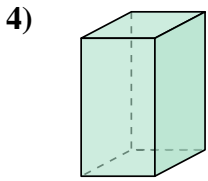
- A. cylinder
- B. triangular pyramid
- C. triangular prism
- D. cube



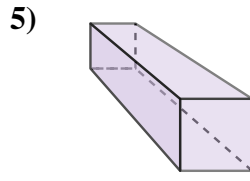
- A. rectangular pyramid
- B. triangular pyramid
- C. triangular prism
- D. rectangular prism



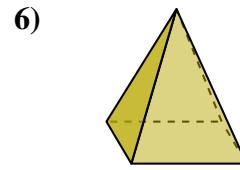
- A. cylinder
- B. sphere
- C. cone
- D. cube



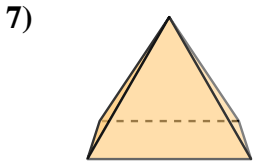
- A. cylinder
- B. rectangular pyramid
- C. sphere
- D. rectangular prism



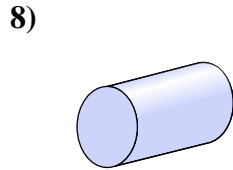
- A. rectangular prism
- B. cylinder
- C. cube
- D. sphere



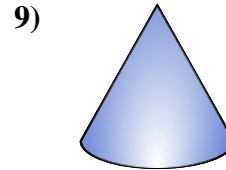
- A. rectangular pyramid
- B. triangular prism
- C. sphere
- D. cone



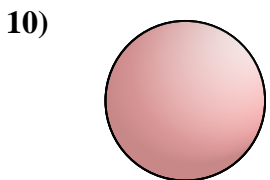
- A. cone
- B. triangular prism
- C. rectangular pyramid
- D. sphere



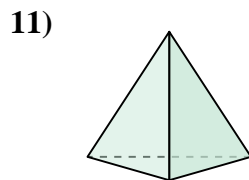
- A. triangular pyramid
- B. cylinder
- C. rectangular pyramid
- D. sphere



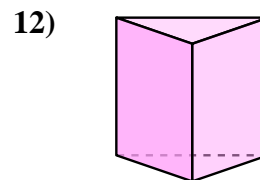
- A. cone
- B. cylinder
- C. triangular pyramid
- D. sphere



- A. cylinder
- B. triangular prism
- C. sphere
- D. cube



- A. sphere
- B. triangular pyramid
- C. rectangular pyramid
- D. rectangular prism



- A. triangular prism
- B. cylinder
- C. rectangular prism
- D. triangular pyramid

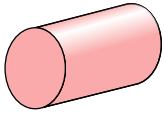
- 1.     **D**
- 2.     **B**
- 3.     **A**
- 4.     **D**
- 5.     **A**
- 6.     **A**
- 7.     **C**
- 8.     **B**
- 9.     **A**
- 10.     **C**
- 11.     **B**
- 12.     **A**



Déterminez quel choix représente le MIEUX la description de la figure.

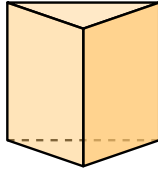
Réponses

1)



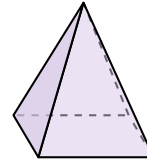
- A. sphere
- B. triangular pyramid
- C. rectangular pyramid
- D. cylinder

2)




- A. triangular prism
- B. cone
- C. triangular pyramid
- D. rectangular prism

3)



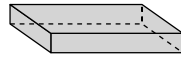
- A. rectangular pyramid
- B. sphere
- C. rectangular prism
- D. triangular prism

4)



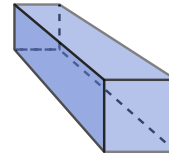
- A. triangular pyramid
- B. cylinder
- C. triangular prism
- D. sphere

5)



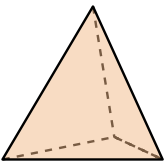
- A. rectangular pyramid
- B. sphere
- C. rectangular prism
- D. triangular prism

6)



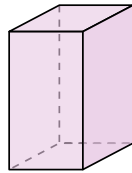
- A. cube
- B. cone
- C. triangular pyramid
- D. rectangular prism

7)



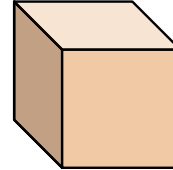
- A. triangular pyramid
- B. triangular prism
- C. cone
- D. rectangular pyramid

8)



- A. cube
- B. cylinder
- C. rectangular pyramid
- D. rectangular prism

9)



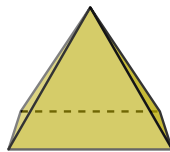
- A. cone
- B. cube
- C. triangular prism
- D. rectangular pyramid

10)




- A. cylinder
- B. sphere
- C. triangular pyramid
- D. cone

11)



- A. rectangular pyramid
- B. rectangular prism
- C. sphere
- D. cube

12)



- A. cone
- B. triangular pyramid
- C. triangular prism
- D. sphere

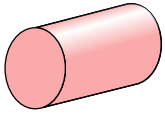
- 1. \_\_\_\_\_
- 2. \_\_\_\_\_
- 3. \_\_\_\_\_
- 4. \_\_\_\_\_
- 5. \_\_\_\_\_
- 6. \_\_\_\_\_
- 7. \_\_\_\_\_
- 8. \_\_\_\_\_
- 9. \_\_\_\_\_
- 10. \_\_\_\_\_
- 11. \_\_\_\_\_
- 12. \_\_\_\_\_



Déterminez quel choix représente le MIEUX la description de la figure.

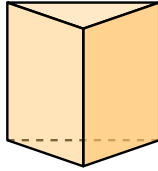
**Réponses**

1)



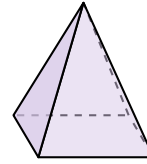
- A. sphere
- B. triangular pyramid
- C. rectangular pyramid
- D. cylinder

2)




- A. triangular prism
- B. cone
- C. triangular pyramid
- D. rectangular prism

3)



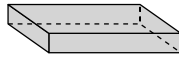
- A. rectangular pyramid
- B. sphere
- C. rectangular prism
- D. triangular prism

4)



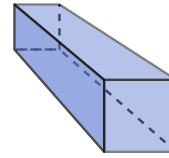
- A. triangular pyramid
- B. cylinder
- C. triangular prism
- D. sphere

5)



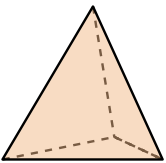
- A. rectangular pyramid
- B. sphere
- C. rectangular prism
- D. triangular prism

6)



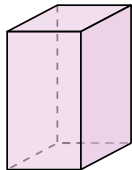
- A. cube
- B. cone
- C. triangular pyramid
- D. rectangular prism

7)



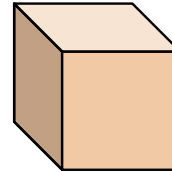
- A. triangular pyramid
- B. triangular prism
- C. cone
- D. rectangular pyramid

8)



- A. cube
- B. cylinder
- C. rectangular pyramid
- D. rectangular prism

9)



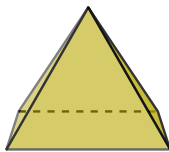
- A. cone
- B. cube
- C. triangular prism
- D. rectangular pyramid

10)




- A. cylinder
- B. sphere
- C. triangular pyramid
- D. cone

11)



- A. rectangular pyramid
- B. rectangular prism
- C. sphere
- D. cube

12)



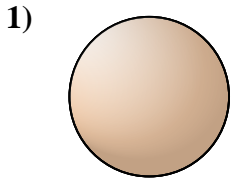
- A. cone
- B. triangular pyramid
- C. triangular prism
- D. sphere

- 1.   **D**
- 2.   **A**
- 3.   **A**
- 4.   **B**
- 5.   **C**
- 6.   **D**
- 7.   **A**
- 8.   **D**
- 9.   **B**
- 10.   **D**
- 11.   **A**
- 12.   **D**

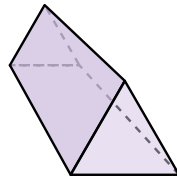


Déterminez quel choix représente le MIEUX la description de la figure.

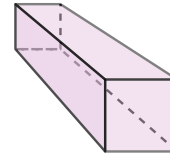
Réponses



- 1)
- A. triangular pyramid
  - B. sphere
  - C. rectangular pyramid
  - D. rectangular prism



- 2)
- A. triangular pyramid
  - B. cone
  - C. triangular prism
  - D. cube



- 3)
- A. cube
  - B. triangular prism
  - C. rectangular prism
  - D. rectangular pyramid

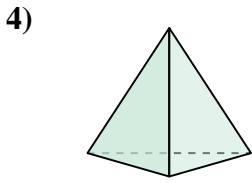
1. \_\_\_\_\_

2. \_\_\_\_\_


3. \_\_\_\_\_

4. \_\_\_\_\_

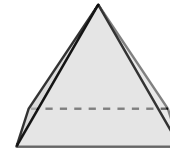
5. \_\_\_\_\_



- 4)
- A. triangular pyramid
  - B. sphere
  - C. triangular prism
  - D. cube



- 5)
- A. rectangular prism
  - B. rectangular pyramid
  - C. cylinder
  - D. triangular pyramid



- 6)
- A. cone
  - B. triangular pyramid
  - C. rectangular pyramid
  - D. cylinder

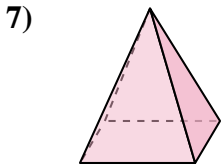
6. \_\_\_\_\_

7. \_\_\_\_\_

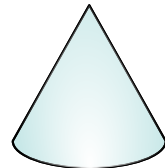
8. \_\_\_\_\_

9. \_\_\_\_\_

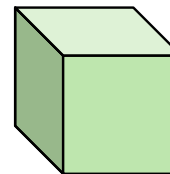
10. \_\_\_\_\_



- 7)
- A. triangular pyramid
  - B. cube
  - C. rectangular prism
  - D. rectangular pyramid



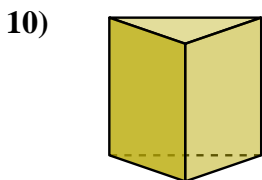
- 8)
- A. rectangular pyramid
  - B. cube
  - C. triangular prism
  - D. cone



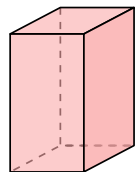
- 9)
- A. cylinder
  - B. rectangular prism
  - C. triangular prism
  - D. cube

11. \_\_\_\_\_

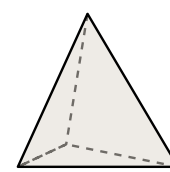
12. \_\_\_\_\_



- 10)
- A. cylinder
  - B. sphere
  - C. cone
  - D. triangular prism



- 11)
- A. triangular prism
  - B. cube
  - C. rectangular prism
  - D. cone

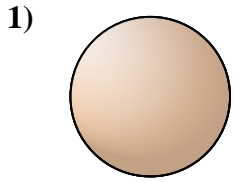


- 12)
- A. sphere
  - B. triangular prism
  - C. cube
  - D. triangular pyramid

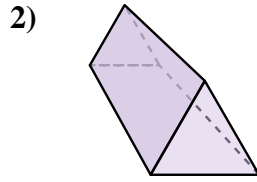


Déterminez quel choix représente le MIEUX la description de la figure.

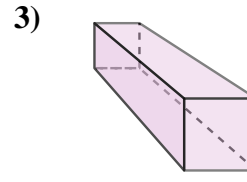
**Réponses**



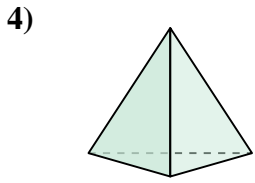
- A. triangular pyramid
- B. sphere
- C. rectangular pyramid
- D. rectangular prism



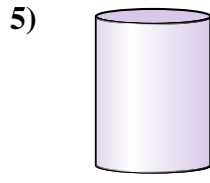
- A. triangular pyramid
- B. cone
- C. triangular prism
- D. cube



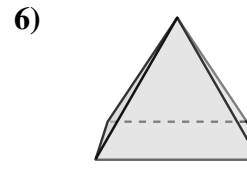
- A. cube
- B. triangular prism
- C. rectangular prism
- D. rectangular pyramid



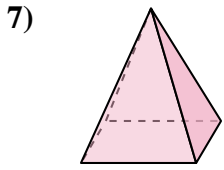
- A. triangular pyramid
- B. sphere
- C. triangular prism
- D. cube



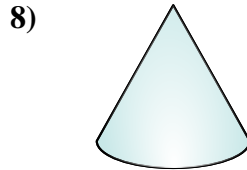
- A. rectangular prism
- B. rectangular pyramid
- C. cylinder
- D. triangular pyramid



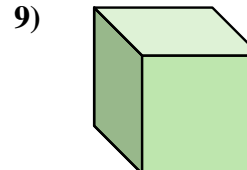
- A. cone
- B. triangular pyramid
- C. rectangular pyramid
- D. cylinder



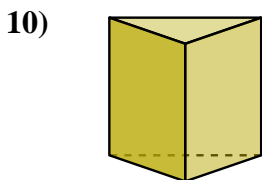
- A. triangular pyramid
- B. cube
- C. rectangular prism
- D. rectangular pyramid



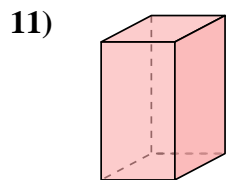
- A. rectangular pyramid
- B. cube
- C. triangular prism
- D. cone



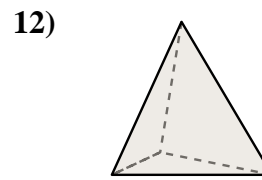
- A. cylinder
- B. rectangular prism
- C. triangular prism
- D. cube



- A. cylinder
- B. sphere
- C. cone
- D. triangular prism



- A. triangular prism
- B. cube
- C. rectangular prism
- D. cone



- A. sphere
- B. triangular prism
- C. cube
- D. triangular pyramid

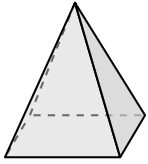
- 1.   **B**
- 2.   **C**
- 3.   **C**
- 4.   **A**
- 5.   **C**
- 6.   **C**
- 7.   **D**
- 8.   **D**
- 9.   **D**
- 10.   **D**
- 11.   **C**
- 12.   **D**



Déterminez quel choix représente le MIEUX la description de la figure.


Réponses

1)



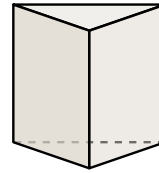
- A. sphere
- B. rectangular prism
- C. rectangular pyramid
- D. cube

2)



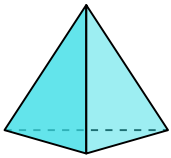
- A. cylinder
- B. rectangular pyramid
- C. rectangular prism
- D. sphere

3)



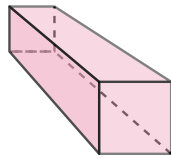
- A. triangular prism
- B. cylinder
- C. sphere
- D. cube

4)



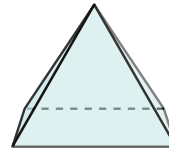
- A. triangular pyramid
- B. cube
- C. rectangular pyramid
- D. sphere

5)



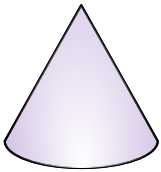
- A. rectangular prism
- B. sphere
- C. rectangular pyramid
- D. triangular pyramid

6)



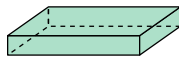
- A. sphere
- B. cube
- C. rectangular pyramid
- D. triangular prism

7)



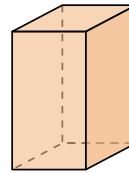
- A. cube
- B. cone
- C. triangular pyramid
- D. sphere

8)



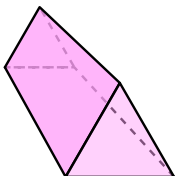
- A. cylinder
- B. rectangular prism
- C. sphere
- D. cube

9)



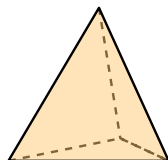
- A. cone
- B. cylinder
- C. triangular prism
- D. rectangular prism

10)



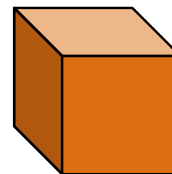
- A. rectangular pyramid
- B. sphere
- C. triangular prism
- D. cylinder

11)



- A. cube
- B. cylinder
- C. cone
- D. triangular pyramid

12)



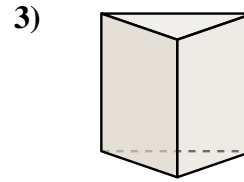

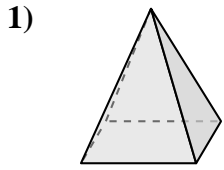
- A. cube
- B. rectangular prism
- C. rectangular pyramid
- D. triangular pyramid

- 1. \_\_\_\_\_
- 2. \_\_\_\_\_
- 3. \_\_\_\_\_
- 4. \_\_\_\_\_
- 5. \_\_\_\_\_
- 6. \_\_\_\_\_
- 7. \_\_\_\_\_
- 8. \_\_\_\_\_
- 9. \_\_\_\_\_
- 10. \_\_\_\_\_
- 11. \_\_\_\_\_
- 12. \_\_\_\_\_



Déterminez quel choix représente le MIEUX la description de la figure.

**Réponses**



- A. sphere
- B. rectangular prism
- C. rectangular pyramid
- D. cube

- A. cylinder
- B. rectangular pyramid
- C. rectangular prism
- D. sphere

- A. triangular prism
- B. cylinder
- C. sphere
- D. cube

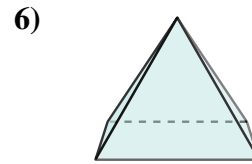
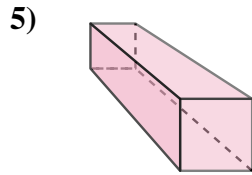
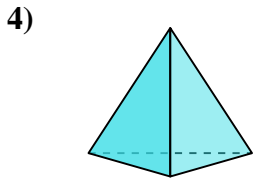
1.     **C**    

2.     **D**    

3.     **A**    

4.     **A**    

5.     **A**    



- A. triangular pyramid
- B. cube
- C. rectangular pyramid
- D. sphere

- A. rectangular prism
- B. sphere
- C. rectangular pyramid
- D. triangular pyramid

- A. sphere
- B. cube
- C. rectangular pyramid
- D. triangular prism

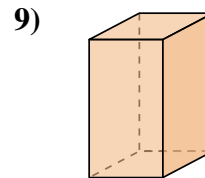
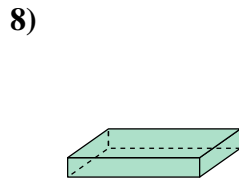
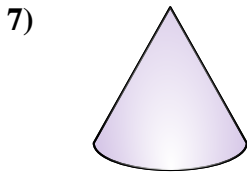
6.     **C**    

7.     **B**    

8.     **B**    

9.     **D**    

10.     **C**    



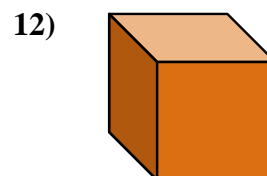
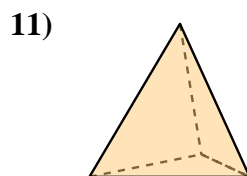
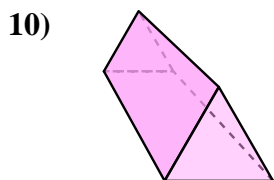
- A. cube
- B. cone
- C. triangular pyramid
- D. sphere

- A. cylinder
- B. rectangular prism
- C. sphere
- D. cube

- A. cone
- B. cylinder
- C. triangular prism
- D. rectangular prism

11.     **D**    

12.     **A**    



- A. rectangular pyramid
- B. sphere
- C. triangular prism
- D. cylinder

- A. cube
- B. cylinder
- C. cone
- D. triangular pyramid

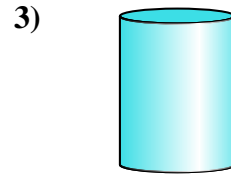
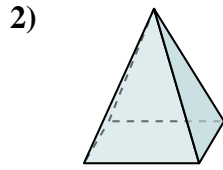
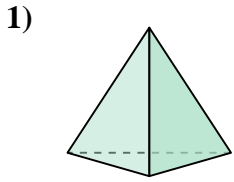
- A. cube
- B. rectangular prism
- C. rectangular pyramid
- D. triangular pyramid





Déterminez quel choix représente le MIEUX la description de la figure.

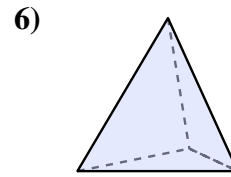
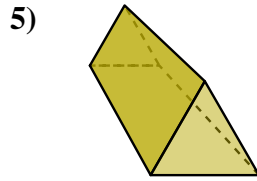
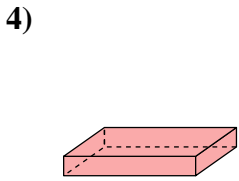
Réponses



- 1) A. triangular pyramid  
 B. sphere  
 C. cylinder  
 D. rectangular pyramid

- 2) A. triangular pyramid  
 B. cone  
 C. cube  
 D. rectangular pyramid

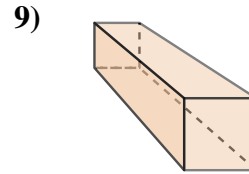
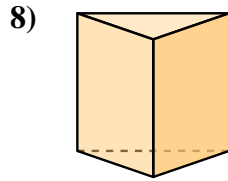
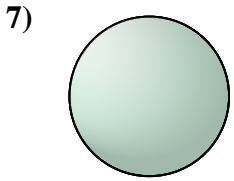
- 3) A. rectangular pyramid  
 B. rectangular prism  
 C. cylinder  
 D. sphere



- 4) A. rectangular prism  
 B. rectangular pyramid  
 C. triangular pyramid  
 D. cone

- 5) A. rectangular pyramid  
 B. rectangular prism  
 C. triangular prism  
 D. triangular pyramid

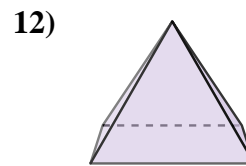
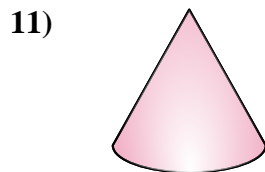
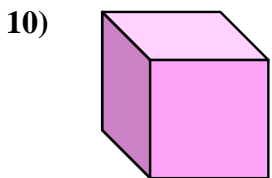
- 6) A. triangular pyramid  
 B. rectangular prism  
 C. triangular prism  
 D. cube



- 7) A. triangular prism  
 B. rectangular prism  
 C. sphere  
 D. cube

- 8) A. cone  
 B. triangular prism  
 C. cube  
 D. rectangular prism

- 9) A. cylinder  
 B. sphere  
 C. rectangular prism  
 D. rectangular pyramid



- 10) A. rectangular pyramid  
 B. cube  
 C. triangular prism  
 D. cone

- 11) A. rectangular pyramid  
 B. sphere  
 C. triangular prism  
 D. cone

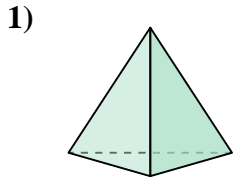
- 12) A. triangular prism  
 B. triangular pyramid  
 C. cube  
 D. rectangular pyramid

1. \_\_\_\_\_  
 2. \_\_\_\_\_  
 3. \_\_\_\_\_  
 4. \_\_\_\_\_  
 5. \_\_\_\_\_  
 6. \_\_\_\_\_  
 7. \_\_\_\_\_  
 8. \_\_\_\_\_  
 9. \_\_\_\_\_  
 10. \_\_\_\_\_  
 11. \_\_\_\_\_  
 12. \_\_\_\_\_

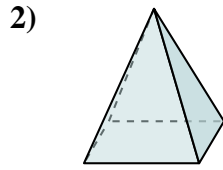


Déterminez quel choix représente le MIEUX la description de la figure.

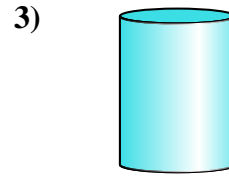
**Réponses**



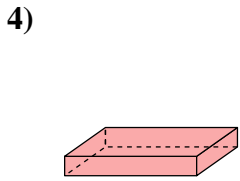
- A. triangular pyramid
- B. sphere
- C. cylinder
- D. rectangular pyramid



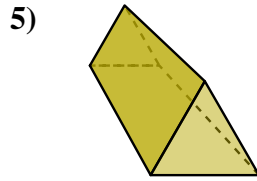
- A. triangular pyramid
- B. cone
- C. cube
- D. rectangular pyramid



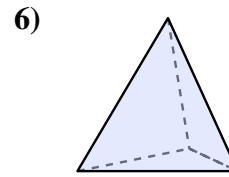
- A. rectangular pyramid
- B. rectangular prism
- C. cylinder
- D. sphere



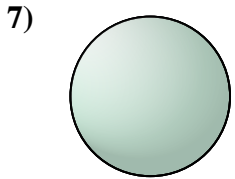
- A. rectangular prism
- B. rectangular pyramid
- C. triangular pyramid
- D. cone



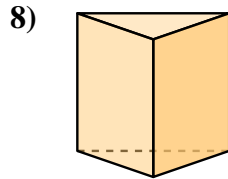
- A. rectangular pyramid
- B. rectangular prism
- C. triangular prism
- D. triangular pyramid



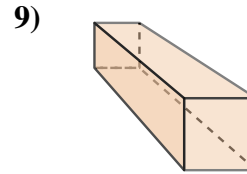
- A. triangular pyramid
- B. rectangular prism
- C. triangular prism
- D. cube



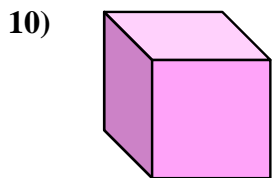
- A. triangular prism
- B. rectangular prism
- C. sphere
- D. cube



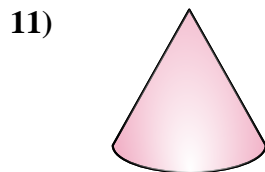
- A. cone
- B. triangular prism
- C. cube
- D. rectangular prism



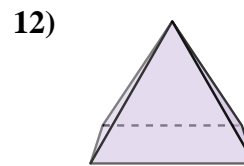
- A. cylinder
- B. sphere
- C. rectangular prism
- D. rectangular pyramid



- A. rectangular pyramid
- B. cube
- C. triangular prism
- D. cone



- A. rectangular pyramid
- B. sphere
- C. triangular prism
- D. cone



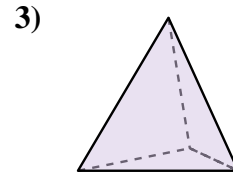
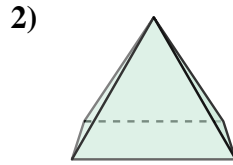
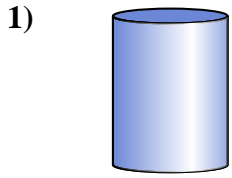
- A. triangular prism
- B. triangular pyramid
- C. cube
- D. rectangular pyramid

- 1.   **A**
- 2.   **D**
- 3.   **C**
- 4.   **A**
- 5.   **C**
- 6.   **A**
- 7.   **C**
- 8.   **B**
- 9.   **C**
- 10.   **B**
- 11.   **D**
- 12.   **D**



Déterminez quel choix représente le MIEUX la description de la figure.

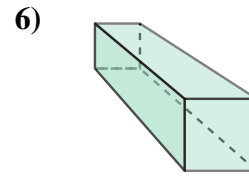
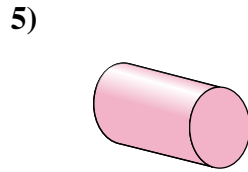
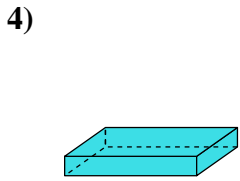
Réponses



- 1) A. rectangular prism
- B. cylinder
- C. cone
- D. sphere

- 2) A. cylinder
- B. triangular prism
- C. rectangular pyramid
- D. triangular pyramid

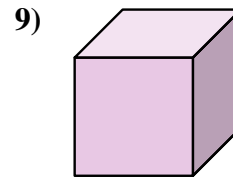
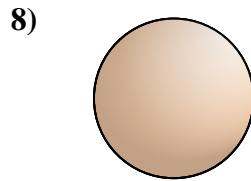
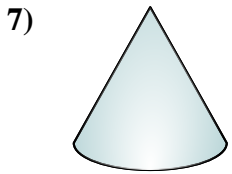
- 3) A. cone
- B. cylinder
- C. sphere
- D. triangular pyramid



- 4) A. triangular prism
- B. cylinder
- C. rectangular prism
- D. sphere

- 5) A. cylinder
- B. cube
- C. rectangular prism
- D. rectangular pyramid

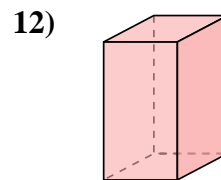
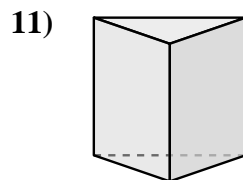
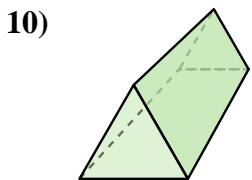
- 6) A. triangular pyramid
- B. rectangular prism
- C. cube
- D. cone



- 7) A. sphere
- B. cylinder
- C. cone
- D. cube

- 8) A. cube
- B. sphere
- C. cone
- D. cylinder

- 9) A. triangular pyramid
- B. cube
- C. triangular prism
- D. rectangular prism



- 10) A. triangular pyramid
- B. cone
- C. triangular prism
- D. sphere

- 11) A. triangular prism
- B. triangular pyramid
- C. cylinder
- D. rectangular prism

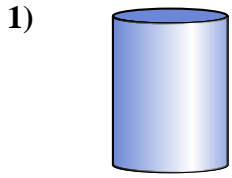
- 12) A. sphere
- B. cube
- C. triangular prism
- D. rectangular prism

- 1. \_\_\_\_\_
- 2. \_\_\_\_\_
- 3. \_\_\_\_\_
- 4. \_\_\_\_\_
- 5. \_\_\_\_\_
- 6. \_\_\_\_\_
- 7. \_\_\_\_\_
- 8. \_\_\_\_\_
- 9. \_\_\_\_\_
- 10. \_\_\_\_\_
- 11. \_\_\_\_\_
- 12. \_\_\_\_\_

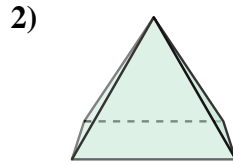


Déterminez quel choix représente le MIEUX la description de la figure.

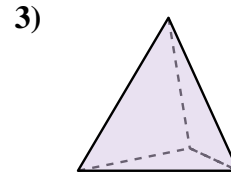
**Réponses**



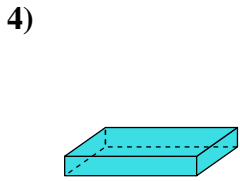
- A. rectangular prism
- B. cylinder
- C. cone
- D. sphere



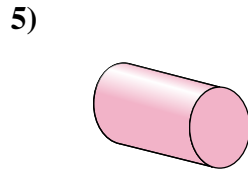
- A. cylinder
- B. triangular prism
- C. rectangular pyramid
- D. triangular pyramid



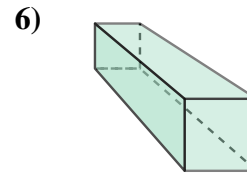
- A. cone
- B. cylinder
- C. sphere
- D. triangular pyramid



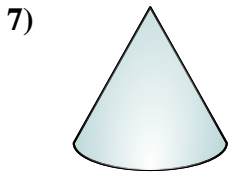
- A. triangular prism
- B. cylinder
- C. rectangular prism
- D. sphere



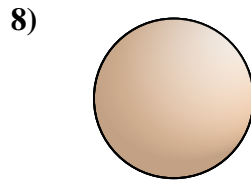
- A. cylinder
- B. cube
- C. rectangular prism
- D. rectangular pyramid



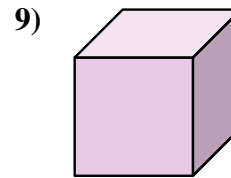
- A. triangular pyramid
- B. rectangular prism
- C. cube
- D. cone



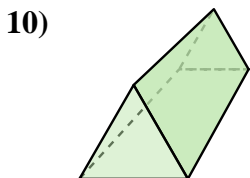
- A. sphere
- B. cylinder
- C. cone
- D. cube



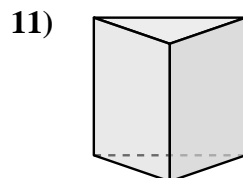
- A. cube
- B. sphere
- C. cone
- D. cylinder



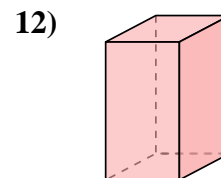
- A. triangular pyramid
- B. cube
- C. triangular prism
- D. rectangular prism



- A. triangular pyramid
- B. cone
- C. triangular prism
- D. sphere



- A. triangular prism
- B. triangular pyramid
- C. cylinder
- D. rectangular prism



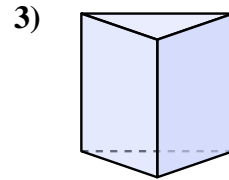
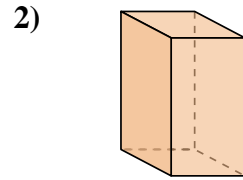
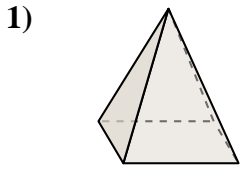
- A. sphere
- B. cube
- C. triangular prism
- D. rectangular prism

- 1. **B**
- 2. **C**
- 3. **D**
- 4. **C**
- 5. **A**
- 6. **B**
- 7. **C**
- 8. **B**
- 9. **B**
- 10. **C**
- 11. **A**
- 12. **D**



Déterminez quel choix représente le MIEUX la description de la figure.

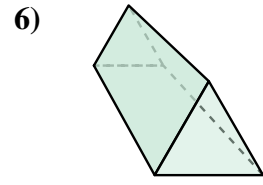
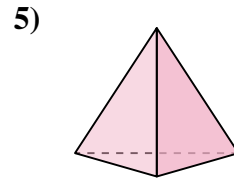
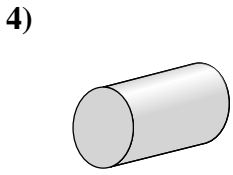
Réponses



- 1) A. rectangular pyramid
- B. triangular prism
- C. rectangular prism
- D. cube

- 2) A. cone
- B. triangular prism
- C. rectangular pyramid
- D. rectangular prism

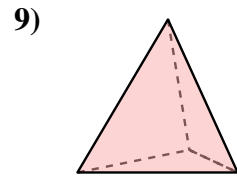
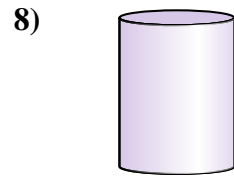
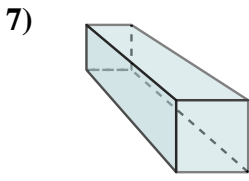
- 3) A. cube
- B. cone
- C. triangular prism
- D. cylinder



- 4) A. rectangular prism
- B. rectangular pyramid
- C. cylinder
- D. sphere

- 5) A. cube
- B. triangular pyramid
- C. rectangular prism
- D. cylinder

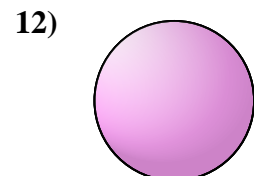
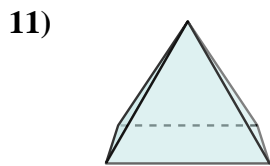
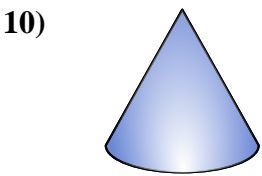
- 6) A. cone
- B. sphere
- C. triangular prism
- D. cylinder



- 7) A. rectangular pyramid
- B. cube
- C. rectangular prism
- D. triangular prism

- 8) A. triangular prism
- B. cube
- C. cylinder
- D. cone

- 9) A. cylinder
- B. cone
- C. triangular pyramid
- D. cube



- 10) A. cylinder
- B. rectangular pyramid
- C. cone
- D. rectangular prism

- 11) A. triangular pyramid
- B. cone
- C. rectangular prism
- D. rectangular pyramid

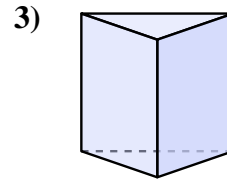
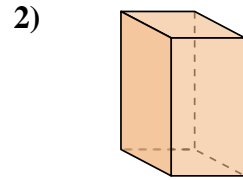
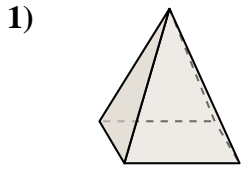
- 12) A. triangular pyramid
- B. rectangular prism
- C. cone
- D. sphere

- 1. \_\_\_\_\_
- 2. \_\_\_\_\_
- 3. \_\_\_\_\_
- 4. \_\_\_\_\_
- 5. \_\_\_\_\_
- 6. \_\_\_\_\_
- 7. \_\_\_\_\_
- 8. \_\_\_\_\_
- 9. \_\_\_\_\_
- 10. \_\_\_\_\_
- 11. \_\_\_\_\_
- 12. \_\_\_\_\_



Déterminez quel choix représente le MIEUX la description de la figure.

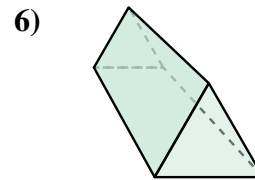
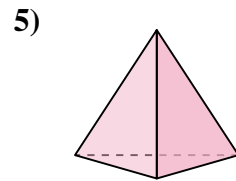
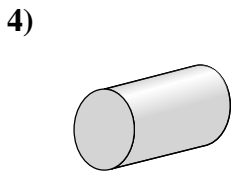
**Réponses**



- A. rectangular pyramid
- B. triangular prism
- C. rectangular prism
- D. cube

- A. cone
- B. triangular prism
- C. rectangular pyramid
- D. rectangular prism

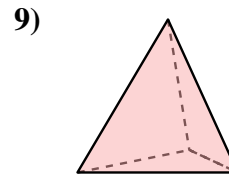
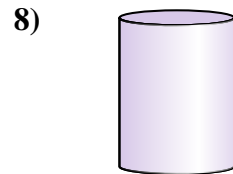
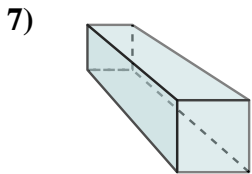
- A. cube
- B. cone
- C. triangular prism
- D. cylinder



- A. rectangular prism
- B. rectangular pyramid
- C. cylinder
- D. sphere

- A. cube
- B. triangular pyramid
- C. rectangular prism
- D. cylinder

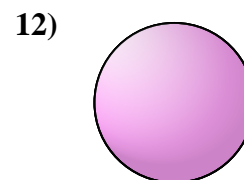
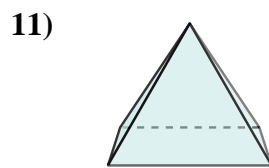
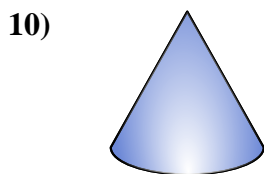
- A. cone
- B. sphere
- C. triangular prism
- D. cylinder



- A. rectangular pyramid
- B. cube
- C. rectangular prism
- D. triangular prism

- A. triangular prism
- B. cube
- C. cylinder
- D. cone

- A. cylinder
- B. cone
- C. triangular pyramid
- D. cube



- A. cylinder
- B. rectangular pyramid
- C. cone
- D. rectangular prism

- A. triangular pyramid
- B. cone
- C. rectangular prism
- D. rectangular pyramid

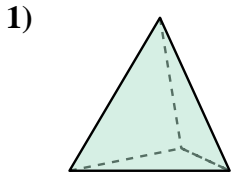
- A. triangular pyramid
- B. rectangular prism
- C. cone
- D. sphere

- 1.   **A**
- 2.   **D**
- 3.   **C**
- 4.   **C**
- 5.   **B**
- 6.   **C**
- 7.   **C**
- 8.   **C**
- 9.   **C**
- 10.   **C**
- 11.   **D**
- 12.   **D**

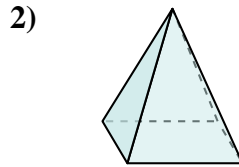


Déterminez quel choix représente le MIEUX la description de la figure.

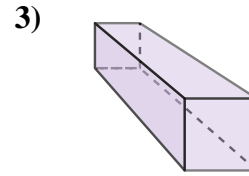
Réponses



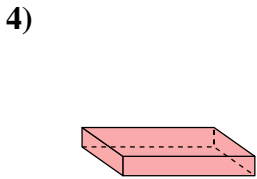
- A. triangular pyramid
- B. triangular prism
- C. rectangular prism
- D. cube



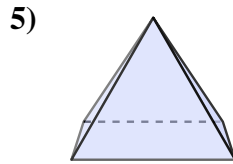
- A. cube
- B. triangular prism
- C. cone
- D. rectangular pyramid



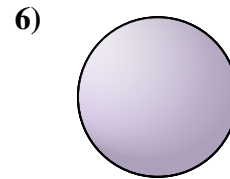
- A. triangular prism
- B. cylinder
- C. rectangular prism
- D. cone



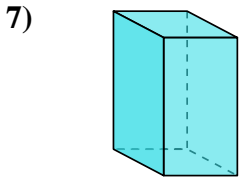
- A. cone
- B. triangular pyramid
- C. cylinder
- D. rectangular prism



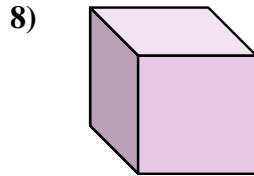
- A. sphere
- B. triangular pyramid
- C. cylinder
- D. rectangular pyramid



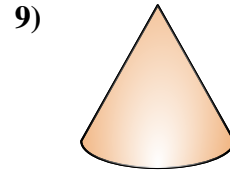
- A. cone
- B. triangular prism
- C. rectangular pyramid
- D. sphere



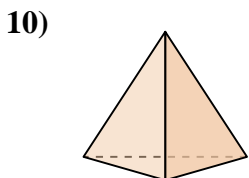
- A. cube
- B. triangular prism
- C. rectangular prism
- D. cone



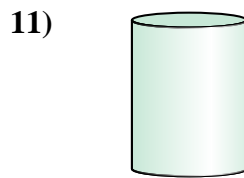
- A. cylinder
- B. cube
- C. rectangular pyramid
- D. triangular pyramid



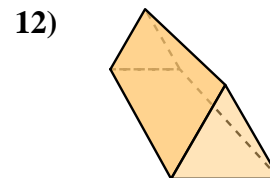
- A. cylinder
- B. rectangular prism
- C. triangular pyramid
- D. cone



- A. cone
- B. triangular pyramid
- C. sphere
- D. triangular prism



- A. cylinder
- B. cube
- C. triangular pyramid
- D. triangular prism



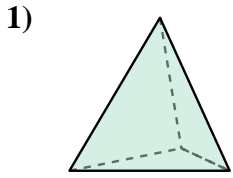
- A. cube
- B. rectangular pyramid
- C. triangular prism
- D. rectangular prism

- 1. \_\_\_\_\_
- 2. \_\_\_\_\_
- 3. \_\_\_\_\_
- 4. \_\_\_\_\_
- 5. \_\_\_\_\_
- 6. \_\_\_\_\_
- 7. \_\_\_\_\_
- 8. \_\_\_\_\_
- 9. \_\_\_\_\_
- 10. \_\_\_\_\_
- 11. \_\_\_\_\_
- 12. \_\_\_\_\_

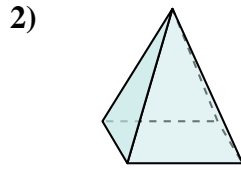


Déterminez quel choix représente le MIEUX la description de la figure.

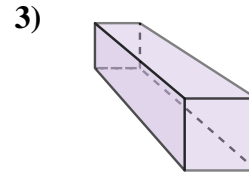
**Réponses**



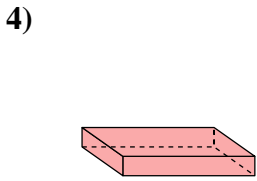
- A. triangular pyramid
- B. triangular prism
- C. rectangular prism
- D. cube



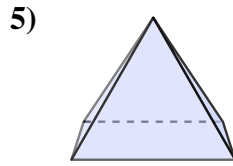
- A. cube
- B. triangular prism
- C. cone
- D. rectangular pyramid



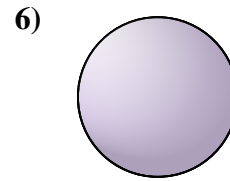
- A. triangular prism
- B. cylinder
- C. rectangular prism
- D. cone



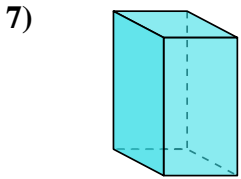
- A. cone
- B. triangular pyramid
- C. cylinder
- D. rectangular prism



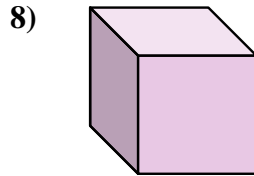
- A. sphere
- B. triangular pyramid
- C. cylinder
- D. rectangular pyramid



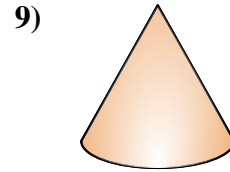
- A. cone
- B. triangular prism
- C. rectangular pyramid
- D. sphere



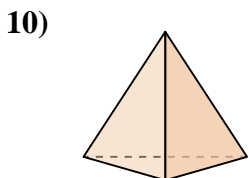
- A. cube
- B. triangular prism
- C. rectangular prism
- D. cone



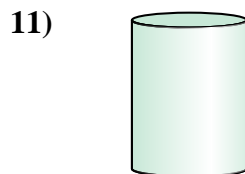
- A. cylinder
- B. cube
- C. rectangular pyramid
- D. triangular pyramid



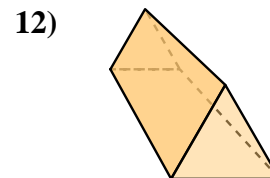
- A. cylinder
- B. rectangular prism
- C. triangular pyramid
- D. cone



- A. cone
- B. triangular pyramid
- C. sphere
- D. triangular prism



- A. cylinder
- B. cube
- C. triangular pyramid
- D. triangular prism



- A. cube
- B. rectangular pyramid
- C. triangular prism
- D. rectangular prism

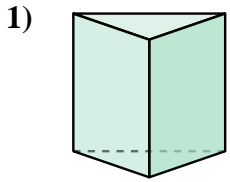
- 1.   **A**
- 2.   **D**
- 3.   **C**
- 4.   **D**
- 5.   **D**
- 6.   **D**
- 7.   **C**
- 8.   **B**
- 9.   **D**
- 10.   **B**
- 11.   **A**
- 12.   **C**



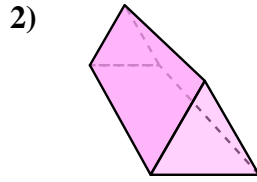


Déterminez quel choix représente le MIEUX la description de la figure.

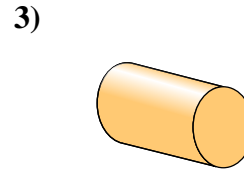
**Réponses**



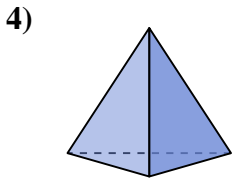
- A. cylinder
- B. cube
- C. triangular pyramid
- D. triangular prism



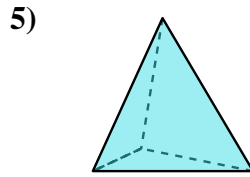
- A. triangular pyramid
- B. triangular prism
- C. cylinder
- D. sphere



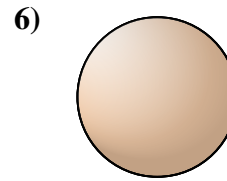
- A. rectangular prism
- B. rectangular pyramid
- C. cylinder
- D. cone



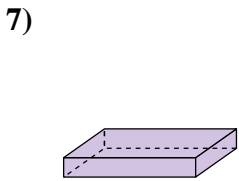
- A. rectangular prism
- B. sphere
- C. triangular pyramid
- D. cone



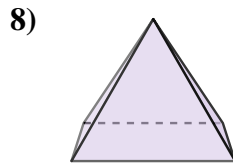
- A. cone
- B. triangular pyramid
- C. rectangular prism
- D. cube



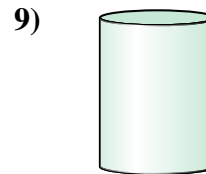
- A. rectangular pyramid
- B. sphere
- C. rectangular prism
- D. cube



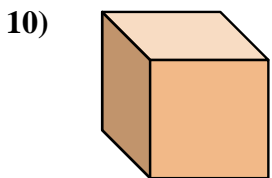
- A. rectangular prism
- B. cone
- C. cube
- D. triangular prism



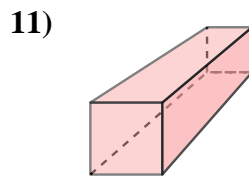
- A. sphere
- B. rectangular pyramid
- C. cylinder
- D. triangular prism



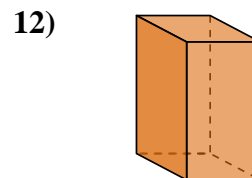
- A. cone
- B. triangular pyramid
- C. sphere
- D. cylinder



- A. rectangular pyramid
- B. sphere
- C. cube
- D. cone



- A. cone
- B. rectangular prism
- C. cube
- D. rectangular pyramid



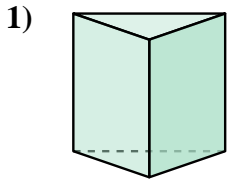
- A. sphere
- B. rectangular prism
- C. cylinder
- D. cube

- 1. \_\_\_\_\_
- 2. \_\_\_\_\_
- 3. \_\_\_\_\_
- 4. \_\_\_\_\_
- 5. \_\_\_\_\_
- 6. \_\_\_\_\_
- 7. \_\_\_\_\_
- 8. \_\_\_\_\_
- 9. \_\_\_\_\_
- 10. \_\_\_\_\_
- 11. \_\_\_\_\_
- 12. \_\_\_\_\_

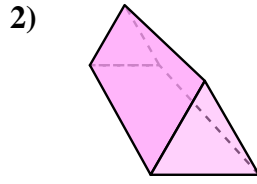


Déterminez quel choix représente le MIEUX la description de la figure.

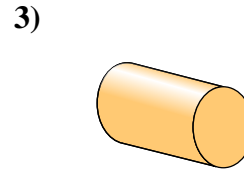
**Réponses**



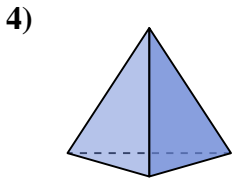
- A. cylinder
- B. cube
- C. triangular pyramid
- D. triangular prism



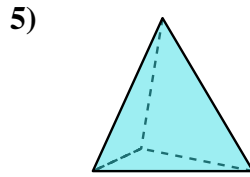
- A. triangular pyramid
- B. triangular prism
- C. cylinder
- D. sphere



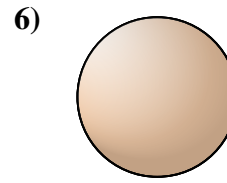
- A. rectangular prism
- B. rectangular pyramid
- C. cylinder
- D. cone



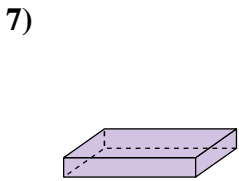
- A. rectangular prism
- B. sphere
- C. triangular pyramid
- D. cone



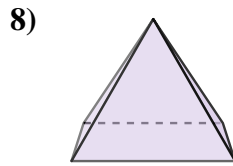
- A. cone
- B. triangular pyramid
- C. rectangular prism
- D. cube



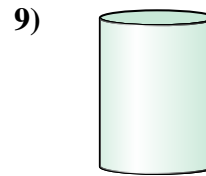
- A. rectangular pyramid
- B. sphere
- C. rectangular prism
- D. cube



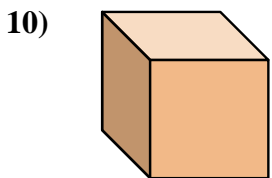
- A. rectangular prism
- B. cone
- C. cube
- D. triangular prism



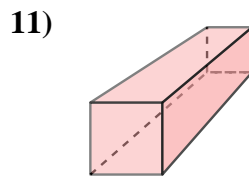
- A. sphere
- B. rectangular pyramid
- C. cylinder
- D. triangular prism



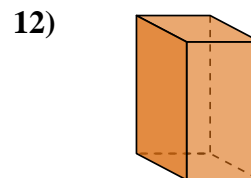
- A. cone
- B. triangular pyramid
- C. sphere
- D. cylinder



- A. rectangular pyramid
- B. sphere
- C. cube
- D. cone



- A. cone
- B. rectangular prism
- C. cube
- D. rectangular pyramid



- A. sphere
- B. rectangular prism
- C. cylinder
- D. cube

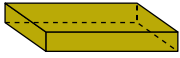
- 1.   **D**
- 2.   **B**
- 3.   **C**
- 4.   **C**
- 5.   **B**
- 6.   **B**
- 7.   **A**
- 8.   **B**
- 9.   **D**
- 10.   **C**
- 11.   **B**
- 12.   **B**



Déterminez quel choix représente le MIEUX la description de la figure.

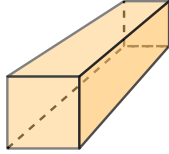
Réponses

1)



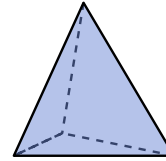
- A. cube
- B. cylinder
- C. triangular prism
- D. rectangular prism

2)



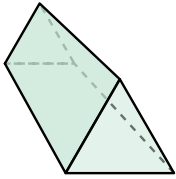
- A. cone
- B. cube
- C. rectangular prism
- D. triangular prism

3)



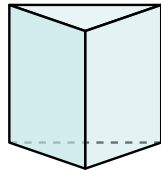
- A. cone
- B. rectangular pyramid
- C. cylinder
- D. triangular pyramid

4)



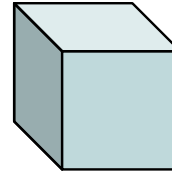
- A. rectangular pyramid
- B. rectangular prism
- C. triangular prism
- D. cube

5)



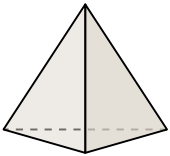
- A. rectangular prism
- B. cube
- C. cone
- D. triangular prism

6)




- A. rectangular pyramid
- B. cone
- C. cylinder
- D. cube

7)



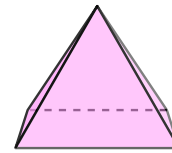
- A. triangular pyramid
- B. cone
- C. rectangular prism
- D. cylinder

8)



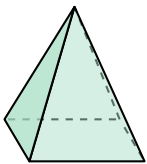
- A. sphere
- B. cylinder
- C. rectangular pyramid
- D. cube

9)



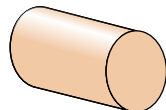
- A. triangular prism
- B. cylinder
- C. rectangular pyramid
- D. cube

10)




- A. rectangular pyramid
- B. rectangular prism
- C. triangular prism
- D. sphere

11)



- A. triangular pyramid
- B. sphere
- C. cylinder
- D. cube

12)



- A. rectangular pyramid
- B. triangular prism
- C. cube
- D. cylinder

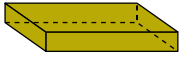
- 1. \_\_\_\_\_
- 2. \_\_\_\_\_
- 3. \_\_\_\_\_
- 4. \_\_\_\_\_
- 5. \_\_\_\_\_
- 6. \_\_\_\_\_
- 7. \_\_\_\_\_
- 8. \_\_\_\_\_
- 9. \_\_\_\_\_
- 10. \_\_\_\_\_
- 11. \_\_\_\_\_
- 12. \_\_\_\_\_



Déterminez quel choix représente le MIEUX la description de la figure.

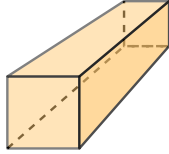
**Réponses**

1)



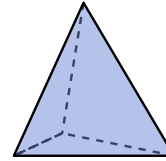
- A. cube
- B. cylinder
- C. triangular prism
- D. rectangular prism

2)



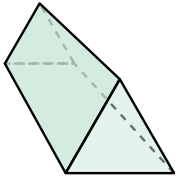
- A. cone
- B. cube
- C. rectangular prism
- D. triangular prism

3)



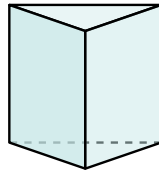
- A. cone
- B. rectangular pyramid
- C. cylinder
- D. triangular pyramid

4)



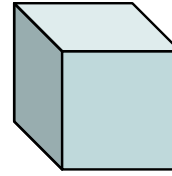
- A. rectangular pyramid
- B. rectangular prism
- C. triangular prism
- D. cube

5)



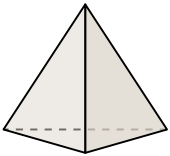
- A. rectangular prism
- B. cube
- C. cone
- D. triangular prism

6)




- A. rectangular pyramid
- B. cone
- C. cylinder
- D. cube

7)



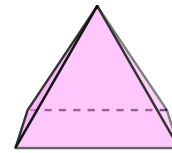
- A. triangular pyramid
- B. cone
- C. rectangular prism
- D. cylinder

8)



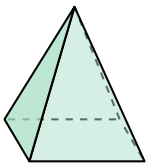
- A. sphere
- B. cylinder
- C. rectangular pyramid
- D. cube

9)




- A. triangular prism
- B. cylinder
- C. rectangular pyramid
- D. cube

10)




- A. rectangular pyramid
- B. rectangular prism
- C. triangular prism
- D. sphere

11)



- A. triangular pyramid
- B. sphere
- C. cylinder
- D. cube

12)



- A. rectangular pyramid
- B. triangular prism
- C. cube
- D. cylinder

- 1.   **D**
- 2.   **C**
- 3.   **D**
- 4.   **C**
- 5.   **D**
- 6.   **D**
- 7.   **A**
- 8.   **A**
- 9.   **C**
- 10.   **A**
- 11.   **C**
- 12.   **D**