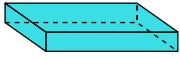




Déterminez quel choix représente le MIEUX la description de la figure.

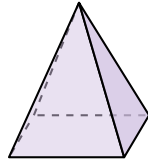
Réponses

1)




- A. sphere
- B. cone
- C. rectangular prism
- D. rectangular pyramid

2)



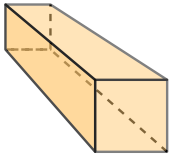
- A. sphere
- B. rectangular pyramid
- C. cone
- D. cylinder

3)



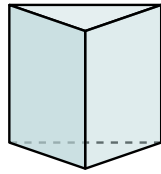
- A. rectangular pyramid
- B. cylinder
- C. triangular pyramid
- D. rectangular prism

4)



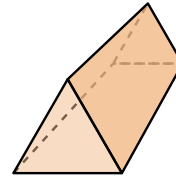
- A. sphere
- B. triangular pyramid
- C. rectangular prism
- D. rectangular pyramid

5)




- A. triangular prism
- B. cylinder
- C. sphere
- D. triangular pyramid

6)



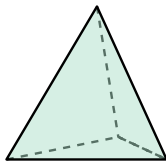
- A. triangular prism
- B. cone
- C. rectangular pyramid
- D. cylinder

7)



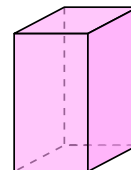
- A. sphere
- B. cylinder
- C. cube
- D. rectangular prism

8)




- A. triangular prism
- B. rectangular prism
- C. cone
- D. triangular pyramid

9)



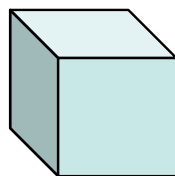
- A. cone
- B. rectangular pyramid
- C. cube
- D. rectangular prism

10)



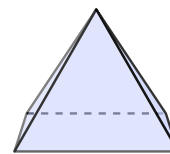
- A. rectangular pyramid
- B. sphere
- C. cone
- D. rectangular prism

11)



- A. rectangular pyramid
- B. sphere
- C. cube
- D. rectangular prism

12)



- A. cube
- B. sphere
- C. rectangular pyramid
- D. rectangular prism

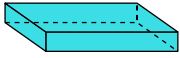
- 1. _____
- 2. _____
- 3. _____
- 4. _____
- 5. _____
- 6. _____
- 7. _____
- 8. _____
- 9. _____
- 10. _____
- 11. _____
- 12. _____



Déterminez quel choix représente le MIEUX la description de la figure.

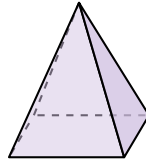
Réponses

1)




- A. sphere
- B. cone
- C. rectangular prism
- D. rectangular pyramid

2)



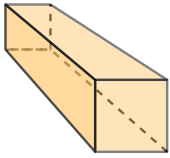
- A. sphere
- B. rectangular pyramid
- C. cone
- D. cylinder

3)



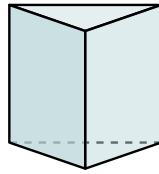
- A. rectangular pyramid
- B. cylinder
- C. triangular pyramid
- D. rectangular prism

4)



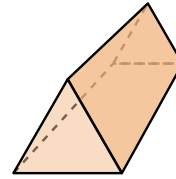
- A. sphere
- B. triangular pyramid
- C. rectangular prism
- D. rectangular pyramid

5)




- A. triangular prism
- B. cylinder
- C. sphere
- D. triangular pyramid

6)



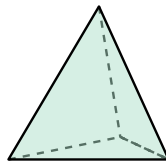
- A. triangular prism
- B. cone
- C. rectangular pyramid
- D. cylinder

7)



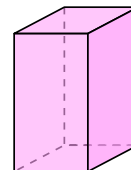
- A. sphere
- B. cylinder
- C. cube
- D. rectangular prism

8)




- A. triangular prism
- B. rectangular prism
- C. cone
- D. triangular pyramid

9)



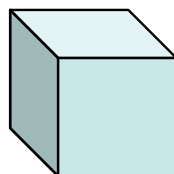
- A. cone
- B. rectangular pyramid
- C. cube
- D. rectangular prism

10)



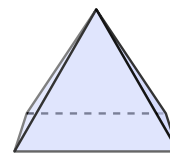
- A. rectangular pyramid
- B. sphere
- C. cone
- D. rectangular prism

11)



- A. rectangular pyramid
- B. sphere
- C. cube
- D. rectangular prism

12)



- A. cube
- B. sphere
- C. rectangular pyramid
- D. rectangular prism

- 1. **C**
- 2. **B**
- 3. **B**
- 4. **C**
- 5. **A**
- 6. **A**
- 7. **B**
- 8. **D**
- 9. **D**
- 10. **C**
- 11. **C**
- 12. **C**