



Déterminez si chaque triangle est aigu(A), obtus(O) ou droit(R) et s'il est équilatéral(E), isocèle(I) ou scalène(S).

Réponses

Acute Triangle:

All angles are less than 90°.

Obtuse Triangle:

One angle is greater than 90°.

Right Triangle:

One angle is 90°.

Equilateral Triangle:

3 equal sides. 3 equal angles.

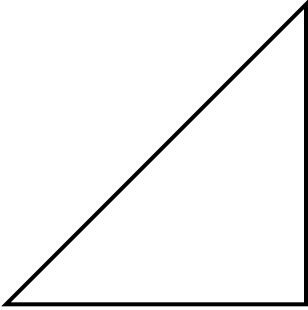
Isosceles Triangle:

2 equal sides. 2 equal angles.

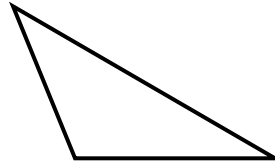
Scalene Triangle:

No equal sides. No equal angles.

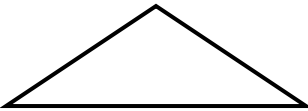
1)



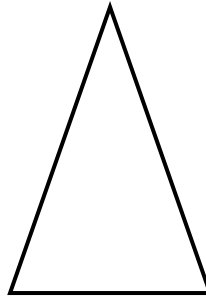
2)



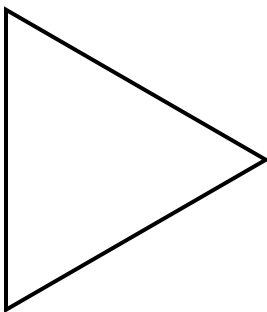
3)



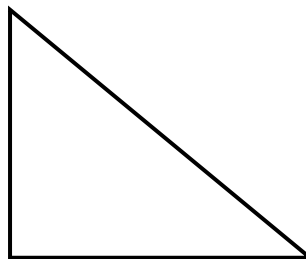
4)



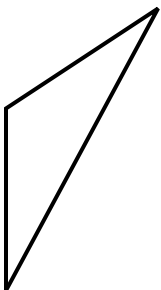
5)



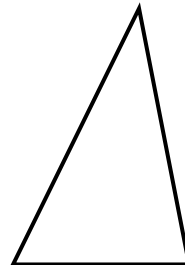
6)



7)



8)



- 1. _____
- 2. _____
- 3. _____
- 4. _____
- 5. _____
- 6. _____
- 7. _____
- 8. _____



Déterminez si chaque triangle est aigu(A), obtus(O) ou droit(R) et s'il est équilatéral(E), isocèle(I) ou scalène(S).

Acute Triangle:

All angles are less than 90° .

Obtuse Triangle:

One angle is greater than 90° .

Right Triangle:

One angle is 90° .

Equilateral Triangle:

3 equal sides. 3 equal angles.

Isosceles Triangle:

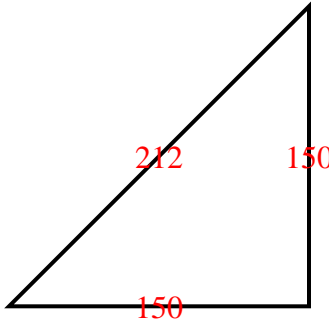
2 equal sides. 2 equal angles.

Scalene Triangle:

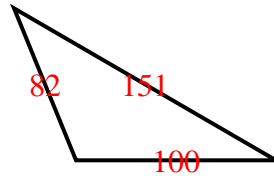
No equal sides. No equal angles.

Réponses

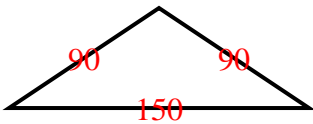
1)



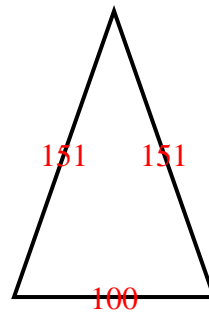
2)



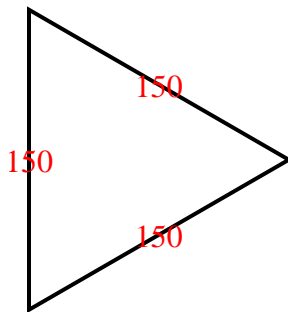
3)



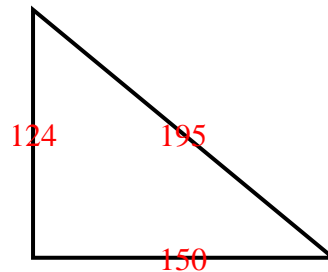
4)



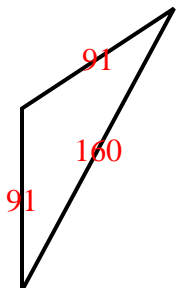
5)



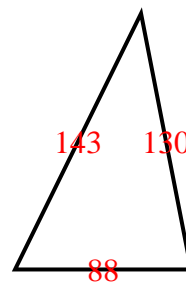
6)



7)



8)



1. RI
2. OS
3. OI
4. AI
5. AE
6. RS
7. OI
8. AS



Déterminez si chaque triangle est aigu(A), obtus(O) ou droit(R) et s'il est équilatéral(E), isocèle(I) ou scalène(S).

Réponses

Acute Triangle:

All angles are less than 90° .

Obtuse Triangle:

One angle is greater than 90° .

Right Triangle:

One angle is 90° .

Equilateral Triangle:

3 equal sides. 3 equal angles.

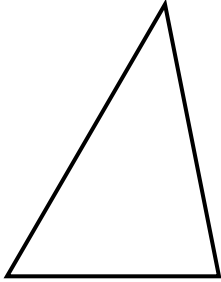
Isosceles Triangle:

2 equal sides. 2 equal angles.

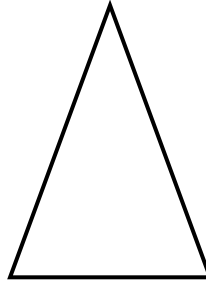
Scalene Triangle:

No equal sides. No equal angles.

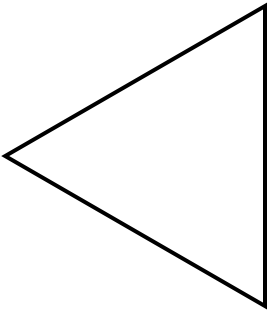
1)



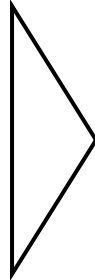
2)



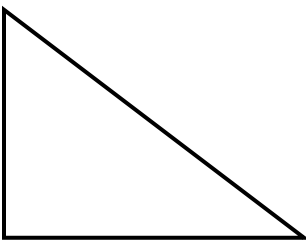
3)



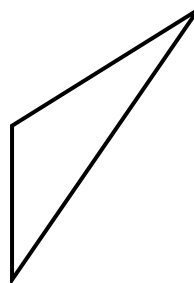
4)



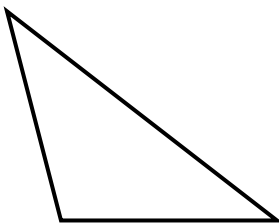
5)



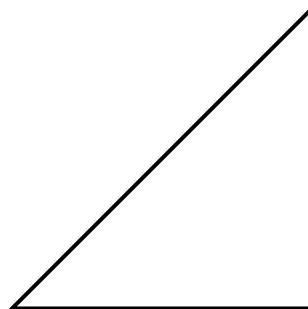
6)



7)



8)



- 1. _____
- 2. _____
- 3. _____
- 4. _____
- 5. _____
- 6. _____
- 7. _____
- 8. _____



Déterminez si chaque triangle est aigu(A), obtus(O) ou droit(R) et s'il est équilatéral(E), isocèle(I) ou scalène(S).

Acute Triangle:

All angles are less than 90° .

Obtuse Triangle:

One angle is greater than 90° .

Right Triangle:

One angle is 90° .

Equilateral Triangle:

3 equal sides. 3 equal angles.

Isosceles Triangle:

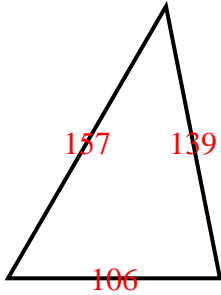
2 equal sides. 2 equal angles.

Scalene Triangle:

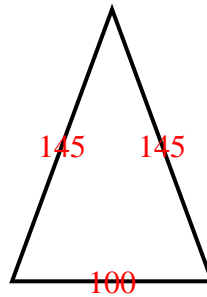
No equal sides. No equal angles.

Réponses

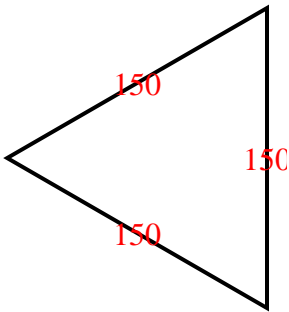
1)



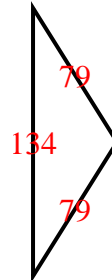
2)



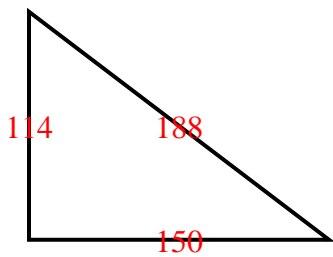
3)



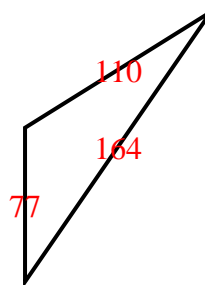
4)



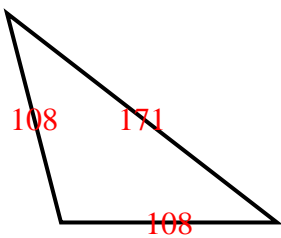
5)



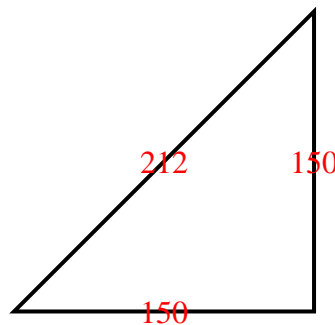
6)



7)



8)



1. AS
2. AI
3. AE
4. OI
5. RS
6. OS
7. OI
8. RI



Déterminez si chaque triangle est aigu(A), obtus(O) ou droit(R) et s'il est équilatéral(E), isocèle(I) ou scalène(S).

Réponses

Acute Triangle:

All angles are less than 90° .

Obtuse Triangle:

One angle is greater than 90° .

Right Triangle:

One angle is 90° .

Equilateral Triangle:

3 equal sides. 3 equal angles.

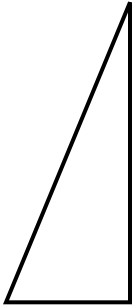
Isosceles Triangle:

2 equal sides. 2 equal angles.

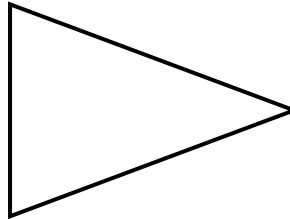
Scalene Triangle:

No equal sides. No equal angles.

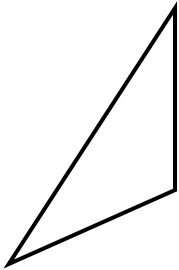
1)



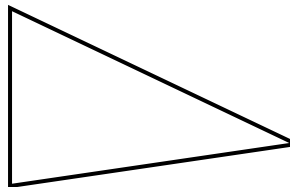
2)



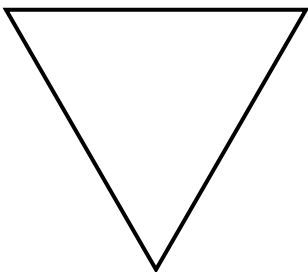
3)



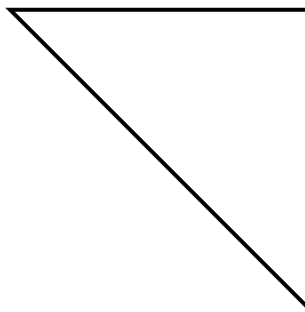
4)



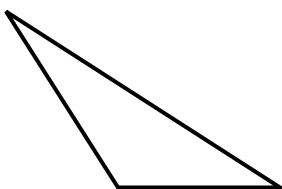
5)



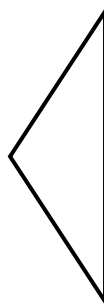
6)



7)



8)



- 1. _____
- 2. _____
- 3. _____
- 4. _____
- 5. _____
- 6. _____
- 7. _____
- 8. _____



Déterminez si chaque triangle est aigu(A), obtus(O) ou droit(R) et s'il est équilatéral(E), isocèle(I) ou scalène(S).

Réponses

Acute Triangle:

All angles are less than 90° .

Obtuse Triangle:

One angle is greater than 90° .

Right Triangle:

One angle is 90° .

Equilateral Triangle:

3 equal sides. 3 equal angles.

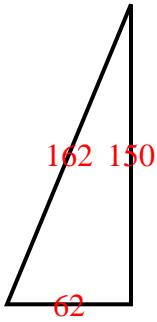
Isosceles Triangle:

2 equal sides. 2 equal angles.

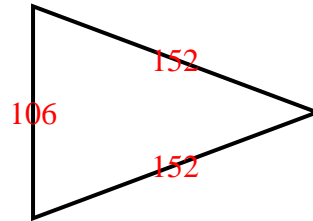
Scalene Triangle:

No equal sides. No equal angles.

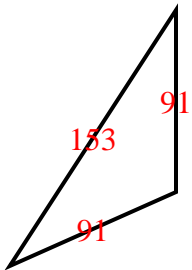
1)



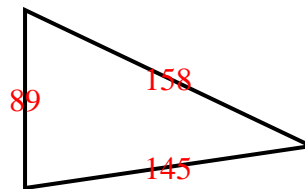
2)



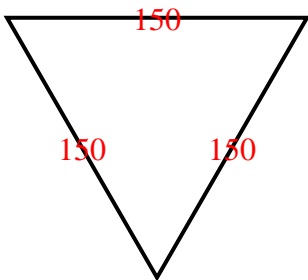
3)



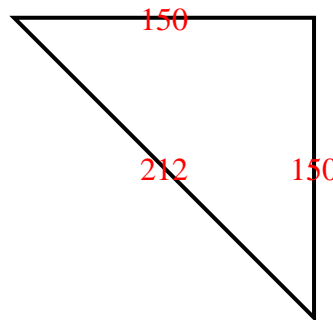
4)



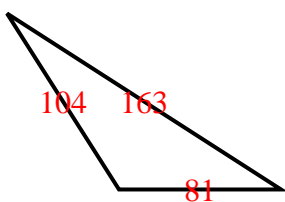
5)



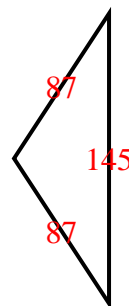
6)



7)



8)



1. RS
2. AI
3. OI
4. AS
5. AE
6. RI
7. OS
8. OI



Déterminez si chaque triangle est aigu(A), obtus(O) ou droit(R) et s'il est équilatéral(E), isocèle(I) ou scalène(S).

Réponses

Acute Triangle:

All angles are less than 90° .

Obtuse Triangle:

One angle is greater than 90° .

Right Triangle:

One angle is 90° .

Equilateral Triangle:

3 equal sides. 3 equal angles.

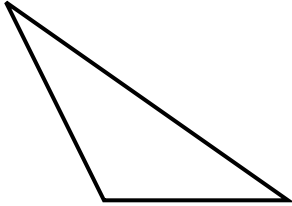
Isosceles Triangle:

2 equal sides. 2 equal angles.

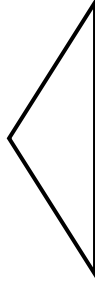
Scalene Triangle:

No equal sides. No equal angles.

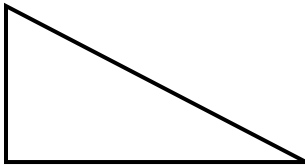
1)



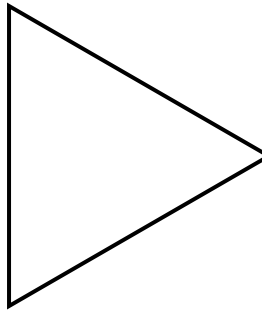
2)



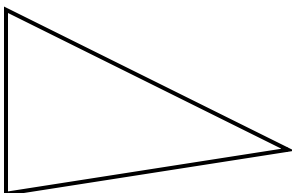
3)




4)



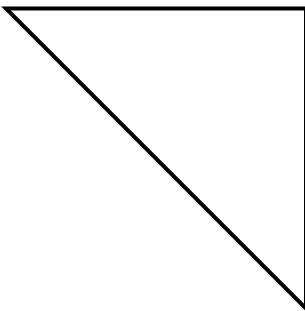
5)



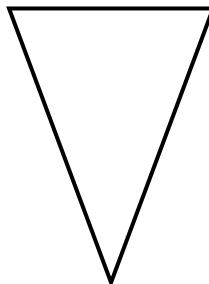
6)



7)



8)



- 1. _____
- 2. _____
- 3. _____
- 4. _____
- 5. _____
- 6. _____
- 7. _____
- 8. _____



Déterminez si chaque triangle est aigu(A), obtus(O) ou droit(R) et s'il est équilatéral(E), isocèle(I) ou scalène(S).

Acute Triangle:

All angles are less than 90° .

Obtuse Triangle:

One angle is greater than 90° .

Right Triangle:

One angle is 90° .

Equilateral Triangle:

3 equal sides. 3 equal angles.

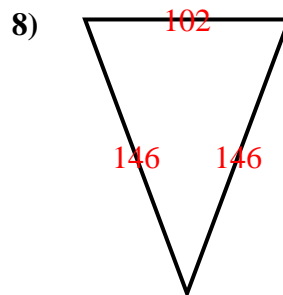
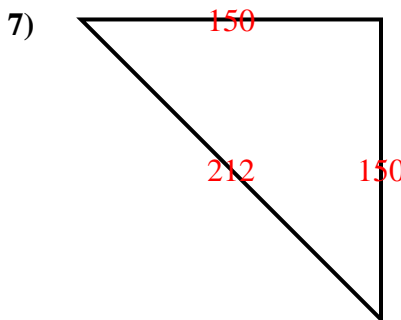
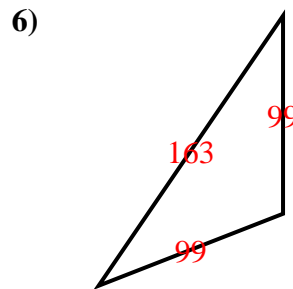
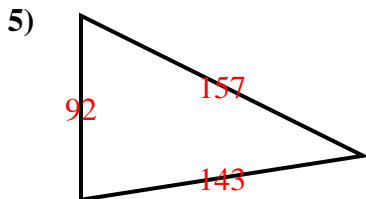
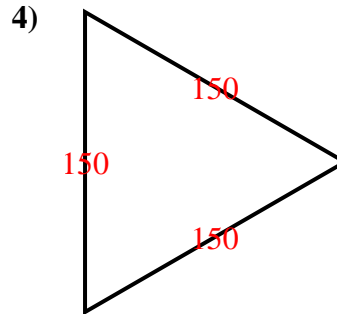
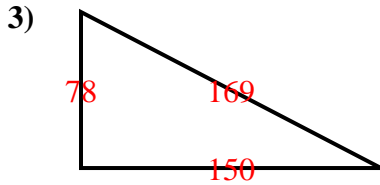
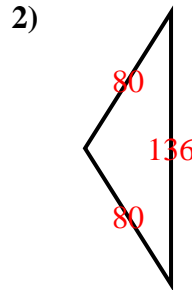
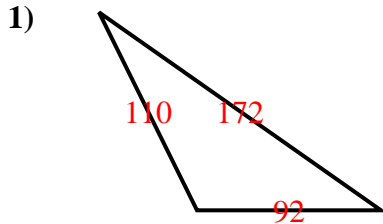
Isosceles Triangle:

2 equal sides. 2 equal angles.

Scalene Triangle:

No equal sides. No equal angles.

Réponses



1. OS
2. OI
3. RS
4. AE
5. AS
6. OI
7. RI
8. AI



Déterminez si chaque triangle est aigu(A), obtus(O) ou droit(R) et s'il est équilatéral(E), isocèle(I) ou scalène(S).

Réponses

Acute Triangle:

All angles are less than 90° .

Obtuse Triangle:

One angle is greater than 90° .

Right Triangle:

One angle is 90° .

Equilateral Triangle:

3 equal sides. 3 equal angles.

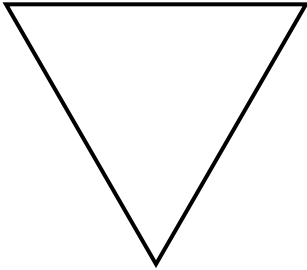
Isosceles Triangle:

2 equal sides. 2 equal angles.


Scalene Triangle:

No equal sides. No equal angles.

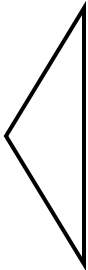
1)



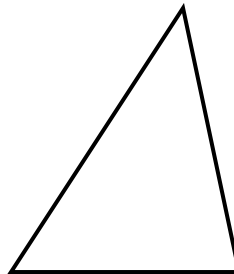
2)



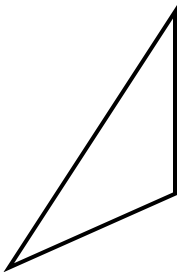
3)



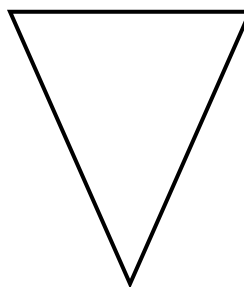
4)



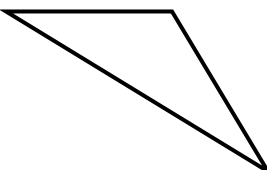
5)



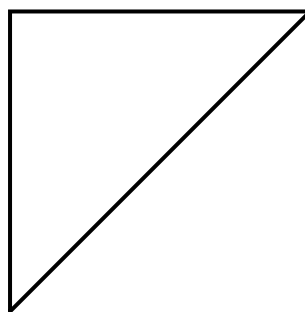
6)



7)



8)



- 1. _____
- 2. _____
- 3. _____
- 4. _____
- 5. _____
- 6. _____
- 7. _____
- 8. _____



Déterminez si chaque triangle est aigu(A), obtus(O) ou droit(R) et s'il est équilatéral(E), isocèle(I) ou scalène(S).

Acute Triangle:

All angles are less than 90° .

Obtuse Triangle:

One angle is greater than 90° .

Right Triangle:

One angle is 90° .

Equilateral Triangle:

3 equal sides. 3 equal angles.

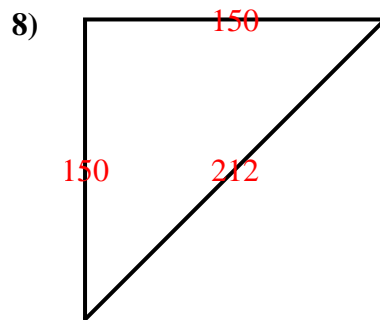
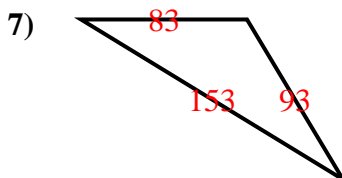
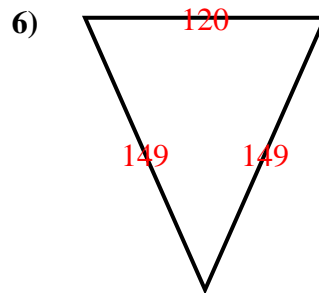
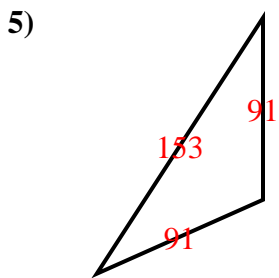
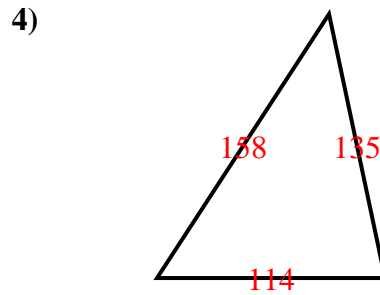
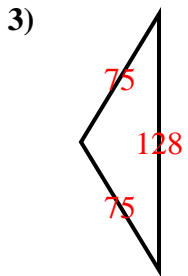
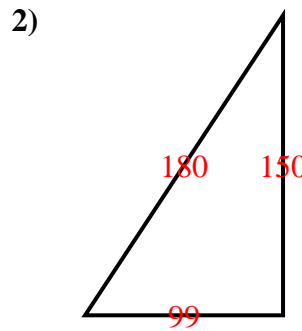
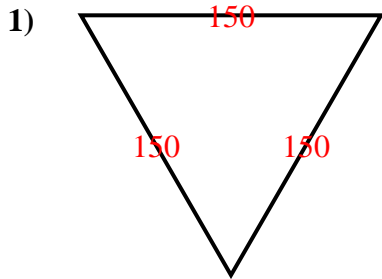
Isosceles Triangle:

2 equal sides. 2 equal angles.

Scalene Triangle:

No equal sides. No equal angles.

Réponses



1. AE
2. RS
3. OI
4. AS
5. OI
6. AI
7. OS
8. RI



Déterminez si chaque triangle est aigu(A), obtus(O) ou droit(R) et s'il est équilatéral(E), isocèle(I) ou scalène(S).

Réponses

Acute Triangle:

All angles are less than 90° .

Obtuse Triangle:

One angle is greater than 90° .

Right Triangle:

One angle is 90° .

Equilateral Triangle:

3 equal sides. 3 equal angles.

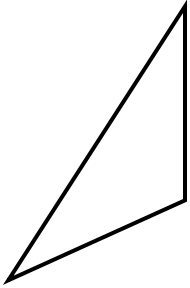
Isosceles Triangle:

2 equal sides. 2 equal angles.

Scalene Triangle:

No equal sides. No equal angles.

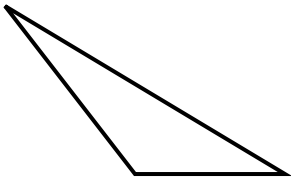
1)



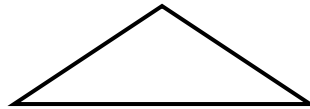
2)



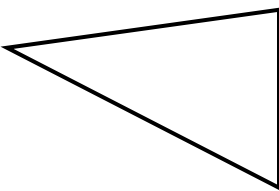
3)



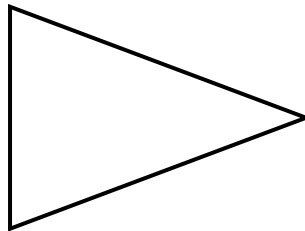
4)



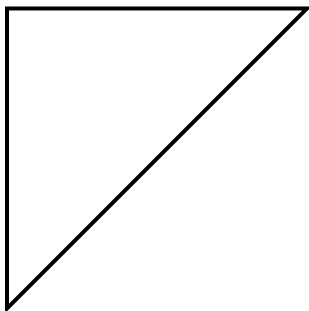
5)



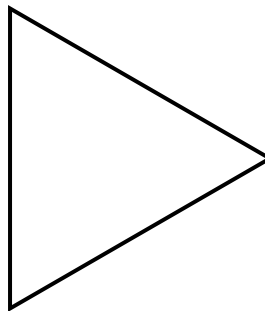
6)



7)



8)



- 1. _____
- 2. _____
- 3. _____
- 4. _____
- 5. _____
- 6. _____
- 7. _____
- 8. _____



Déterminez si chaque triangle est aigu(A), obtus(O) ou droit(R) et s'il est équilatéral(E), isocèle(I) ou scalène(S).

Réponses

Acute Triangle:

All angles are less than 90° .

Obtuse Triangle:

One angle is greater than 90° .

Right Triangle:

One angle is 90° .

Equilateral Triangle:

3 equal sides. 3 equal angles.

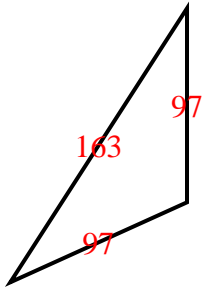
Isosceles Triangle:

2 equal sides. 2 equal angles.

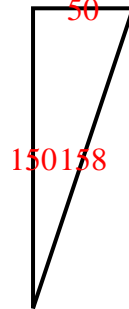
Scalene Triangle:

No equal sides. No equal angles.

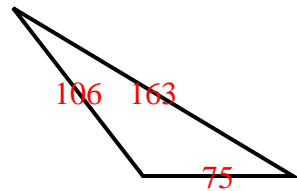
1)



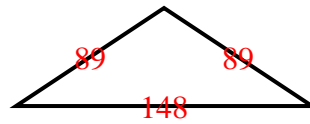
2)



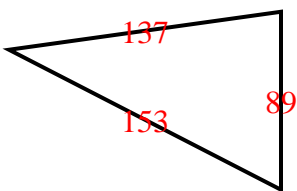
3)



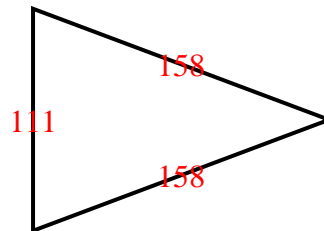
4)



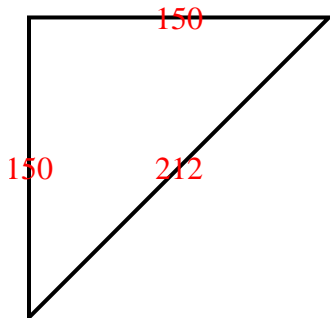
5)



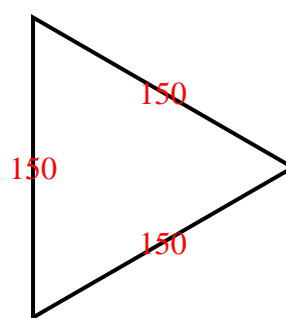
6)



7)



8)



1. **O I**

2. **R S**

3. **O S**

4. **O I**

5. **A S**

6. **A I**

7. **R I**

8. **A E**



Déterminez si chaque triangle est aigu(A), obtus(O) ou droit(R) et s'il est équilatéral(E), isocèle(I) ou scalène(S).

Réponses

Acute Triangle:

All angles are less than 90° .

Obtuse Triangle:

One angle is greater than 90° .

Right Triangle:

One angle is 90° .

Equilateral Triangle:

3 equal sides. 3 equal angles.

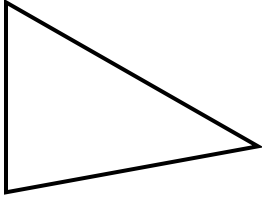
Isosceles Triangle:

2 equal sides. 2 equal angles.

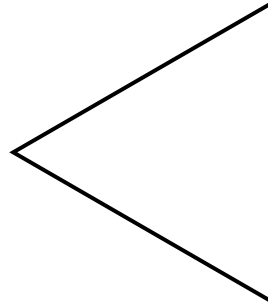
Scalene Triangle:

No equal sides. No equal angles.

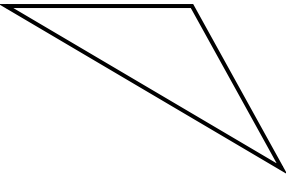
1)



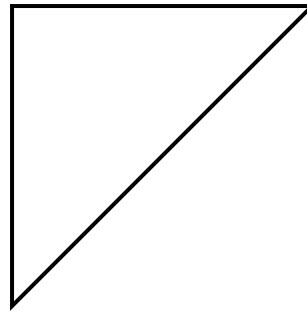
2)



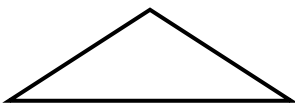
3)



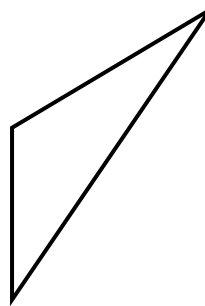
4)



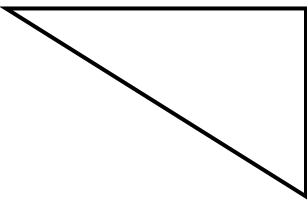
5)



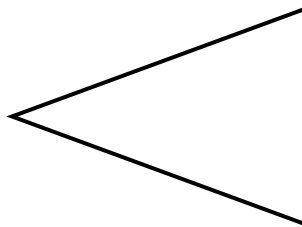
6)



7)



8)



- 1. _____
- 2. _____
- 3. _____
- 4. _____
- 5. _____
- 6. _____
- 7. _____
- 8. _____



Déterminez si chaque triangle est aigu(A), obtus(O) ou droit(R) et s'il est équilatéral(E), isocèle(I) ou scalène(S).

Réponses

Acute Triangle:

All angles are less than 90° .

Obtuse Triangle:

One angle is greater than 90° .

Right Triangle:

One angle is 90° .

Equilateral Triangle:

3 equal sides. 3 equal angles.

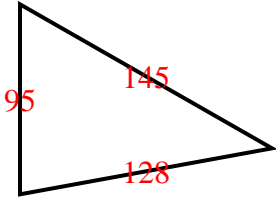
Isosceles Triangle:

2 equal sides. 2 equal angles.

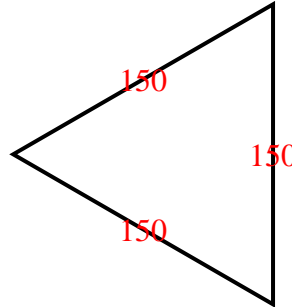
Scalene Triangle:

No equal sides. No equal angles.

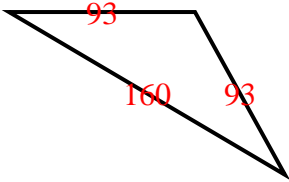
1)



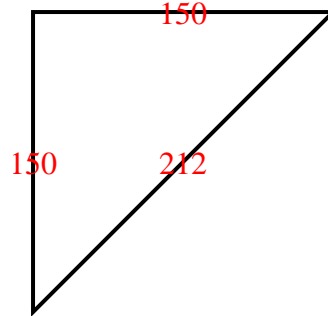
2)



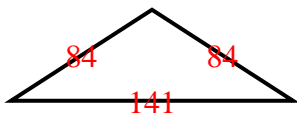
3)



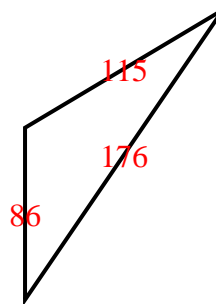
4)



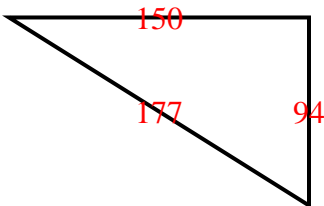
5)



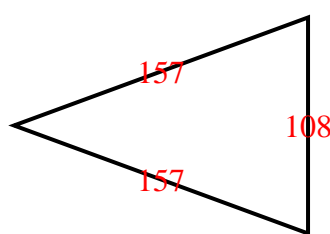
6)



7)



8)



1. AS
2. AE
3. OI
4. RI
5. OI
6. OS
7. RS
8. AI



Déterminez si chaque triangle est aigu(A), obtus(O) ou droit(R) et s'il est équilatéral(E), isocèle(I) ou scalène(S).

Réponses

Acute Triangle:

All angles are less than 90° .

Obtuse Triangle:

One angle is greater than 90° .

Right Triangle:

One angle is 90° .

Equilateral Triangle:

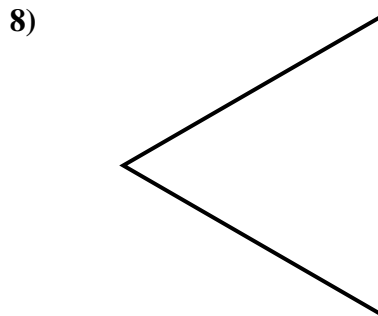
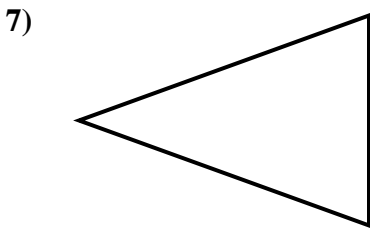
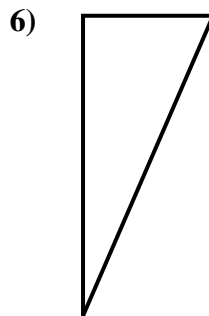
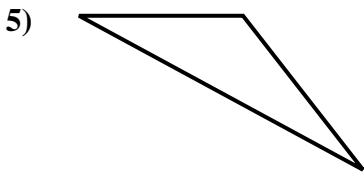
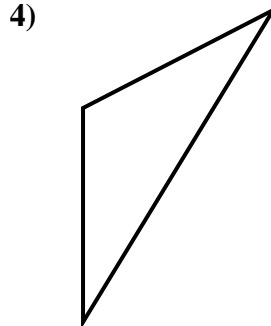
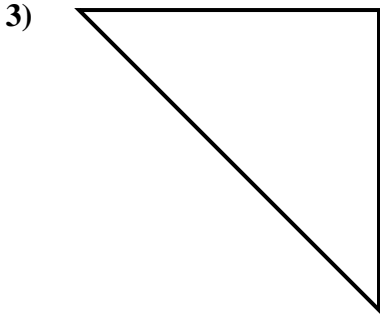
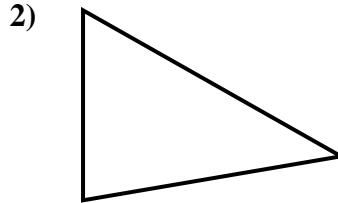
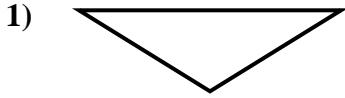
3 equal sides. 3 equal angles.

Isosceles Triangle:

2 equal sides. 2 equal angles.

Scalene Triangle:

No equal sides. No equal angles.



1. _____
2. _____
3. _____
4. _____
5. _____
6. _____
7. _____
8. _____



Déterminez si chaque triangle est aigu(A), obtus(O) ou droit(R) et s'il est équilatéral(E), isocèle(I) ou scalène(S).

Acute Triangle:

All angles are less than 90° .

Obtuse Triangle:

One angle is greater than 90° .

Right Triangle:

One angle is 90° .

Equilateral Triangle:

3 equal sides. 3 equal angles.

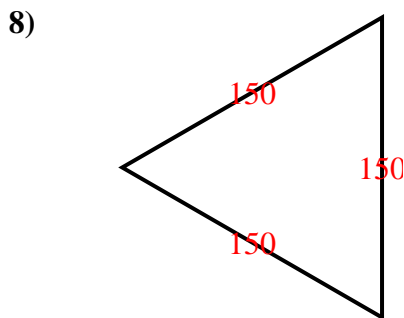
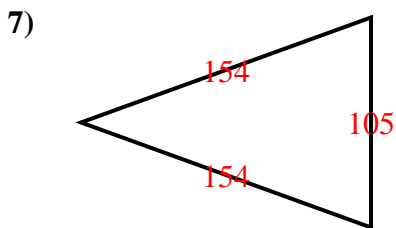
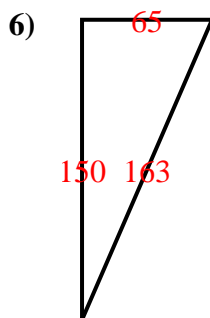
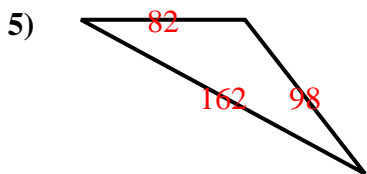
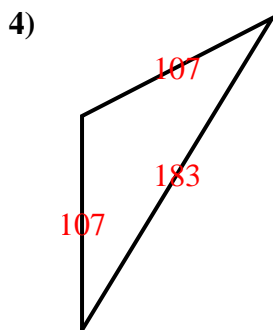
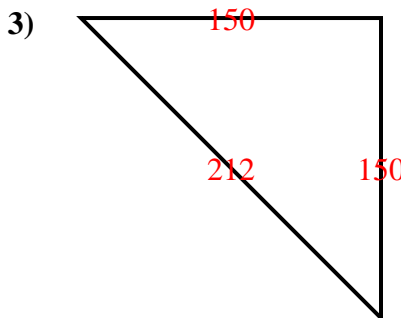
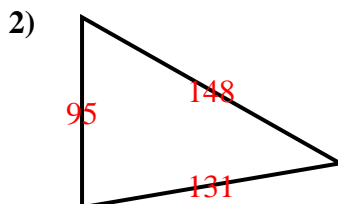
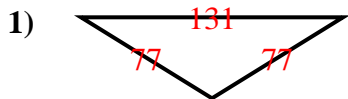
Isosceles Triangle:

2 equal sides. 2 equal angles.

Scalene Triangle:

No equal sides. No equal angles.

Réponses



1. **O I**
2. **A S**
3. **R I**
4. **O I**
5. **O S**
6. **R S**
7. **A I**
8. **A E**



Déterminez si chaque triangle est aigu(A), obtus(O) ou droit(R) et s'il est équilatéral(E), isocèle(I) ou scalène(S).

Réponses

Acute Triangle:

All angles are less than 90° .

Obtuse Triangle:

One angle is greater than 90° .

Right Triangle:

One angle is 90° .

Equilateral Triangle:

3 equal sides. 3 equal angles.

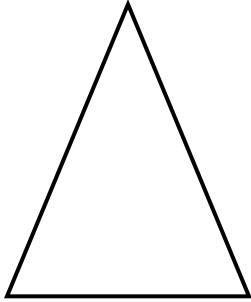
Isosceles Triangle:

2 equal sides. 2 equal angles.

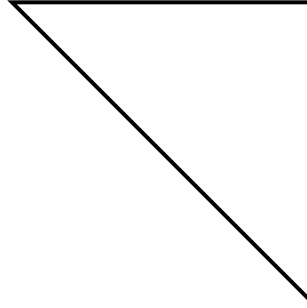
Scalene Triangle:

No equal sides. No equal angles.

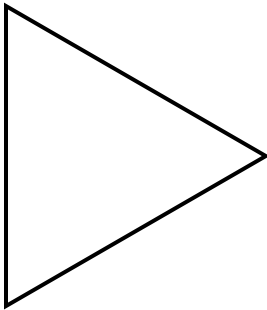
1)



2)



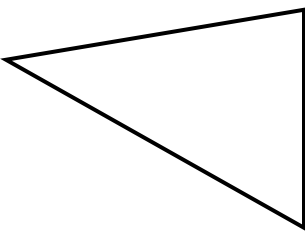
3)



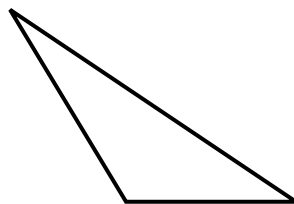
4)



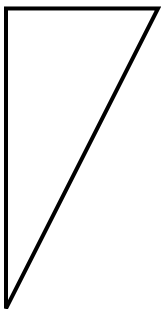
5)



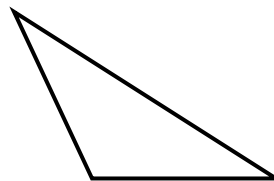
6)



7)



8)



- 1. _____
- 2. _____
- 3. _____
- 4. _____
- 5. _____
- 6. _____
- 7. _____
- 8. _____



Déterminez si chaque triangle est aigu(A), obtus(O) ou droit(R) et s'il est équilatéral(E), isocèle(I) ou scalène(S).

Acute Triangle:

All angles are less than 90° .

Obtuse Triangle:

One angle is greater than 90° .

Right Triangle:

One angle is 90° .

Equilateral Triangle:

3 equal sides. 3 equal angles.

Isosceles Triangle:

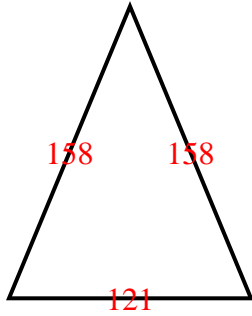
2 equal sides. 2 equal angles.

Scalene Triangle:

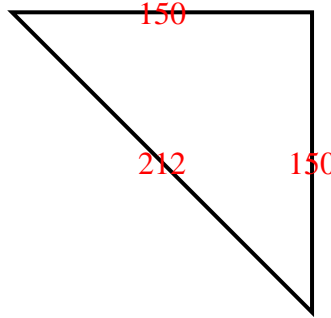
No equal sides. No equal angles.

Réponses

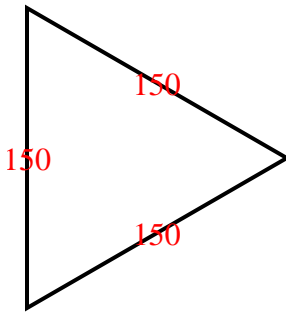
1)



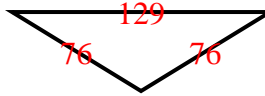
2)



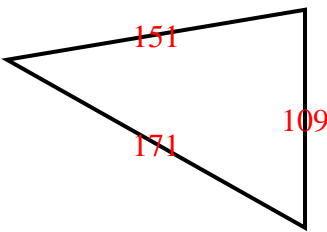
3)



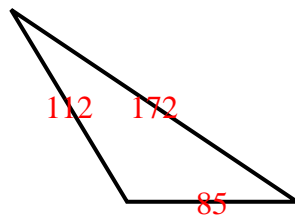
4)



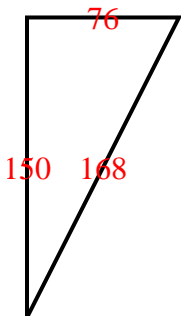
5)



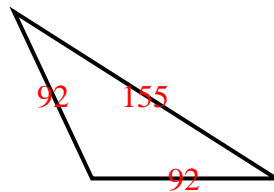
6)



7)



8)



- 1. AI
- 2. RI
- 3. AE
- 4. OI
- 5. AS
- 6. OS
- 7. RS
- 8. OI



Déterminez si chaque triangle est aigu(A), obtus(O) ou droit(R) et s'il est équilatéral(E), isocèle(I) ou scalène(S).

Réponses

Acute Triangle:

All angles are less than 90° .

Obtuse Triangle:

One angle is greater than 90° .

Right Triangle:

One angle is 90° .

Equilateral Triangle:

3 equal sides. 3 equal angles.

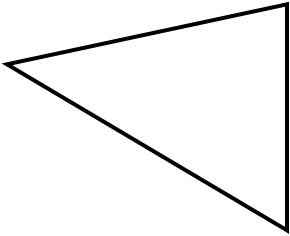
Isosceles Triangle:

2 equal sides. 2 equal angles.

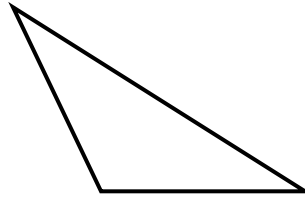
Scalene Triangle:

No equal sides. No equal angles.

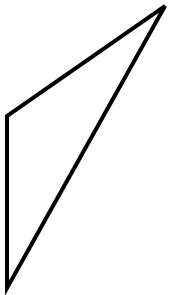
1)



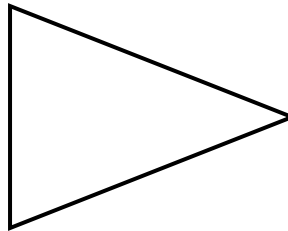
2)



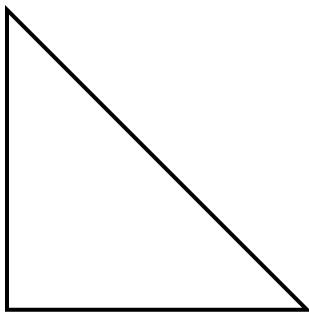
3)



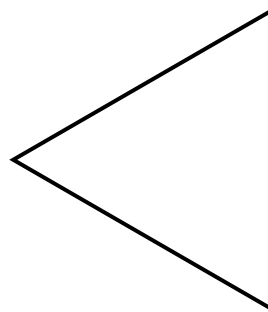
4)



5)



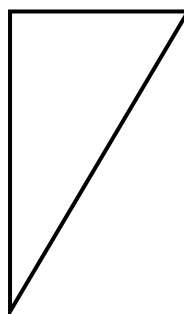
6)



7)



8)



- 1. _____
- 2. _____
- 3. _____
- 4. _____
- 5. _____
- 6. _____
- 7. _____
- 8. _____



Déterminez si chaque triangle est aigu(A), obtus(O) ou droit(R) et s'il est équilatéral(E), isocèle(I) ou scalène(S).

Réponses

Acute Triangle:

All angles are less than 90° .

Obtuse Triangle:

One angle is greater than 90° .

Right Triangle:

One angle is 90° .

Equilateral Triangle:

3 equal sides. 3 equal angles.

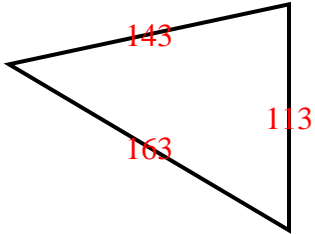
Isosceles Triangle:

2 equal sides. 2 equal angles.

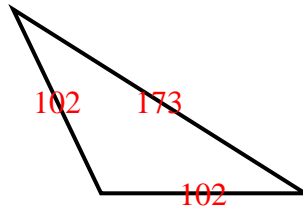
Scalene Triangle:

No equal sides. No equal angles.

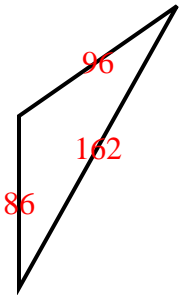
1)



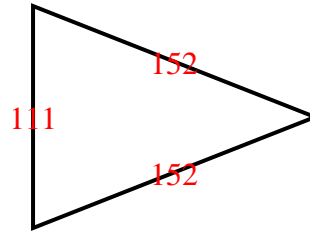
2)



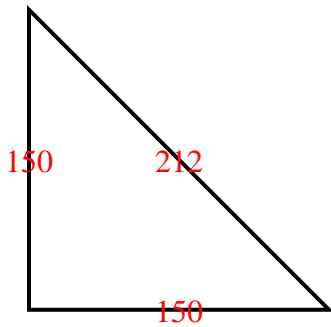
3)



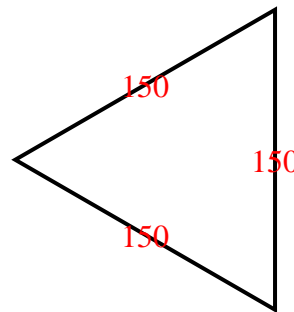
4)



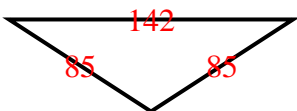
5)



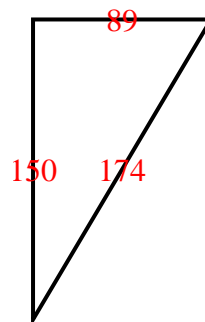
6)



7)



8)



1. AS
2. OI
3. OS
4. AI
5. RI
6. AE
7. OI
8. RS