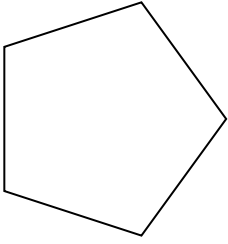


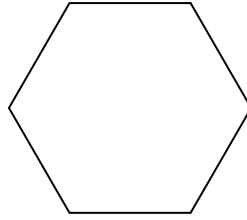


Déterminer si la figure est régulière ou irrégulière.

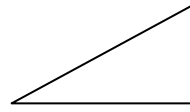
1)



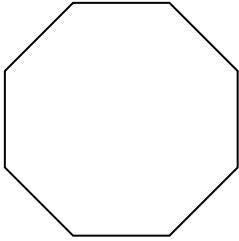
2)



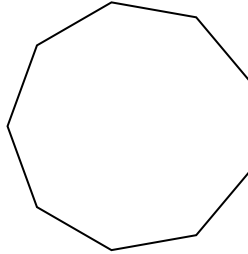
3)



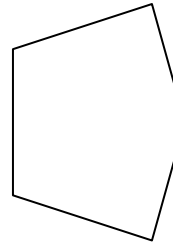
4)



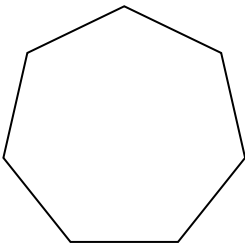
5)



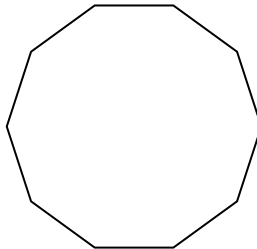
6)



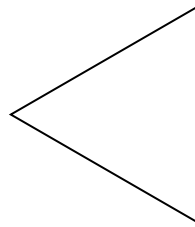
7)




8)




9)



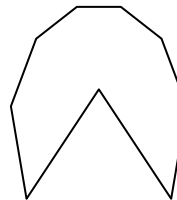
10)




11)




12)



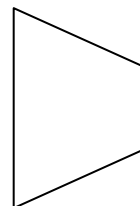
13)



14)



15)



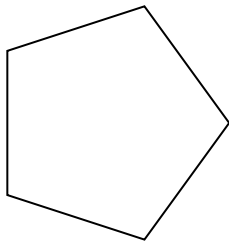
Réponses

- 1. _____
- 2. _____
- 3. _____
- 4. _____
- 5. _____
- 6. _____
- 7. _____
- 8. _____
- 9. _____
- 10. _____
- 11. _____
- 12. _____
- 13. _____
- 14. _____
- 15. _____

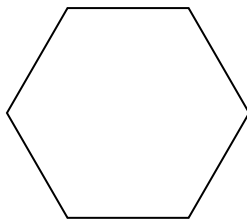


Déterminer si la figure est régulière ou irrégulière.

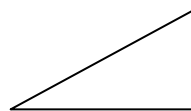
1)



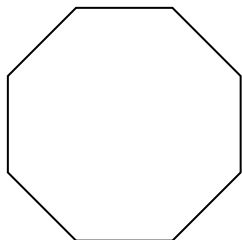
2)



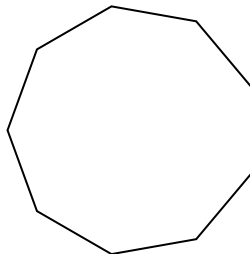
3)



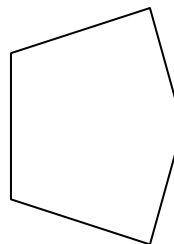
4)



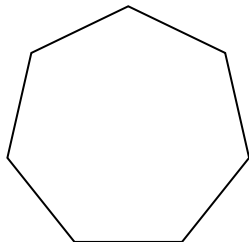
5)



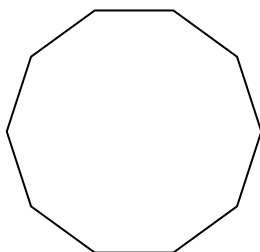
6)



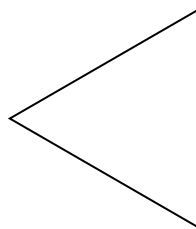
7)




8)




9)



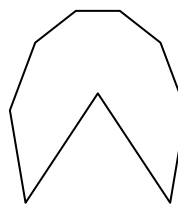
10)




11)




12)



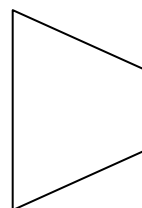
13)



14)



15)



Réponses

1. régulière
2. régulière
3. irrégulière
4. régulière
5. régulière
6. irrégulière
7. régulière
8. régulière
9. régulière
10. irrégulière
11. régulière
12. irrégulière
13. irrégulière
14. irrégulière
15. irrégulière