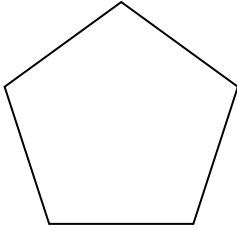


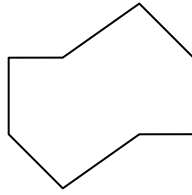


Déterminer si la figure est régulière ou irrégulière.


1)



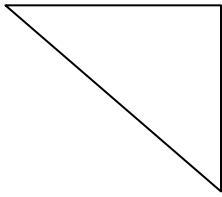
2)



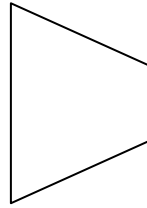
3)



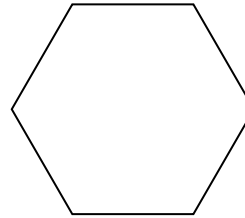
4)




5)




6)



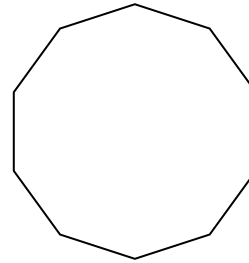
7)



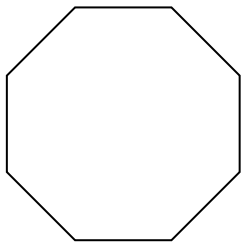
8)




9)



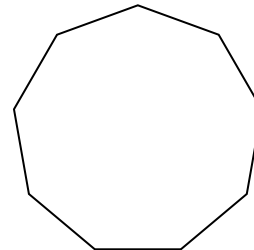
10)



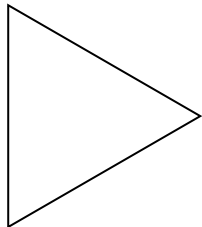
11)




12)



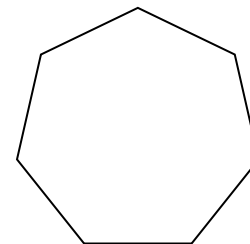
13)



14)



15)



Réponses

1. _____

2. _____

3. _____

4. _____

5. _____

6. _____

7. _____

8. _____

9. _____

10. _____

11. _____

12. _____

13. _____

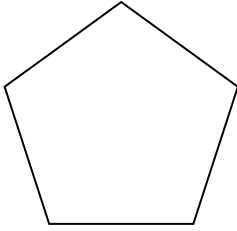
14. _____

15. _____

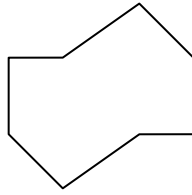


Déterminer si la figure est régulière ou irrégulière.


1)



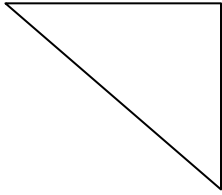
2)



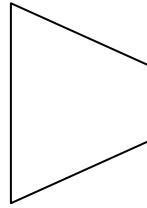
3)



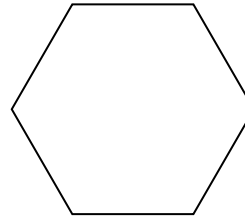
4)




5)




6)



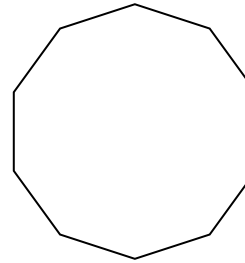
7)



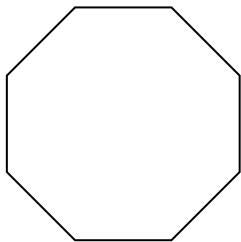
8)




9)



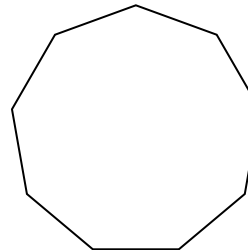
10)



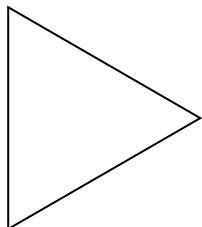
11)




12)



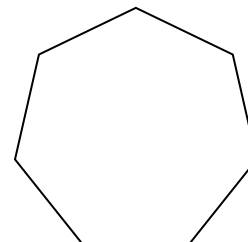
13)



14)



15)



Réponses

1. régulière

2. irrégulière

3. régulière

4. irrégulière

5. irrégulière

6. régulière

7. irrégulière

8. irrégulière

9. régulière

10. régulière

11. irrégulière

12. régulière

13. régulière

14. irrégulière

15. régulière