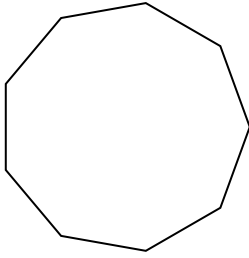


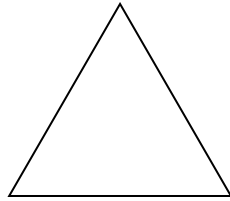


Déterminer si la figure est régulière ou irrégulière.


1)



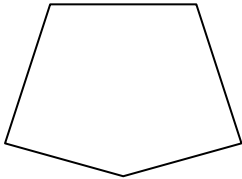
2)




3)



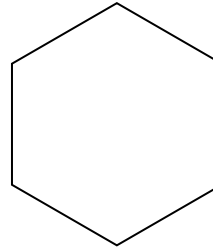
4)



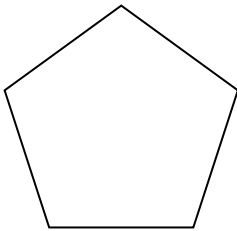
5)



6)



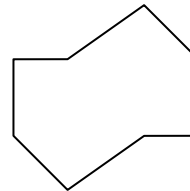
7)



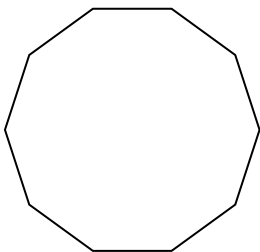
8)




9)




10)



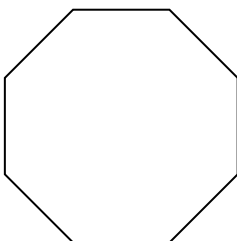
11)



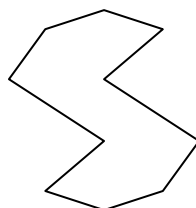
12)



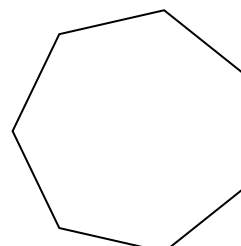
13)



14)



15)

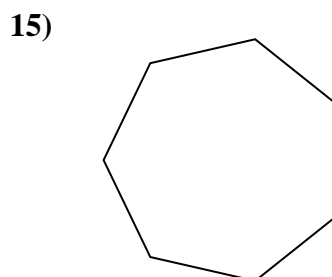
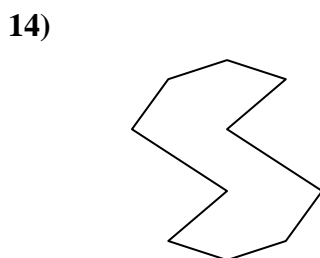
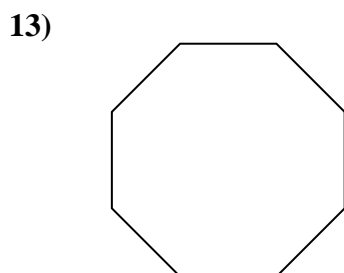
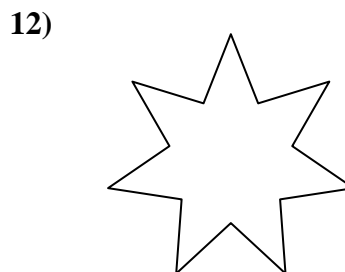
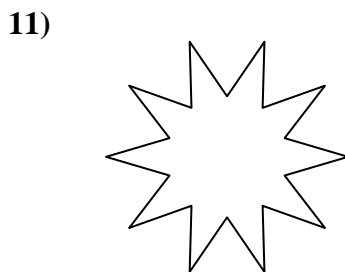
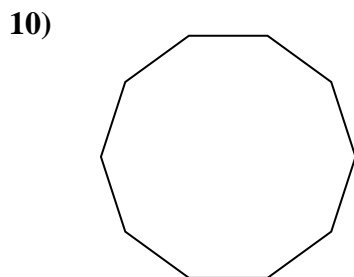
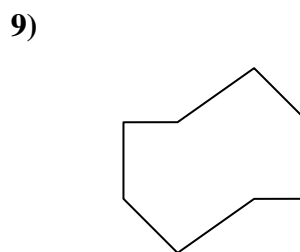
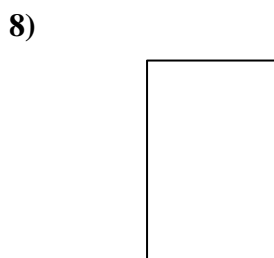
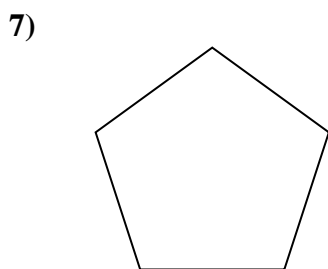
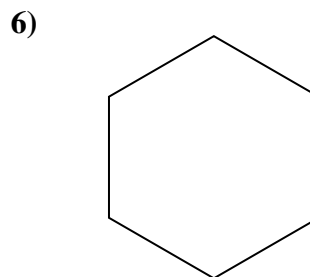

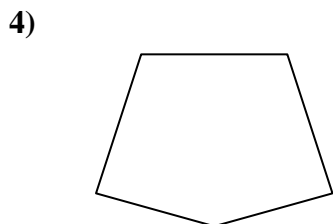
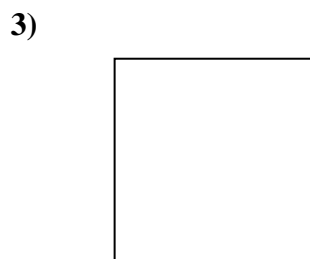
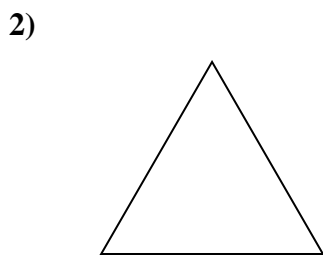
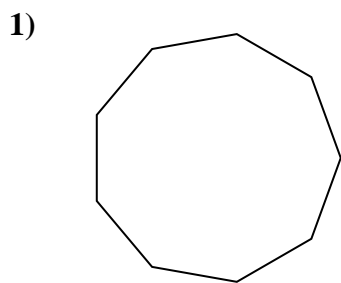


Réponses

- 1. _____
- 2. _____
- 3. _____
- 4. _____
- 5. _____
- 6. _____
- 7. _____
- 8. _____
- 9. _____
- 10. _____
- 11. _____
- 12. _____
- 13. _____
- 14. _____
- 15. _____



Déterminer si la figure est régulière ou irrégulière.



Réponses

1. régulière
2. régulière
3. régulière
4. irrégulière
5. irrégulière
6. régulière
7. régulière
8. irrégulière
9. irrégulière
10. régulière
11. irrégulière
12. irrégulière
13. régulière
14. irrégulière
15. régulière