



Déterminez si la figure a effectué une translation, une rotation ou une réflexion.

**Réponses**

1)



2)



3)



4)



5)



6)



7)



8)



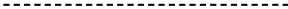
9)



10)



11)



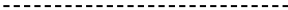
12)



13)



14)



15)

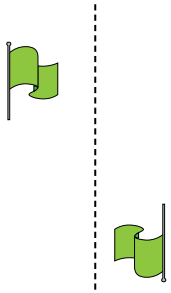


1. \_\_\_\_\_
2. \_\_\_\_\_
3. \_\_\_\_\_
4. \_\_\_\_\_
5. \_\_\_\_\_
6. \_\_\_\_\_
7. \_\_\_\_\_
8. \_\_\_\_\_
9. \_\_\_\_\_
10. \_\_\_\_\_
11. \_\_\_\_\_
12. \_\_\_\_\_
13. \_\_\_\_\_
14. \_\_\_\_\_
15. \_\_\_\_\_

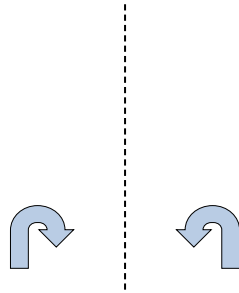


Déterminez si la figure a effectué une translation, une rotation ou une réflexion.

1)



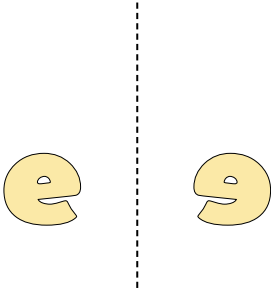
2)




3)



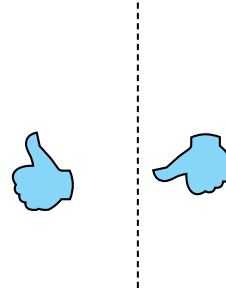
4)



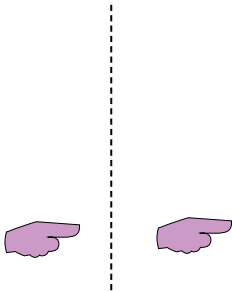
5)



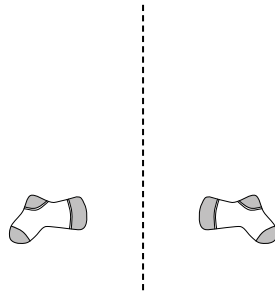
6)



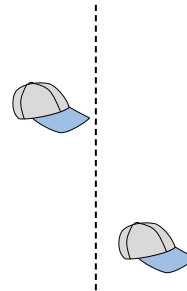
7)



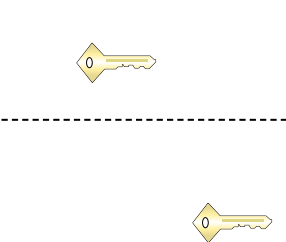
8)



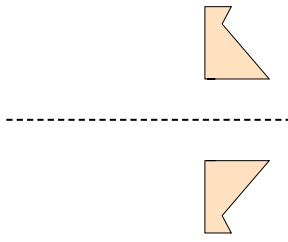
9)




10)




11)



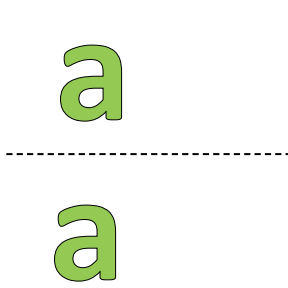
12)



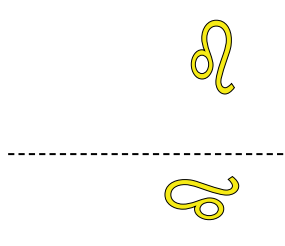
13)



14)



15)



**Réponses**

1. rotation

2. réflexion

3. réflexion

4. réflexion

5. translation

6. rotation

7. translation

8. réflexion

9. translation

10. translation

11. réflexion

12. rotation

13. rotation

14. translation

15. rotation