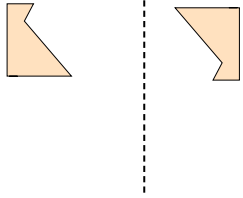




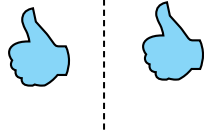
Déterminez si la figure a effectué une translation, une rotation ou une réflexion.

Réponses


1)



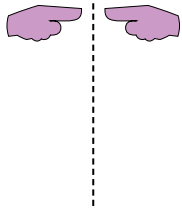
2)



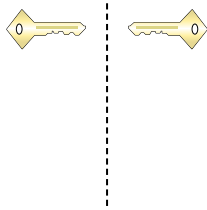
3)



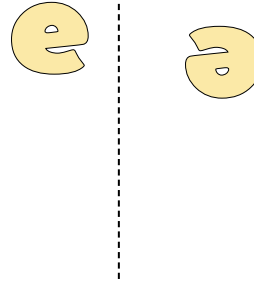
4)



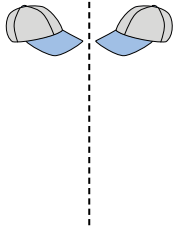
5)



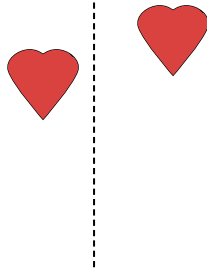
6)




7)



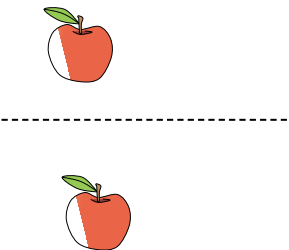
8)



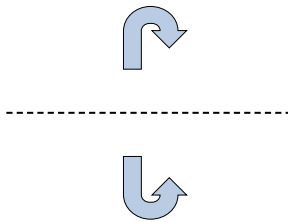
9)



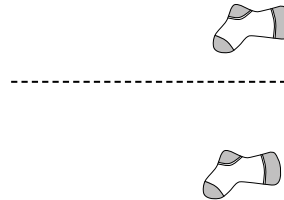
10)



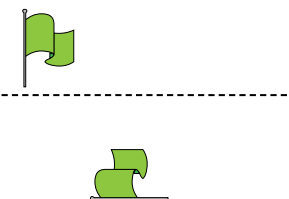
11)



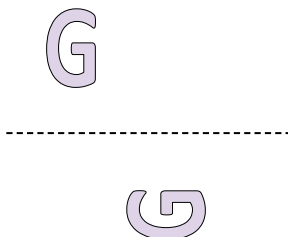
12)



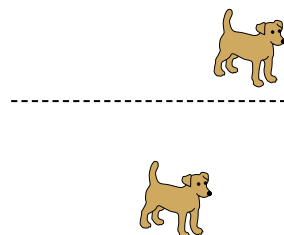
13)



14)



15)




1. _____
2. _____
3. _____
4. _____
5. _____
6. _____
7. _____
8. _____
9. _____
10. _____
11. _____
12. _____
13. _____
14. _____
15. _____

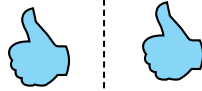


Déterminez si la figure a effectué une translation, une rotation ou une réflexion.


1)



2)



3)



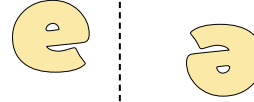
4)



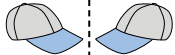
5)



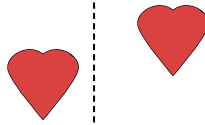
6)



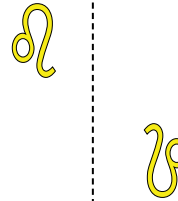
7)



8)



9)



10)



11)



12)



13)



14)



15)



Réponses

1. rotation

2. translation

3. réflexion

4. réflexion

5. réflexion

6. rotation

7. réflexion

8. translation

9. rotation

10. translation

11. réflexion

12. translation

13. rotation

14. rotation

15. translation