


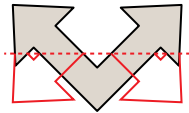


Déterminez si la droite qui parcourt la figure est un axe de symétrie.

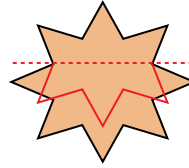
Ex)



1)



2)



Réponses

Ex. oui

1. no

2. no

3. oui

4. no

5. oui

6. no

7. oui

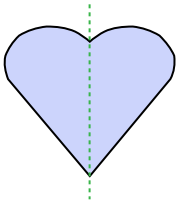
8. oui

9. oui

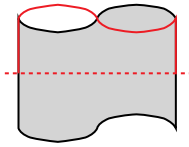
10. oui

11. oui

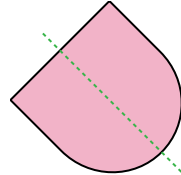
3)



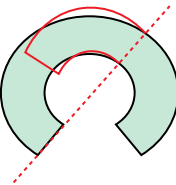
4)



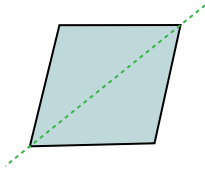
5)



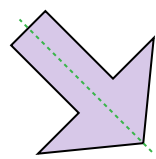
6)



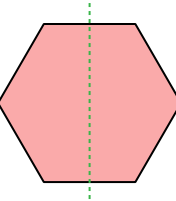
7)



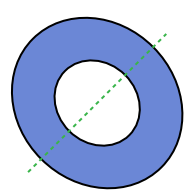
8)



9)



10)



11)

