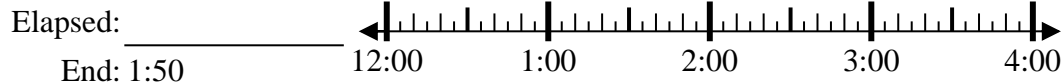




Résoudre chaque problème.

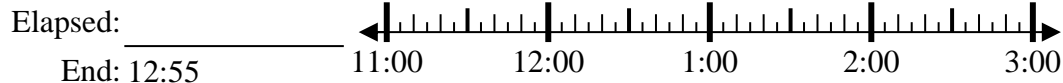
Réponses

1) Start: 12:15



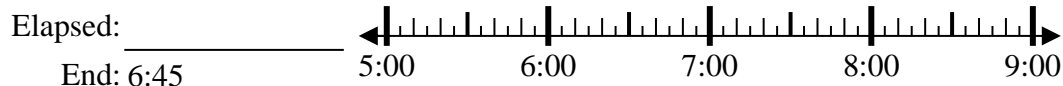
1. _____

2) Start: 11:30



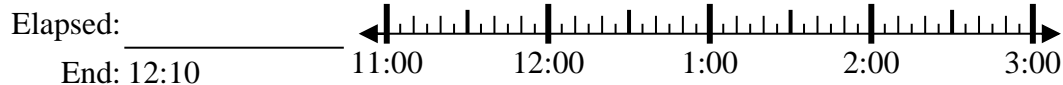
2. _____

3) Start: 5:10



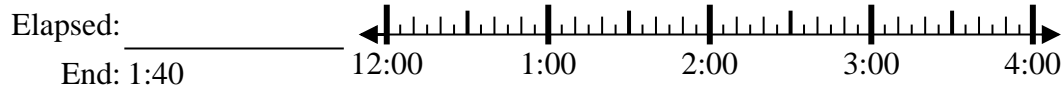
3. _____

4) Start: 11:00



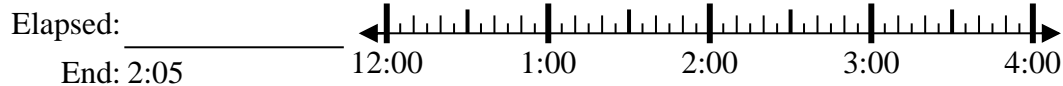
4. _____

5) Start: 12:30



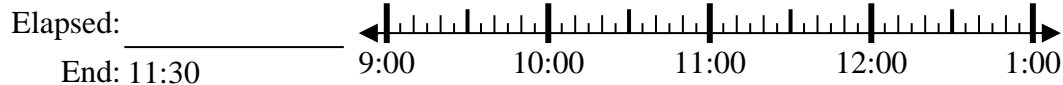
5. _____

6) Start: 12:40



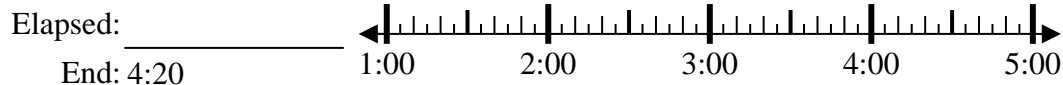
6. _____

7) Start: 9:40



7. _____

8) Start: 1:35



8. _____

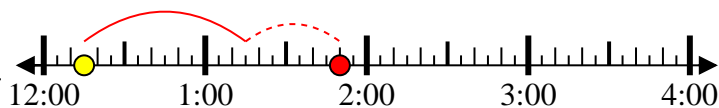


Résoudre chaque problème.

1) Start: 12:15

Elapsed: 1 hr et 35 mins

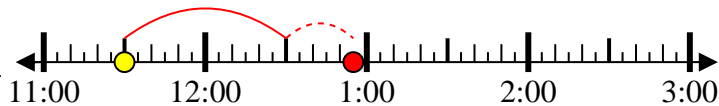
End: 1:50



2) Start: 11:30

Elapsed: 1 hr et 25 mins

End: 12:55



3) Start: 5:10

Elapsed: 1 hr et 35 mins

End: 6:45



4) Start: 11:00

Elapsed: 1 hr et 10 mins

End: 12:10



5) Start: 12:30

Elapsed: 1 hr et 10 mins

End: 1:40



6) Start: 12:40

Elapsed: 1 hr et 25 mins

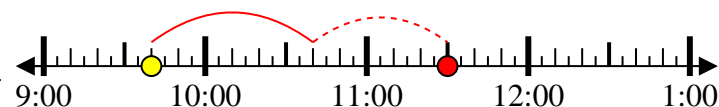
End: 2:05



7) Start: 9:40

Elapsed: 1 hr et 50 mins

End: 11:30



8) Start: 1:35

Elapsed: 2 hrs et 45 mins

End: 4:20



Réponses

1. 1 hr et 35 mins

2. 1 hr et 25 mins

3. 1 hr et 35 mins

4. 1 hr et 10 mins

5. 1 hr et 10 mins

6. 1 hr et 25 mins

7. 1 hr et 50 mins

8. 2 hrs et 45 mins