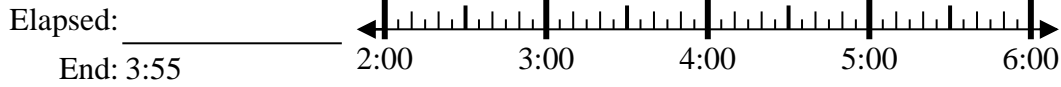




Résoudre chaque problème.

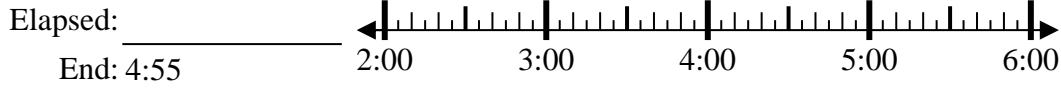
Réponses

1) Start: 2:15



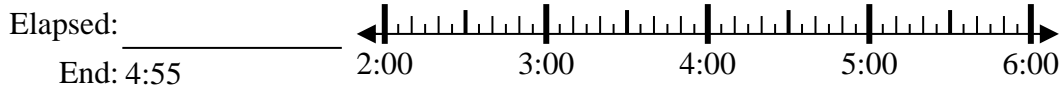
1. _____

2) Start: 2:10



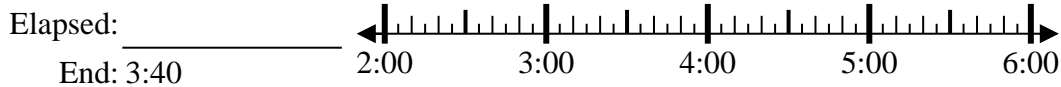
2. _____

3) Start: 2:45



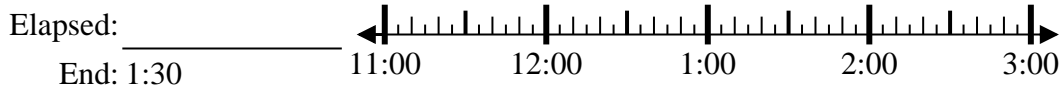
3. _____

4) Start: 2:20



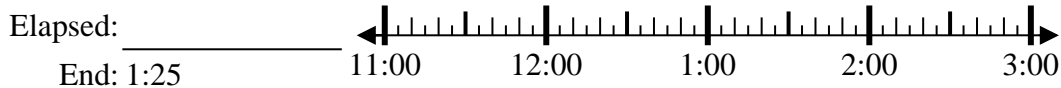
4. _____

5) Start: 11:05



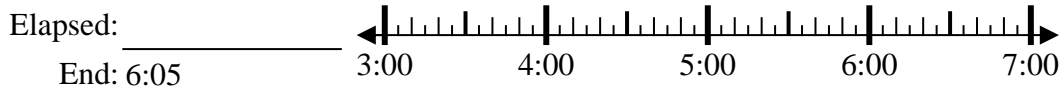
5. _____

6) Start: 11:05



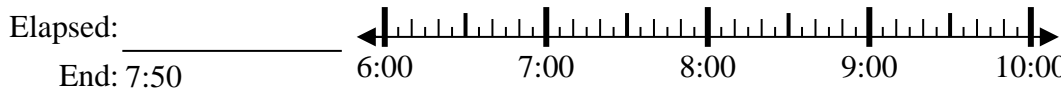
6. _____

7) Start: 3:45



7. _____

8) Start: 6:20



8. _____

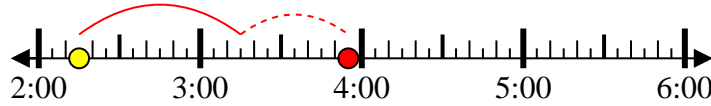


Résoudre chaque problème.

1) Start: 2:15

Elapsed: 1 hr et 40 mins

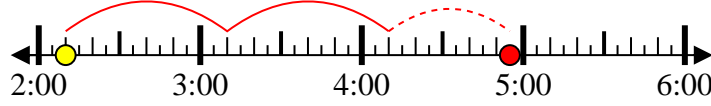
End: 3:55



2) Start: 2:10

Elapsed: 2 hrs et 45 mins

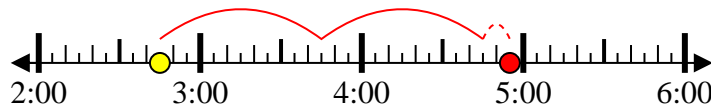
End: 4:55



3) Start: 2:45

Elapsed: 2 hrs et 10 mins

End: 4:55



4) Start: 2:20

Elapsed: 1 hr et 20 mins

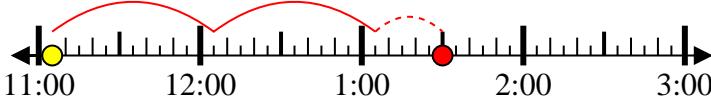
End: 3:40



5) Start: 11:05

Elapsed: 2 hrs et 25 mins

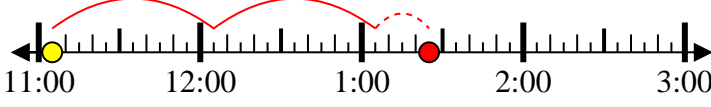
End: 1:30



6) Start: 11:05

Elapsed: 2 hrs et 20 mins

End: 1:25



7) Start: 3:45

Elapsed: 2 hrs et 20 mins

End: 6:05



8) Start: 6:20

Elapsed: 1 hr et 30 mins

End: 7:50



Réponses

1. 1 hr et 40 mins

2. 2 hrs et 45 mins

3. 2 hrs et 10 mins

4. 1 hr et 20 mins

5. 2 hrs et 25 mins

6. 2 hrs et 20 mins

7. 2 hrs et 20 mins

8. 1 hr et 30 mins



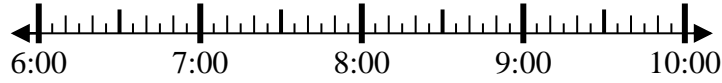
Résoudre chaque problème.

Réponses

1) Start: 6:45

Elapsed: _____

End: 7:55

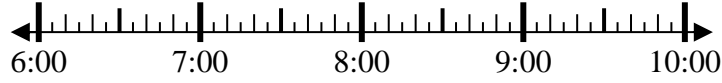


1. _____

2) Start: 6:25

Elapsed: _____

End: 9:05

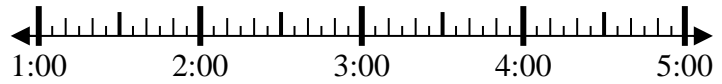


2. _____

3) Start: 1:10

Elapsed: _____

End: 3:00



3. _____

4) Start: 11:15

Elapsed: _____

End: 1:00



4. _____

5) Start: 3:25

Elapsed: _____

End: 5:35

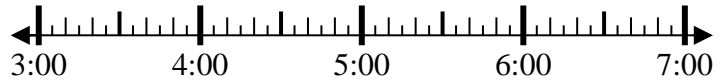


5. _____

6) Start: 3:20

Elapsed: _____

End: 5:55

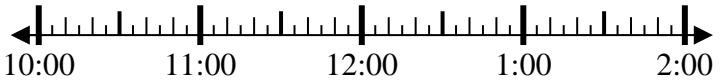


6. _____

7) Start: 10:35

Elapsed: _____

End: 12:25

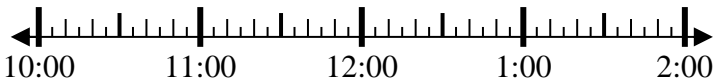


7. _____

8) Start: 10:00

Elapsed: _____

End: 11:30



8. _____

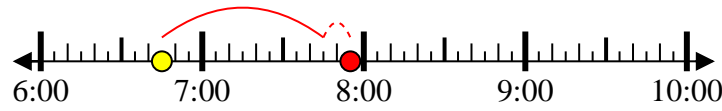


Résoudre chaque problème.

1) Start: 6:45

Elapsed: 1 hr et 10 mins

End: 7:55



2) Start: 6:25

Elapsed: 2 hrs et 40 mins

End: 9:05



3) Start: 1:10

Elapsed: 1 hr et 50 mins

End: 3:00



4) Start: 11:15

Elapsed: 1 hr et 45 mins

End: 1:00



5) Start: 3:25

Elapsed: 2 hrs et 10 mins

End: 5:35



6) Start: 3:20

Elapsed: 2 hrs et 35 mins

End: 5:55



7) Start: 10:35

Elapsed: 1 hr et 50 mins

End: 12:25



8) Start: 10:00

Elapsed: 1 hr et 30 mins

End: 11:30



Réponses

1. 1 hr et 10 mins

2. 2 hrs et 40 mins

3. 1 hr et 50 mins

4. 1 hr et 45 mins

5. 2 hrs et 10 mins

6. 2 hrs et 35 mins

7. 1 hr et 50 mins

8. 1 hr et 30 mins



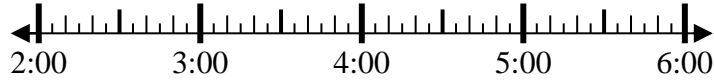
Résoudre chaque problème.

Réponses

1) Start: 2:00

Elapsed: _____

End: 3:45

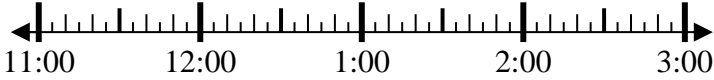


1. _____

2) Start: 11:35

Elapsed: _____

End: 2:20

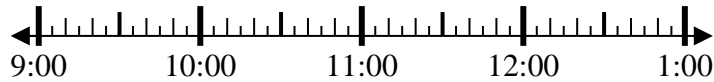


2. _____

3) Start: 9:00

Elapsed: _____

End: 10:10

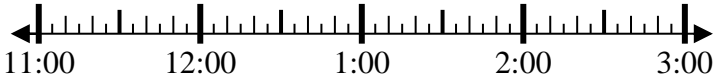


3. _____

4) Start: 11:45

Elapsed: _____

End: 1:05



4. _____

5) Start: 12:20

Elapsed: _____

End: 1:35

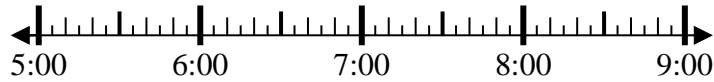


5. _____

6) Start: 5:25

Elapsed: _____

End: 6:35



6. _____

7) Start: 2:35

Elapsed: _____

End: 4:20

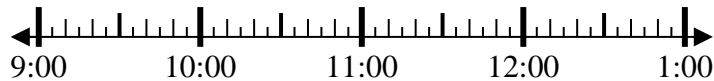


7. _____

8) Start: 9:35

Elapsed: _____

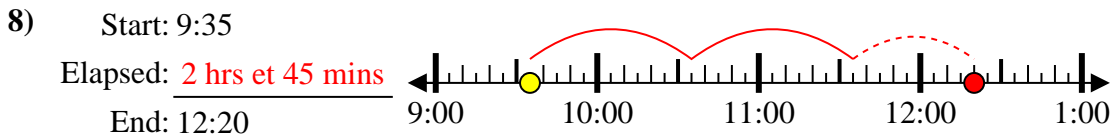
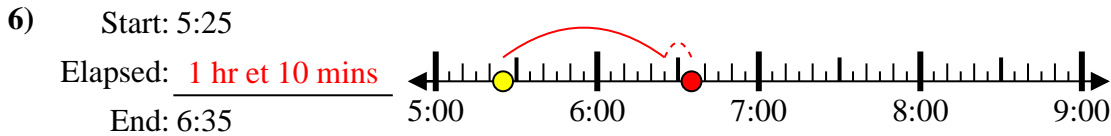
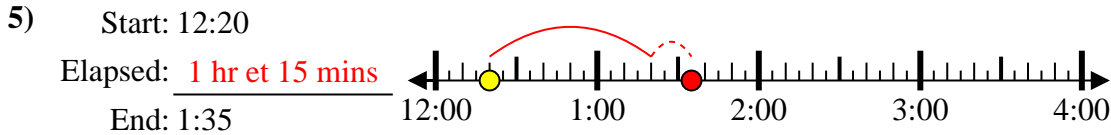
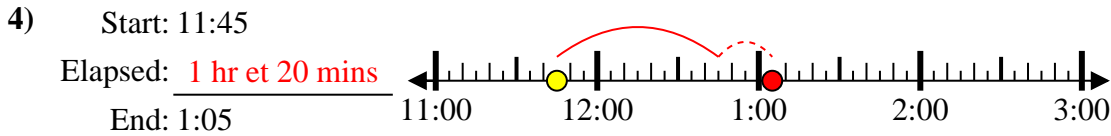
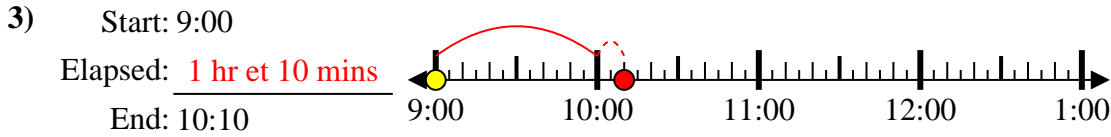
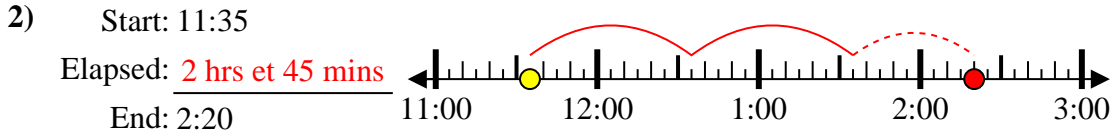
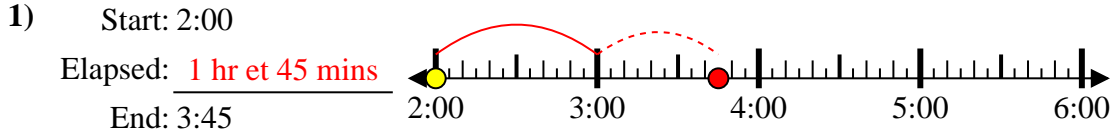
End: 12:20



8. _____



Résoudre chaque problème.



Réponses

1. 1 hr et 45 mins

2. 2 hrs et 45 mins

3. 1 hr et 10 mins

4. 1 hr et 20 mins

5. 1 hr et 15 mins

6. 1 hr et 10 mins

7. 1 hr et 45 mins

8. 2 hrs et 45 mins



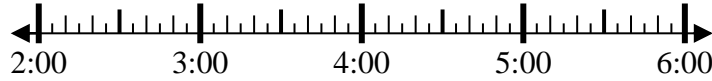
Résoudre chaque problème.

Réponses

1) Start: 2:50

Elapsed: _____

End: 5:40

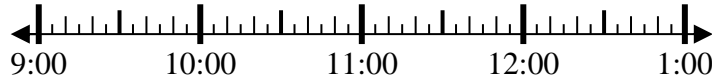


1. _____

2) Start: 9:10

Elapsed: _____

End: 10:20

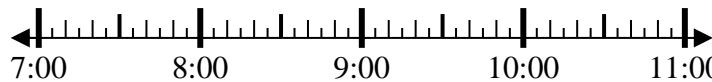


2. _____

3) Start: 7:05

Elapsed: _____

End: 8:20

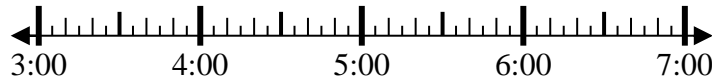


3. _____

4) Start: 3:00

Elapsed: _____

End: 4:15

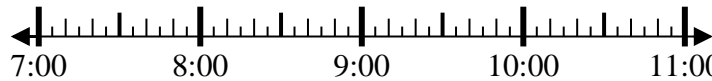


4. _____

5) Start: 7:15

Elapsed: _____

End: 8:55

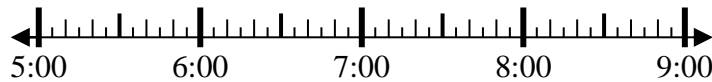


5. _____

6) Start: 5:00

Elapsed: _____

End: 7:15

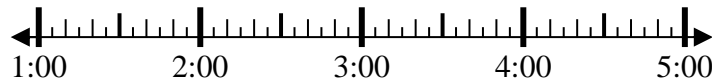


6. _____

7) Start: 1:00

Elapsed: _____

End: 3:45

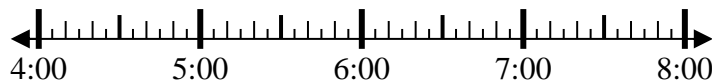


7. _____

8) Start: 4:35

Elapsed: _____

End: 5:55



8. _____

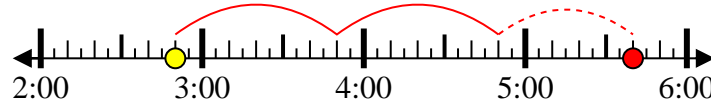


Résoudre chaque problème.

1) Start: 2:50

Elapsed: 2 hrs et 50 mins

End: 5:40



2) Start: 9:10

Elapsed: 1 hr et 10 mins

End: 10:20



3) Start: 7:05

Elapsed: 1 hr et 15 mins

End: 8:20



4) Start: 3:00

Elapsed: 1 hr et 15 mins

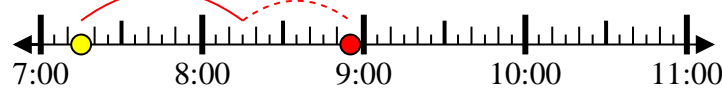
End: 4:15



5) Start: 7:15

Elapsed: 1 hr et 40 mins

End: 8:55



6) Start: 5:00

Elapsed: 2 hrs et 15 mins

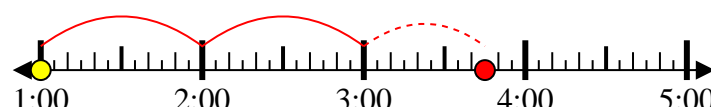
End: 7:15



7) Start: 1:00

Elapsed: 2 hrs et 45 mins

End: 3:45



8) Start: 4:35

Elapsed: 1 hr et 20 mins

End: 5:55



Réponses

1. 2 hrs et 50 mins

2. 1 hr et 10 mins

3. 1 hr et 15 mins

4. 1 hr et 15 mins

5. 1 hr et 40 mins

6. 2 hrs et 15 mins

7. 2 hrs et 45 mins

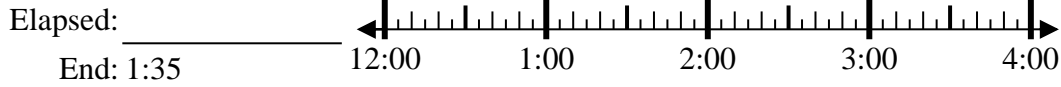
8. 1 hr et 20 mins



Résoudre chaque problème.

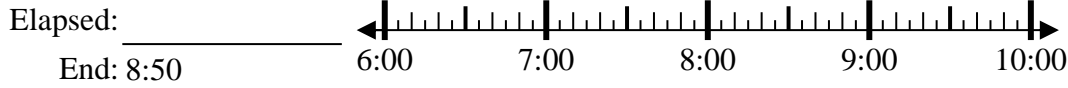
Réponses

1) Start: 12:10



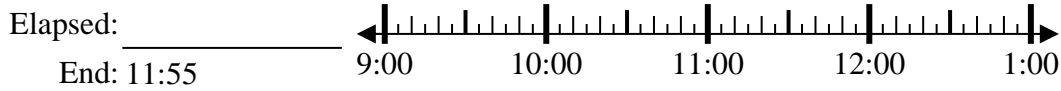
1. _____

2) Start: 6:40



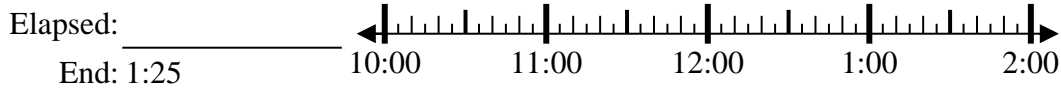
2. _____

3) Start: 9:05



3. _____

4) Start: 10:45



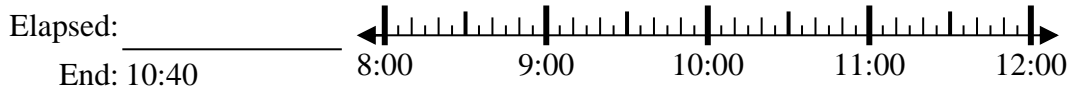
4. _____

5) Start: 5:35



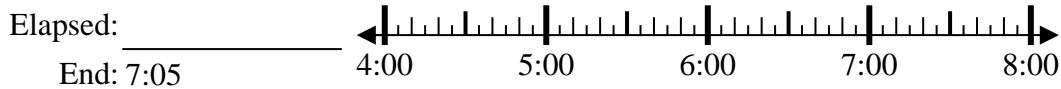
5. _____

6) Start: 8:15



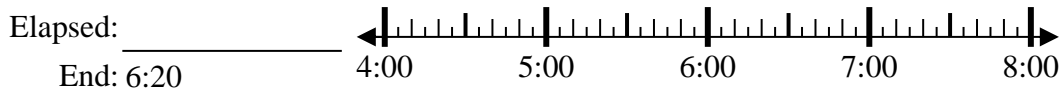
6. _____

7) Start: 4:10



7. _____

8) Start: 4:00



8. _____



Résoudre chaque problème.

1) Start: 12:10

Elapsed: 1 hr et 25 mins

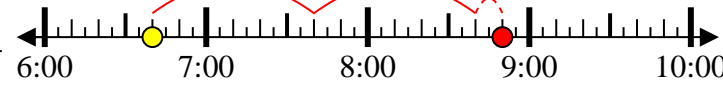
End: 1:35



2) Start: 6:40

Elapsed: 2 hrs et 10 mins

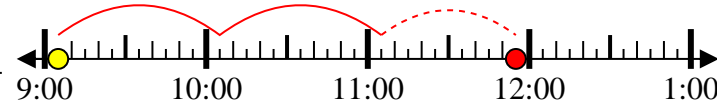
End: 8:50



3) Start: 9:05

Elapsed: 2 hrs et 50 mins

End: 11:55



4) Start: 10:45

Elapsed: 2 hrs et 40 mins

End: 1:25



5) Start: 5:35

Elapsed: 1 hr et 30 mins

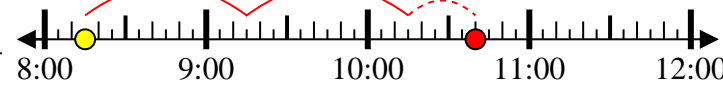
End: 7:05



6) Start: 8:15

Elapsed: 2 hrs et 25 mins

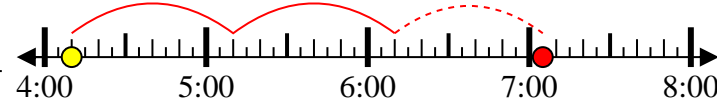
End: 10:40



7) Start: 4:10

Elapsed: 2 hrs et 55 mins

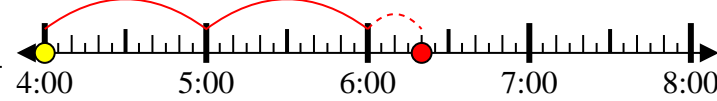
End: 7:05



8) Start: 4:00

Elapsed: 2 hrs et 20 mins

End: 6:20



Réponses

1. 1 hr et 25 mins

2. 2 hrs et 10 mins

3. 2 hrs et 50 mins

4. 2 hrs et 40 mins

5. 1 hr et 30 mins

6. 2 hrs et 25 mins

7. 2 hrs et 55 mins

8. 2 hrs et 20 mins



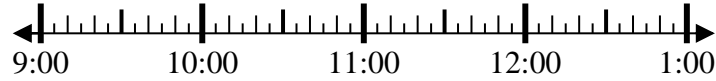
Résoudre chaque problème.

Réponses

1) Start: 9:35

Elapsed: _____

End: 12:05

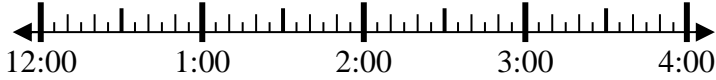


1. _____

2) Start: 12:50

Elapsed: _____

End: 2:35

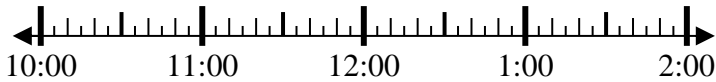


2. _____

3) Start: 10:15

Elapsed: _____

End: 11:40

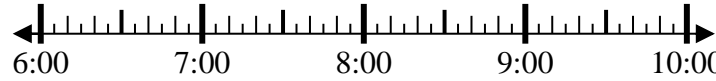


3. _____

4) Start: 6:25

Elapsed: _____

End: 8:10

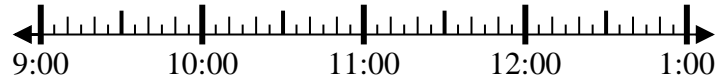


4. _____

5) Start: 9:10

Elapsed: _____

End: 10:25

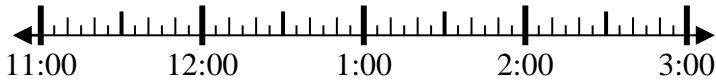


5. _____

6) Start: 11:45

Elapsed: _____

End: 2:00

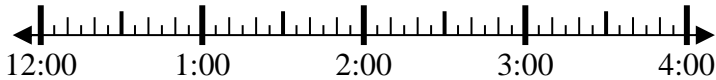


6. _____

7) Start: 12:20

Elapsed: _____

End: 2:00

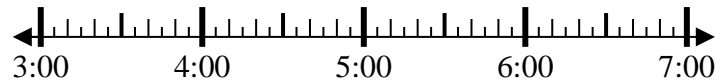


7. _____

8) Start: 3:35

Elapsed: _____

End: 5:15



8. _____

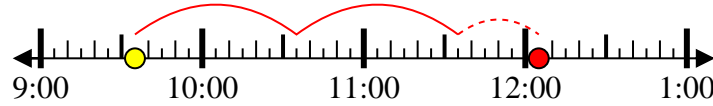


Résoudre chaque problème.

1) Start: 9:35

Elapsed: 2 hrs et 30 mins

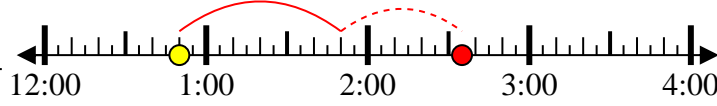
End: 12:05



2) Start: 12:50

Elapsed: 1 hr et 45 mins

End: 2:35



3) Start: 10:15

Elapsed: 1 hr et 25 mins

End: 11:40



4) Start: 6:25

Elapsed: 1 hr et 45 mins

End: 8:10



5) Start: 9:10

Elapsed: 1 hr et 15 mins

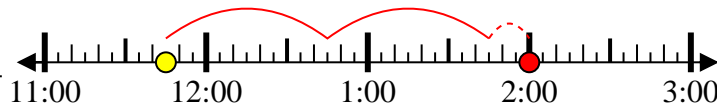
End: 10:25



6) Start: 11:45

Elapsed: 2 hrs et 15 mins

End: 2:00



7) Start: 12:20

Elapsed: 1 hr et 40 mins

End: 2:00



8) Start: 3:35

Elapsed: 1 hr et 40 mins

End: 5:15



Réponses

1. 2 hrs et 30 mins

2. 1 hr et 45 mins

3. 1 hr et 25 mins

4. 1 hr et 45 mins

5. 1 hr et 15 mins

6. 2 hrs et 15 mins

7. 1 hr et 40 mins

8. 1 hr et 40 mins



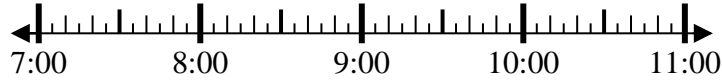
Résoudre chaque problème.

Réponses

1) Start: 7:05

Elapsed: _____

End: 9:25

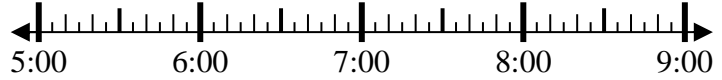


1. _____

2) Start: 5:25

Elapsed: _____

End: 7:45



2. _____

3) Start: 4:15

Elapsed: _____

End: 5:50



3. _____

4) Start: 12:05

Elapsed: _____

End: 2:45

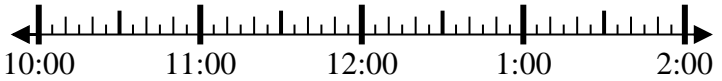


4. _____

5) Start: 10:05

Elapsed: _____

End: 11:50



5. _____

6) Start: 11:45

Elapsed: _____

End: 2:00



6. _____

7) Start: 5:25

Elapsed: _____

End: 7:05

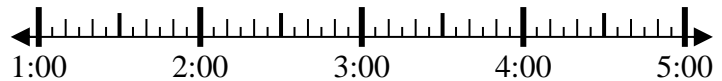


7. _____

8) Start: 1:25

Elapsed: _____

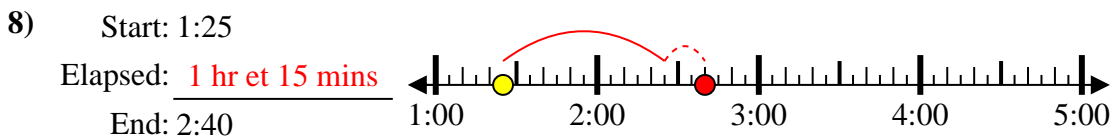
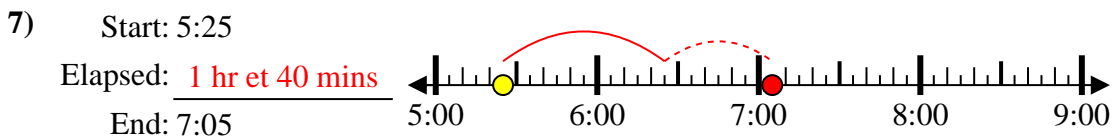
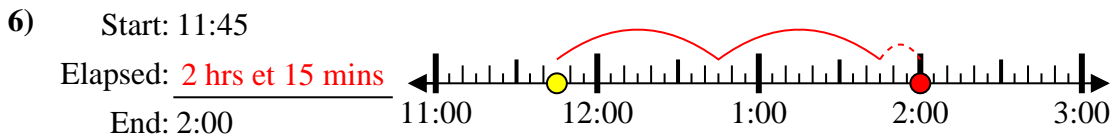
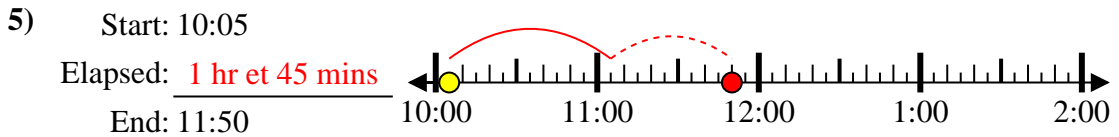
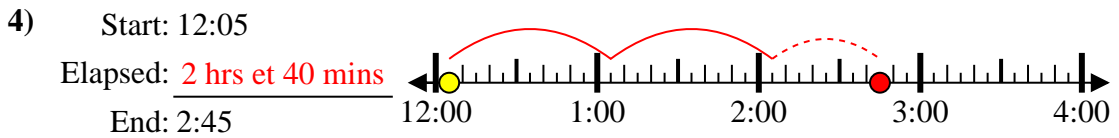
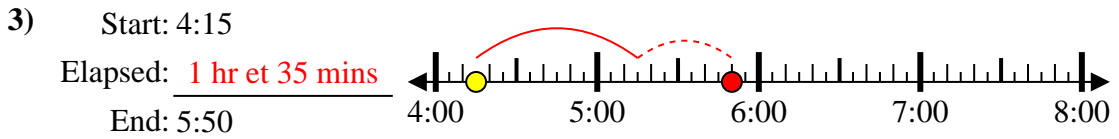
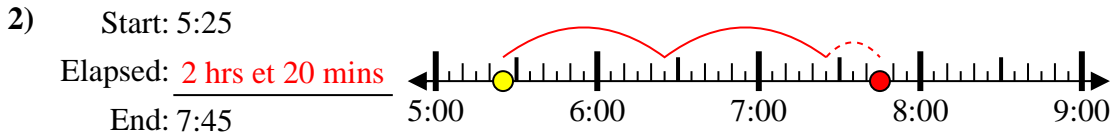
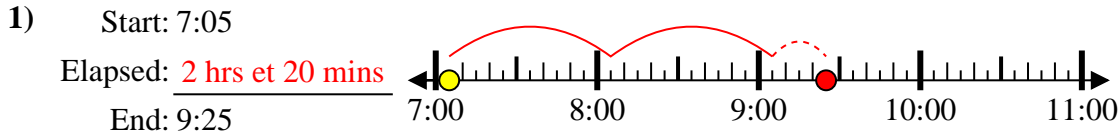
End: 2:40



8. _____



Résoudre chaque problème.



Réponses

1. 2 hrs et 20 mins

2. 2 hrs et 20 mins

3. 1 hr et 35 mins

4. 2 hrs et 40 mins

5. 1 hr et 45 mins

6. 2 hrs et 15 mins

7. 1 hr et 40 mins

8. 1 hr et 15 mins



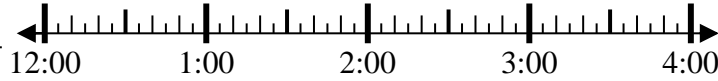
Résoudre chaque problème.

Réponses

1) Start: 12:15

Elapsed: _____

End: 1:50

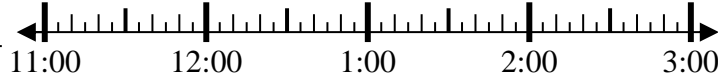


1. _____

2) Start: 11:30

Elapsed: _____

End: 12:55

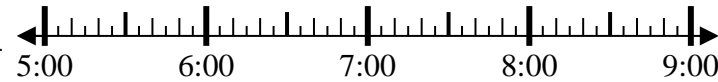


2. _____

3) Start: 5:10

Elapsed: _____

End: 6:45

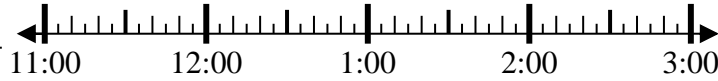


3. _____

4) Start: 11:00

Elapsed: _____

End: 12:10

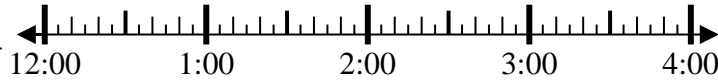


4. _____

5) Start: 12:30

Elapsed: _____

End: 1:40



5. _____

6) Start: 12:40

Elapsed: _____

End: 2:05

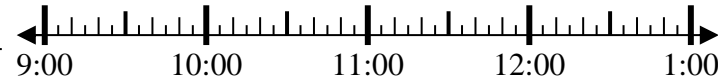


6. _____

7) Start: 9:40

Elapsed: _____

End: 11:30

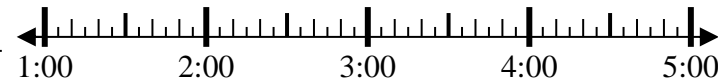


7. _____

8) Start: 1:35

Elapsed: _____

End: 4:20



8. _____

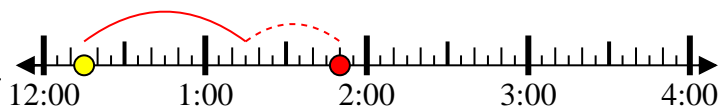


Résoudre chaque problème.

1) Start: 12:15

Elapsed: 1 hr et 35 mins

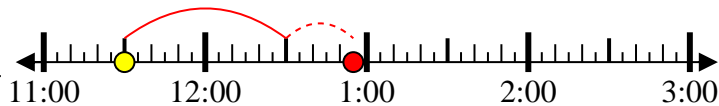
End: 1:50



2) Start: 11:30

Elapsed: 1 hr et 25 mins

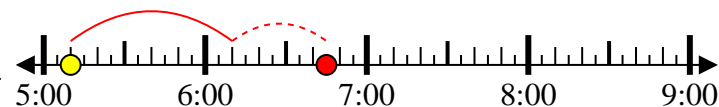
End: 12:55



3) Start: 5:10

Elapsed: 1 hr et 35 mins

End: 6:45



4) Start: 11:00

Elapsed: 1 hr et 10 mins

End: 12:10



5) Start: 12:30

Elapsed: 1 hr et 10 mins

End: 1:40



6) Start: 12:40

Elapsed: 1 hr et 25 mins

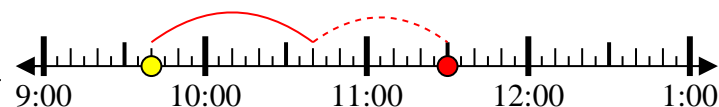
End: 2:05



7) Start: 9:40

Elapsed: 1 hr et 50 mins

End: 11:30



8) Start: 1:35

Elapsed: 2 hrs et 45 mins

End: 4:20



Réponses

1. 1 hr et 35 mins

2. 1 hr et 25 mins

3. 1 hr et 35 mins

4. 1 hr et 10 mins

5. 1 hr et 10 mins

6. 1 hr et 25 mins

7. 1 hr et 50 mins

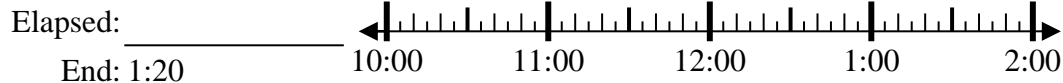
8. 2 hrs et 45 mins



Résoudre chaque problème.

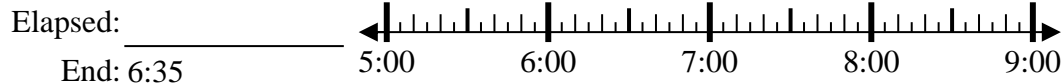
Réponses

1) Start: 10:50



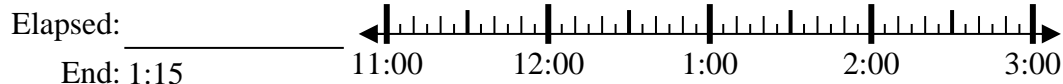
1. _____

2) Start: 5:10



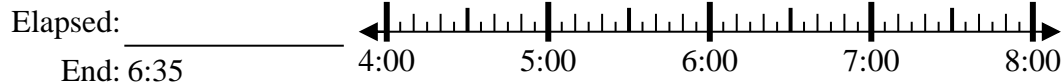
2. _____

3) Start: 11:40



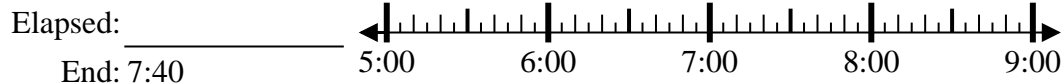
3. _____

4) Start: 4:20



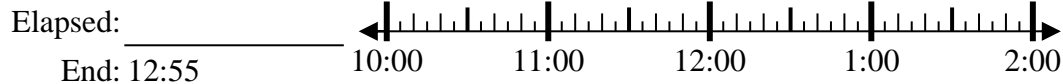
4. _____

5) Start: 5:15



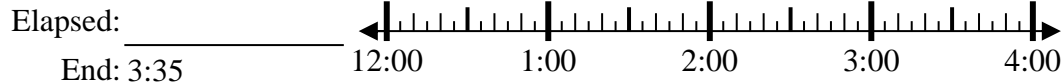
5. _____

6) Start: 10:20



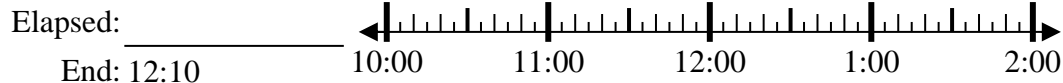
6. _____

7) Start: 12:45



7. _____

8) Start: 10:40



8. _____

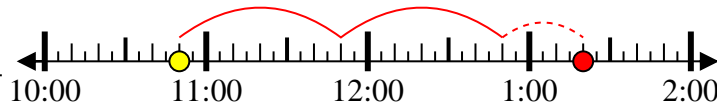


Résoudre chaque problème.

1) Start: 10:50

Elapsed: 2 hrs et 30 mins

End: 1:20



2) Start: 5:10

Elapsed: 1 hr et 25 mins

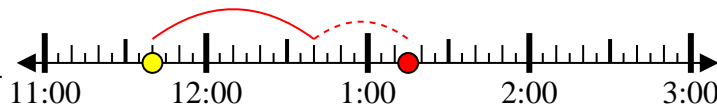
End: 6:35



3) Start: 11:40

Elapsed: 1 hr et 35 mins

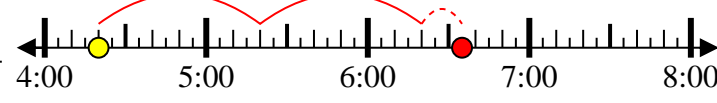
End: 1:15



4) Start: 4:20

Elapsed: 2 hrs et 15 mins

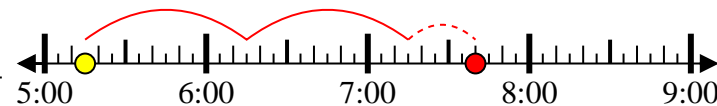
End: 6:35



5) Start: 5:15

Elapsed: 2 hrs et 25 mins

End: 7:40



6) Start: 10:20

Elapsed: 2 hrs et 35 mins

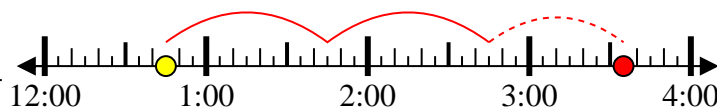
End: 12:55



7) Start: 12:45

Elapsed: 2 hrs et 50 mins

End: 3:35



8) Start: 10:40

Elapsed: 1 hr et 30 mins

End: 12:10



Réponses

1. 2 hrs et 30 mins

2. 1 hr et 25 mins

3. 1 hr et 35 mins

4. 2 hrs et 15 mins

5. 2 hrs et 25 mins

6. 2 hrs et 35 mins

7. 2 hrs et 50 mins

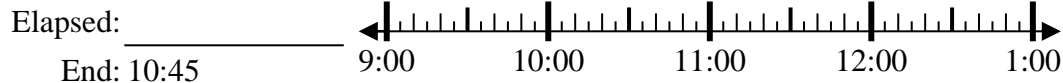
8. 1 hr et 30 mins



Résoudre chaque problème.

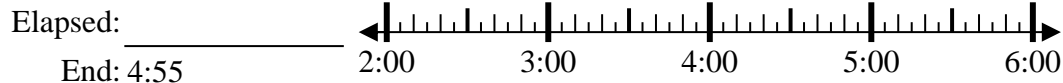
Réponses

1) Start: 9:20



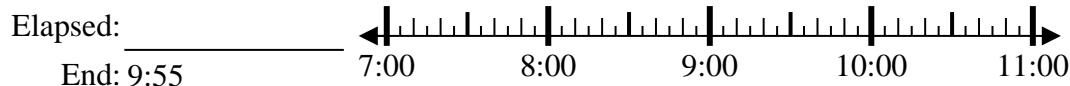
1. _____

2) Start: 2:00



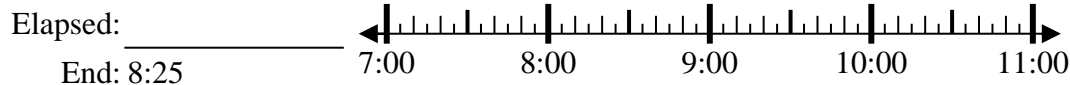
2. _____

3) Start: 7:40



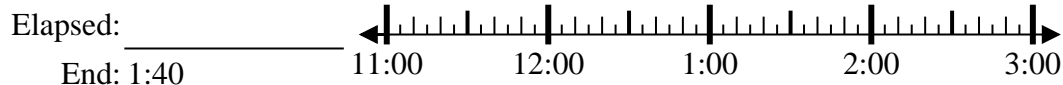
3. _____

4) Start: 7:15



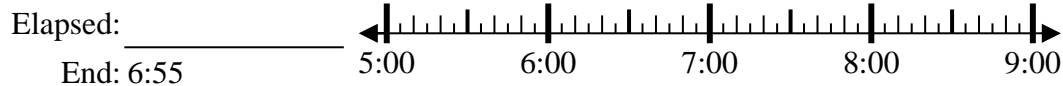
4. _____

5) Start: 11:15



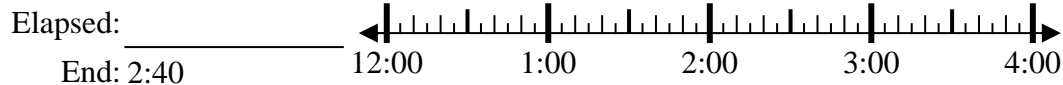
5. _____

6) Start: 5:30



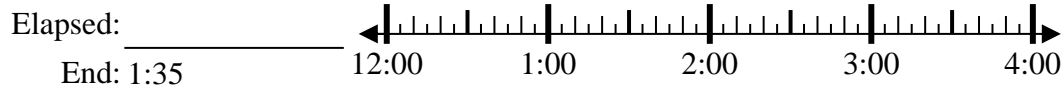
6. _____

7) Start: 12:00



7. _____

8) Start: 12:15



8. _____



Résoudre chaque problème.

1) Start: 9:20

Elapsed: 1 hr et 25 mins

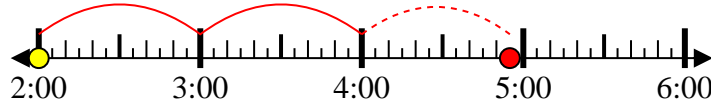
End: 10:45



2) Start: 2:00

Elapsed: 2 hrs et 55 mins

End: 4:55



3) Start: 7:40

Elapsed: 2 hrs et 15 mins

End: 9:55



4) Start: 7:15

Elapsed: 1 hr et 10 mins

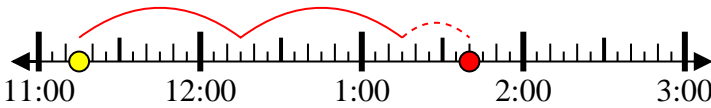
End: 8:25



5) Start: 11:15

Elapsed: 2 hrs et 25 mins

End: 1:40



6) Start: 5:30

Elapsed: 1 hr et 25 mins

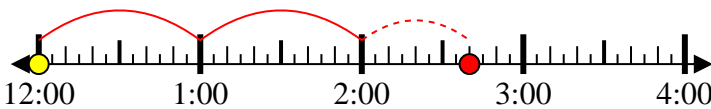
End: 6:55



7) Start: 12:00

Elapsed: 2 hrs et 40 mins

End: 2:40



8) Start: 12:15

Elapsed: 1 hr et 20 mins

End: 1:35



Réponses

1. 1 hr et 25 mins

2. 2 hrs et 55 mins

3. 2 hrs et 15 mins

4. 1 hr et 10 mins

5. 2 hrs et 25 mins

6. 1 hr et 25 mins

7. 2 hrs et 40 mins

8. 1 hr et 20 mins