



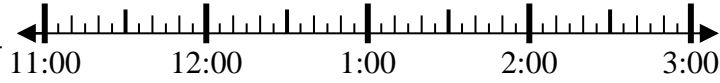
Résoudre chaque problème.

Réponses

1) Start: 11:30

Elapsed: _____

End: 12:40

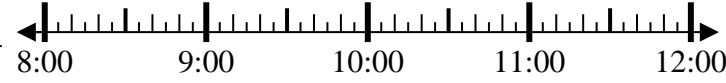


1. _____

2) Start: 8:20

Elapsed: _____

End: 10:15

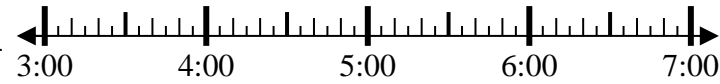


2. _____

3) Start: 3:15

Elapsed: _____

End: 5:35

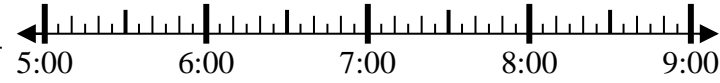


3. _____

4) Start: 5:40

Elapsed: _____

End: 8:05

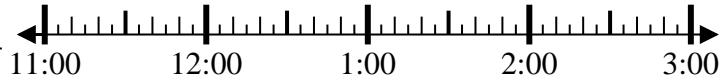


4. _____

5) Start: 11:55

Elapsed: _____

End: 2:20

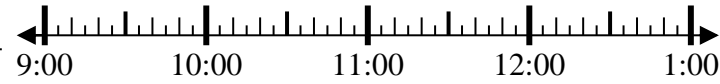


5. _____

6) Start: 9:45

Elapsed: _____

End: 12:05

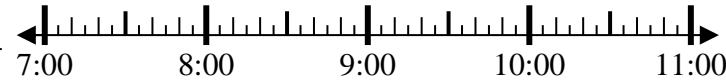


6. _____

7) Start: 7:15

Elapsed: _____

End: 9:40

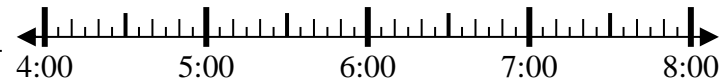


7. _____

8) Start: 4:50

Elapsed: _____

End: 7:30



8. _____

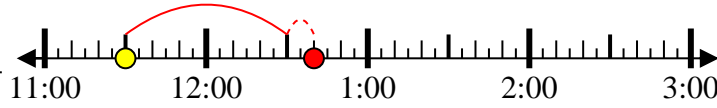


Résoudre chaque problème.

1) Start: 11:30

Elapsed: 1 hr et 10 mins

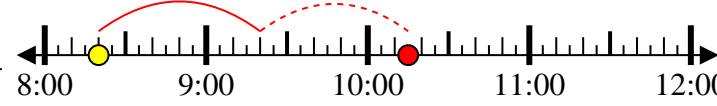
End: 12:40



2) Start: 8:20

Elapsed: 1 hr et 55 mins

End: 10:15



3) Start: 3:15

Elapsed: 2 hrs et 20 mins

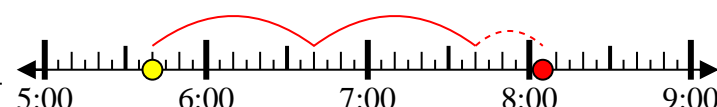
End: 5:35



4) Start: 5:40

Elapsed: 2 hrs et 25 mins

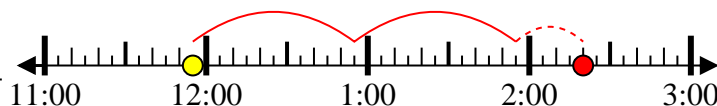
End: 8:05



5) Start: 11:55

Elapsed: 2 hrs et 25 mins

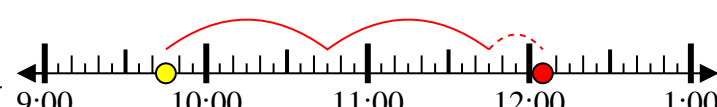
End: 2:20



6) Start: 9:45

Elapsed: 2 hrs et 20 mins

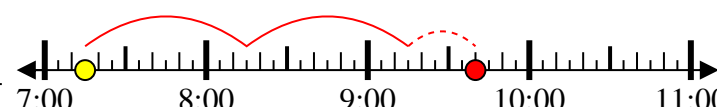
End: 12:05



7) Start: 7:15

Elapsed: 2 hrs et 25 mins

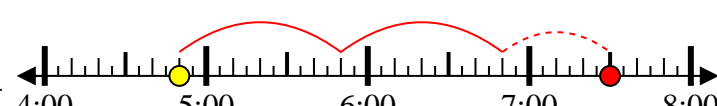
End: 9:40



8) Start: 4:50

Elapsed: 2 hrs et 40 mins

End: 7:30



Réponses

1. 1 hr et 10 mins

2. 1 hr et 55 mins

3. 2 hrs et 20 mins

4. 2 hrs et 25 mins

5. 2 hrs et 25 mins

6. 2 hrs et 20 mins

7. 2 hrs et 25 mins

8. 2 hrs et 40 mins