



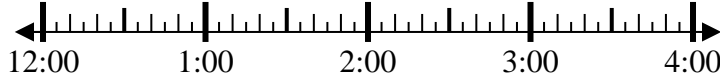
Résoudre chaque problème.

Réponses

1) Start: _____

Elapsed: 1 hr et 35 mins

End: 1:50

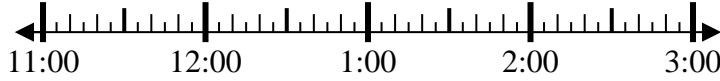


1. _____

2) Start: _____

Elapsed: 1 hr et 25 mins

End: 12:55

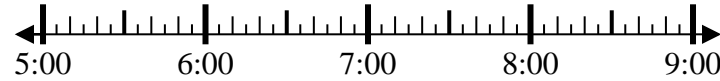


2. _____

3) Start: _____

Elapsed: 1 hr et 35 mins

End: 6:45

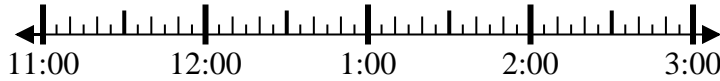


3. _____

4) Start: _____

Elapsed: 1 hr et 10 mins

End: 12:10



4. _____

5) Start: _____

Elapsed: 1 hr et 10 mins

End: 1:40



5. _____

6) Start: _____

Elapsed: 1 hr et 25 mins

End: 2:05

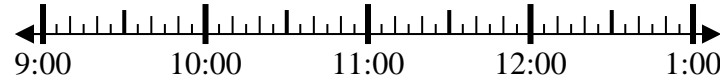


6. _____

7) Start: _____

Elapsed: 1 hr et 50 mins

End: 11:30



7. _____

8) Start: _____

Elapsed: 2 hrs et 45 mins

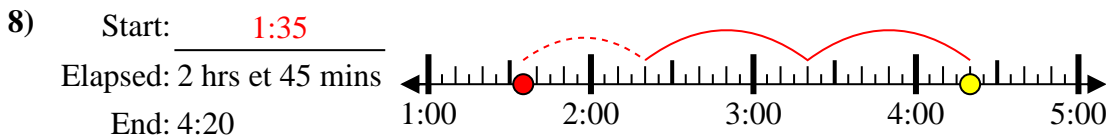
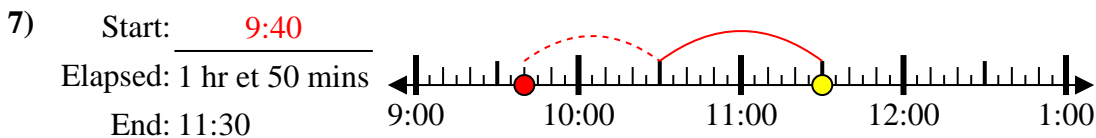
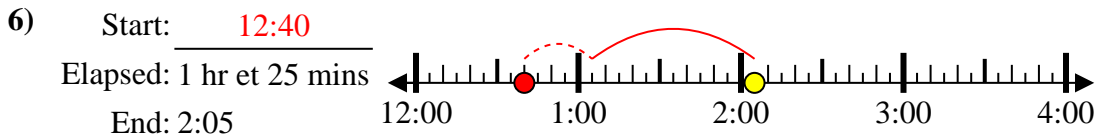
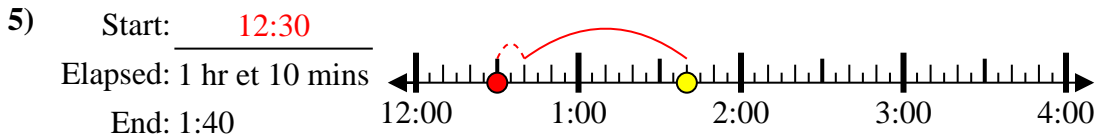
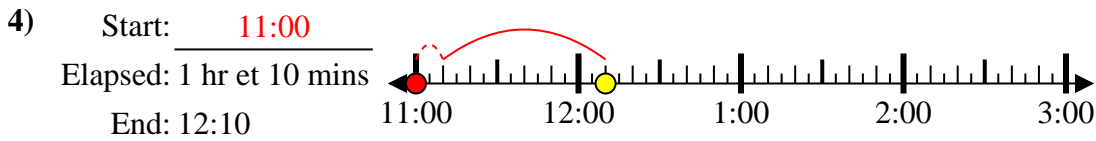
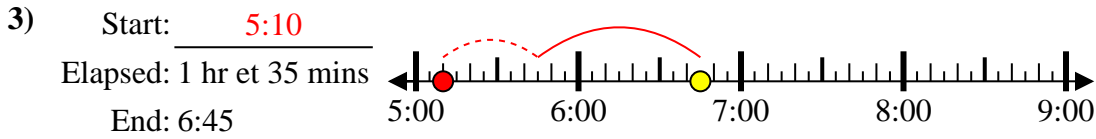
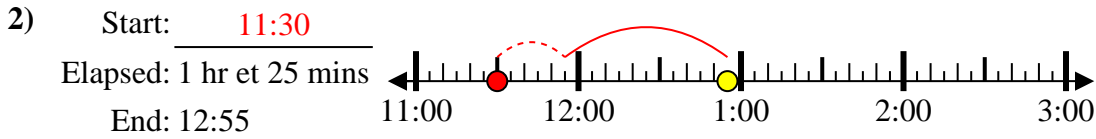
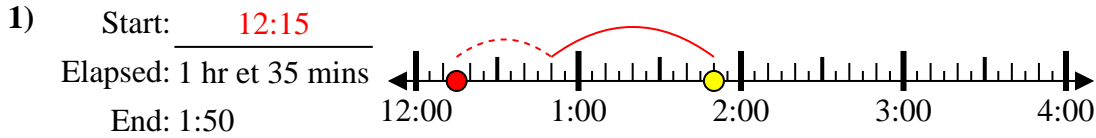
End: 4:20



8. _____



Résoudre chaque problème.



Réponses

1. 12:15

2. 11:30

3. 5:10

4. 11:00

5. 12:30

6. 12:40

7. 9:40

8. 1:35