



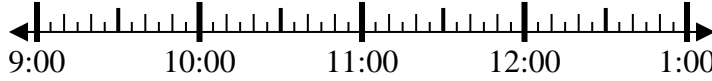
Résoudre chaque problème.

Réponses

1) Start: _____

Elapsed: 1 hr et 40 mins

End: 10:45

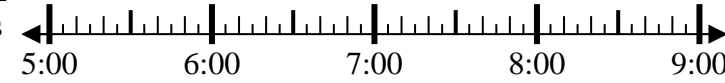


1. _____

2) Start: _____

Elapsed: 2 hrs et 10 mins

End: 7:55

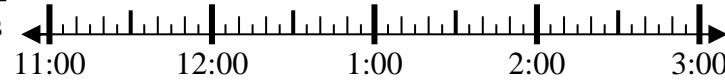


2. _____

3) Start: _____

Elapsed: 2 hrs et 20 mins

End: 1:20

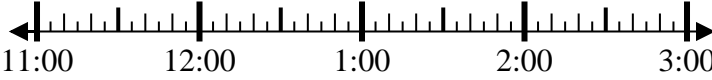


3. _____

4) Start: _____

Elapsed: 1 hr et 40 mins

End: 12:40



4. _____

5) Start: _____

Elapsed: 2 hrs et 30 mins

End: 5:15

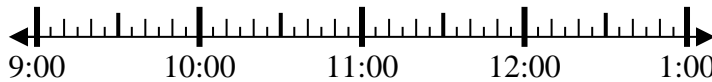


5. _____

6) Start: _____

Elapsed: 1 hr et 30 mins

End: 10:40

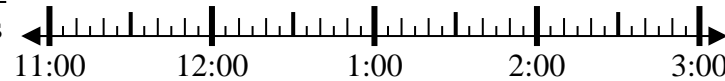


6. _____

7) Start: _____

Elapsed: 2 hrs et 15 mins

End: 1:15

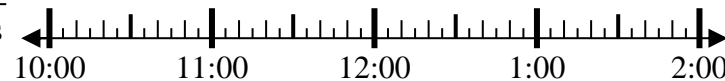


7. _____

8) Start: _____

Elapsed: 2 hrs et 15 mins

End: 12:45



8. _____



Résoudre chaque problème.

1) Start: 9:05
Elapsed: 1 hr et 40 mins
End: 10:45



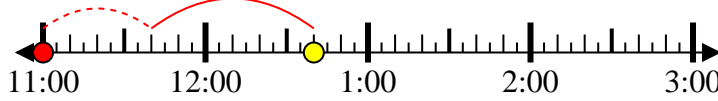
2) Start: 5:45
Elapsed: 2 hrs et 10 mins
End: 7:55



3) Start: 11:00
Elapsed: 2 hrs et 20 mins
End: 1:20



4) Start: 11:00
Elapsed: 1 hr et 40 mins
End: 12:40



5) Start: 2:45
Elapsed: 2 hrs et 30 mins
End: 5:15



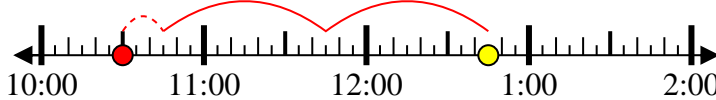
6) Start: 9:10
Elapsed: 1 hr et 30 mins
End: 10:40



7) Start: 11:00
Elapsed: 2 hrs et 15 mins
End: 1:15



8) Start: 10:30
Elapsed: 2 hrs et 15 mins
End: 12:45



Réponses

1. 9:05

2. 5:45

3. 11:00

4. 11:00

5. 2:45

6. 9:10

7. 11:00

8. 10:30