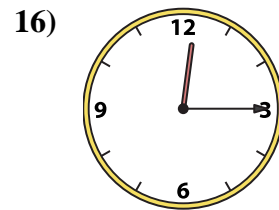
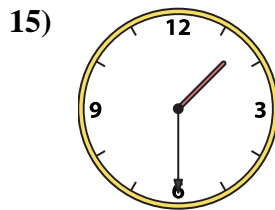
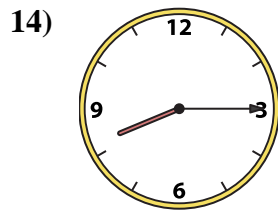
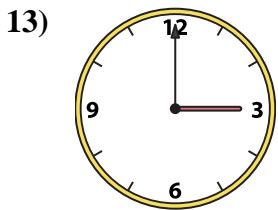
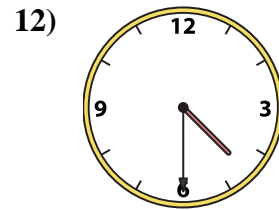
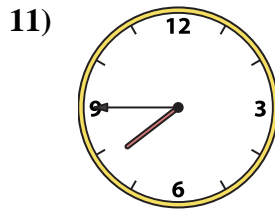
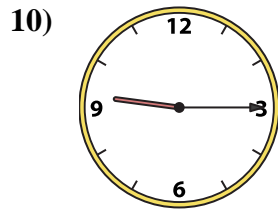
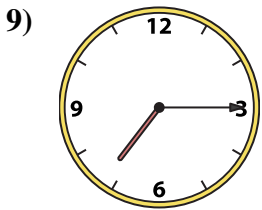
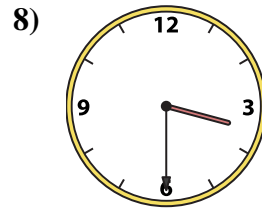
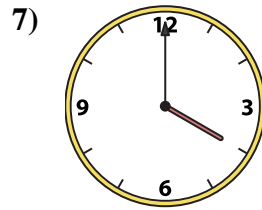
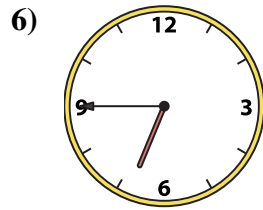
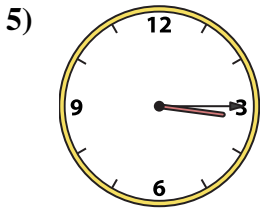
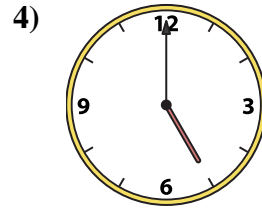
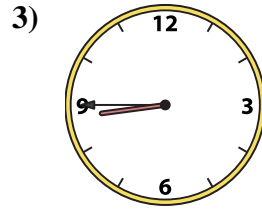
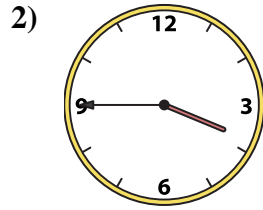
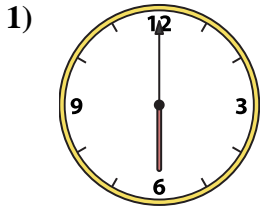




Faites correspondre l'horloge analogique à l'horloge numérique.

Réponses



1. \_\_\_\_\_

2. \_\_\_\_\_

3. \_\_\_\_\_

4. \_\_\_\_\_

5. \_\_\_\_\_

6. \_\_\_\_\_

7. \_\_\_\_\_

8. \_\_\_\_\_

9. \_\_\_\_\_

10. \_\_\_\_\_

11. \_\_\_\_\_

12. \_\_\_\_\_

13. \_\_\_\_\_

14. \_\_\_\_\_

15. \_\_\_\_\_

16. \_\_\_\_\_

A. 5:00

B. 8:45

C. 3:15

D. 3:30

E. 3:00

F. 7:45

G. 12:15

H. 1:30

I. 3:45

J. 6:45

K. 4:00

L. 7:15

M. 8:15

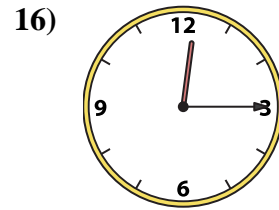
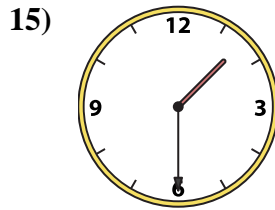
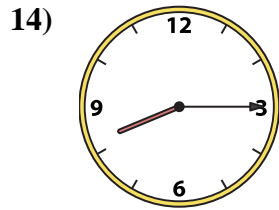
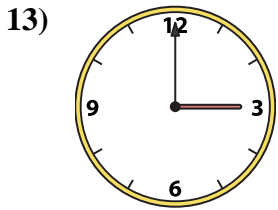
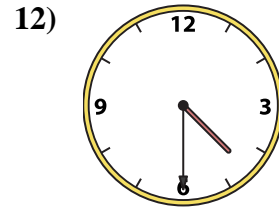
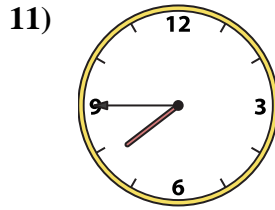
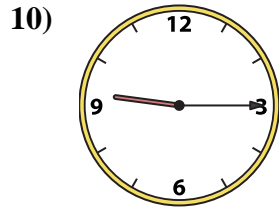
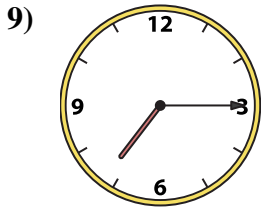
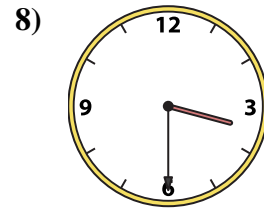
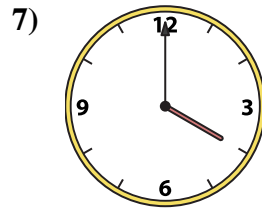
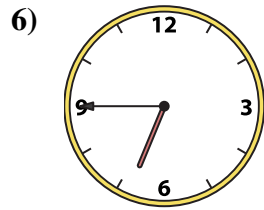
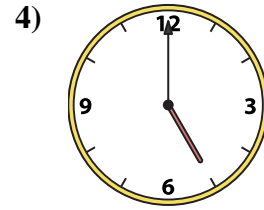
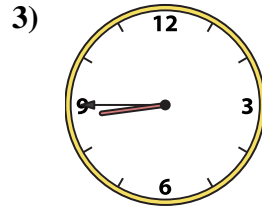
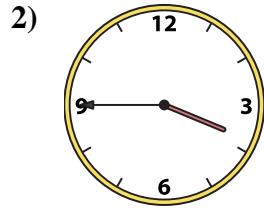
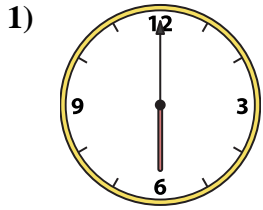
N. 9:15

O. 6:00

P. 4:30



Faites correspondre l'horloge analogique à l'horloge numérique.



A. 5:00

B. 8:45

C. 3:15

D. 3:30

E. 3:00

F. 7:45

G. 12:15

H. 1:30

I. 3:45

J. 6:45

K. 4:00

L. 7:15

M. 8:15

N. 9:15

O. 6:00

P. 4:30

Réponses

1. **O**

2. **I**

3. **B**

4. **A**

5. **C**

6. **J**

7. **K**

8. **D**

9. **L**

10. **N**

11. **F**

12. **P**

13. **E**

14. **M**

15. **H**

16. **G**