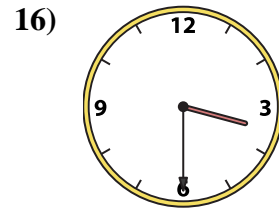
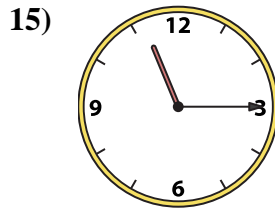
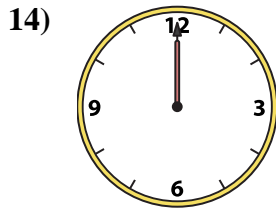
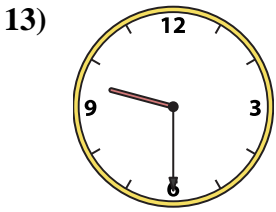
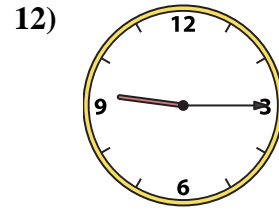
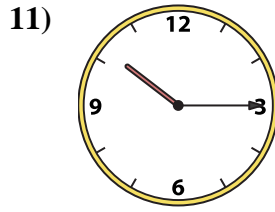
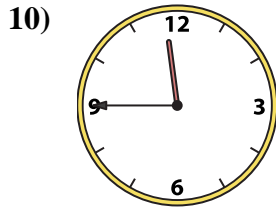

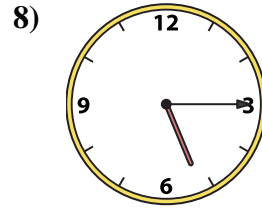
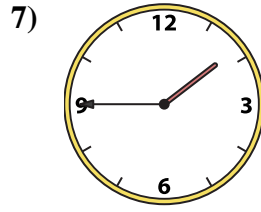
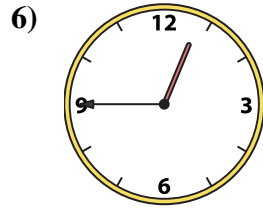
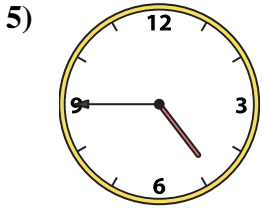
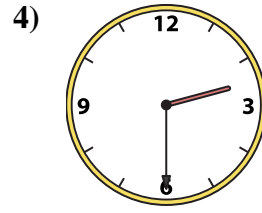
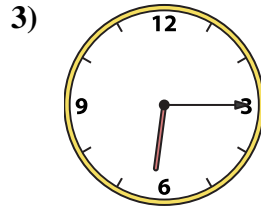
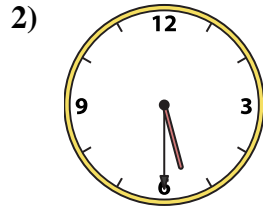
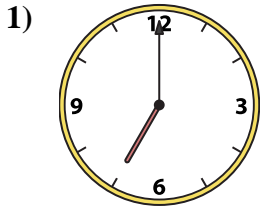




Faites correspondre l'horloge analogique à l'horloge numérique.

Réponses



A. 2:00

B. 11:15

C. 4:45

D. 5:15

E. 12:45

F. 2:30

G. 3:30

H. 12:00

I. 1:45

J. 5:30

K. 6:15

L. 10:15

M. 11:45

N. 9:30

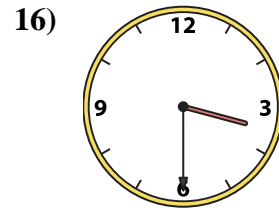
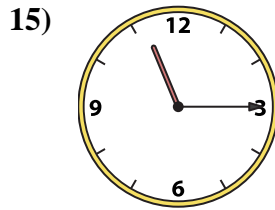
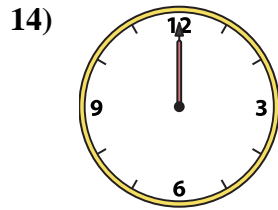
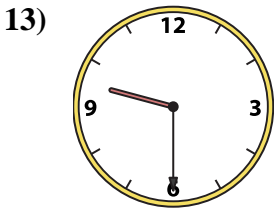
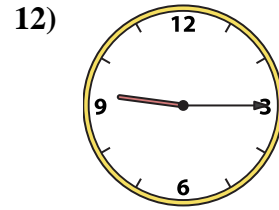
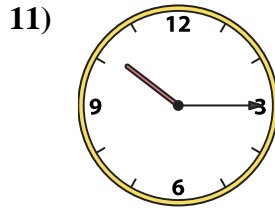
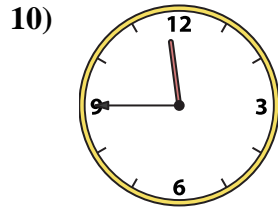
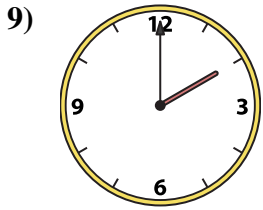
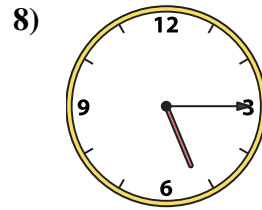
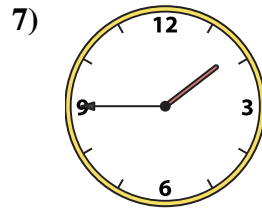
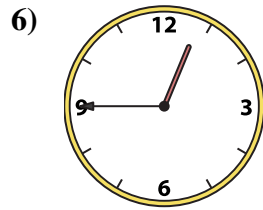
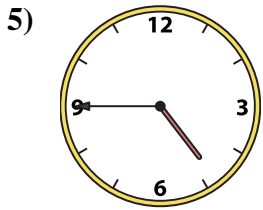
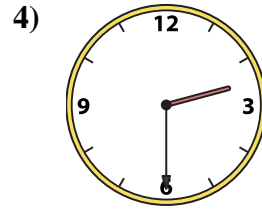
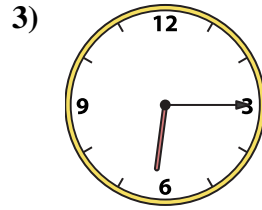
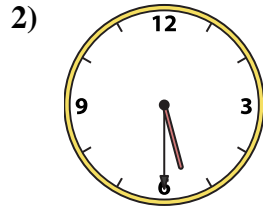
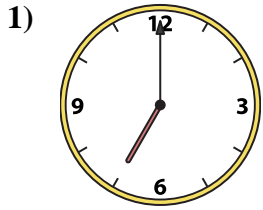
O. 9:15

P. 7:00

1. \_\_\_\_\_
2. \_\_\_\_\_
3. \_\_\_\_\_
4. \_\_\_\_\_
5. \_\_\_\_\_
6. \_\_\_\_\_
7. \_\_\_\_\_
8. \_\_\_\_\_
9. \_\_\_\_\_
10. \_\_\_\_\_
11. \_\_\_\_\_
12. \_\_\_\_\_
13. \_\_\_\_\_
14. \_\_\_\_\_
15. \_\_\_\_\_
16. \_\_\_\_\_



Faites correspondre l'horloge analogique à l'horloge numérique.



A. **2:00**

B. **11:15**

C. **4:45**

D. **5:15**

E. **12:45**

F. **2:30**

G. **3:30**

H. **12:00**

I. **1:45**

J. **5:30**

K. **6:15**

L. **10:15**

M. **11:45**

N. **9:30**

O. **9:15**

P. **7:00**

**Réponses**

1. **P**

2. **J**

3. **K**

4. **F**

5. **C**

6. **E**

7. **I**

8. **D**

9. **A**

10. **M**

11. **L**

12. **O**

13. **N**

14. **H**

15. **B**

16. **G**