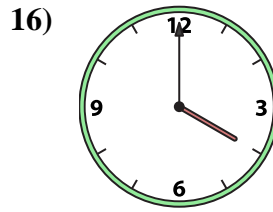
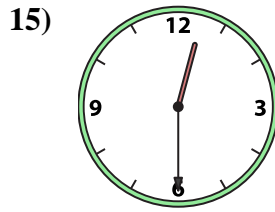
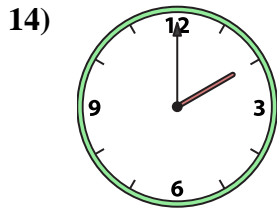
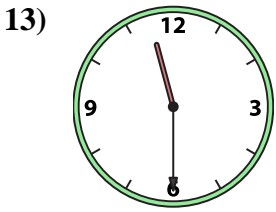
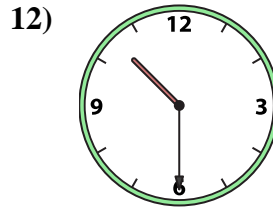
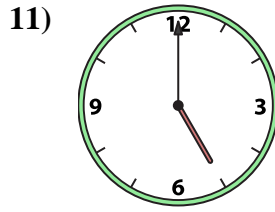
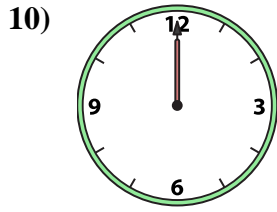
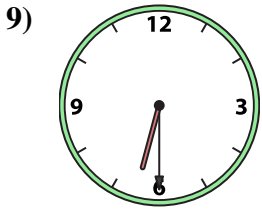
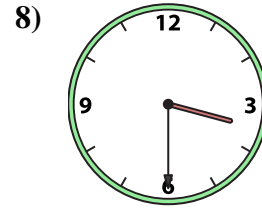
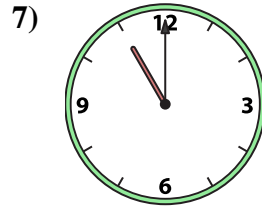
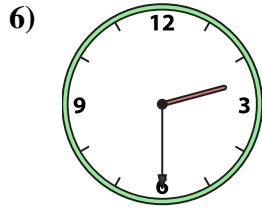
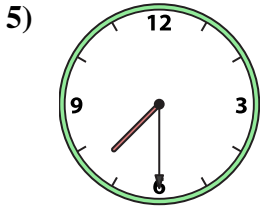
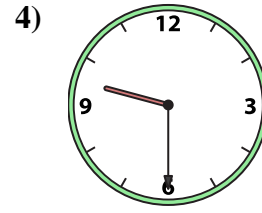
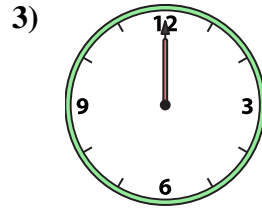
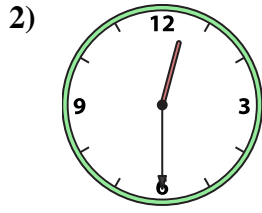
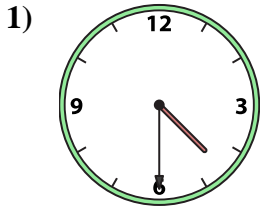




Faites correspondre l'horloge analogique à l'horloge numérique.

Réponses



A. 2:00

B. 6:30

C. 7:30

D. 12:30

E. 12:30

F. 10:30

G. 4:00

H. 9:30

I. 2:30

J. 11:30

K. 3:30

L. 11:00

M. 12:00

N. 5:00

O. 12:00

P. 4:30

1. _____

2. _____

3. _____

4. _____

5. _____

6. _____

7. _____

8. _____

9. _____

10. _____

11. _____

12. _____

13. _____

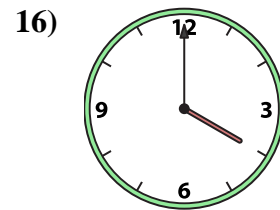
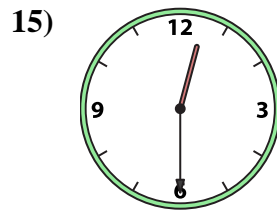
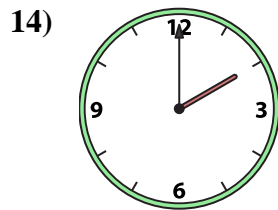
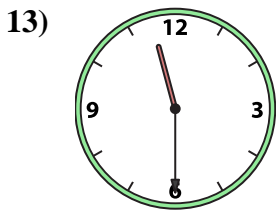
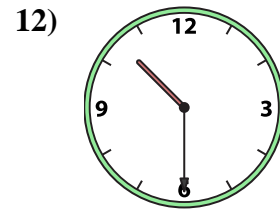
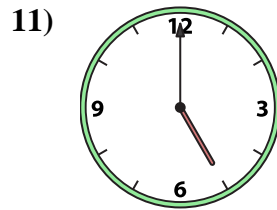
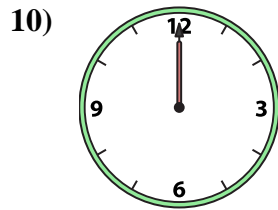
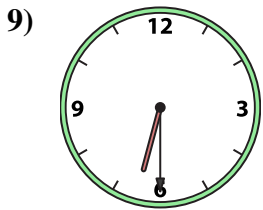
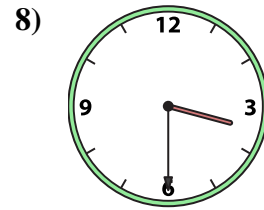
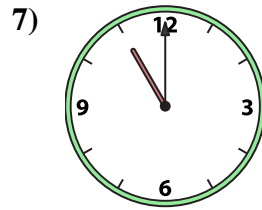
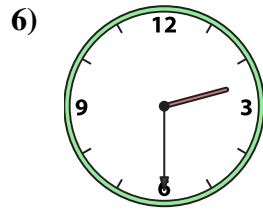
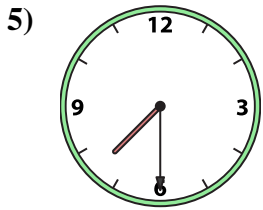
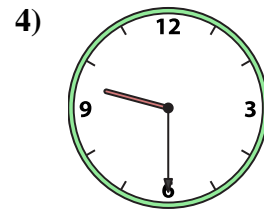
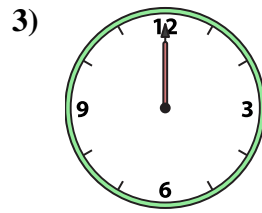
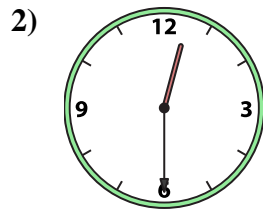
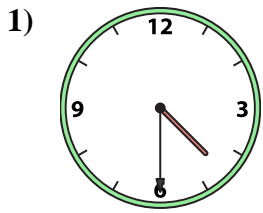
14. _____

15. _____

16. _____



Faites correspondre l'horloge analogique à l'horloge numérique.



A.

B.

C.

D.

E.

F.

G.

H.

I.

J.

K.

L.

M.

N.

O.

P.

Réponses

1.

2.

3.

4.

5.

6.

7.

8.

9.

10.

11.

12.

13.

14.

15.

16.