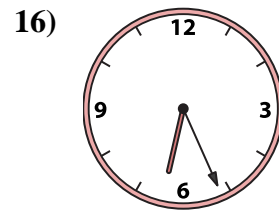
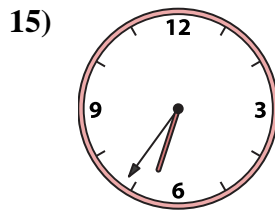
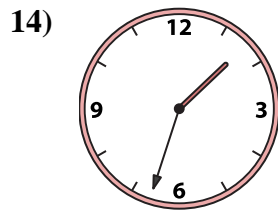
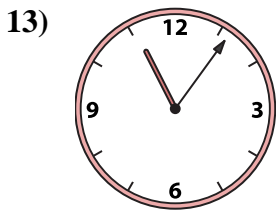
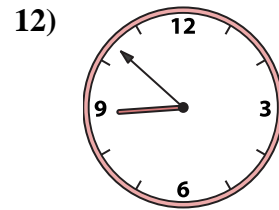
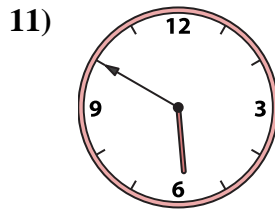
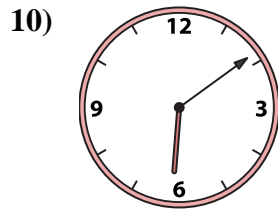

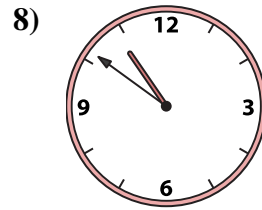
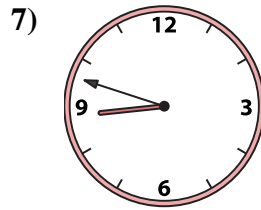
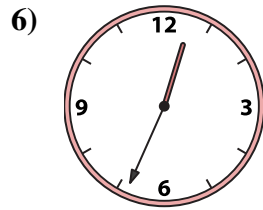
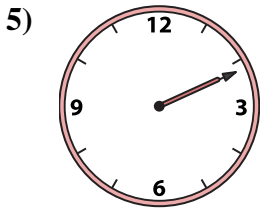
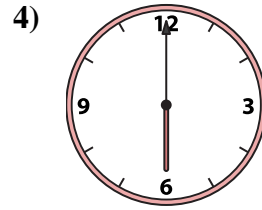
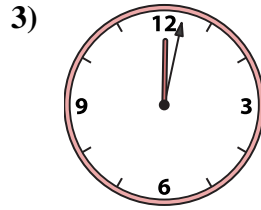
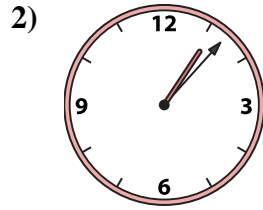





Faites correspondre l'horloge analogique à l'horloge numérique.

Réponses



1. _____

2. _____

3. _____

4. _____

5. _____

6. _____

7. _____

8. _____

9. _____

10. _____

11. _____

12. _____

13. _____

14. _____

15. _____

16. _____

A. 6:09

B. 1:33

C. 6:00

D. 6:36

E. 12:02

F. 2:11

G. 12:34

H. 10:51

I. 1:07

J. 8:48

K. 8:52

L. 5:50

M. 6:26

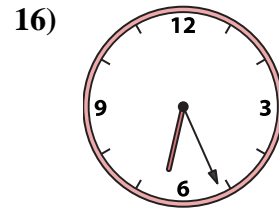
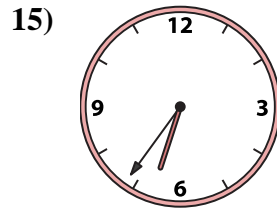
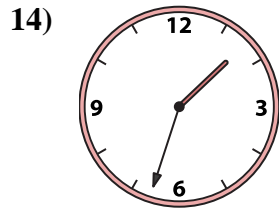
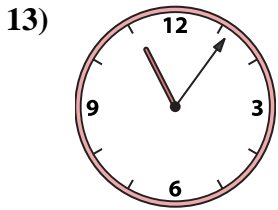
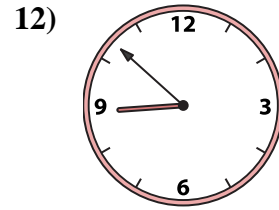
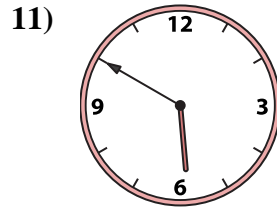
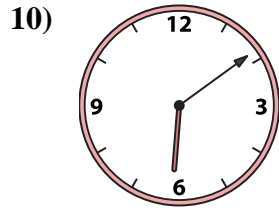

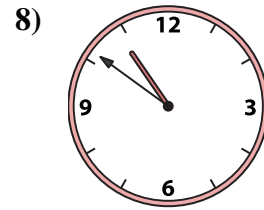
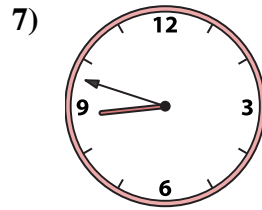
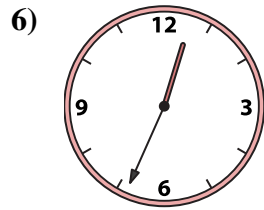
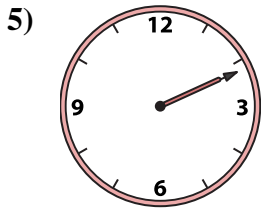
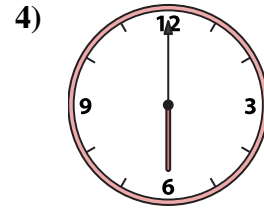
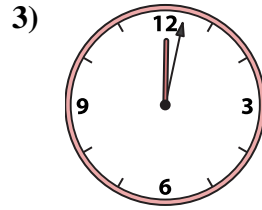
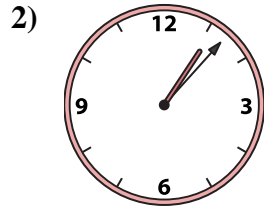
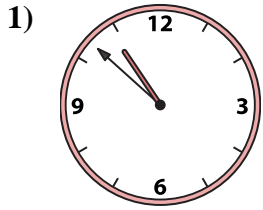
N. 10:57

O. 10:52

P. 11:06



Faites correspondre l'horloge analogique à l'horloge numérique.



A. **6:09**

B. **1:33**

C. **6:00**

D. **6:36**

E. **12:02**

F. **2:11**

G. **12:34**

H. **10:51**

I. **1:07**

J. **8:48**

K. **8:52**

L. **5:50**

M. **6:26**

N. **10:57**

O. **10:52**

P. **11:06**

Réponses

1. **O**

2. **I**

3. **E**

4. **C**

5. **F**

6. **G**

7. **J**

8. **H**

9. **N**

10. **A**

11. **L**

12. **K**

13. **P**

14. **B**

15. **D**

16. **M**