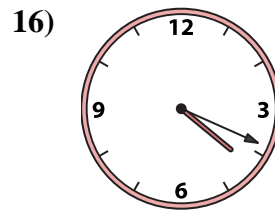
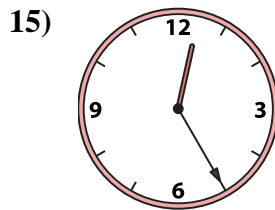
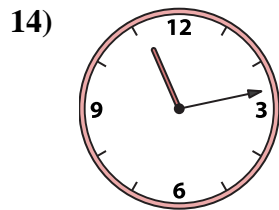
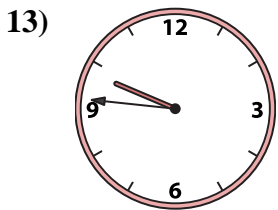
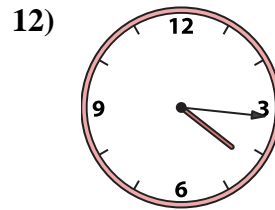
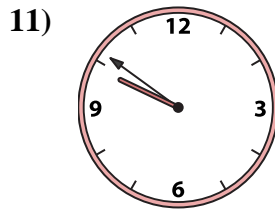
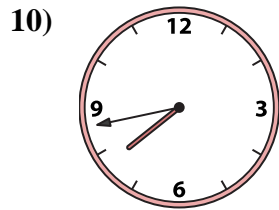
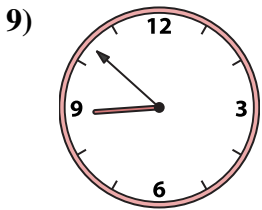
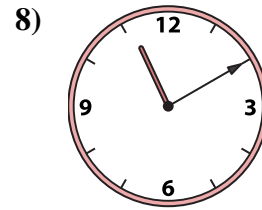
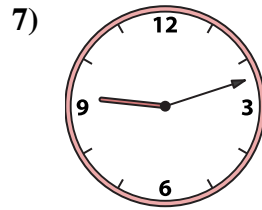
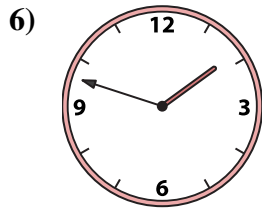
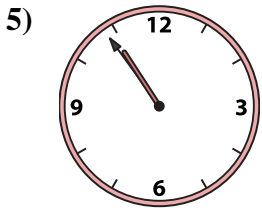
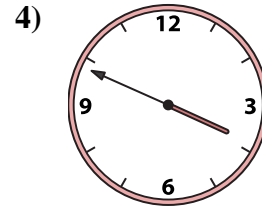
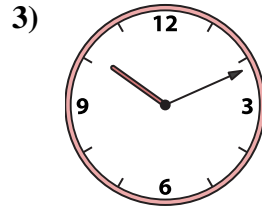
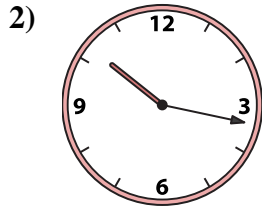
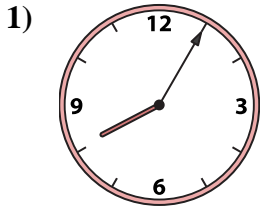




Faites correspondre l'horloge analogique à l'horloge numérique.

Réponses



1. _____

2. _____

3. _____

4. _____

5. _____

6. _____

7. _____

8. _____

9. _____

10. _____

11. _____

12. _____

13. _____

14. _____

15. _____

16. _____

A. 10:11

B. 4:19

C. 9:46

D. 11:13

E. 1:48

F. 8:52

G. 10:54

H. 9:51

I. 12:25

J. 8:05

K. 10:17

L. 9:12

M. 4:16

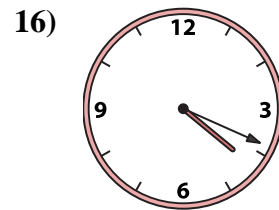
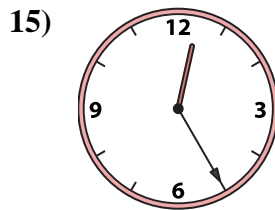
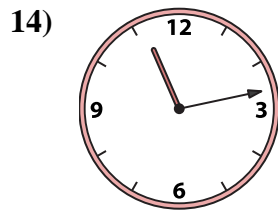
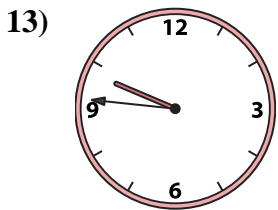
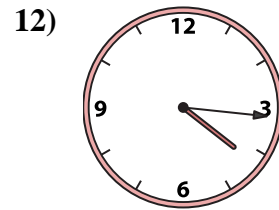
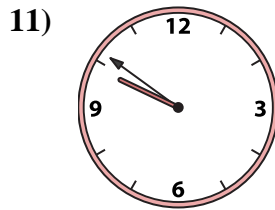
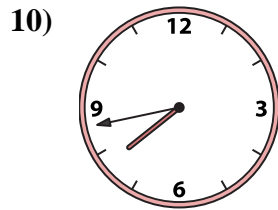
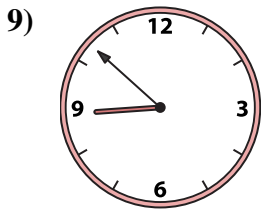
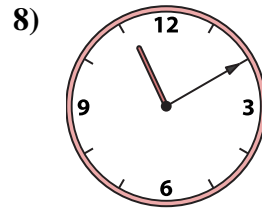
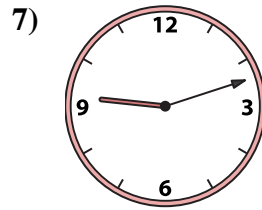
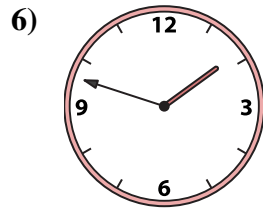
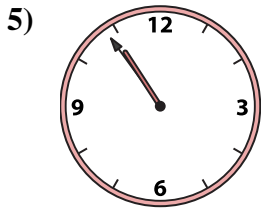
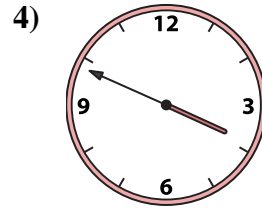
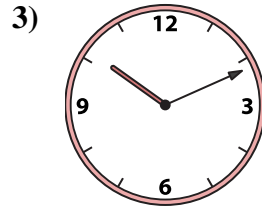
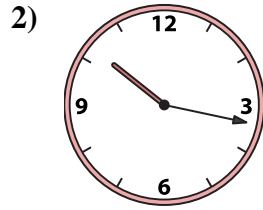
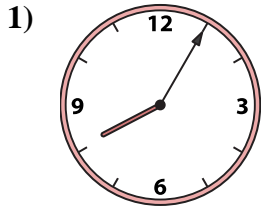
N. 7:43

O. 3:49

P. 11:10



Faites correspondre l'horloge analogique à l'horloge numérique.



A. 10:11

B. 4:19

C. 9:46

D. 11:13

E. 1:48

F. 8:52

G. 10:54

H. 9:51

I. 12:25

J. 8:05

K. 10:17

L. 9:12

M. 4:16

N. 7:43

O. 3:49

P. 11:10

Réponses

1. **J**

2. **K**

3. **A**

4. **O**

5. **G**

6. **E**

7. **L**

8. **P**

9. **F**

10. **N**

11. **H**

12. **M**

13. **C**

14. **D**

15. **I**

16. **B**