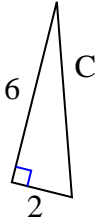




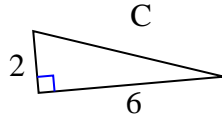
Trouvez la valeur de C, avec un arrondi au centième.

**Réponses**

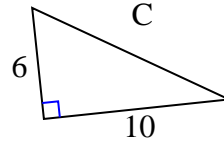
1)



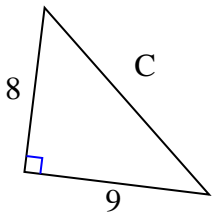
2)



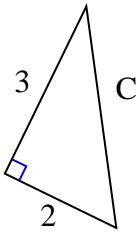
3)



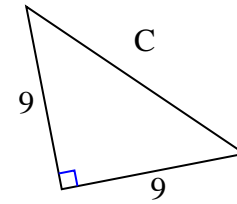
4)



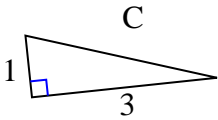
5)



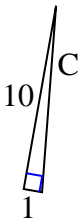
6)



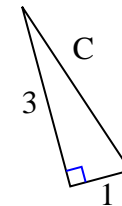
7)



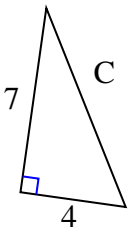
8)



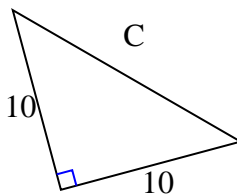
9)



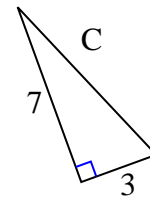
10)



11)



12)

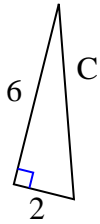


1. \_\_\_\_\_
2. \_\_\_\_\_
3. \_\_\_\_\_
4. \_\_\_\_\_
5. \_\_\_\_\_
6. \_\_\_\_\_
7. \_\_\_\_\_
8. \_\_\_\_\_
9. \_\_\_\_\_
10. \_\_\_\_\_
11. \_\_\_\_\_
12. \_\_\_\_\_



Trouvez la valeur de C, avec un arrondi au centième.

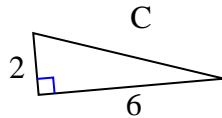
1)



$$36 + 4 = 40$$

$$\sqrt{40} = 6,32$$

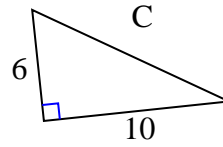
2)



$$4 + 36 = 40$$

$$\sqrt{40} = 6,32$$

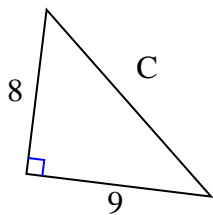
3)



$$36 + 100 = 136$$

$$\sqrt{136} = 11,66$$

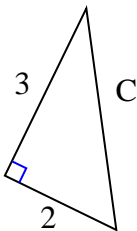
4)



$$64 + 81 = 145$$

$$\sqrt{145} = 12,04$$

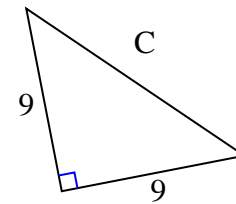
5)



$$9 + 4 = 13$$

$$\sqrt{13} = 3,61$$

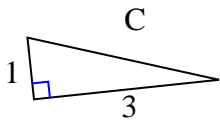
6)



$$81 + 81 = 162$$

$$\sqrt{162} = 12,73$$

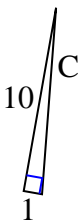
7)



$$1 + 9 = 10$$

$$\sqrt{10} = 3,16$$

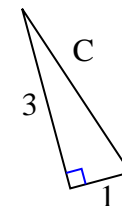
8)



$$100 + 1 = 101$$

$$\sqrt{101} = 10,05$$

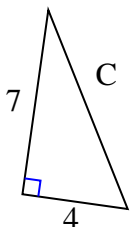
9)



$$9 + 1 = 10$$

$$\sqrt{10} = 3,16$$

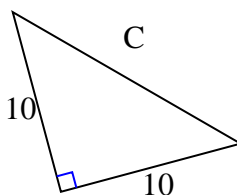
10)



$$49 + 16 = 65$$

$$\sqrt{65} = 8,06$$

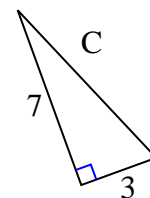
11)



$$100 + 100 = 200$$

$$\sqrt{200} = 14,14$$

12)



$$49 + 9 = 58$$

$$\sqrt{58} = 7,62$$

**Réponses**1. **6,32**2. **6,32**3. **11,66**4. **12,04**5. **3,61**6. **12,73**7. **3,16**8. **10,05**9. **3,16**10. **8,06**11. **14,14**12. **7,62**