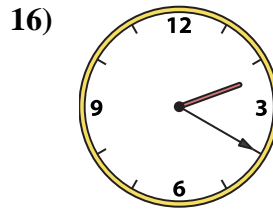
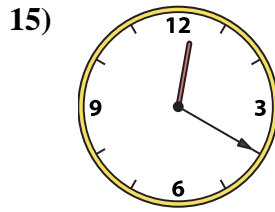
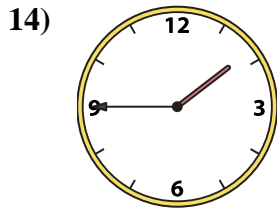
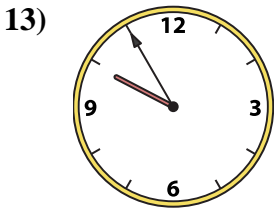
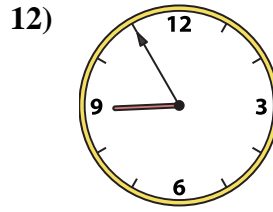
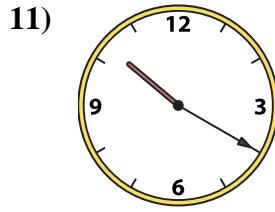
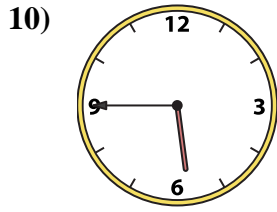
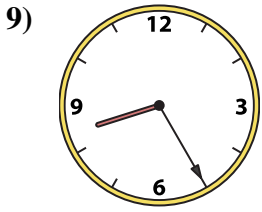
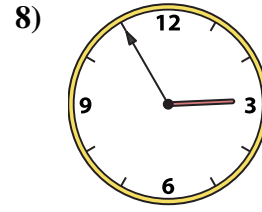
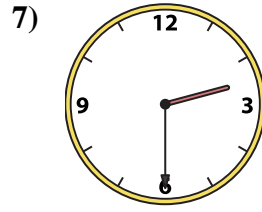
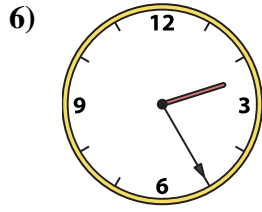
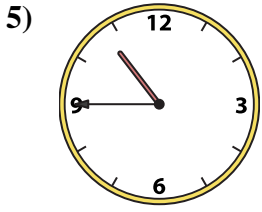
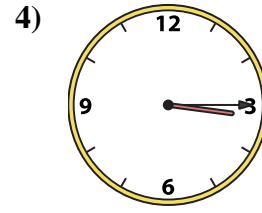
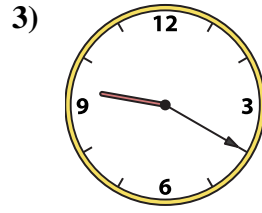
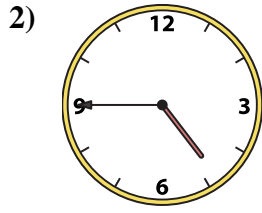





Faites correspondre l'horloge analogique à l'horloge numérique.

Réponses



1. _____
2. _____
3. _____
4. _____
5. _____
6. _____
7. _____
8. _____
9. _____
10. _____
11. _____
12. _____
13. _____
14. _____
15. _____
16. _____

A. 12:20

B. 8:25

C. 1:45

D. 3:15

E. 2:55

F. 4:45

G. 2:20

H. 2:25

I. 10:45

J. 9:20

K. 10:20

L. 5:45

M. 2:30

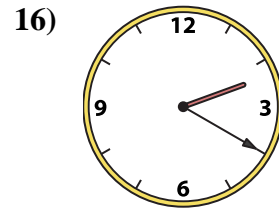
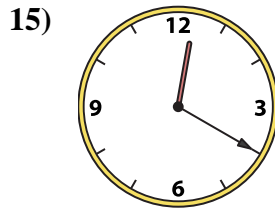
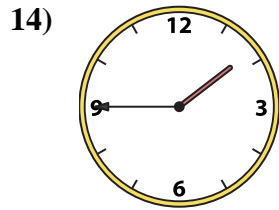
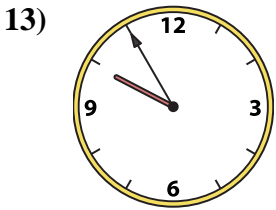
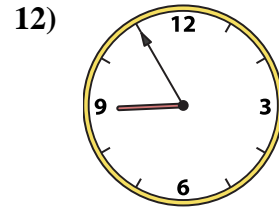
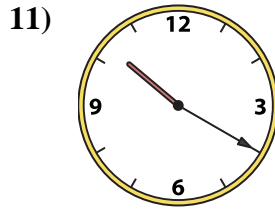
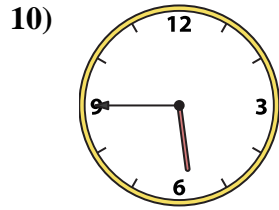
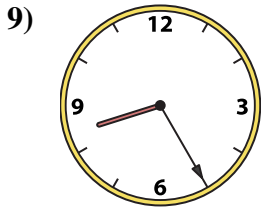
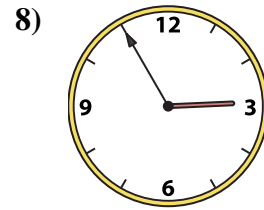
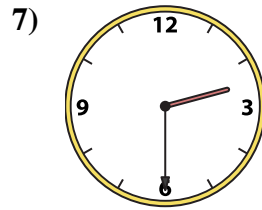
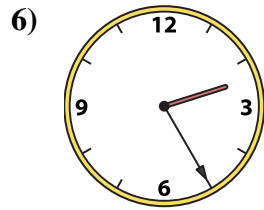
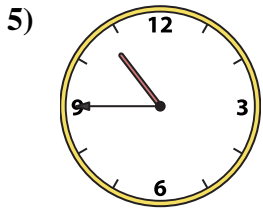
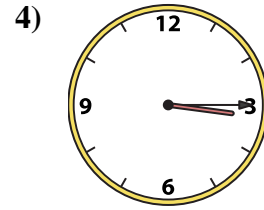
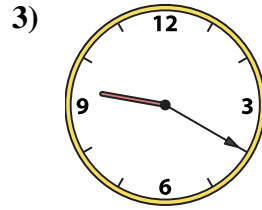
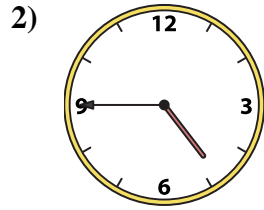
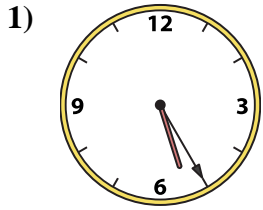
N. 9:55

O. 8:55

P. 5:25



Faites correspondre l'horloge analogique à l'horloge numérique.



A. 12:20

B. 8:25

C. 1:45

D. 3:15

E. 2:55

F. 4:45

G. 2:20

H. 2:25

I. 10:45

J. 9:20

K. 10:20

L. 5:45

M. 2:30

N. 9:55

O. 8:55

P. 5:25

Réponses

1. **P**

2. **F**

3. **J**

4. **D**

5. **I**

6. **H**

7. **M**

8. **E**

9. **B**

10. **L**

11. **K**

12. **O**

13. **N**

14. **C**

15. **A**

16. **G**