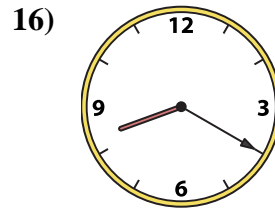
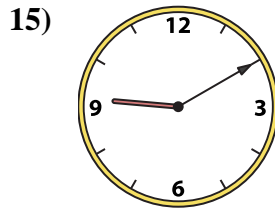
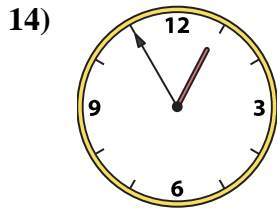
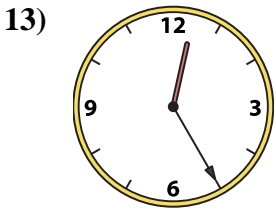
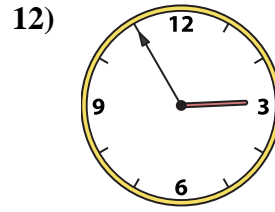
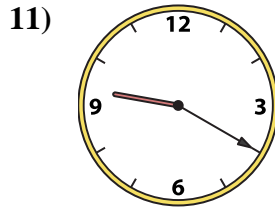
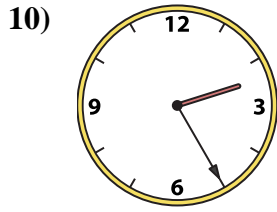
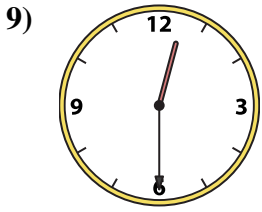
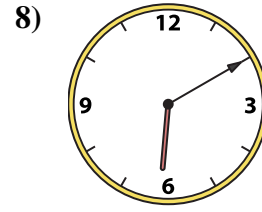
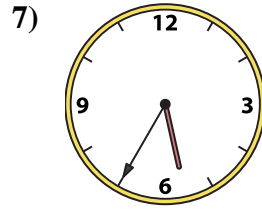
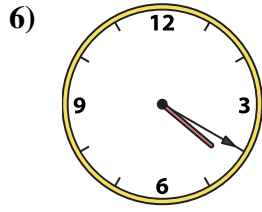

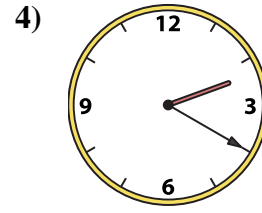
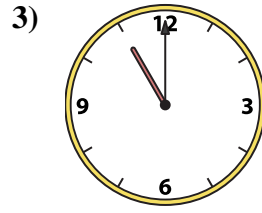
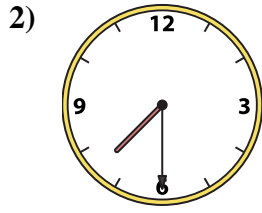
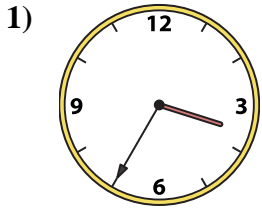




Faites correspondre l'horloge analogique à l'horloge numérique.

Réponses



1. _____
2. _____
3. _____
4. _____
5. _____
6. _____
7. _____
8. _____
9. _____
10. _____
11. _____
12. _____
13. _____
14. _____
15. _____
16. _____

A. 8:20

B. 4:20

C. 9:10

D. 2:20

E. 11:00

F. 7:30

G. 12:30

H. 12:35

I. 9:20

J. 12:25

K. 3:35

L. 12:55

M. 2:25

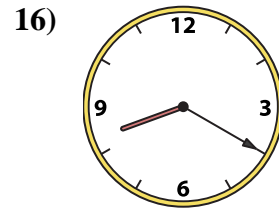
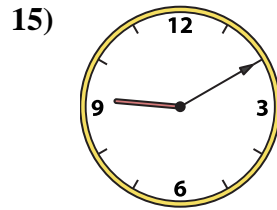
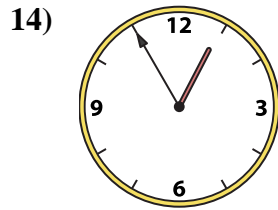
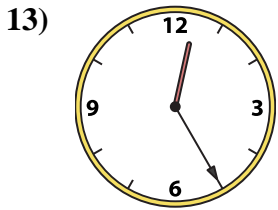
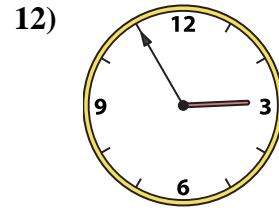
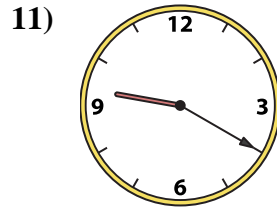
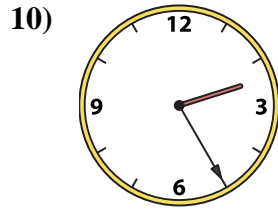
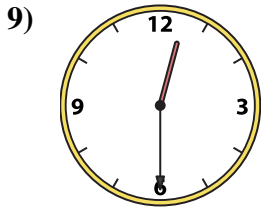
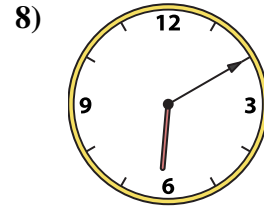
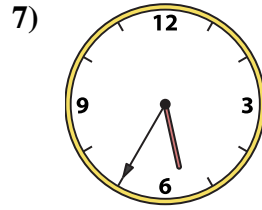
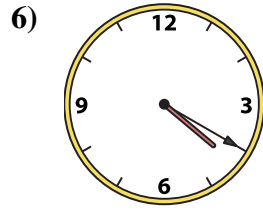
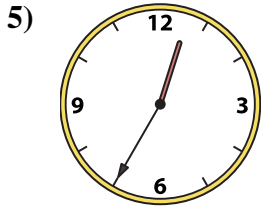
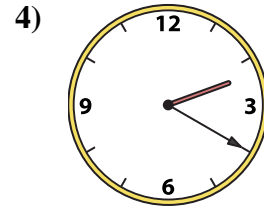
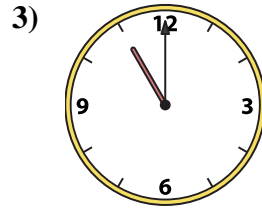
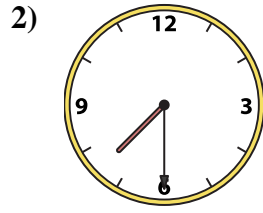
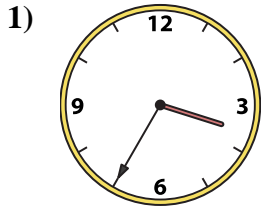
N. 2:55

O. 6:10

P. 5:35



Faites correspondre l'horloge analogique à l'horloge numérique.



A. 8:20

B. 4:20

C. 9:10

D. 2:20

E. 11:00

F. 7:30

G. 12:30

H. 12:35

I. 9:20

J. 12:25

K. 3:35

L. 12:55

M. 2:25

N. 2:55

O. 6:10

P. 5:35

Réponses

1. **K**

2. **F**

3. **E**

4. **D**

5. **H**

6. **B**

7. **P**

8. **O**

9. **G**

10. **M**

11. **I**

12. **N**

13. **J**

14. **L**

15. **C**

16. **A**