



Déterminez combien de groupes de 100 peuvent être créés à partir des blocs affichés.

Réponses

Ex)

Ex. 2

1)

1. _____

2)

2. _____

3)

3. _____

4)

4. _____

5)

5. _____

6)

6. _____

7)

7. _____

8)

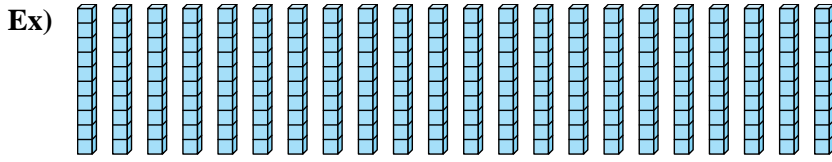
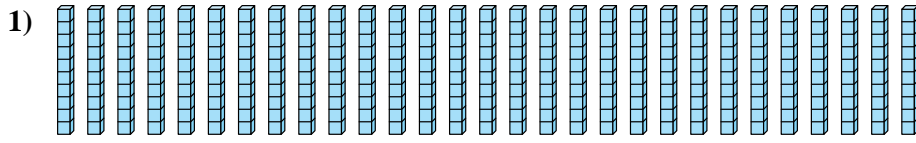
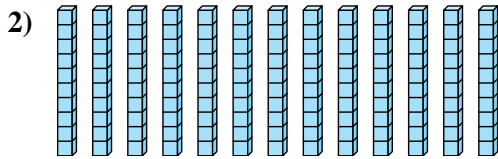
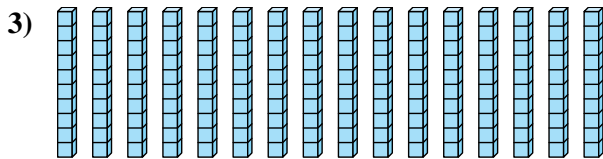
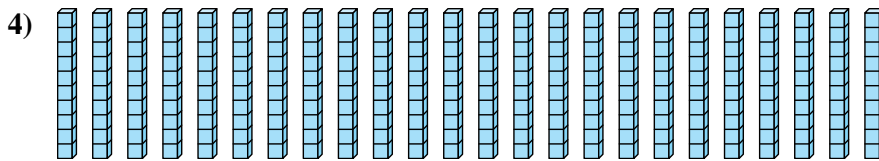
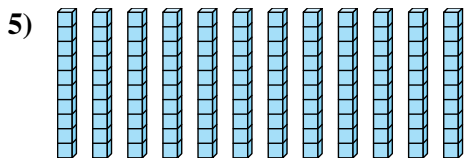
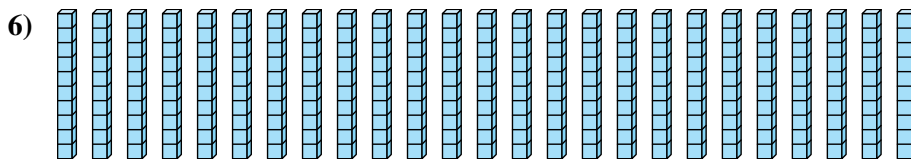
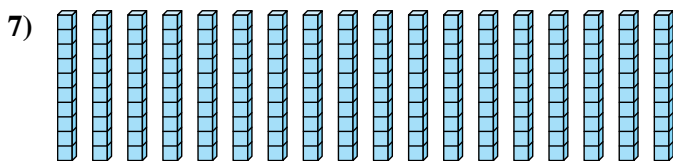
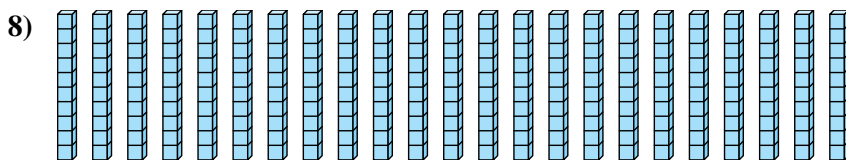
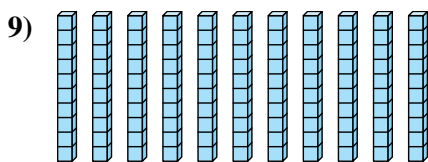
8. _____

9)

9. _____



Déterminez combien de groupes de 100 peuvent être créés à partir des blocs affichés.

RéponsesEx. 21. 22. 13. 14. 25. 16. 27. 18. 29. 1