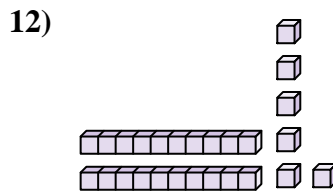
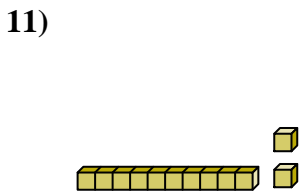
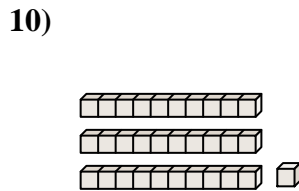
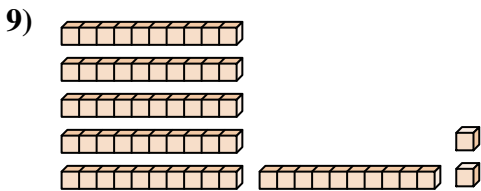
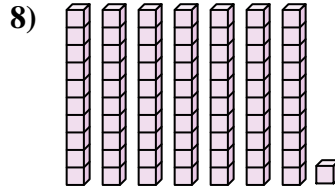
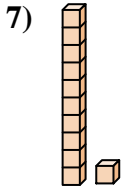
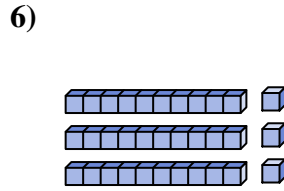
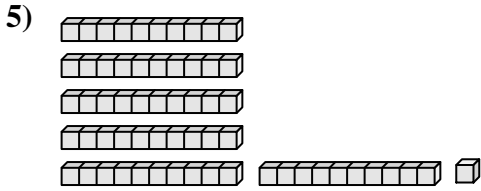
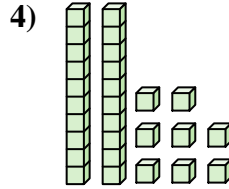
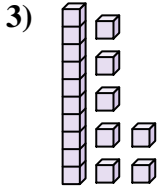
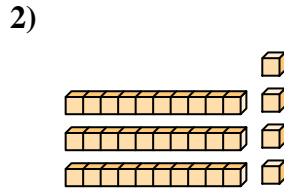
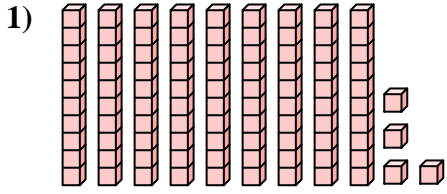




Comptez le nombre total de blocs.

Réponses



1. _____

2. _____

3. _____

4. _____

5. _____

6. _____

7. _____

8. _____

9. _____

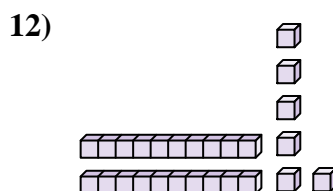

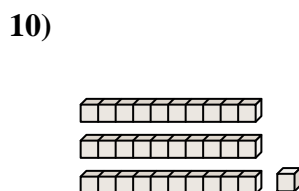
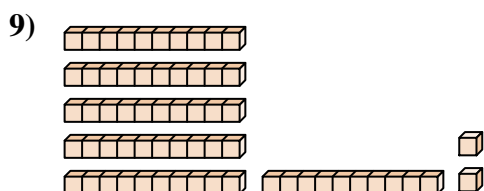
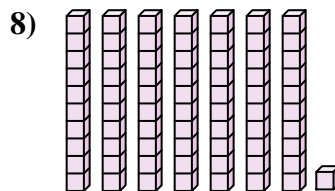
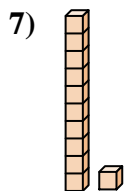
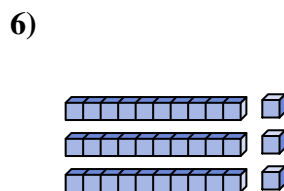
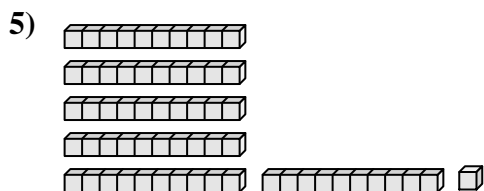
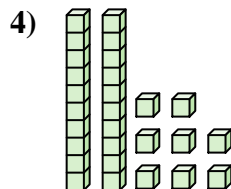
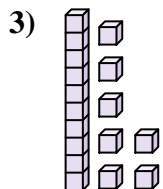
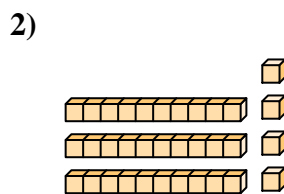
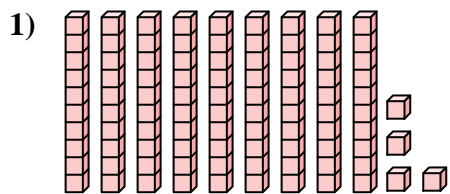
10. _____

11. _____

12. _____



Comptez le nombre total de blocs.



Réponses

1. 94

2. 34

3. 17

4. 28

5. 61

6. 33

7. 11

8. 71

9. 62

10. 31

11. 12

12. 26



Comptez le nombre total de blocs.

62

11

33

31

61

71

28

17

34

94

Réponses

1. _____
2. _____
3. _____
4. _____
5. _____
6. _____
7. _____
8. _____
9. _____
10. _____

