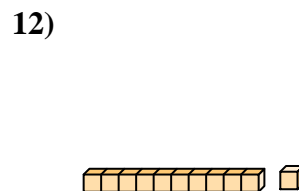
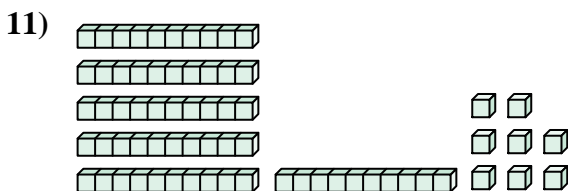
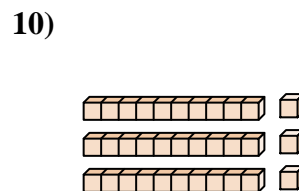
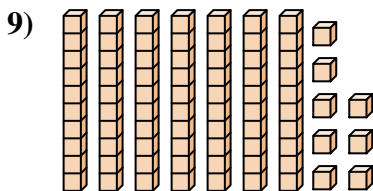
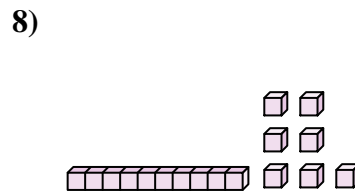
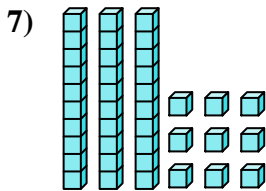
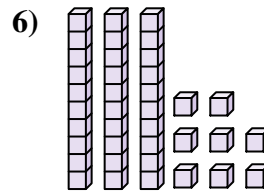
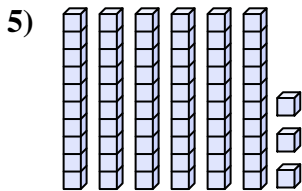
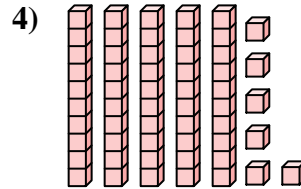
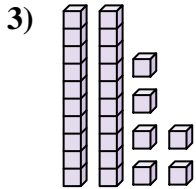
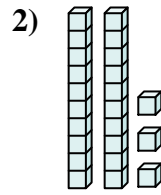
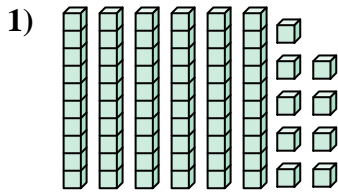




Comptez le nombre total de blocs.

**Réponses**



1. \_\_\_\_\_

2. \_\_\_\_\_

3. \_\_\_\_\_

4. \_\_\_\_\_

5. \_\_\_\_\_

6. \_\_\_\_\_

7. \_\_\_\_\_

8. \_\_\_\_\_

9. \_\_\_\_\_

10. \_\_\_\_\_

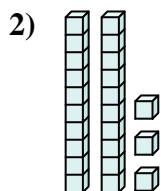
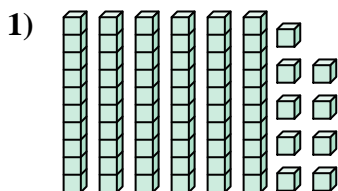
11. \_\_\_\_\_

12. \_\_\_\_\_

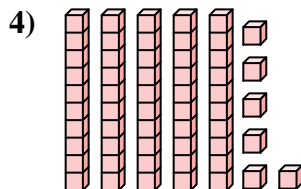
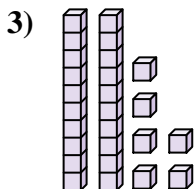


Comptez le nombre total de blocs.

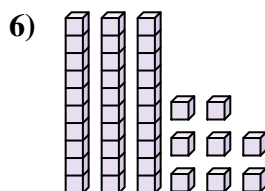
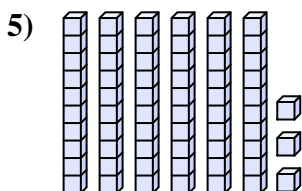
**Réponses**



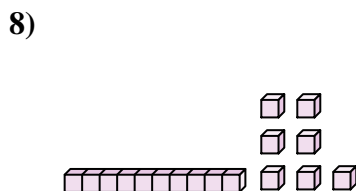
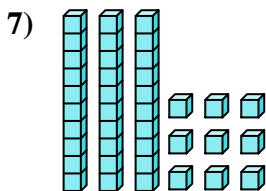
1. 69



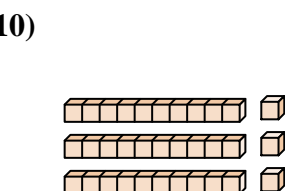
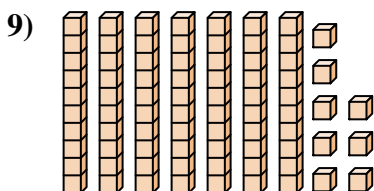
2. 23



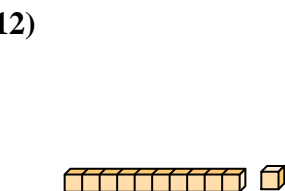
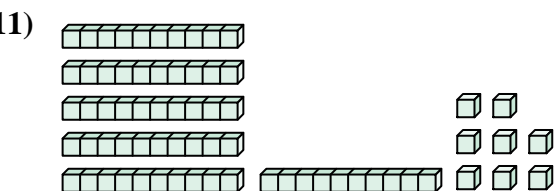
3. 26



4. 56



5. 63



6. 38

7. 39

8. 17

9. 78

10. 33

11. 68

12. 11



Comptez le nombre total de blocs.

23

26

39

17

69

63

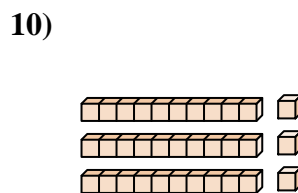
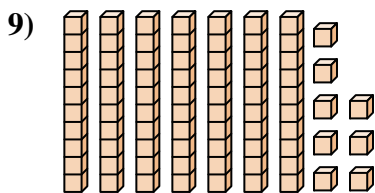
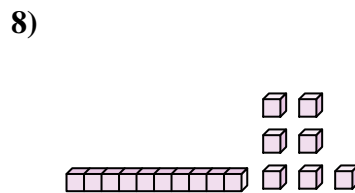
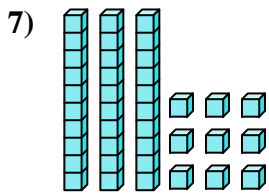
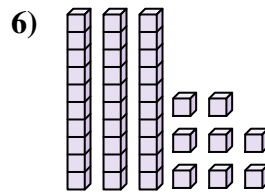
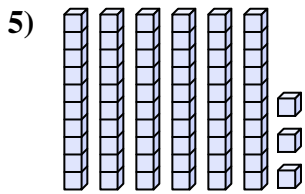
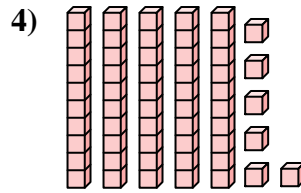
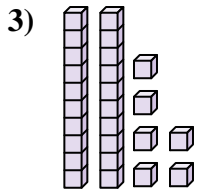
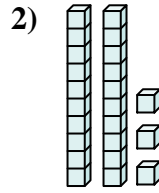
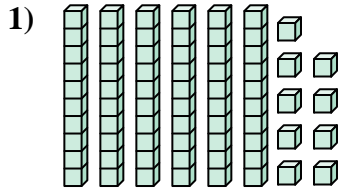
56

78

38

33

Réponses



1. \_\_\_\_\_
2. \_\_\_\_\_
3. \_\_\_\_\_
4. \_\_\_\_\_
5. \_\_\_\_\_
6. \_\_\_\_\_
7. \_\_\_\_\_
8. \_\_\_\_\_
9. \_\_\_\_\_
10. \_\_\_\_\_