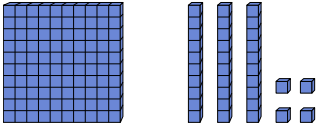




Calculez le nombre de blocs.

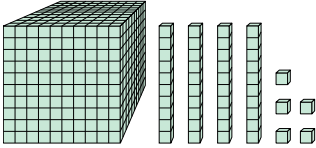
**Réponses**

1)



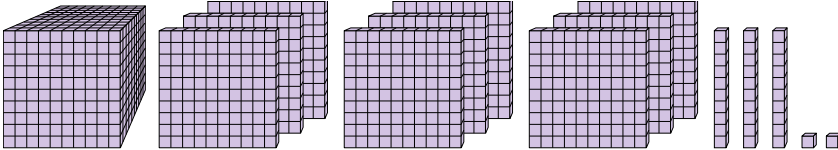
1. \_\_\_\_\_

2)



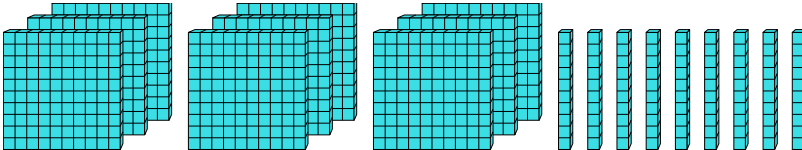
2. \_\_\_\_\_

3)



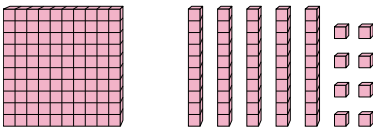
3. \_\_\_\_\_

4)



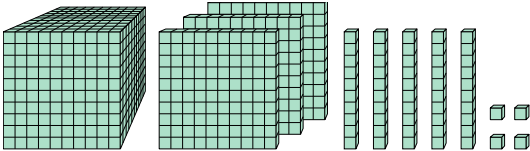
4. \_\_\_\_\_

5)



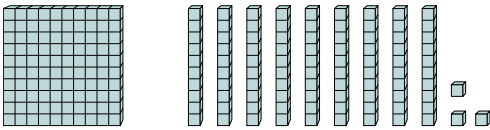
5. \_\_\_\_\_

6)



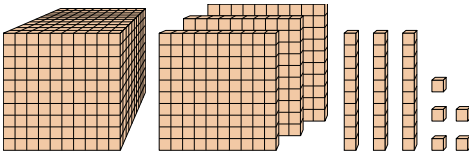
6. \_\_\_\_\_

7)



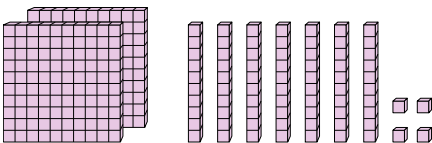
7. \_\_\_\_\_

8)



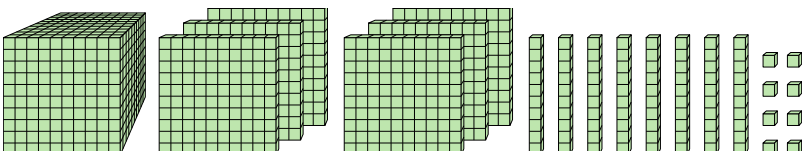
8. \_\_\_\_\_

9)



9. \_\_\_\_\_

10)

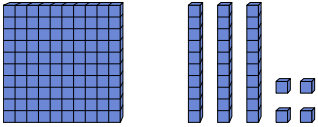


10. \_\_\_\_\_



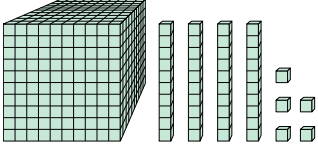
Calculez le nombre de blocs.

1)



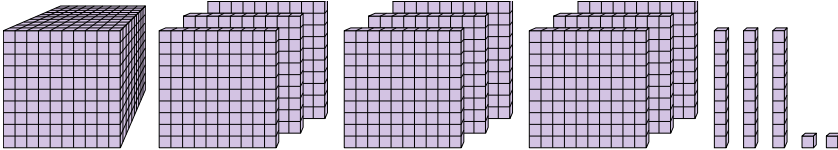
1. 134

2)



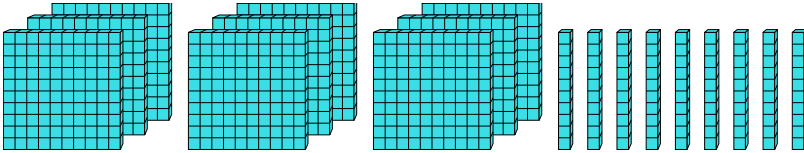
2. 1 045

3)



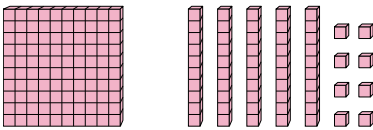
3. 1 932

4)



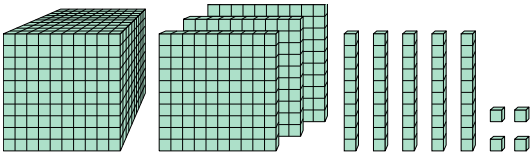
4. 990

5)



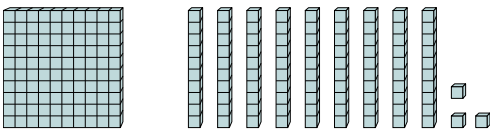
5. 158

6)



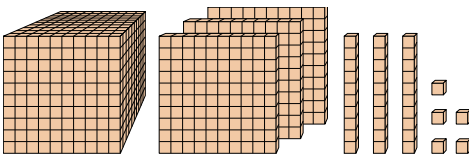
6. 1 354

7)



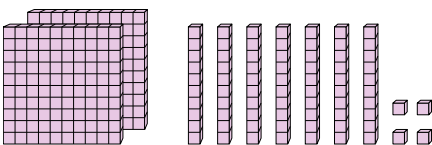
7. 193

8)



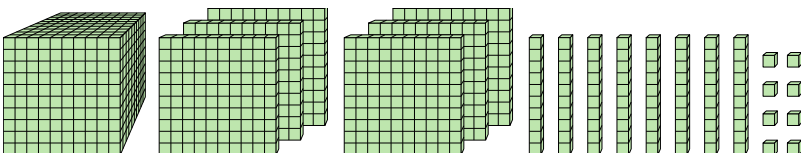
8. 1 335

9)



9. 274

10)



10. 1 688

**Réponses**