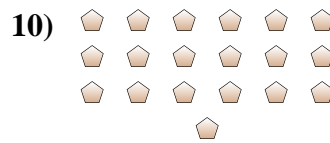
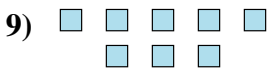
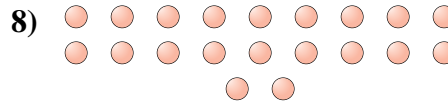
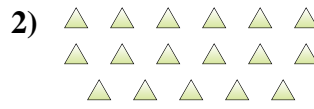
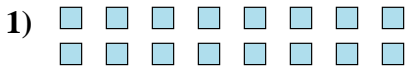




Déterminez si le nombre de figures dans chaque boîte est pair ou impair.

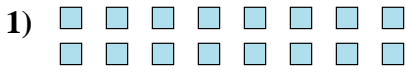
Réponses



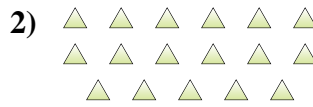
- 1. _____
- 2. _____
- 3. _____
- 4. _____
- 5. _____
- 6. _____
- 7. _____
- 8. _____
- 9. _____
- 10. _____



Déterminez si le nombre de figures dans chaque boîte est pair ou impair.



16



17



5



6



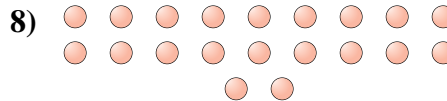
13



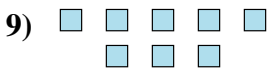
15



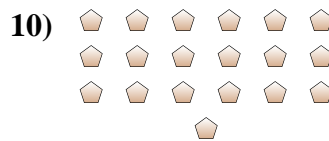
8



20



8



19

Réponses

1. pair

2. impair

3. impair

4. pair

5. impair

6. impair

7. pair

8. pair

9. pair

10. impair