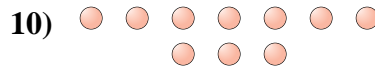
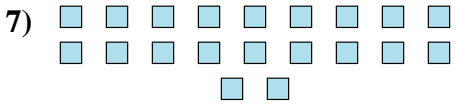
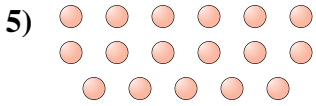
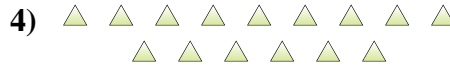
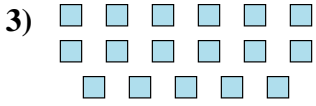
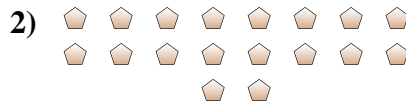




Déterminez si le nombre de figures dans chaque boîte est pair ou impair.

Réponses

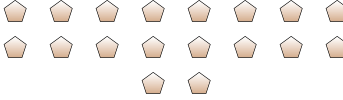


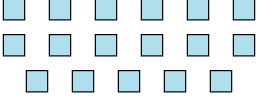
1. _____
2. _____
3. _____
4. _____
5. _____
6. _____
7. _____
8. _____
9. _____
10. _____




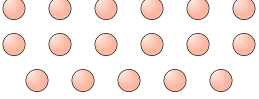
Déterminez si le nombre de figures dans chaque boîte est pair ou impair.


1) 
19

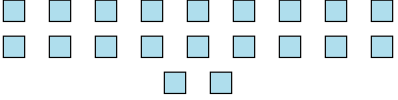
2) 
18


3) 
17

4) 
15

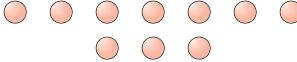
5) 
17

6) 
13

7) 
20

8) 
7

9) 
6

10) 
10

Réponses

1. impair

2. pair

3. impair

4. impair

5. impair

6. impair

7. pair

8. impair

9. pair

10. pair