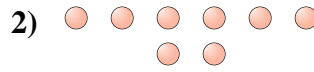
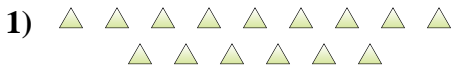




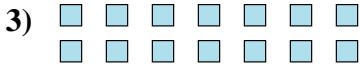
Déterminez si le nombre de figures dans chaque boîte est pair ou impair.

Réponses



1. _____

2. _____



3. _____

4. _____



5. _____

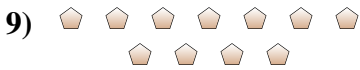
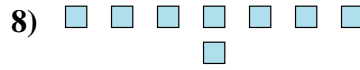
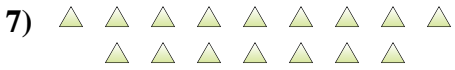
6. _____

7. _____

8. _____

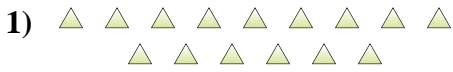
9. _____

10. _____

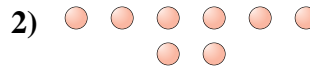




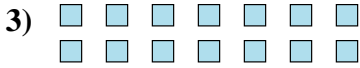
Déterminez si le nombre de figures dans chaque boîte est pair ou impair.



15



8



14



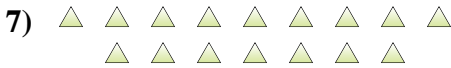
10



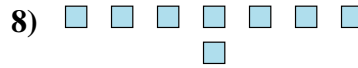
12



8



16



8



11



7

Réponses

1. impair

2. pair

3. pair

4. pair

5. pair

6. pair

7. pair

8. pair

9. impair

10. impair