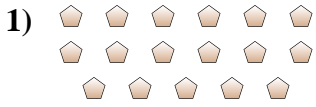




Déterminez si le nombre de figures dans chaque boîte est pair ou impair.

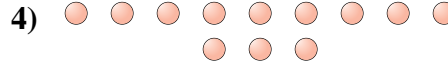
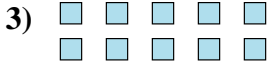
Réponses



1. _____

2. _____

3. _____



4. _____

5. _____



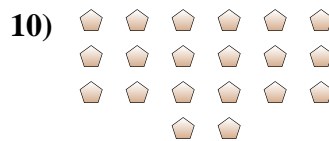
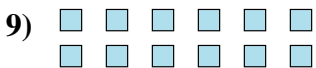
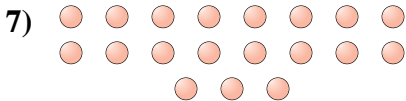
6. _____

7. _____

8. _____

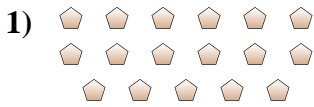
9. _____

10. _____






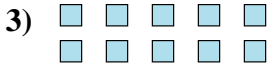
Déterminez si le nombre de figures dans chaque boîte est pair ou impair.



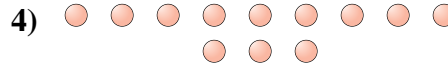
17



9



10



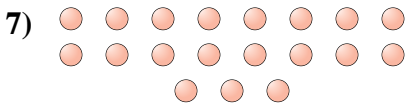
12



12



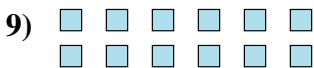
19



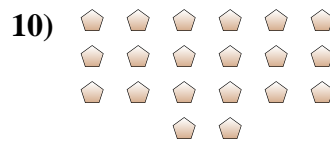
19



6



12



20

Réponses

1. impair

2. impair

3. pair

4. pair

5. pair

6. impair

7. impair

8. pair

9. pair

10. pair