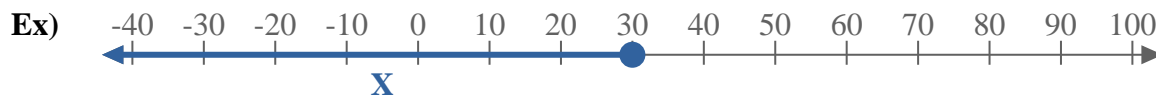


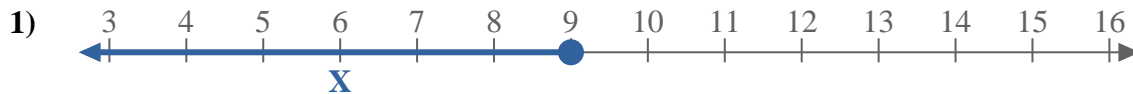


Ecrivez une inégalité à partir d'une droite numérique.



Réponses

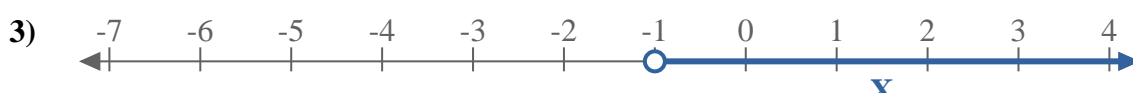
Ex. **$X \leq 30$**



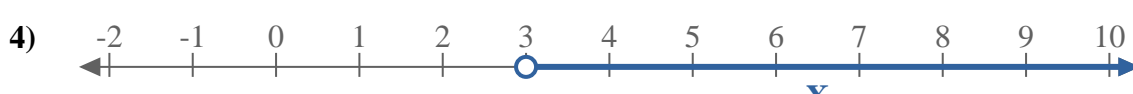
1. _____



2. _____



3. _____



4. _____



5. _____



6. _____



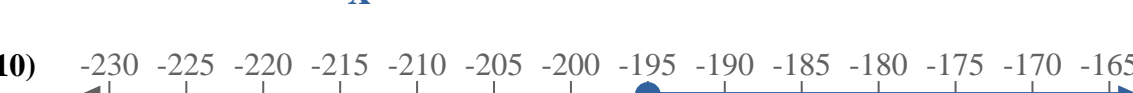
7. _____



8. _____



9. _____



10. _____



11. _____



12. _____

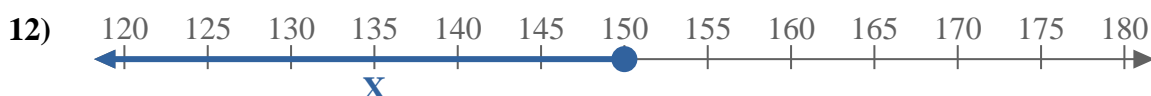
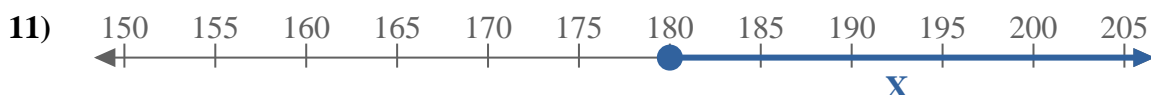
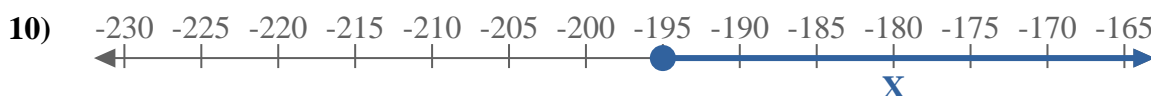
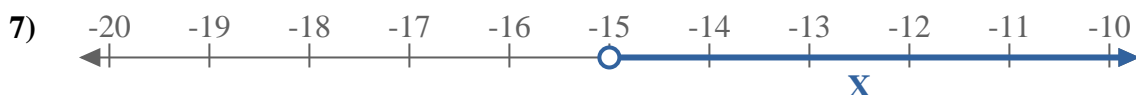
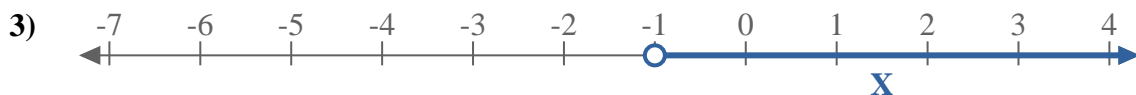
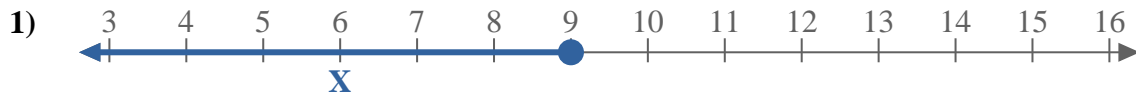
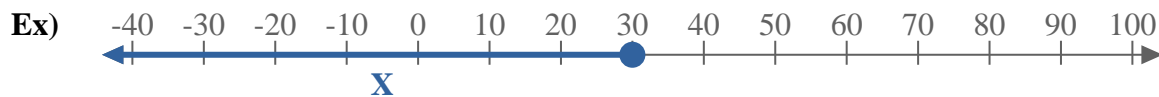


13. _____

13. _____



Ecrivez une inégalité à partir d'une droite numérique.

Réponses

Ex. $X \leq 30$

1. $X \leq 9$

2. $X < -140$

3. $X > -1$

4. $X > 3$

5. $X > 11$

6. $X \leq -11$

7. $X > -15$

8. $X > 5$

9. $X < -12$

10. $X \geq -195$

11. $X \geq 180$

12. $X \leq 150$

13. $X \geq -20$